




Determine the amount of money shown.

Answers



1. \_\_\_\_\_




2. \_\_\_\_\_



3. \_\_\_\_\_



4. \_\_\_\_\_



5. \_\_\_\_\_



6. \_\_\_\_\_



7. \_\_\_\_\_



8. \_\_\_\_\_




9. \_\_\_\_\_



10. \_\_\_\_\_



Determine the amount of money shown.



Answers

1. \$0.96

2. \$0.88

3. \$0.95

4. \$0.89

5. \$0.70

6. \$0.93

7. \$0.94

8. \$0.96

9. \$0.98

10. \$0.85