



Determine the amount of money shown.

Answers



1. \_\_\_\_\_



2. \_\_\_\_\_



3. \_\_\_\_\_




4. \_\_\_\_\_




5. \_\_\_\_\_



6. \_\_\_\_\_



7. \_\_\_\_\_



8. \_\_\_\_\_




9. \_\_\_\_\_



10. \_\_\_\_\_



Determine the amount of money shown.



Answers

1. \$0.52

2. \$0.95

3. \$0.99

4. \$0.70

5. \$0.69

6. \$0.95

7. \$0.95

8. \$0.97

9. \$0.59

10. \$0.66