



# Counting Change (within a dollar)

Name: \_\_\_\_\_

Determine the amount of money shown.

## Answers



1. \_\_\_\_\_



2. \_\_\_\_\_



3. \_\_\_\_\_




4. \_\_\_\_\_



5. \_\_\_\_\_



6. \_\_\_\_\_




7. \_\_\_\_\_



8. \_\_\_\_\_



9. \_\_\_\_\_





10. \_\_\_\_\_



# Counting Change (within a dollar)

Name: **Answer Key**

Determine the amount of money shown.



## Answers

1. **\$0.85**

2. **\$0.60**

3. **\$0.76**

4. **\$0.96**

5. **\$0.98**

6. **\$0.89**

7. **\$0.99**

8. **\$0.88**

9. **\$0.97**

10. **\$0.96**