



Measure the width and height of each block in inches and in centimeters.

**Answers**





Ex. 5 1/2 0 1/2 14 1.3

1.                       

2.                       

3.                       

4.                       







Measure the width and height of each block in inches and in centimeters.

Ex) 

1) 

2) 

3) 

4) 

**Answers**

- Ex.  $\underline{5\frac{1}{2}}$   $\underline{0\frac{1}{2}}$  **14** **1.3**
1.  $\underline{2\frac{1}{2}}$   $\underline{1\frac{1}{2}}$  **6.4** **3.8**
2. **4** **1**  $\underline{10.2}$   $\underline{2.5}$
3. **3**  $\underline{0\frac{1}{2}}$  **7.6** **1.3**
4. **5**  $\underline{1\frac{1}{2}}$   $\underline{12.7}$  **3.8**