
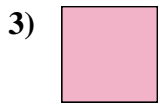




Measure the width of each block in inches and in centimeters.



**Answers**

Ex. 2 1/2 6 - 7

1. \_\_\_\_\_

2. \_\_\_\_\_

3. \_\_\_\_\_

4. \_\_\_\_\_

5. \_\_\_\_\_

6. \_\_\_\_\_



7. \_\_\_\_\_

8. \_\_\_\_\_

9. \_\_\_\_\_



Measure the width of each block in inches and in centimeters.



**Answers**

Ex. 2 1/2 6 - 7

1. 5 12 - 13

2. 1 2 - 3

3. 0 1/2 1 - 2

4. 1 1/2 3 - 4

5. 2 5 - 6

6. 3 1/2 8 - 9

7. 4 10 - 11

8. 5 1/2 13 - 14

9. 3 7 - 8