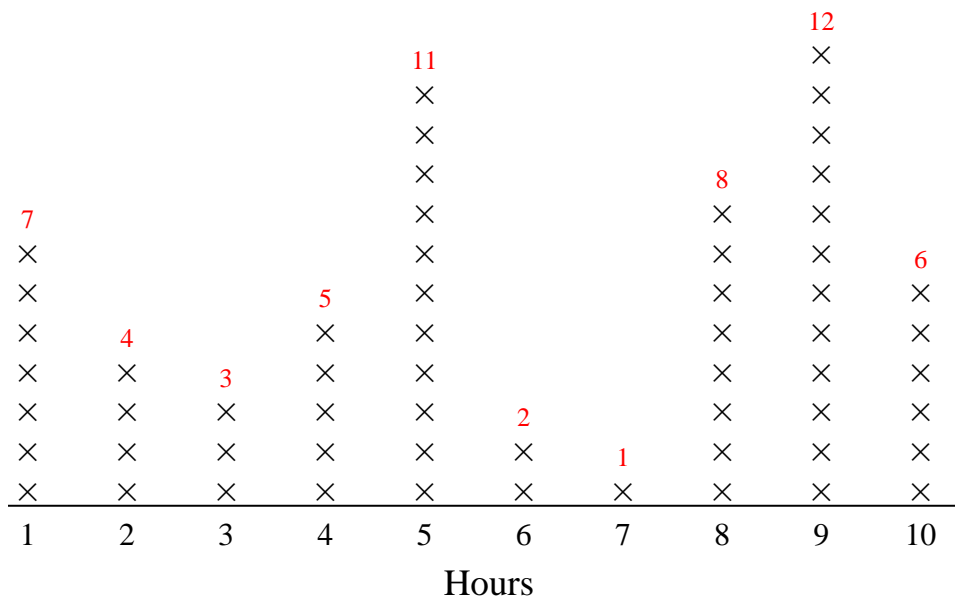




Use the line plots to answer each question.



Each x = 1 car

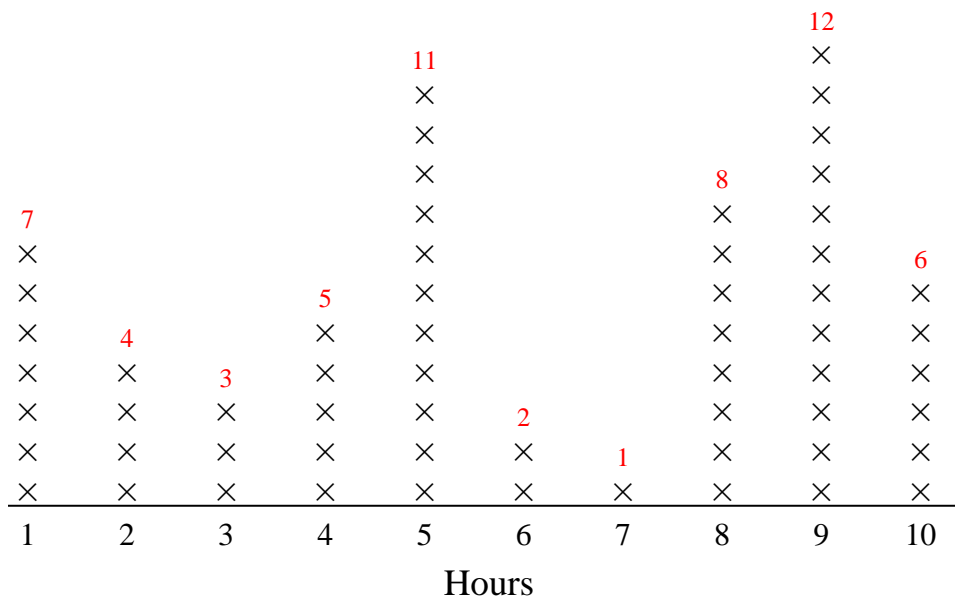
Answers

1. \_\_\_\_\_
2. \_\_\_\_\_
3. \_\_\_\_\_
4. \_\_\_\_\_
5. \_\_\_\_\_
6. \_\_\_\_\_
7. \_\_\_\_\_
8. \_\_\_\_\_
9. \_\_\_\_\_
10. \_\_\_\_\_
11. \_\_\_\_\_

- 1) How many cars did she sell in hour 6?
- 2) How many hours did she sell more than 1 cars?
- 3) Did she sell more cars in hour 6 or in hour 3?
- 4) What is the difference in the number of cars she sold in hour 5 and the number she sold in hour 10?
- 5) What is the combined number of cars she sold in hour 9 and in hour 8?
- 6) Which hour did she sell the fewest cars?
- 7) How many hours did she sell fewer than 5 cars?
- 8) Did she sell fewer cars in hour 2 or in hour 8?
- 9) Which hours (if any) did she sell more than 5 cars?
- 10) She sold the most cars which hour?
- 11) Which hour did she sell exactly 11 cars?



Use the line plots to answer each question.



Each x = 1 car

Answers

1. 2
2. 9
3. 3
4. 5
5. 20
6. 7
7. 4
8. 2
9. 1,5,8,9,10
10. 9
11. 5

- 1) How many cars did she sell in hour 6?
- 2) How many hours did she sell more than 1 cars?
- 3) Did she sell more cars in hour 6 or in hour 3?
- 4) What is the difference in the number of cars she sold in hour 5 and the number she sold in hour 10?
- 5) What is the combined number of cars she sold in hour 9 and in hour 8?
- 6) Which hour did she sell the fewest cars?
- 7) How many hours did she sell fewer than 5 cars?
- 8) Did she sell fewer cars in hour 2 or in hour 8?
- 9) Which hours (if any) did she sell more than 5 cars?
- 10) She sold the most cars which hour?
- 11) Which hour did she sell exactly 11 cars?





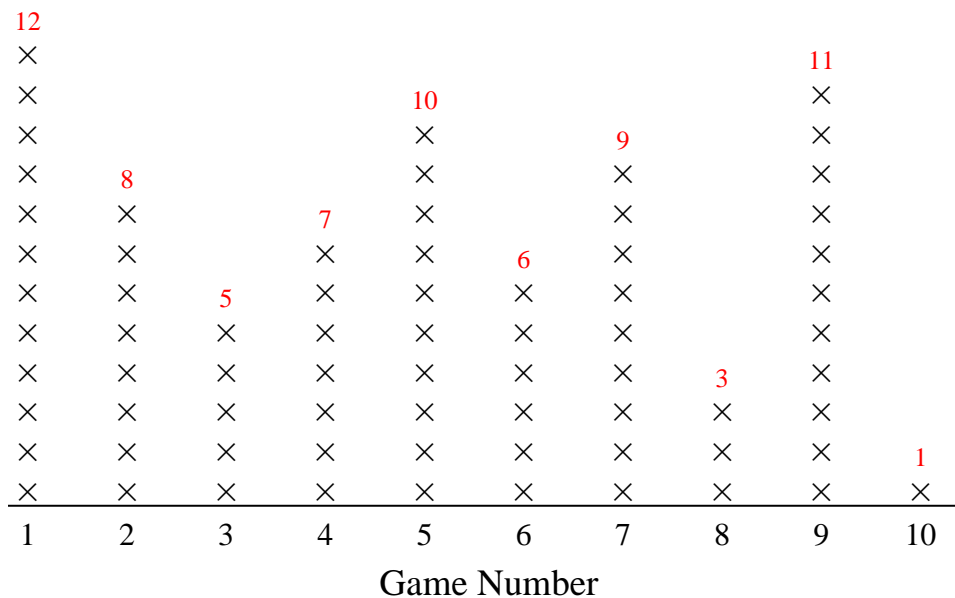








Use the line plots to answer each question.



Each x = 1 homerun

Answers

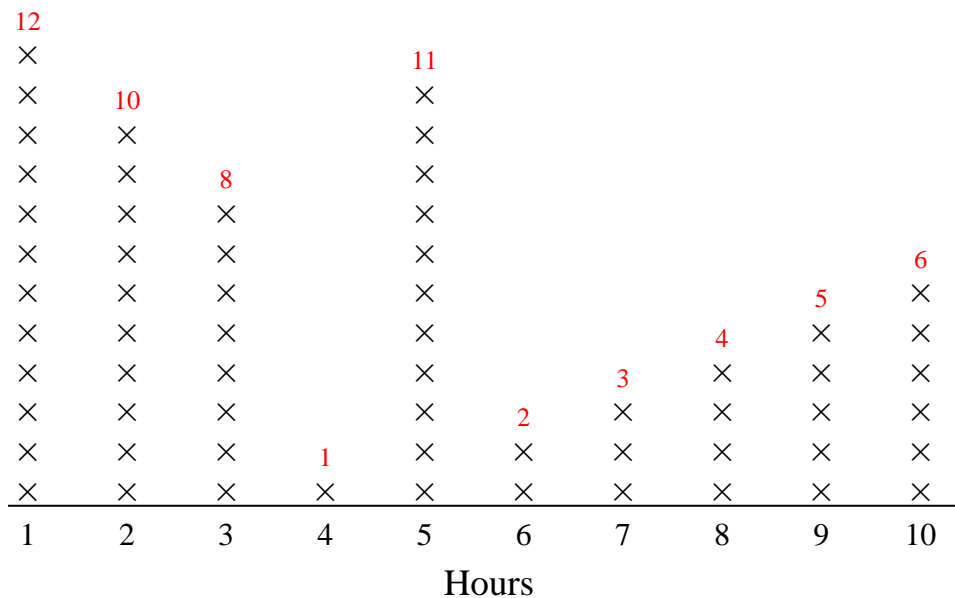
1. 6
2. 10
3. 4
4. 0
5. 10
6. 1
7. 10
8. 1,5,9
9. 1
10. 9
11. 3

- 1) How many games did they score more than 6 home runs?
- 2) Which game did they score the fewest home runs?
- 3) What is the combined homeruns they scored in game 8 and game 10?
- 4) How many games did they score fewer than 1 home runs?
- 5) Did they score fewer home runs during game 10 or game 5?
- 6) They scored the most home runs in which game?
- 7) What is the difference in the number of home runs they scored in game 10 and the number they scored in game 9?
- 8) Which games (if any) did they score more than 9 homeruns?
- 9) How many home runs did the team score in game 10?
- 10) Did they score more home runs during game 9 or game 2?
- 11) Which game number did they score exactly 5 home runs?





Use the line plots to answer each question.



Each x = 1 car

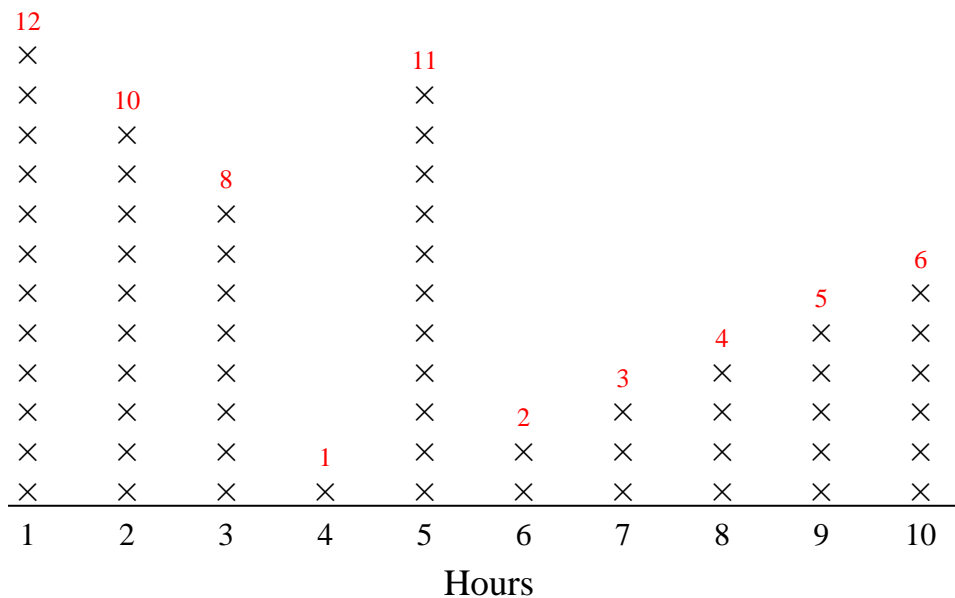
Answers

1. \_\_\_\_\_
2. \_\_\_\_\_
3. \_\_\_\_\_
4. \_\_\_\_\_
5. \_\_\_\_\_
6. \_\_\_\_\_
7. \_\_\_\_\_
8. \_\_\_\_\_
9. \_\_\_\_\_
10. \_\_\_\_\_
11. \_\_\_\_\_

- 1) How many hours did she sell fewer than 3 cars?
- 2) How many cars did she sell in hour 2?
- 3) How many hours did she sell more than 5 cars?
- 4) Which hours (if any) did she sell more than 8 cars?
- 5) She sold the most cars which hour?
- 6) What is the combined number of cars she sold in hour 10 and in hour 8?
- 7) Did she sell more cars in hour 7 or in hour 6?
- 8) Which hour did she sell the fewest cars?
- 9) Which hour did she sell exactly 1 cars?
- 10) Did she sell fewer cars in hour 6 or in hour 10?
- 11) What is the difference in the number of cars she sold in hour 5 and the number she sold in hour 3?



Use the line plots to answer each question.



Each x = 1 car

Answers

1. 2
2. 10
3. 5
4. 1,2,5
5. 1
6. 10
7. 7
8. 4
9. 4
10. 6
11. 3

- 1) How many hours did she sell fewer than 3 cars?
- 2) How many cars did she sell in hour 2?
- 3) How many hours did she sell more than 5 cars?
- 4) Which hours (if any) did she sell more than 8 cars?
- 5) She sold the most cars which hour?
- 6) What is the combined number of cars she sold in hour 10 and in hour 8?
- 7) Did she sell more cars in hour 7 or in hour 6?
- 8) Which hour did she sell the fewest cars?
- 9) Which hour did she sell exactly 1 cars?
- 10) Did she sell fewer cars in hour 6 or in hour 10?
- 11) What is the difference in the number of cars she sold in hour 5 and the number she sold in hour 3?





















