


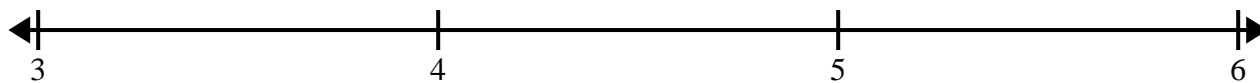


Create and label the line plot using the set of numbers provided.

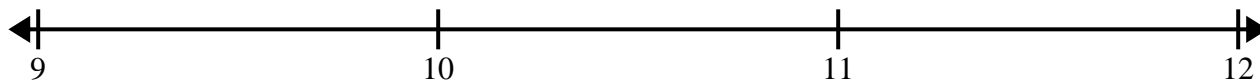
- 1) $4\frac{2}{8}$ 2 $4\frac{6}{8}$ $3\frac{6}{8}$ 3 $4\frac{5}{8}$ $4\frac{6}{8}$ $2\frac{6}{8}$
 $2\frac{1}{8}$ $3\frac{3}{8}$ $2\frac{7}{8}$ 4 4 $2\frac{1}{8}$ $2\frac{3}{8}$ $2\frac{5}{8}$




- 2) $3\frac{1}{2}$ $4\frac{1}{2}$ 4 $5\frac{1}{2}$ $4\frac{1}{2}$ $4\frac{1}{2}$ $5\frac{1}{2}$ 5
 3 3 $5\frac{1}{2}$ $3\frac{1}{2}$ 5 $3\frac{1}{2}$ 4 3




- 3) $10\frac{1}{4}$ $10\frac{1}{4}$ $11\frac{3}{4}$ $9\frac{1}{4}$ $11\frac{2}{4}$ 9 $11\frac{2}{4}$ $9\frac{1}{4}$
 10 $10\frac{2}{4}$ $9\frac{3}{4}$ $10\frac{3}{4}$ 11 $9\frac{1}{4}$ $9\frac{3}{4}$ $11\frac{3}{4}$



- 4) $5\frac{1}{4}$ $5\frac{1}{4}$ $7\frac{1}{4}$ $6\frac{2}{4}$ 7 $6\frac{3}{4}$ 5 $5\frac{1}{4}$
 $5\frac{3}{4}$ $7\frac{3}{4}$ $6\frac{2}{4}$ $5\frac{3}{4}$ $6\frac{1}{4}$ $6\frac{2}{4}$ 7 7



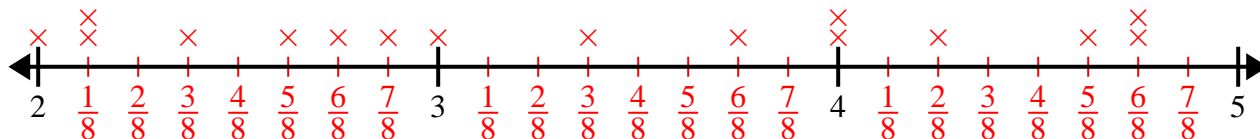
- 5) $11\frac{5}{8}$ $9\frac{5}{8}$ 10 $11\frac{1}{8}$ 9 $11\frac{5}{8}$ $9\frac{1}{8}$ $11\frac{7}{8}$
 $10\frac{4}{8}$ $10\frac{7}{8}$ $10\frac{4}{8}$ $9\frac{6}{8}$ $10\frac{2}{8}$ $11\frac{4}{8}$ $10\frac{4}{8}$ $9\frac{5}{8}$



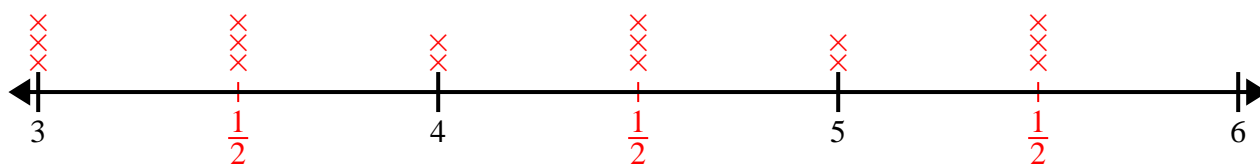


Create and label the line plot using the set of numbers provided.

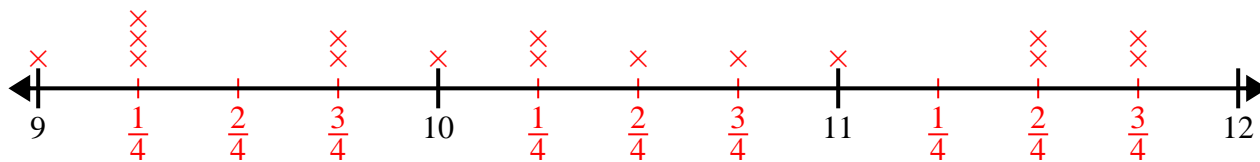
- 1) $4\frac{2}{8}$ 2 $4\frac{6}{8}$ $3\frac{6}{8}$ 3 $4\frac{5}{8}$ $4\frac{6}{8}$ $2\frac{6}{8}$
 $2\frac{1}{8}$ $3\frac{3}{8}$ $2\frac{7}{8}$ 4 4 $2\frac{1}{8}$ $2\frac{3}{8}$ $2\frac{5}{8}$



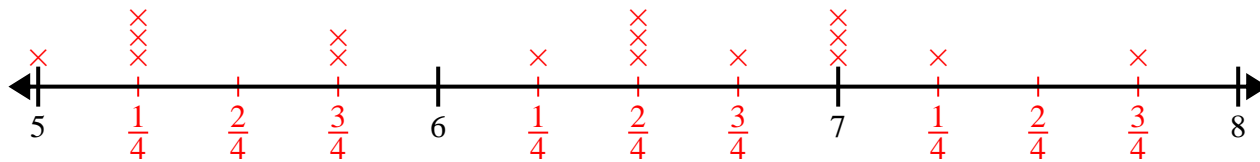
- 2) $3\frac{1}{2}$ $4\frac{1}{2}$ 4 $5\frac{1}{2}$ $4\frac{1}{2}$ $4\frac{1}{2}$ $5\frac{1}{2}$ 5
 3 3 $5\frac{1}{2}$ $3\frac{1}{2}$ 5 $3\frac{1}{2}$ 4 3



- 3) $10\frac{1}{4}$ $10\frac{1}{4}$ $11\frac{3}{4}$ $9\frac{1}{4}$ $11\frac{2}{4}$ 9 $11\frac{2}{4}$ $9\frac{1}{4}$
 10 $10\frac{2}{4}$ $9\frac{3}{4}$ $10\frac{3}{4}$ 11 $9\frac{1}{4}$ $9\frac{3}{4}$ $11\frac{3}{4}$



- 4) $5\frac{1}{4}$ $5\frac{1}{4}$ $7\frac{1}{4}$ $6\frac{2}{4}$ 7 $6\frac{3}{4}$ 5 $5\frac{1}{4}$
 $5\frac{3}{4}$ $7\frac{3}{4}$ $6\frac{2}{4}$ $5\frac{3}{4}$ $6\frac{1}{4}$ $6\frac{2}{4}$ 7 7



- 5) $11\frac{5}{8}$ $9\frac{5}{8}$ 10 $11\frac{1}{8}$ 9 $11\frac{5}{8}$ $9\frac{1}{8}$ $11\frac{7}{8}$
 $10\frac{4}{8}$ $10\frac{7}{8}$ $10\frac{4}{8}$ $9\frac{6}{8}$ $10\frac{2}{8}$ $11\frac{4}{8}$ $10\frac{4}{8}$ $9\frac{5}{8}$

