


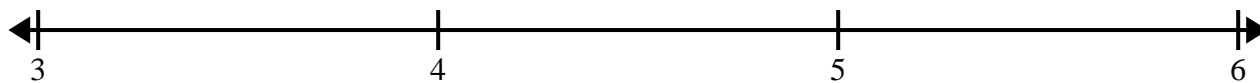


Create and label the line plot using the set of numbers provided.

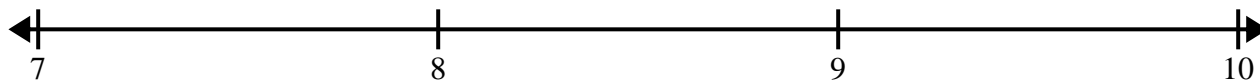
- 1)  $4$        $3\frac{1}{4}$        $5\frac{1}{4}$        $4\frac{3}{4}$        $3$        $5\frac{3}{4}$        $5\frac{1}{4}$        $4\frac{2}{4}$   
 $4\frac{3}{4}$        $3\frac{1}{4}$        $5\frac{1}{4}$        $4$        $4\frac{1}{4}$        $3\frac{3}{4}$        $3\frac{3}{4}$        $3\frac{3}{4}$




- 2)  $3\frac{1}{4}$        $3\frac{2}{4}$        $3\frac{3}{4}$        $3\frac{1}{4}$        $5\frac{3}{4}$        $4\frac{2}{4}$        $4\frac{3}{4}$        $3$   
 $4$        $4$        $5\frac{2}{4}$        $4\frac{2}{4}$        $3\frac{3}{4}$        $4\frac{1}{4}$        $3\frac{3}{4}$        $5\frac{1}{4}$




- 3)  $9\frac{1}{2}$        $8$        $7\frac{1}{2}$        $9\frac{1}{2}$        $8$        $8$        $9\frac{1}{2}$        $7$   
 $9$        $7$        $7\frac{1}{2}$        $7$        $7\frac{1}{2}$        $9$        $9$        $8\frac{1}{2}$



- 4)  $7$        $9\frac{6}{8}$        $7\frac{4}{8}$        $7\frac{7}{8}$        $7\frac{1}{8}$        $8\frac{4}{8}$        $9\frac{1}{8}$        $8\frac{6}{8}$   
 $7\frac{7}{8}$        $9\frac{1}{8}$        $9\frac{5}{8}$        $7\frac{6}{8}$        $7$        $8\frac{6}{8}$        $7\frac{4}{8}$        $7\frac{1}{8}$

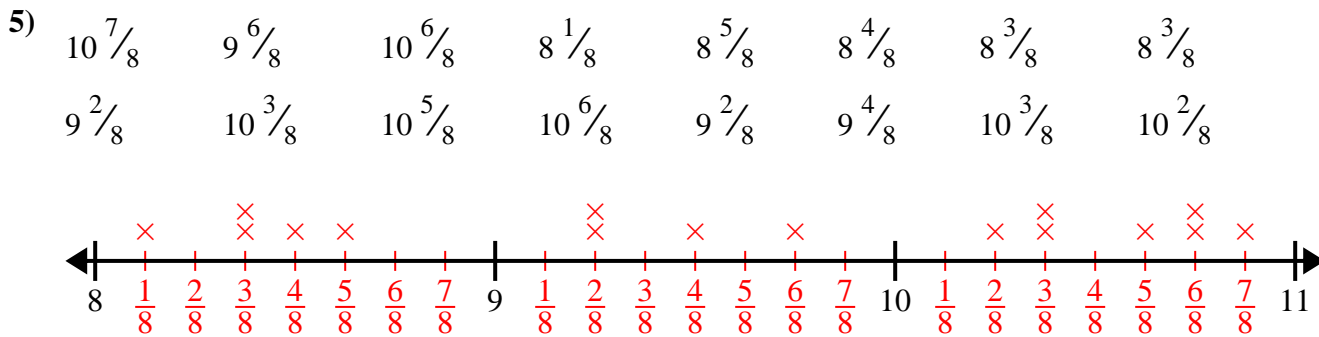
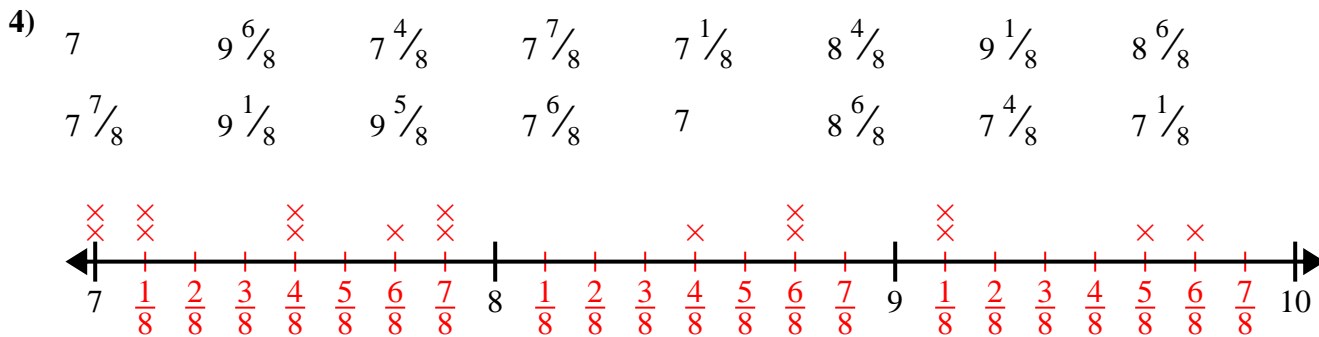
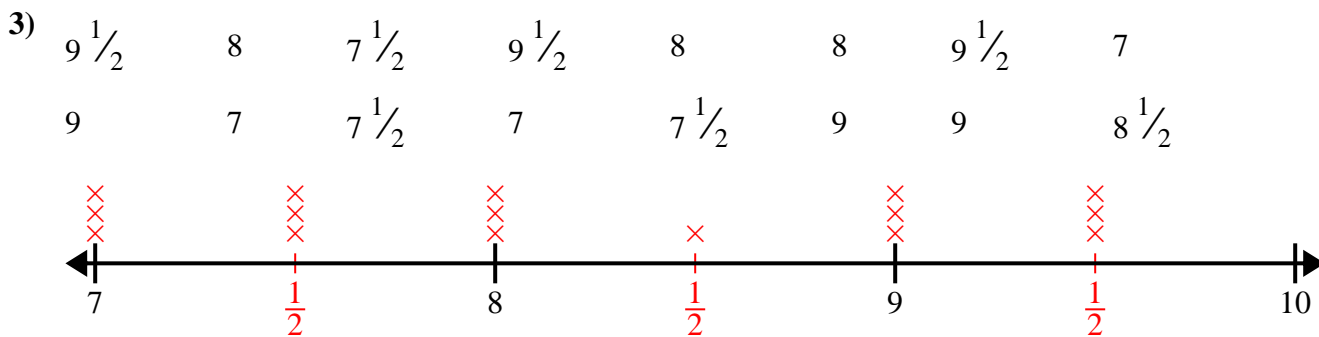
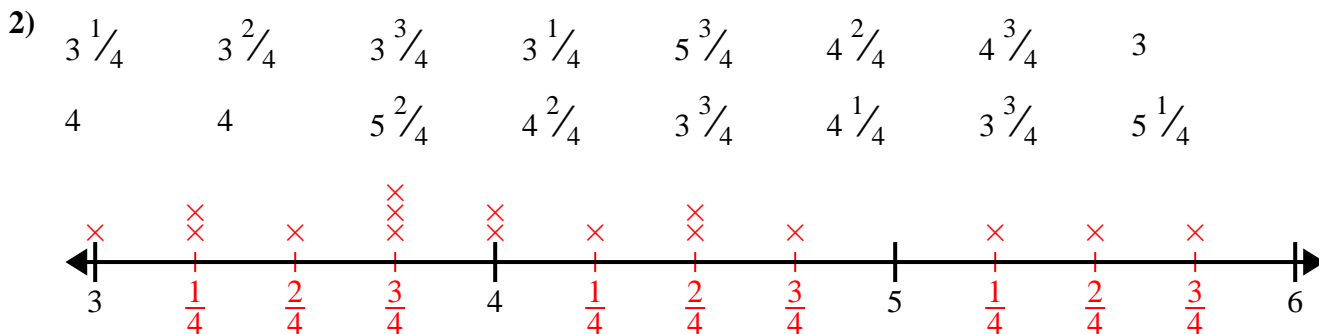
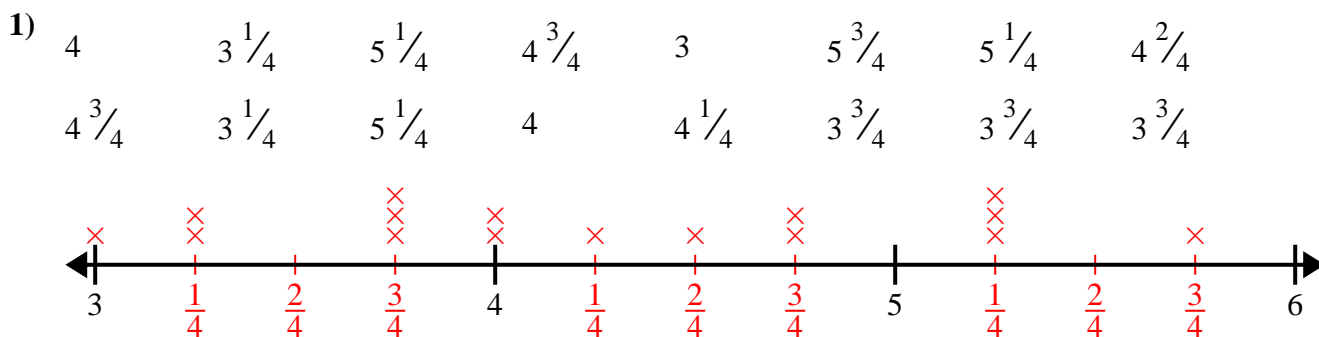


- 5)  $10\frac{7}{8}$        $9\frac{6}{8}$        $10\frac{6}{8}$        $8\frac{1}{8}$        $8\frac{5}{8}$        $8\frac{4}{8}$        $8\frac{3}{8}$        $8\frac{3}{8}$   
 $9\frac{2}{8}$        $10\frac{3}{8}$        $10\frac{5}{8}$        $10\frac{6}{8}$        $9\frac{2}{8}$        $9\frac{4}{8}$        $10\frac{3}{8}$        $10\frac{2}{8}$






Create and label the line plot using the set of numbers provided.






Create and label the line plot using the set of numbers provided.

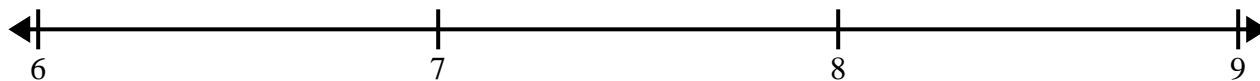
- 1)  $7\frac{6}{8}$     $7\frac{5}{8}$     $9\frac{3}{8}$     $9\frac{7}{8}$     $8\frac{3}{8}$    8    $7\frac{3}{8}$     $9\frac{2}{8}$   
 $7\frac{3}{8}$     $8\frac{4}{8}$     $9\frac{1}{8}$     $8\frac{3}{8}$     $8\frac{2}{8}$     $7\frac{6}{8}$     $9\frac{1}{8}$     $9\frac{2}{8}$




- 2)  $3\frac{1}{8}$     $5\frac{1}{8}$     $3\frac{7}{8}$    3   4    $3\frac{5}{8}$     $5\frac{6}{8}$     $3\frac{6}{8}$   
 $4\frac{5}{8}$     $5\frac{5}{8}$     $3\frac{5}{8}$     $4\frac{6}{8}$     $4\frac{2}{8}$     $3\frac{3}{8}$    4    $3\frac{4}{8}$




- 3) 6    $8\frac{1}{4}$     $6\frac{2}{4}$     $6\frac{1}{4}$     $7\frac{2}{4}$     $8\frac{2}{4}$     $8\frac{2}{4}$     $8\frac{1}{4}$   
 $6\frac{2}{4}$     $6\frac{2}{4}$    8   8   6   8    $8\frac{1}{4}$     $8\frac{3}{4}$



- 4)  $9\frac{2}{4}$    8    $9\frac{1}{4}$     $8\frac{2}{4}$     $9\frac{2}{4}$     $8\frac{2}{4}$     $10\frac{2}{4}$     $9\frac{3}{4}$   
 $8\frac{1}{4}$     $9\frac{3}{4}$     $8\frac{2}{4}$     $9\frac{2}{4}$     $9\frac{1}{4}$     $9\frac{3}{4}$     $8\frac{3}{4}$     $8\frac{3}{4}$



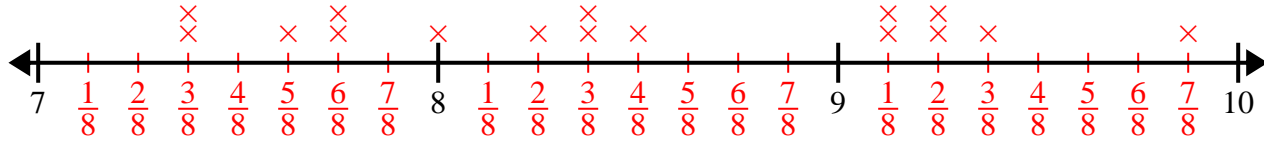
- 5)  $8\frac{1}{2}$    10    $10\frac{1}{2}$    10    $10\frac{1}{2}$    10    $9\frac{1}{2}$    9  
 $10\frac{1}{2}$     $8\frac{1}{2}$    8   9   9    $9\frac{1}{2}$     $9\frac{1}{2}$    8



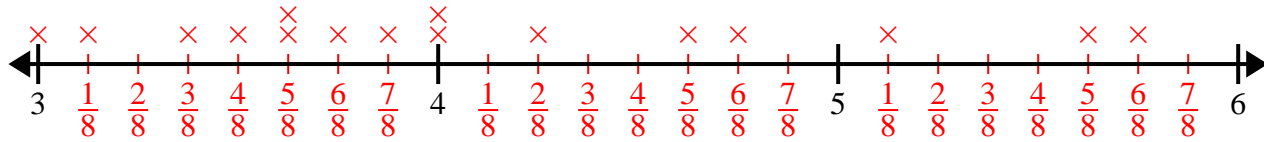


Create and label the line plot using the set of numbers provided.

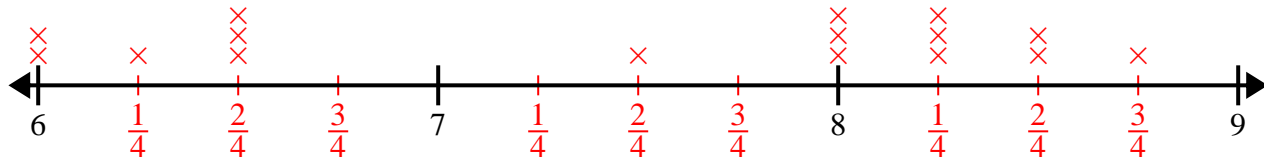
- 1)  $7\frac{6}{8}$     $7\frac{5}{8}$     $9\frac{3}{8}$     $9\frac{7}{8}$     $8\frac{3}{8}$     $8$     $7\frac{3}{8}$     $9\frac{2}{8}$   
 $7\frac{3}{8}$     $8\frac{4}{8}$     $9\frac{1}{8}$     $8\frac{3}{8}$     $8\frac{2}{8}$     $7\frac{6}{8}$     $9\frac{1}{8}$     $9\frac{2}{8}$



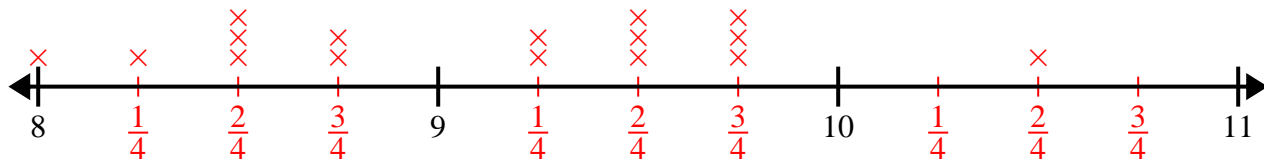
- 2)  $3\frac{1}{8}$     $5\frac{1}{8}$     $3\frac{7}{8}$     $3$     $4$     $3\frac{5}{8}$     $5\frac{6}{8}$     $3\frac{6}{8}$   
 $4\frac{5}{8}$     $5\frac{5}{8}$     $3\frac{5}{8}$     $4\frac{6}{8}$     $4\frac{2}{8}$     $3\frac{3}{8}$     $4$     $3\frac{4}{8}$



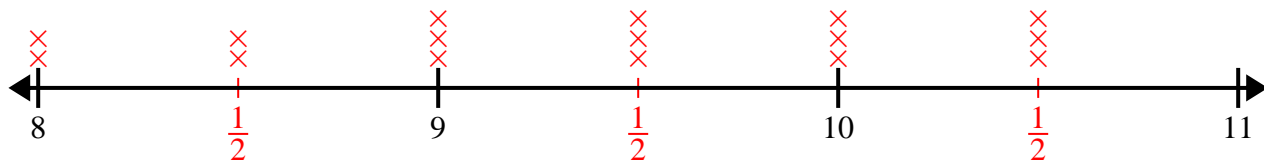
- 3)  $6$     $8\frac{1}{4}$     $6\frac{2}{4}$     $6\frac{1}{4}$     $7\frac{2}{4}$     $8\frac{2}{4}$     $8\frac{2}{4}$     $8\frac{1}{4}$   
 $6\frac{2}{4}$     $6\frac{2}{4}$     $8$     $8$     $6$     $8$     $8\frac{1}{4}$     $8\frac{3}{4}$



- 4)  $9\frac{2}{4}$     $8$     $9\frac{1}{4}$     $8\frac{2}{4}$     $9\frac{2}{4}$     $8\frac{2}{4}$     $10\frac{2}{4}$     $9\frac{3}{4}$   
 $8\frac{1}{4}$     $9\frac{3}{4}$     $8\frac{2}{4}$     $9\frac{2}{4}$     $9\frac{1}{4}$     $9\frac{3}{4}$     $8\frac{3}{4}$     $8\frac{3}{4}$




- 5)  $8\frac{1}{2}$     $10$     $10\frac{1}{2}$     $10$     $10\frac{1}{2}$     $10$     $9\frac{1}{2}$     $9$   
 $10\frac{1}{2}$     $8\frac{1}{2}$     $8$     $9$     $9$     $9\frac{1}{2}$     $9\frac{1}{2}$     $8$






Create and label the line plot using the set of numbers provided.

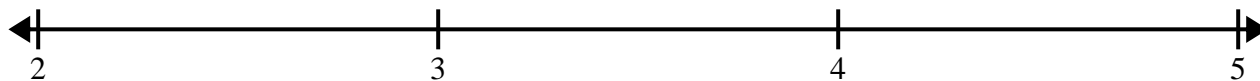
- 1) 5      5      4      4       $4\frac{1}{2}$       5      4       $5\frac{1}{2}$   
 3       $3\frac{1}{2}$        $5\frac{1}{2}$        $5\frac{1}{2}$        $4\frac{1}{2}$        $4\frac{1}{2}$       3      3




- 2)  $6\frac{3}{4}$        $5\frac{1}{4}$       4      4       $6\frac{1}{4}$        $5\frac{3}{4}$        $5\frac{1}{4}$        $5\frac{2}{4}$   
 $5\frac{1}{4}$       6       $4\frac{2}{4}$        $6\frac{1}{4}$       4       $4\frac{3}{4}$        $5\frac{3}{4}$        $4\frac{3}{4}$




- 3) 3       $3\frac{6}{8}$        $4\frac{5}{8}$        $2\frac{3}{8}$        $3\frac{4}{8}$       3       $2\frac{1}{8}$        $2\frac{1}{8}$   
 $4\frac{4}{8}$        $3\frac{5}{8}$        $4\frac{4}{8}$       2       $3\frac{1}{8}$        $4\frac{6}{8}$        $4\frac{1}{8}$        $4\frac{7}{8}$



- 4) 4       $6\frac{1}{4}$       4       $4\frac{2}{4}$        $4\frac{2}{4}$       6      4       $5\frac{1}{4}$   
 $4\frac{2}{4}$       6       $5\frac{1}{4}$       6       $6\frac{1}{4}$       5       $6\frac{2}{4}$        $6\frac{3}{4}$



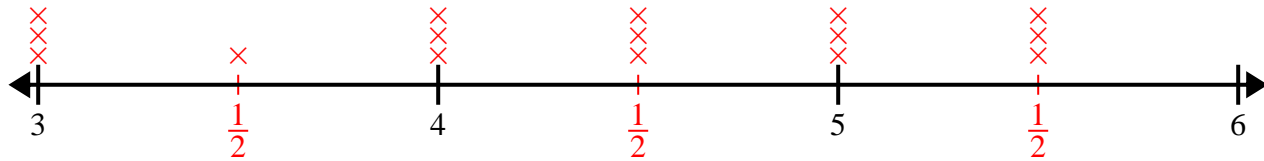
- 5) 10      10      9       $9\frac{1}{2}$       10       $10\frac{1}{2}$       11      9  
 11       $11\frac{1}{2}$       9       $11\frac{1}{2}$        $9\frac{1}{2}$        $10\frac{1}{2}$        $10\frac{1}{2}$        $11\frac{1}{2}$



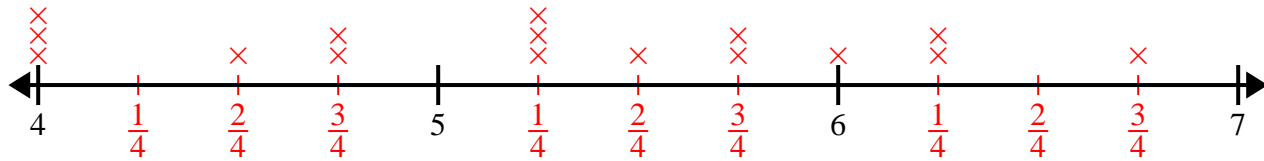


Create and label the line plot using the set of numbers provided.

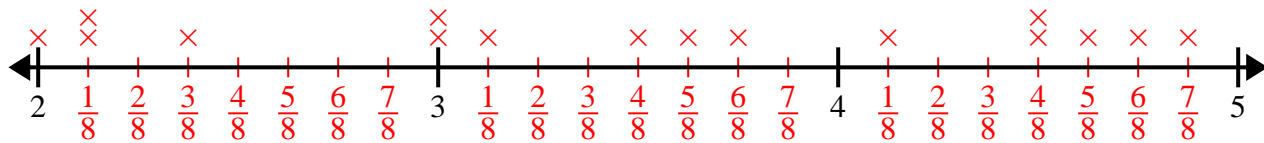
- 1) 5      5      4      4       $4\frac{1}{2}$       5      4       $5\frac{1}{2}$   
 3       $3\frac{1}{2}$        $5\frac{1}{2}$        $5\frac{1}{2}$        $4\frac{1}{2}$        $4\frac{1}{2}$       3      3



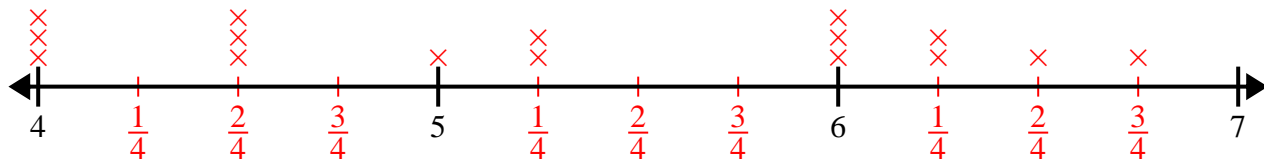
- 2)  $6\frac{3}{4}$        $5\frac{1}{4}$       4      4       $6\frac{1}{4}$        $5\frac{3}{4}$        $5\frac{1}{4}$        $5\frac{2}{4}$   
 $5\frac{1}{4}$       6       $4\frac{2}{4}$        $6\frac{1}{4}$       4       $4\frac{3}{4}$        $5\frac{3}{4}$        $4\frac{3}{4}$



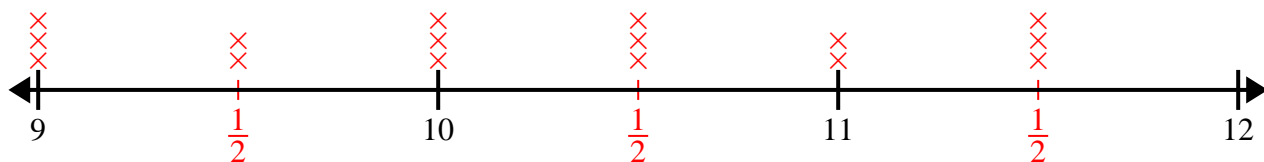
- 3) 3       $3\frac{6}{8}$        $4\frac{5}{8}$        $2\frac{3}{8}$        $3\frac{4}{8}$       3       $2\frac{1}{8}$        $2\frac{1}{8}$   
 $4\frac{4}{8}$        $3\frac{5}{8}$        $4\frac{4}{8}$       2       $3\frac{1}{8}$        $4\frac{6}{8}$        $4\frac{1}{8}$        $4\frac{7}{8}$



- 4) 4       $6\frac{1}{4}$       4       $4\frac{2}{4}$        $4\frac{2}{4}$       6      4       $5\frac{1}{4}$   
 $4\frac{2}{4}$       6       $5\frac{1}{4}$       6       $6\frac{1}{4}$       5       $6\frac{2}{4}$        $6\frac{3}{4}$




- 5) 10      10      9       $9\frac{1}{2}$       10       $10\frac{1}{2}$       11      9  
 11       $11\frac{1}{2}$       9       $11\frac{1}{2}$        $9\frac{1}{2}$        $10\frac{1}{2}$        $10\frac{1}{2}$        $11\frac{1}{2}$






Create and label the line plot using the set of numbers provided.

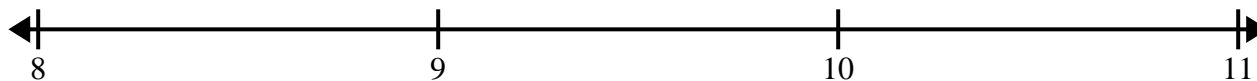
- 1)  $4\frac{1}{2}$     $3\frac{1}{2}$    3    $3\frac{1}{2}$     $3\frac{1}{2}$    5   3   5  
 3    $4\frac{1}{2}$     $4\frac{1}{2}$    4   5   4   4    $5\frac{1}{2}$




- 2)  $6\frac{2}{4}$    8    $8\frac{2}{4}$     $7\frac{2}{4}$     $7\frac{3}{4}$     $6\frac{1}{4}$     $7\frac{3}{4}$     $7\frac{3}{4}$   
 $6\frac{3}{4}$     $6\frac{2}{4}$     $7\frac{1}{4}$     $6\frac{3}{4}$     $8\frac{3}{4}$    6    $8\frac{3}{4}$     $6\frac{3}{4}$




- 3)  $8\frac{2}{4}$     $8\frac{3}{4}$    8    $10\frac{3}{4}$     $8\frac{1}{4}$     $10\frac{2}{4}$     $8\frac{2}{4}$    8  
 9    $8\frac{3}{4}$     $8\frac{3}{4}$     $10\frac{3}{4}$     $10\frac{2}{4}$     $8\frac{2}{4}$    10    $9\frac{3}{4}$



- 4)  $4\frac{6}{8}$     $4\frac{6}{8}$     $5\frac{3}{8}$     $6\frac{6}{8}$     $4\frac{3}{8}$     $6\frac{4}{8}$     $5\frac{5}{8}$     $6\frac{4}{8}$   
 $6\frac{4}{8}$     $6\frac{6}{8}$     $4\frac{5}{8}$     $6\frac{7}{8}$     $4\frac{4}{8}$    6    $4\frac{7}{8}$     $4\frac{4}{8}$



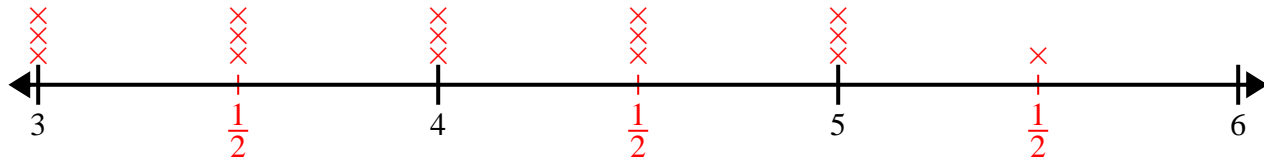
- 5) 9    $10\frac{1}{2}$     $8\frac{1}{2}$     $10\frac{1}{2}$     $9\frac{1}{2}$     $8\frac{1}{2}$    8    $10\frac{1}{2}$   
 $8\frac{1}{2}$    8    $9\frac{1}{2}$     $9\frac{1}{2}$    8   9   9   10



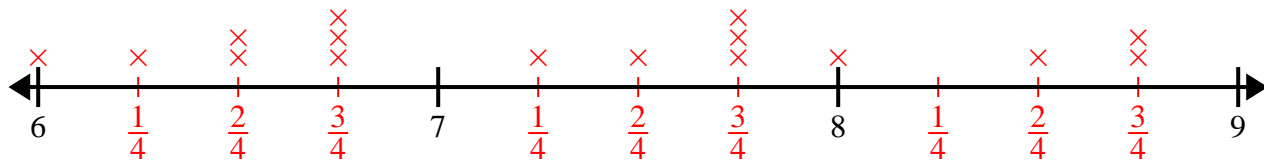


Create and label the line plot using the set of numbers provided.

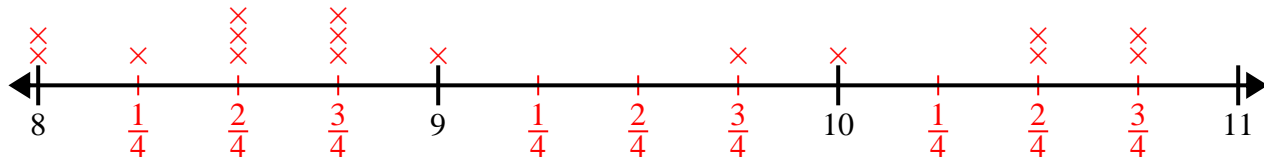
- 1)  $4\frac{1}{2}$     $3\frac{1}{2}$    3    $3\frac{1}{2}$     $3\frac{1}{2}$    5   3   5  
 3    $4\frac{1}{2}$     $4\frac{1}{2}$    4   5   4   4    $5\frac{1}{2}$



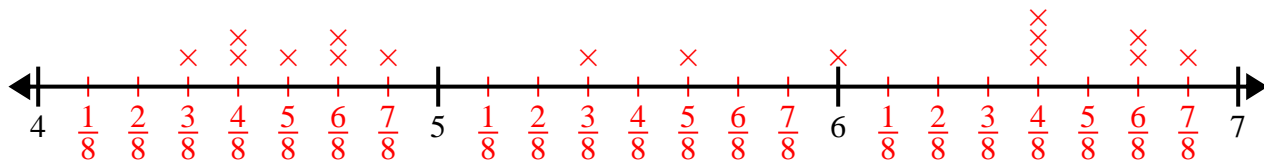
- 2)  $6\frac{2}{4}$    8    $8\frac{2}{4}$     $7\frac{2}{4}$     $7\frac{3}{4}$     $6\frac{1}{4}$     $7\frac{3}{4}$     $7\frac{3}{4}$   
 $6\frac{3}{4}$     $6\frac{2}{4}$     $7\frac{1}{4}$     $6\frac{3}{4}$     $8\frac{3}{4}$    6    $8\frac{3}{4}$     $6\frac{3}{4}$



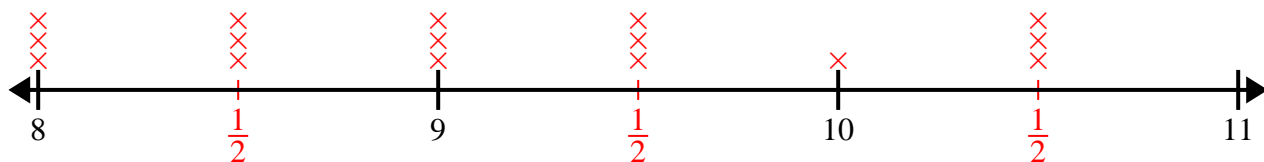
- 3)  $8\frac{2}{4}$     $8\frac{3}{4}$    8    $10\frac{3}{4}$     $8\frac{1}{4}$     $10\frac{2}{4}$     $8\frac{2}{4}$    8  
 9    $8\frac{3}{4}$     $8\frac{3}{4}$     $10\frac{3}{4}$     $10\frac{2}{4}$     $8\frac{2}{4}$    10    $9\frac{3}{4}$



- 4)  $4\frac{6}{8}$     $4\frac{6}{8}$     $5\frac{3}{8}$     $6\frac{6}{8}$     $4\frac{3}{8}$     $6\frac{4}{8}$     $5\frac{5}{8}$     $6\frac{4}{8}$   
 $6\frac{4}{8}$     $6\frac{6}{8}$     $4\frac{5}{8}$     $6\frac{7}{8}$     $4\frac{4}{8}$    6    $4\frac{7}{8}$     $4\frac{4}{8}$



- 5) 9    $10\frac{1}{2}$     $8\frac{1}{2}$     $10\frac{1}{2}$     $9\frac{1}{2}$     $8\frac{1}{2}$    8    $10\frac{1}{2}$   
 $8\frac{1}{2}$    8    $9\frac{1}{2}$     $9\frac{1}{2}$    8   9   9   10









Create and label the line plot using the set of numbers provided.

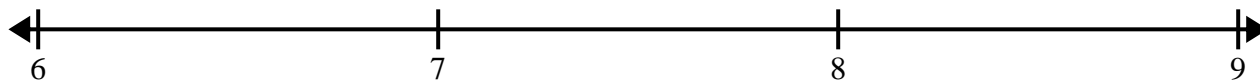
- 1)  $7$      $6\frac{2}{8}$      $7\frac{1}{8}$      $7\frac{2}{8}$      $7\frac{3}{8}$      $7\frac{5}{8}$      $7\frac{2}{8}$      $5\frac{4}{8}$   
 $5\frac{5}{8}$      $5\frac{6}{8}$      $7\frac{4}{8}$      $5\frac{1}{8}$      $7\frac{3}{8}$      $7\frac{3}{8}$      $7\frac{7}{8}$      $5\frac{7}{8}$



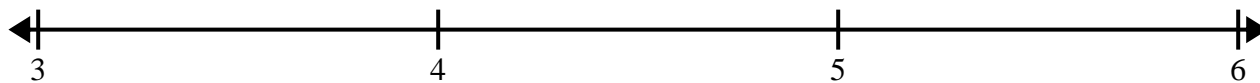
- 2)  $9\frac{1}{4}$      $7\frac{1}{4}$      $7\frac{2}{4}$      $7\frac{2}{4}$      $9\frac{3}{4}$      $9\frac{3}{4}$      $9\frac{3}{4}$      $9\frac{1}{4}$   
 $8$      $7\frac{2}{4}$      $8\frac{1}{4}$      $7\frac{3}{4}$      $8$      $7\frac{3}{4}$      $9\frac{1}{4}$      $8\frac{3}{4}$




- 3)  $7\frac{1}{2}$      $8\frac{1}{2}$      $6\frac{1}{2}$      $6\frac{1}{2}$      $6$      $7$      $6$      $8\frac{1}{2}$   
 $7\frac{1}{2}$      $8$      $6\frac{1}{2}$      $7$      $7$      $8$      $8\frac{1}{2}$      $7\frac{1}{2}$



- 4)  $3\frac{3}{4}$      $3$      $5\frac{3}{4}$      $5$      $5\frac{1}{4}$      $3$      $4\frac{1}{4}$      $4\frac{3}{4}$   
 $5$      $4\frac{3}{4}$      $4\frac{2}{4}$      $4\frac{2}{4}$      $5\frac{2}{4}$      $5\frac{3}{4}$      $4\frac{2}{4}$      $5\frac{2}{4}$



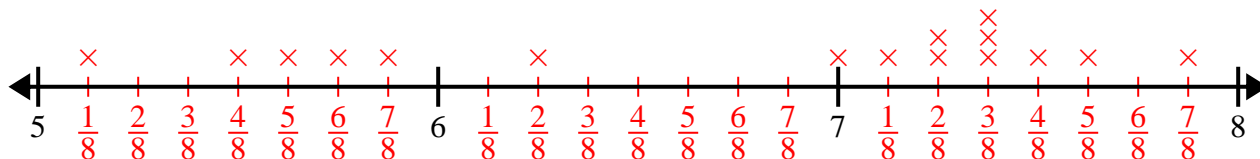
- 5)  $3$      $4\frac{2}{8}$      $2\frac{3}{8}$      $4\frac{1}{8}$      $2\frac{2}{8}$      $2\frac{6}{8}$      $4\frac{6}{8}$      $3\frac{5}{8}$   
 $3\frac{3}{8}$      $3\frac{6}{8}$      $2\frac{4}{8}$      $2$      $4$      $4\frac{2}{8}$      $2\frac{1}{8}$      $2\frac{2}{8}$



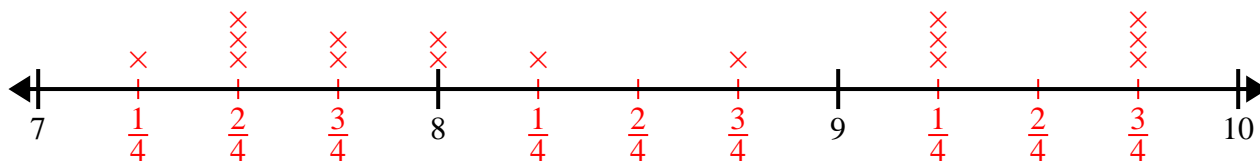


Create and label the line plot using the set of numbers provided.

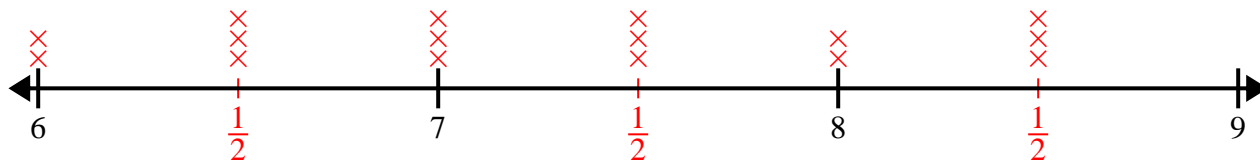
- 1)  $7$      $6\frac{2}{8}$      $7\frac{1}{8}$      $7\frac{2}{8}$      $7\frac{3}{8}$      $7\frac{5}{8}$      $7\frac{2}{8}$      $5\frac{4}{8}$   
 $5\frac{5}{8}$      $5\frac{6}{8}$      $7\frac{4}{8}$      $5\frac{1}{8}$      $7\frac{3}{8}$      $7\frac{3}{8}$      $7\frac{7}{8}$      $5\frac{7}{8}$



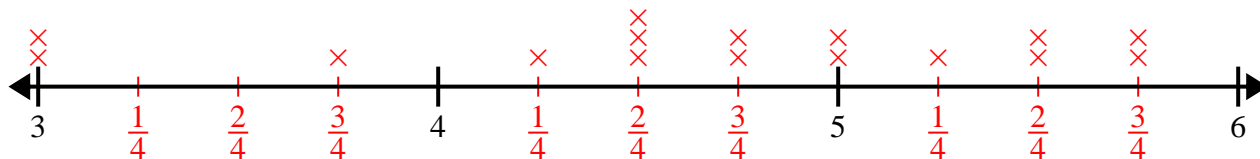
- 2)  $9\frac{1}{4}$      $7\frac{1}{4}$      $7\frac{2}{4}$      $7\frac{2}{4}$      $9\frac{3}{4}$      $9\frac{3}{4}$      $9\frac{3}{4}$      $9\frac{1}{4}$   
 $8$      $7\frac{2}{4}$      $8\frac{1}{4}$      $7\frac{3}{4}$      $8$      $7\frac{3}{4}$      $9\frac{1}{4}$      $8\frac{3}{4}$



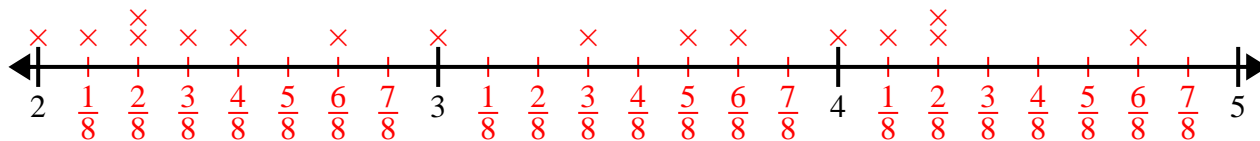
- 3)  $7\frac{1}{2}$      $8\frac{1}{2}$      $6\frac{1}{2}$      $6\frac{1}{2}$      $6$      $7$      $6$      $8\frac{1}{2}$   
 $7\frac{1}{2}$      $8$      $6\frac{1}{2}$      $7$      $7$      $8$      $8\frac{1}{2}$      $7\frac{1}{2}$



- 4)  $3\frac{3}{4}$      $3$      $5\frac{3}{4}$      $5$      $5\frac{1}{4}$      $3$      $4\frac{1}{4}$      $4\frac{3}{4}$   
 $5$      $4\frac{3}{4}$      $4\frac{2}{4}$      $4\frac{2}{4}$      $5\frac{2}{4}$      $5\frac{3}{4}$      $4\frac{2}{4}$      $5\frac{2}{4}$




- 5)  $3$      $4\frac{2}{8}$      $2\frac{3}{8}$      $4\frac{1}{8}$      $2\frac{2}{8}$      $2\frac{6}{8}$      $4\frac{6}{8}$      $3\frac{5}{8}$   
 $3\frac{3}{8}$      $3\frac{6}{8}$      $2\frac{4}{8}$      $2$      $4$      $4\frac{2}{8}$      $2\frac{1}{8}$      $2\frac{2}{8}$



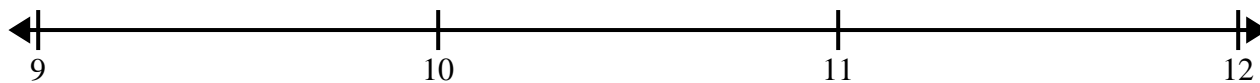


Create and label the line plot using the set of numbers provided.

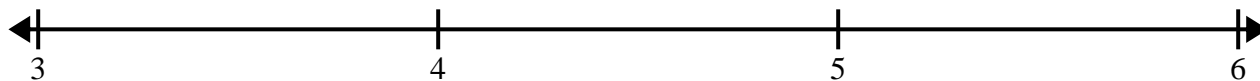
- 1)  $3\frac{5}{8}$     $4\frac{6}{8}$     $4\frac{5}{8}$     $2\frac{7}{8}$     $3\frac{1}{8}$     $2\frac{2}{8}$     $2\frac{1}{8}$     $3\frac{7}{8}$   
 $3\frac{5}{8}$     $3\frac{5}{8}$     $4\frac{1}{8}$     $2\frac{6}{8}$     $2\frac{3}{8}$     $3\frac{2}{8}$     $3\frac{2}{8}$    3



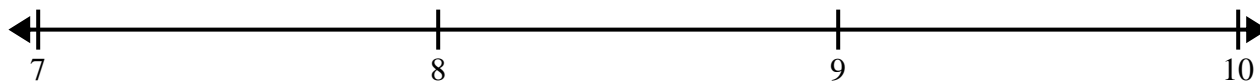
- 2) 11   9   9   10    $9\frac{1}{2}$     $10\frac{1}{2}$     $10\frac{1}{2}$     $9\frac{1}{2}$   
 $11\frac{1}{2}$     $10\frac{1}{2}$    9    $9\frac{1}{2}$    10   10    $11\frac{1}{2}$     $11\frac{1}{2}$




- 3)  $3\frac{2}{4}$    3    $3\frac{3}{4}$     $4\frac{3}{4}$    4    $3\frac{2}{4}$     $4\frac{1}{4}$     $5\frac{2}{4}$   
 $3\frac{1}{4}$     $3\frac{1}{4}$     $4\frac{3}{4}$     $4\frac{1}{4}$     $3\frac{3}{4}$    3   5    $5\frac{2}{4}$



- 4) 7    $8\frac{1}{2}$     $9\frac{1}{2}$    7   9   8    $9\frac{1}{2}$     $9\frac{1}{2}$   
 $8\frac{1}{2}$    9   9   8    $8\frac{1}{2}$    8    $7\frac{1}{2}$    7



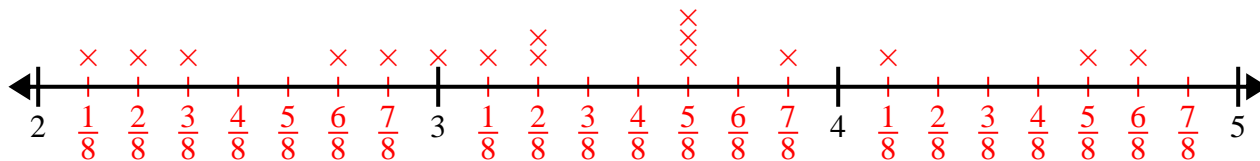
- 5)  $2\frac{2}{4}$     $3\frac{3}{4}$     $4\frac{3}{4}$     $2\frac{2}{4}$     $4\frac{3}{4}$     $4\frac{1}{4}$     $4\frac{2}{4}$     $4\frac{3}{4}$   
 $2\frac{3}{4}$     $4\frac{2}{4}$    3    $2\frac{2}{4}$    2   2   2   3



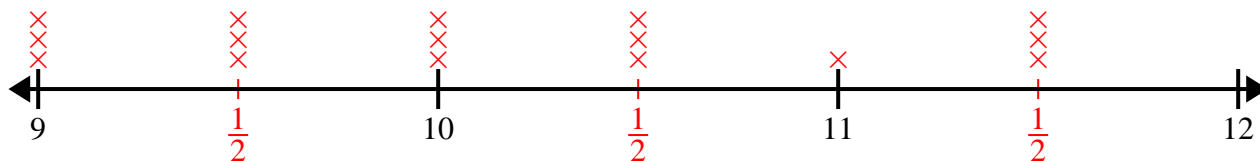


Create and label the line plot using the set of numbers provided.

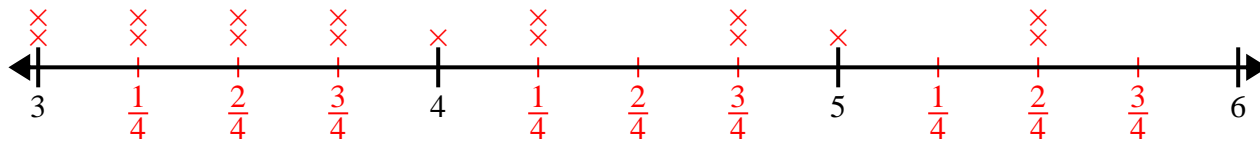
- 1)  $3\frac{5}{8}$     $4\frac{6}{8}$     $4\frac{5}{8}$     $2\frac{7}{8}$     $3\frac{1}{8}$     $2\frac{2}{8}$     $2\frac{1}{8}$     $3\frac{7}{8}$   
 $3\frac{5}{8}$     $3\frac{5}{8}$     $4\frac{1}{8}$     $2\frac{6}{8}$     $2\frac{3}{8}$     $3\frac{2}{8}$     $3\frac{2}{8}$     $3$



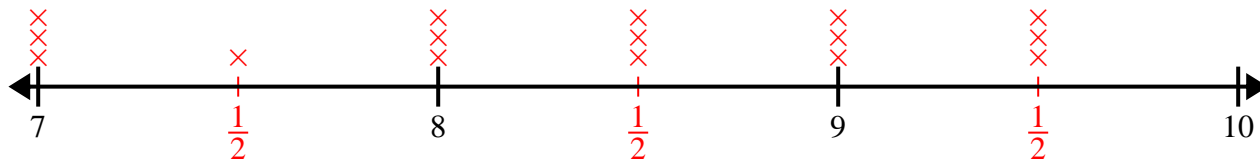
- 2) 11   9   9   10    $9\frac{1}{2}$     $10\frac{1}{2}$     $10\frac{1}{2}$     $9\frac{1}{2}$   
 $11\frac{1}{2}$     $10\frac{1}{2}$    9    $9\frac{1}{2}$    10   10    $11\frac{1}{2}$     $11\frac{1}{2}$



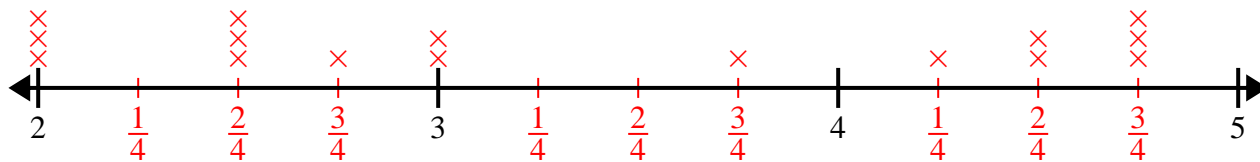
- 3)  $3\frac{2}{4}$    3    $3\frac{3}{4}$     $4\frac{3}{4}$    4    $3\frac{2}{4}$     $4\frac{1}{4}$     $5\frac{2}{4}$   
 $3\frac{1}{4}$     $3\frac{1}{4}$     $4\frac{3}{4}$     $4\frac{1}{4}$     $3\frac{3}{4}$    3   5    $5\frac{2}{4}$



- 4) 7    $8\frac{1}{2}$     $9\frac{1}{2}$    7   9   8    $9\frac{1}{2}$     $9\frac{1}{2}$   
 $8\frac{1}{2}$    9   9   8    $8\frac{1}{2}$    8    $7\frac{1}{2}$    7




- 5)  $2\frac{2}{4}$     $3\frac{3}{4}$     $4\frac{3}{4}$     $2\frac{2}{4}$     $4\frac{3}{4}$     $4\frac{1}{4}$     $4\frac{2}{4}$     $4\frac{3}{4}$   
 $2\frac{3}{4}$     $4\frac{2}{4}$    3    $2\frac{2}{4}$    2   2   2   3






Create and label the line plot using the set of numbers provided.


- 1)  $9\frac{1}{2}$     9    8    10    9     $10\frac{1}{2}$      $9\frac{1}{2}$     8  
 $10\frac{1}{2}$      $9\frac{1}{2}$     10    8    10     $8\frac{1}{2}$      $8\frac{1}{2}$      $8\frac{1}{2}$




- 2)  $6\frac{1}{2}$      $8\frac{1}{2}$     7    6     $8\frac{1}{2}$     8     $6\frac{1}{2}$      $8\frac{1}{2}$   
 7     $7\frac{1}{2}$     6     $6\frac{1}{2}$     8    8    6    7




- 3)  $5\frac{2}{4}$      $7\frac{3}{4}$      $6\frac{3}{4}$      $5\frac{3}{4}$      $7\frac{3}{4}$     6     $6\frac{1}{4}$     5  
 $6\frac{1}{4}$      $6\frac{1}{4}$      $5\frac{3}{4}$      $7\frac{3}{4}$      $6\frac{2}{4}$     6     $5\frac{1}{4}$      $5\frac{1}{4}$



- 4)  $5\frac{3}{4}$     5     $5\frac{2}{4}$      $7\frac{2}{4}$      $7\frac{3}{4}$      $5\frac{3}{4}$      $6\frac{1}{4}$      $7\frac{2}{4}$   
 5     $5\frac{1}{4}$      $6\frac{2}{4}$      $6\frac{3}{4}$      $6\frac{2}{4}$      $5\frac{2}{4}$      $5\frac{3}{4}$     6

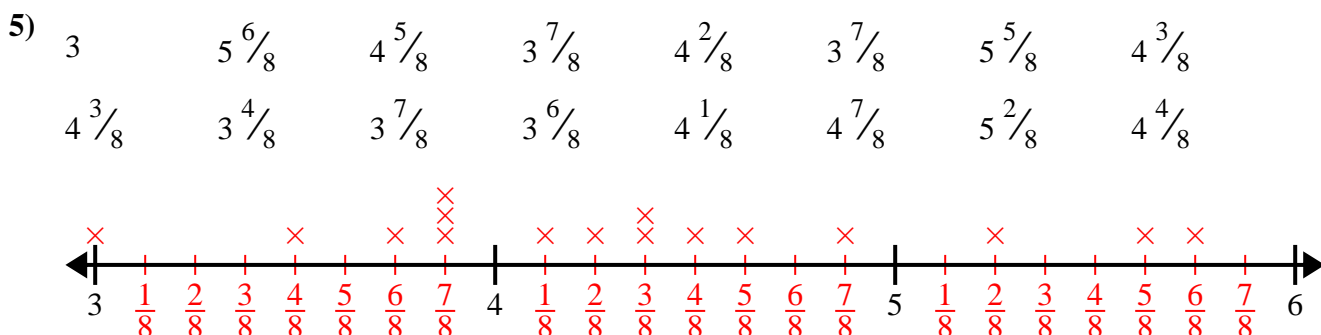
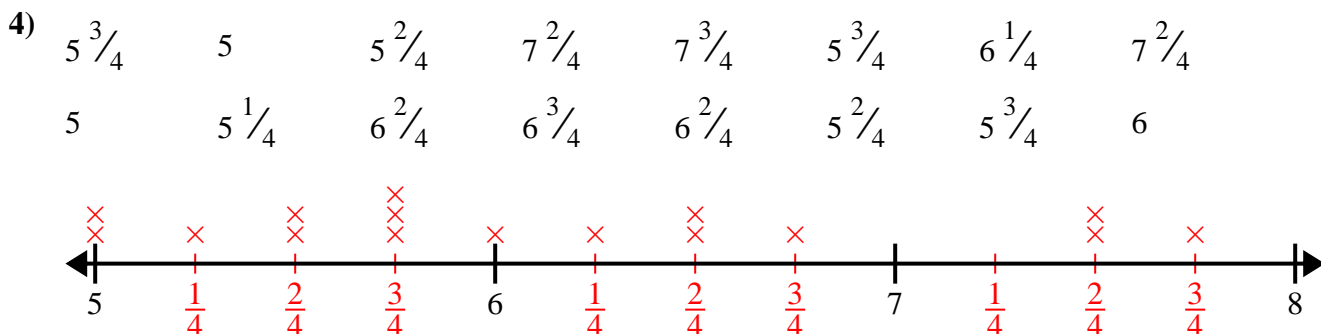
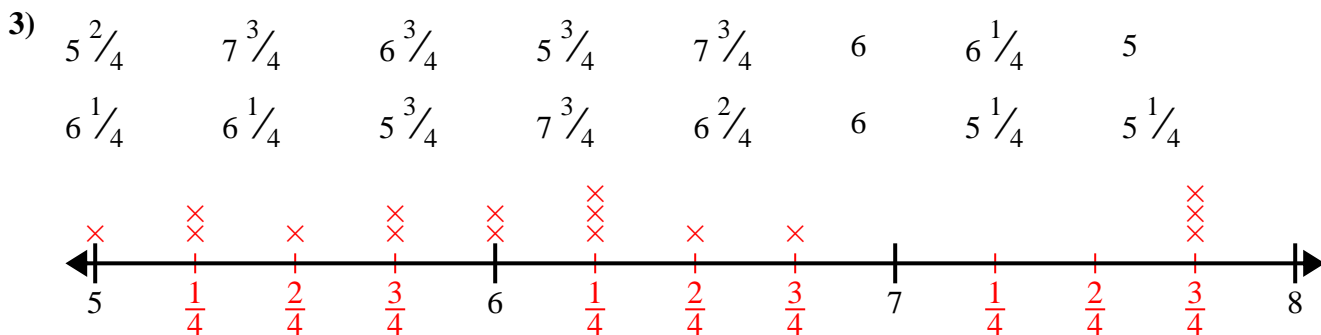
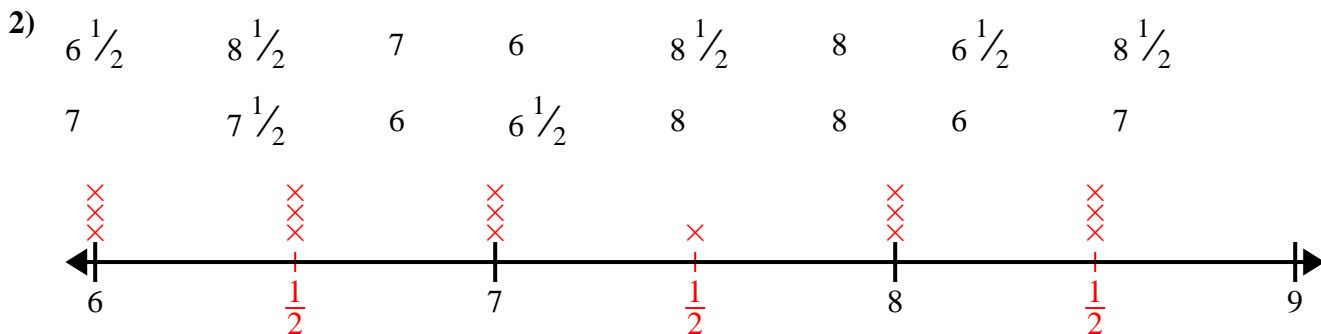
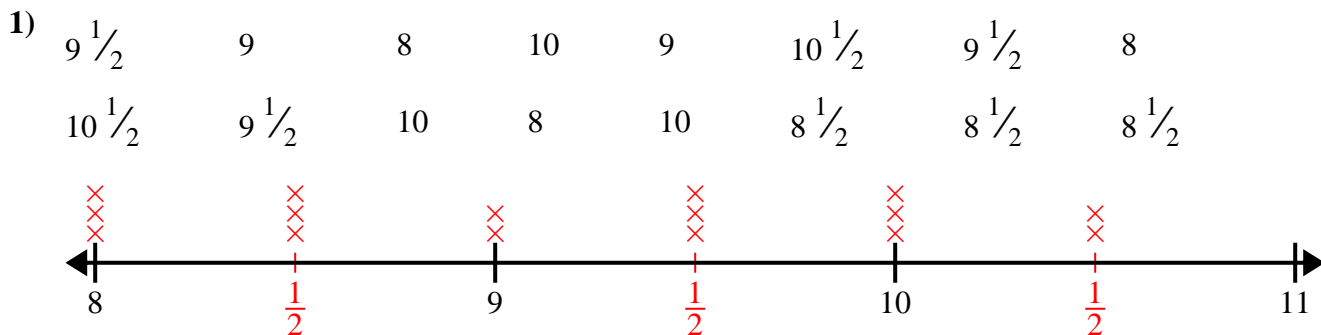


- 5) 3     $5\frac{6}{8}$      $4\frac{5}{8}$      $3\frac{7}{8}$      $4\frac{2}{8}$      $3\frac{7}{8}$      $5\frac{5}{8}$      $4\frac{3}{8}$   
 $4\frac{3}{8}$      $3\frac{4}{8}$      $3\frac{7}{8}$      $3\frac{6}{8}$      $4\frac{1}{8}$      $4\frac{7}{8}$      $5\frac{2}{8}$      $4\frac{4}{8}$






Create and label the line plot using the set of numbers provided.






Create and label the line plot using the set of numbers provided.

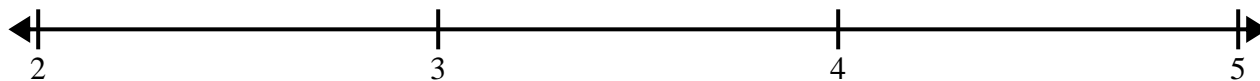
- 1) 7      7      5       $5\frac{1}{2}$        $5\frac{1}{2}$       5      7       $7\frac{1}{2}$   
 6       $7\frac{1}{2}$       5       $6\frac{1}{2}$        $7\frac{1}{2}$        $5\frac{1}{2}$       6      6



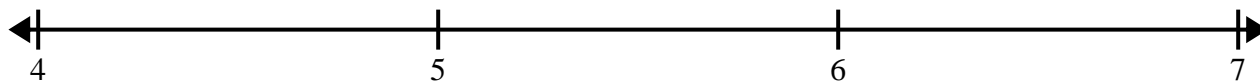
- 2) 6       $4\frac{3}{8}$        $6\frac{5}{8}$        $6\frac{6}{8}$       6       $4\frac{4}{8}$        $4\frac{7}{8}$        $6\frac{5}{8}$   
 $6\frac{6}{8}$        $4\frac{6}{8}$        $4\frac{4}{8}$        $4\frac{4}{8}$        $5\frac{1}{8}$        $5\frac{6}{8}$        $4\frac{3}{8}$        $6\frac{7}{8}$




- 3)  $4\frac{2}{4}$       3       $4\frac{1}{4}$        $2\frac{1}{4}$        $2\frac{2}{4}$        $3\frac{1}{4}$        $4\frac{2}{4}$       3  
 $4\frac{2}{4}$       3       $2\frac{3}{4}$       2       $2\frac{1}{4}$        $3\frac{1}{4}$        $2\frac{3}{4}$        $3\frac{3}{4}$



- 4) 6       $6\frac{1}{2}$       5       $6\frac{1}{2}$        $5\frac{1}{2}$        $6\frac{1}{2}$       4       $4\frac{1}{2}$   
 $5\frac{1}{2}$       4      5      6       $4\frac{1}{2}$       5      4       $5\frac{1}{2}$



- 5) 11      9       $10\frac{2}{4}$       11       $9\frac{3}{4}$       9      9       $11\frac{3}{4}$   
 $9\frac{2}{4}$       10       $11\frac{2}{4}$        $11\frac{2}{4}$        $9\frac{2}{4}$        $9\frac{1}{4}$        $9\frac{2}{4}$        $11\frac{3}{4}$

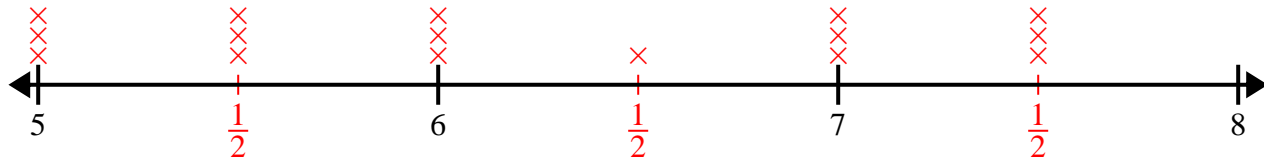




Create and label the line plot using the set of numbers provided.

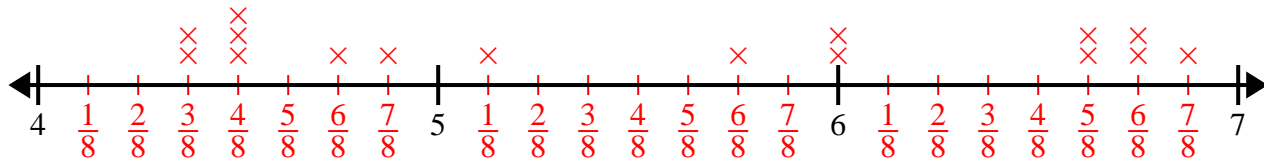
1) 7      7      5       $5\frac{1}{2}$        $5\frac{1}{2}$       5      7       $7\frac{1}{2}$

6       $7\frac{1}{2}$       5       $6\frac{1}{2}$        $7\frac{1}{2}$        $5\frac{1}{2}$       6      6



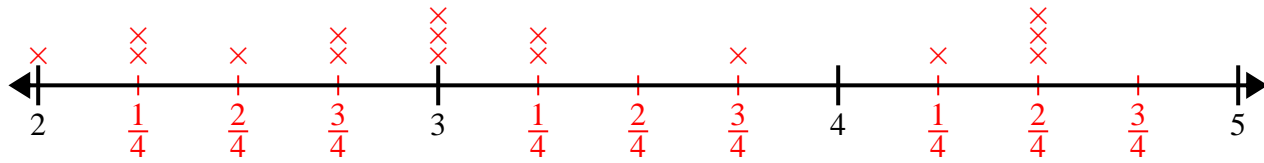
2) 6       $4\frac{3}{8}$        $6\frac{5}{8}$        $6\frac{6}{8}$       6       $4\frac{4}{8}$        $4\frac{7}{8}$        $6\frac{5}{8}$

$6\frac{6}{8}$        $4\frac{6}{8}$        $4\frac{4}{8}$        $4\frac{4}{8}$        $5\frac{1}{8}$        $5\frac{6}{8}$        $4\frac{3}{8}$        $6\frac{7}{8}$



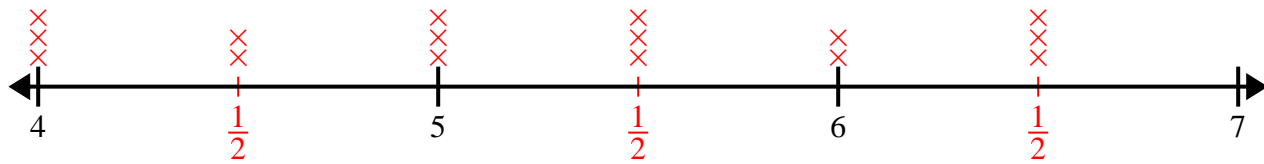
3)  $4\frac{2}{4}$       3       $4\frac{1}{4}$        $2\frac{1}{4}$        $2\frac{2}{4}$        $3\frac{1}{4}$        $4\frac{2}{4}$       3

$4\frac{2}{4}$       3       $2\frac{3}{4}$       2       $2\frac{1}{4}$        $3\frac{1}{4}$        $2\frac{3}{4}$        $3\frac{3}{4}$



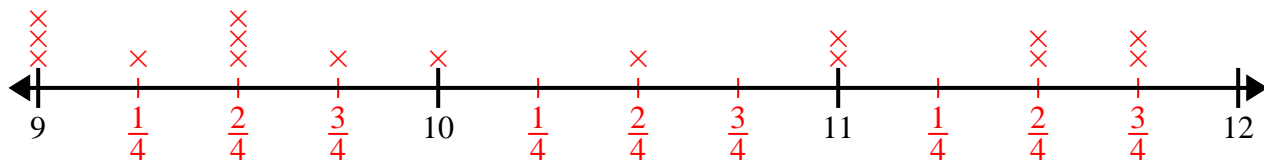
4) 6       $6\frac{1}{2}$       5       $6\frac{1}{2}$        $5\frac{1}{2}$        $6\frac{1}{2}$       4       $4\frac{1}{2}$

$5\frac{1}{2}$       4      5      6       $4\frac{1}{2}$       5      4       $5\frac{1}{2}$



5) 11      9       $10\frac{2}{4}$       11       $9\frac{3}{4}$       9      9       $11\frac{3}{4}$

$9\frac{2}{4}$       10       $11\frac{2}{4}$        $11\frac{2}{4}$        $9\frac{2}{4}$        $9\frac{1}{4}$        $9\frac{2}{4}$        $11\frac{3}{4}$






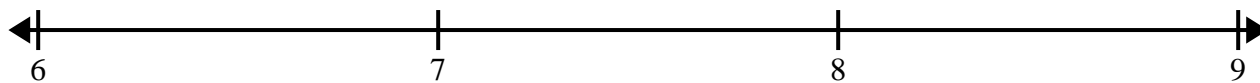


Create and label the line plot using the set of numbers provided.


- 1)  $7\frac{3}{8}$     $8\frac{3}{8}$     $9\frac{2}{8}$     $7\frac{3}{8}$    9    $9\frac{5}{8}$     $7\frac{1}{8}$     $8\frac{4}{8}$   
 $8\frac{7}{8}$     $7\frac{2}{8}$     $9\frac{4}{8}$     $7\frac{2}{8}$     $7\frac{2}{8}$     $7\frac{1}{8}$     $9\frac{1}{8}$     $8\frac{7}{8}$



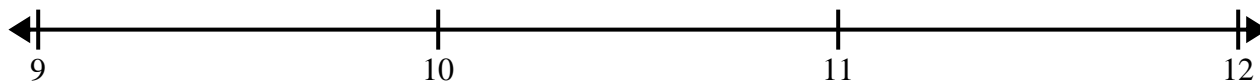
- 2) 7    $7\frac{4}{8}$     $8\frac{3}{8}$     $7\frac{7}{8}$     $8\frac{2}{8}$     $8\frac{1}{8}$     $7\frac{4}{8}$     $8\frac{5}{8}$   
 $8\frac{7}{8}$     $8\frac{5}{8}$    8   8    $7\frac{3}{8}$     $8\frac{2}{8}$     $6\frac{6}{8}$     $8\frac{5}{8}$




- 3) 6    $4\frac{1}{2}$     $5\frac{1}{2}$    6   4    $6\frac{1}{2}$    6    $5\frac{1}{2}$   
 $6\frac{1}{2}$     $4\frac{1}{2}$    5    $6\frac{1}{2}$     $5\frac{1}{2}$    4   4    $4\frac{1}{2}$



- 4)  $10\frac{3}{4}$     $10\frac{3}{4}$    11    $9\frac{1}{4}$     $9\frac{2}{4}$    11    $10\frac{2}{4}$     $11\frac{2}{4}$   
 $11\frac{1}{4}$     $11\frac{1}{4}$     $9\frac{3}{4}$     $9\frac{2}{4}$     $11\frac{1}{4}$     $9\frac{3}{4}$    10    $10\frac{2}{4}$



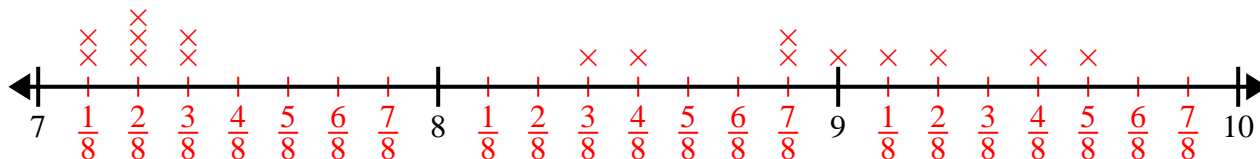
- 5)  $8\frac{1}{4}$     $7\frac{3}{4}$     $6\frac{3}{4}$     $7\frac{2}{4}$     $6\frac{1}{4}$     $8\frac{2}{4}$     $6\frac{3}{4}$     $7\frac{3}{4}$   
 $7\frac{2}{4}$     $8\frac{2}{4}$     $7\frac{3}{4}$     $6\frac{2}{4}$     $7\frac{1}{4}$    6    $6\frac{1}{4}$     $6\frac{3}{4}$



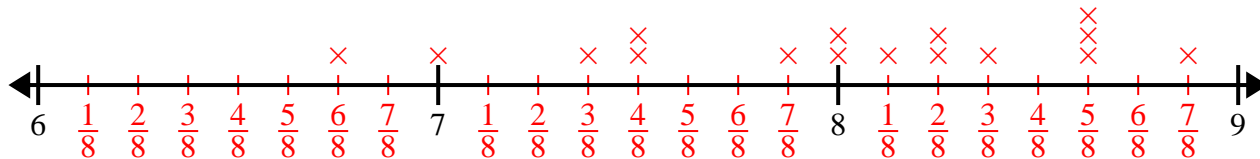


Create and label the line plot using the set of numbers provided.

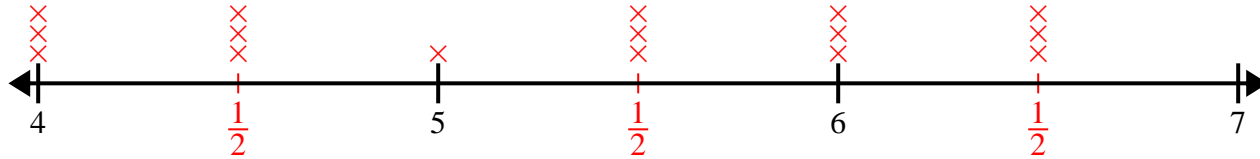
- 1)  $7\frac{3}{8}$     $8\frac{3}{8}$     $9\frac{2}{8}$     $7\frac{3}{8}$    9    $9\frac{5}{8}$     $7\frac{1}{8}$     $8\frac{4}{8}$   
 $8\frac{7}{8}$     $7\frac{2}{8}$     $9\frac{4}{8}$     $7\frac{2}{8}$     $7\frac{2}{8}$     $7\frac{1}{8}$     $9\frac{1}{8}$     $8\frac{7}{8}$



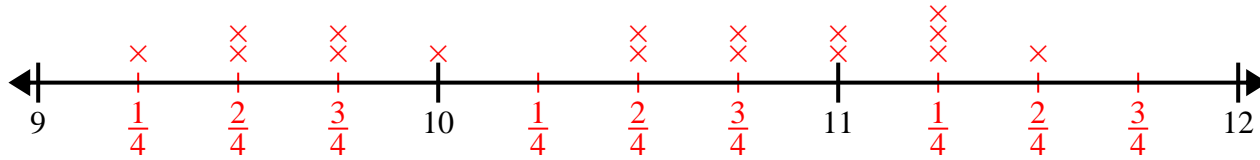
- 2) 7    $7\frac{4}{8}$     $8\frac{3}{8}$     $7\frac{7}{8}$     $8\frac{2}{8}$     $8\frac{1}{8}$     $7\frac{4}{8}$     $8\frac{5}{8}$   
 $8\frac{7}{8}$     $8\frac{5}{8}$    8   8    $7\frac{3}{8}$     $8\frac{2}{8}$     $6\frac{6}{8}$     $8\frac{5}{8}$



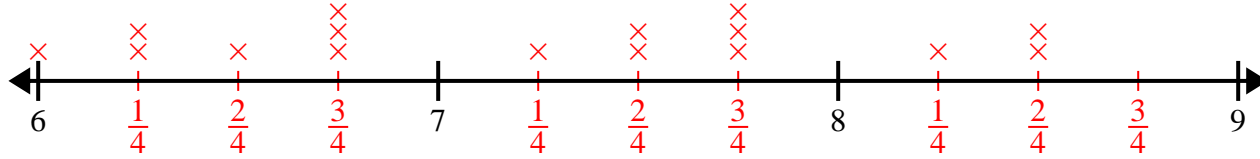
- 3) 6    $4\frac{1}{2}$     $5\frac{1}{2}$    6   4    $6\frac{1}{2}$    6    $5\frac{1}{2}$   
 $6\frac{1}{2}$     $4\frac{1}{2}$    5    $6\frac{1}{2}$     $5\frac{1}{2}$    4   4    $4\frac{1}{2}$



- 4)  $10\frac{3}{4}$     $10\frac{3}{4}$    11    $9\frac{1}{4}$     $9\frac{2}{4}$    11    $10\frac{2}{4}$     $11\frac{2}{4}$   
 $11\frac{1}{4}$     $11\frac{1}{4}$     $9\frac{3}{4}$     $9\frac{2}{4}$     $11\frac{1}{4}$     $9\frac{3}{4}$    10    $10\frac{2}{4}$




- 5)  $8\frac{1}{4}$     $7\frac{3}{4}$     $6\frac{3}{4}$     $7\frac{2}{4}$     $6\frac{1}{4}$     $8\frac{2}{4}$     $6\frac{3}{4}$     $7\frac{3}{4}$   
 $7\frac{2}{4}$     $8\frac{2}{4}$     $7\frac{3}{4}$     $6\frac{2}{4}$     $7\frac{1}{4}$    6    $6\frac{1}{4}$     $6\frac{3}{4}$






Create and label the line plot using the set of numbers provided.

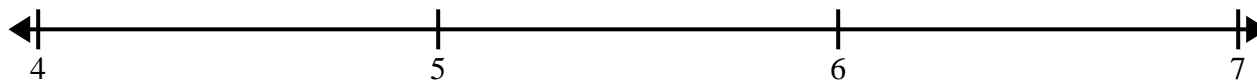
- 1) 7       $8\frac{1}{2}$        $8\frac{1}{2}$       6      8      6      7       $8\frac{1}{2}$   
 6       $7\frac{1}{2}$        $6\frac{1}{2}$        $7\frac{1}{2}$        $6\frac{1}{2}$       8       $7\frac{1}{2}$        $6\frac{1}{2}$




- 2)  $7\frac{3}{8}$        $9\frac{1}{8}$        $8\frac{2}{8}$        $8\frac{4}{8}$       7       $8\frac{2}{8}$        $8\frac{4}{8}$        $9\frac{7}{8}$   
 $7\frac{5}{8}$       7       $8\frac{2}{8}$        $8\frac{4}{8}$        $8\frac{5}{8}$       8       $9\frac{5}{8}$        $9\frac{4}{8}$




- 3)  $4\frac{1}{8}$       5       $5\frac{4}{8}$       5      6       $4\frac{7}{8}$        $5\frac{4}{8}$        $6\frac{3}{8}$   
 $5\frac{3}{8}$        $6\frac{3}{8}$        $5\frac{4}{8}$        $5\frac{3}{8}$        $6\frac{4}{8}$        $5\frac{2}{8}$        $6\frac{4}{8}$       6



- 4) 10      10       $8\frac{1}{2}$        $8\frac{1}{2}$       9       $9\frac{1}{2}$       9       $10\frac{1}{2}$   
 $9\frac{1}{2}$        $8\frac{1}{2}$       10       $10\frac{1}{2}$        $9\frac{1}{2}$        $10\frac{1}{2}$       8      9



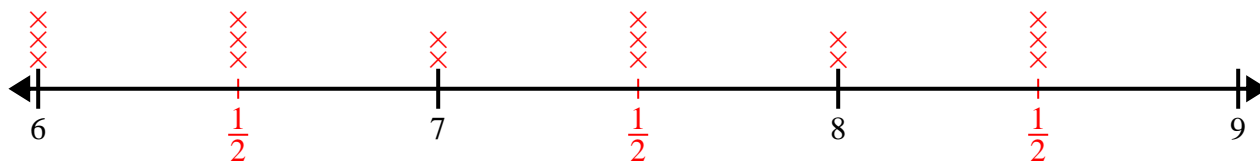
- 5)  $6\frac{3}{4}$        $6\frac{3}{4}$       6       $5\frac{1}{4}$        $4\frac{3}{4}$        $5\frac{2}{4}$        $6\frac{2}{4}$        $5\frac{1}{4}$   
 $4\frac{2}{4}$       4       $6\frac{1}{4}$        $4\frac{1}{4}$       6       $4\frac{2}{4}$       5       $4\frac{1}{4}$



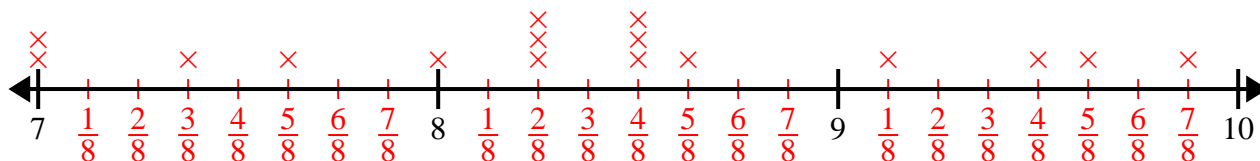


Create and label the line plot using the set of numbers provided.

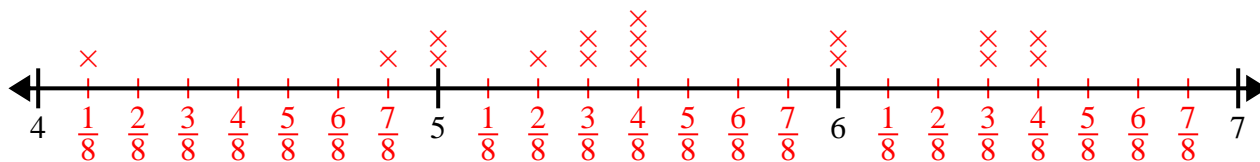
- 1) 7     $8\frac{1}{2}$      $8\frac{1}{2}$     6    8    6    7     $8\frac{1}{2}$   
 6     $7\frac{1}{2}$      $6\frac{1}{2}$      $7\frac{1}{2}$      $6\frac{1}{2}$     8     $7\frac{1}{2}$      $6\frac{1}{2}$



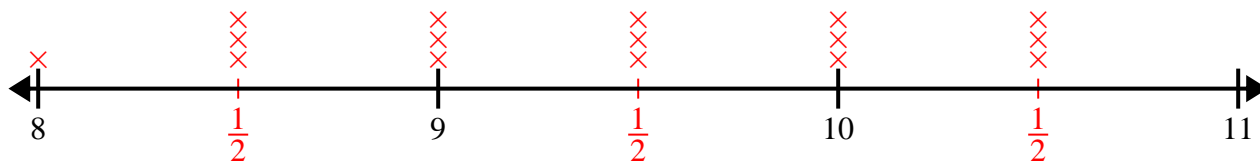
- 2)  $7\frac{3}{8}$      $9\frac{1}{8}$      $8\frac{2}{8}$      $8\frac{4}{8}$     7     $8\frac{2}{8}$      $8\frac{4}{8}$      $9\frac{7}{8}$   
 $7\frac{5}{8}$     7     $8\frac{2}{8}$      $8\frac{4}{8}$      $8\frac{5}{8}$     8     $9\frac{5}{8}$      $9\frac{4}{8}$



- 3)  $4\frac{1}{8}$     5     $5\frac{4}{8}$     5    6     $4\frac{7}{8}$      $5\frac{4}{8}$      $6\frac{3}{8}$   
 $5\frac{3}{8}$      $6\frac{3}{8}$      $5\frac{4}{8}$      $5\frac{3}{8}$      $6\frac{4}{8}$      $5\frac{2}{8}$      $6\frac{4}{8}$     6



- 4) 10    10     $8\frac{1}{2}$      $8\frac{1}{2}$     9     $9\frac{1}{2}$     9     $10\frac{1}{2}$   
 $9\frac{1}{2}$      $8\frac{1}{2}$     10     $10\frac{1}{2}$      $9\frac{1}{2}$      $10\frac{1}{2}$     8    9



- 5)  $6\frac{3}{4}$      $6\frac{3}{4}$     6     $5\frac{1}{4}$      $4\frac{3}{4}$      $5\frac{2}{4}$      $6\frac{2}{4}$      $5\frac{1}{4}$   
 $4\frac{2}{4}$     4     $6\frac{1}{4}$      $4\frac{1}{4}$     6     $4\frac{2}{4}$     5     $4\frac{1}{4}$

