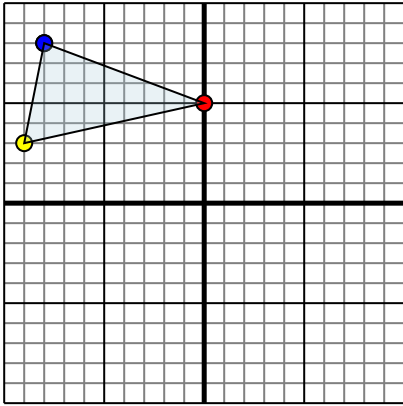




Reflect each shape as described.

1)

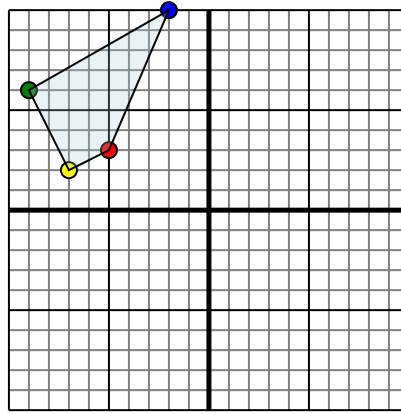


The shape above has the following coordinates:

- A. (0,5)
- B. (-9,3)
- C. (-8,8)

Reflect the shape over the Y axis.

2)

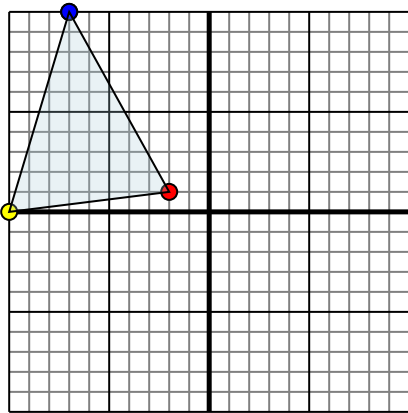


The shape above has the following coordinates:

- A. (-5,3)
- B. (-7,2)
- C. (-9,6)
- D. (-2,10)

Reflect the shape over the Y axis.

3)

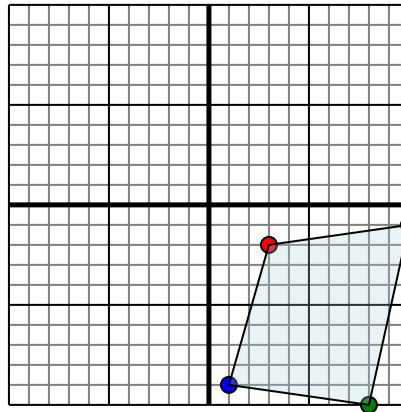


The shape above has the following coordinates:

- A. (-2,1)
- B. (-10,0)
- C. (-7,10)

Reflect the shape over the Y axis.

4)



The shape above has the following coordinates:

- A. (3,-2)
- B. (10,-1)
- C. (8,-10)
- D. (1,-9)

Reflect the shape over the X axis.

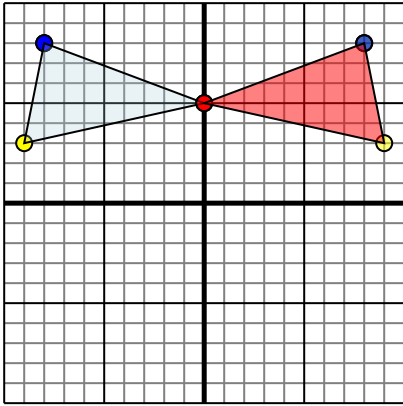
Answers

- 1. \_\_\_\_\_
- 2. \_\_\_\_\_
- 3. \_\_\_\_\_
- 4. \_\_\_\_\_



Reflect each shape as described.

1)

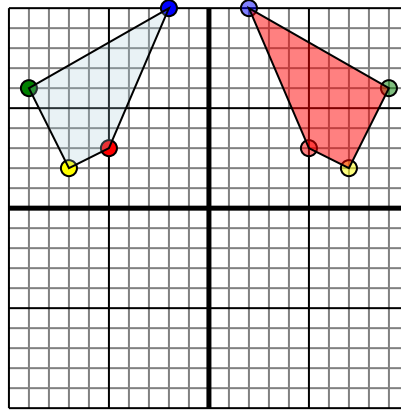


The shape above has the following coordinates:

- A. (0,5)
- B. (-9,3)
- C. (-8,8)

Reflect the shape over the Y axis.

2)

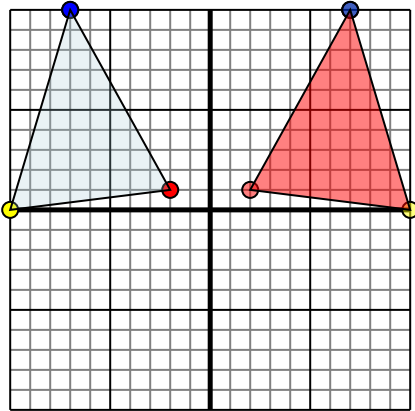


The shape above has the following coordinates:

- A. (-5,3)
- B. (-7,2)
- C. (-9,6)
- D. (-2,10)

Reflect the shape over the Y axis.

3)

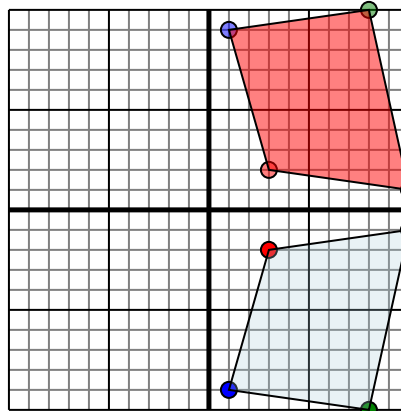


The shape above has the following coordinates:

- A. (-2,1)
- B. (-10,0)
- C. (-7,10)

Reflect the shape over the Y axis.

4)



The shape above has the following coordinates:

- A. (3,-2)
- B. (10,-1)
- C. (8,-10)
- D. (1,-9)

Reflect the shape over the X axis.

**Answers**

1. **0,5** **9,3** **8,8** Graph
2. **5,3** **7,2** **9,6** **2,10** Graph
3. **2,1** **10,0** **7,10** Graph
4. **3,2** **10,1** **8,10** **1,9** Graph