



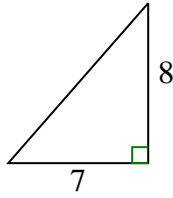
Determine which choice has the same slope as the one shown.

Answers

1)



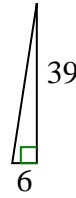
A.



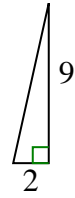
B.



C.



D.



1. _____

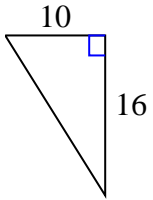
2. _____

3. _____

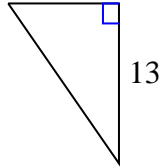
4. _____

5. _____

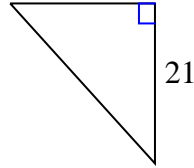
2)



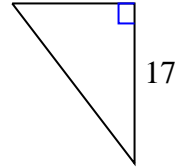
A.



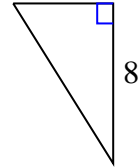
B.



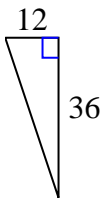
C.



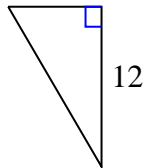
D.



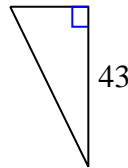
3)



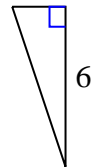
A.



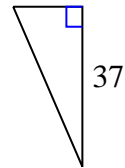
B.



C.



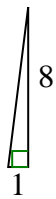
D.



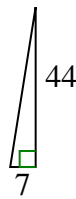
4)



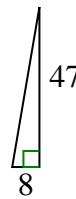
A.



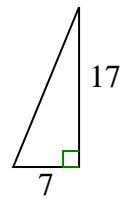
B.



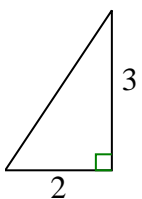
C.



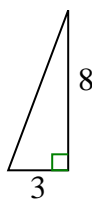
D.



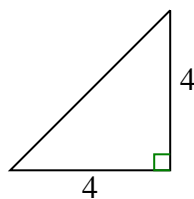
5)



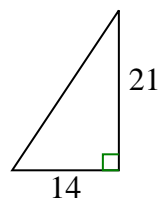
A.



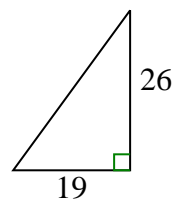
B.



C.



D.





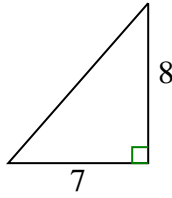
Determine which choice has the same slope as the one shown.

Answers

1)



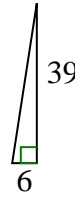
A.



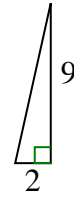
B.



C.

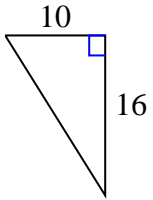


D.

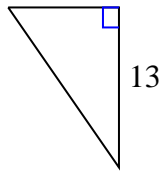


1. **B**

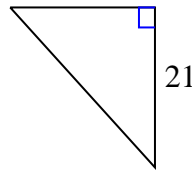
2)



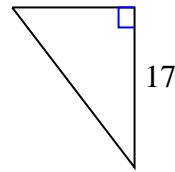
A.



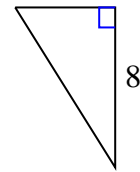
B.



C.

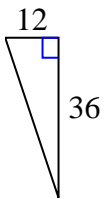


D.

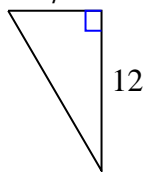


2. **D**

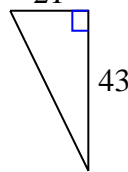
3)



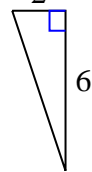
A.



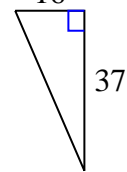
B.



C.



D.

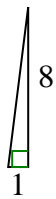


3. **C**

4)



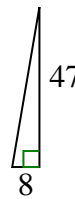
A.



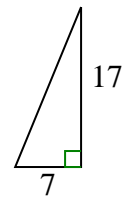
B.



C.

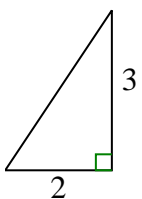


D.

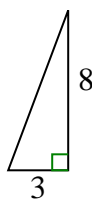


4. **A**

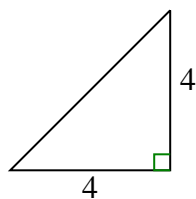
5)



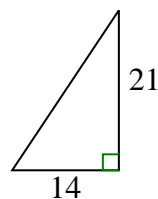
A.



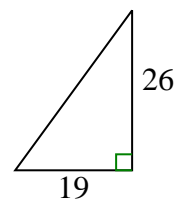
B.



C.



D.



5. **C**