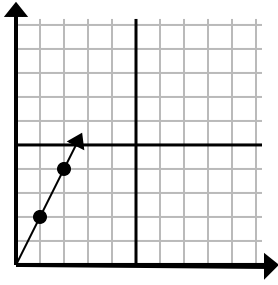




Determine which choice represents a point on the line if it were to continue.

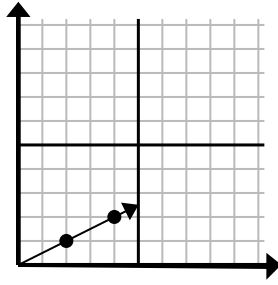
Answers

1)



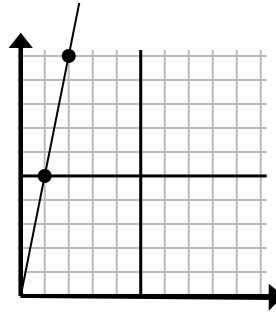
- A. (3 , 6)
- B. (7 , 3)
- C. (6 , 4)
- D. (7 , 14)

2)



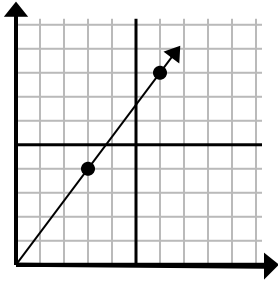
- A. (5 , 6)
- B. (5 , 4)
- C. (6 , 3)
- D. (9 , 6)

3)



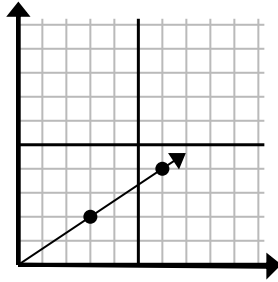
- A. (7 , 10)
- B. (3 , 15)
- C. (6 , 30)
- D. (5 , 8)

4)



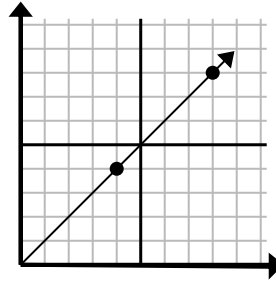
- A. (12 , 16)
- B. (10 , 6)
- C. (21 , 28)
- D. (9 , 12)

5)



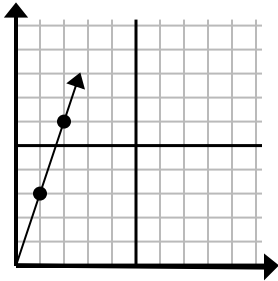
- A. (9 , 4)
- B. (9 , 6)
- C. (15 , 10)
- D. (12 , 8)

6)



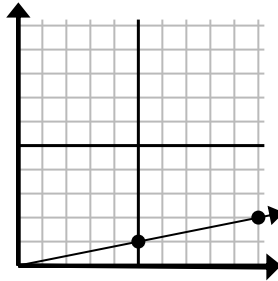
- A. (16 , 16)
- B. (12 , 12)
- C. (9 , 9)
- D. (24 , 24)

7)



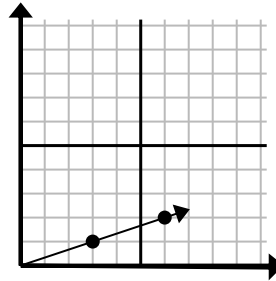
- A. (5 , 8)
- B. (5 , 15)
- C. (6 , 18)
- D. (3 , 9)

8)



- A. (11 , 5)
- B. (15 , 2)
- C. (15 , 3)
- D. (14 , 2)

9)



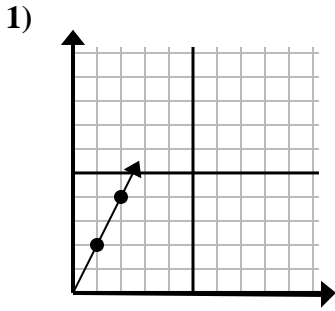
- A. (10 , 6)
- B. (9 , 3)
- C. (8 , 6)
- D. (9 , 2)

1. _____
2. _____
3. _____
4. _____
5. _____
6. _____
7. _____
8. _____
9. _____

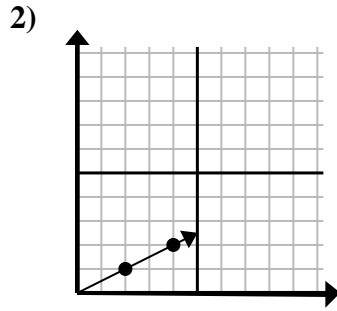


Determine which choice represents a point on the line if it were to continue.

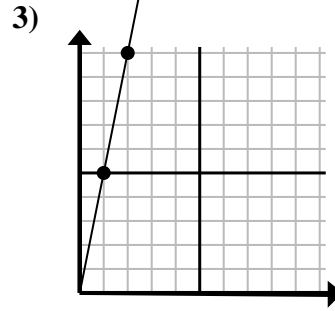
Answers



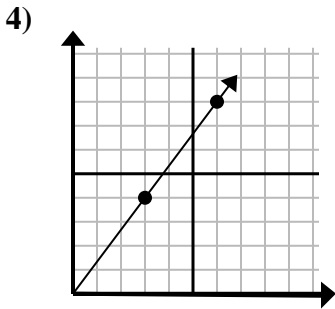
- A. (3, 6)
- B. (7, 3)
- C. (6, 4)
- D. (7, 14)



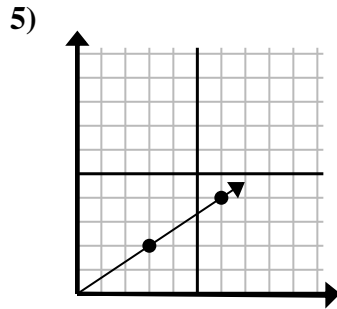
- A. (5, 6)
- B. (5, 4)
- C. (6, 3)
- D. (9, 6)



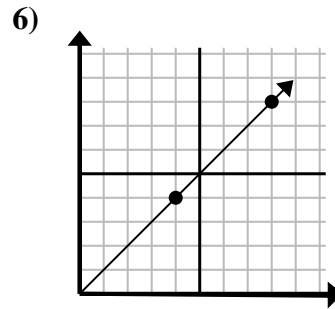
- A. (7, 10)
- B. (3, 15)
- C. (6, 30)
- D. (5, 8)



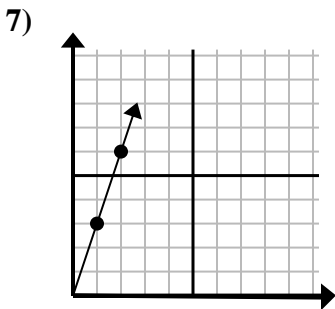
- A. (12, 16)
- B. (10, 6)
- C. (21, 28)
- D. (9, 12)



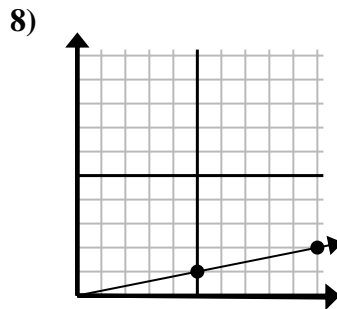
- A. (9, 4)
- B. (9, 6)
- C. (15, 10)
- D. (12, 8)



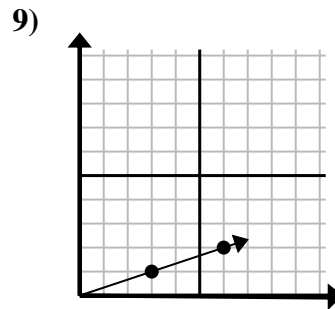
- A. (16, 16)
- B. (12, 12)
- C. (9, 9)
- D. (24, 24)



- A. (5, 8)
- B. (5, 15)
- C. (6, 18)
- D. (3, 9)



- A. (11, 5)
- B. (15, 2)
- C. (15, 3)
- D. (14, 2)



- A. (10, 6)
- B. (9, 3)
- C. (8, 6)
- D. (9, 2)

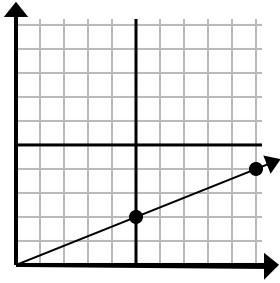
- 1. **A**
- 2. **C**
- 3. **B**
- 4. **D**
- 5. **B**
- 6. **B**
- 7. **D**
- 8. **C**
- 9. **B**



Determine which choice represents a point on the line if it were to continue.

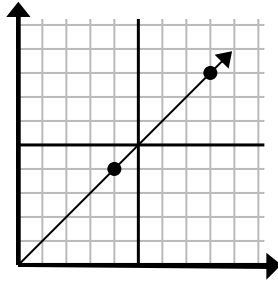
Answers

1)



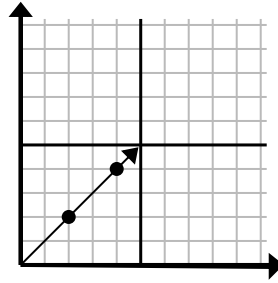
- A. (15 , 6)
- B. (25 , 10)
- C. (20 , 8)
- D. (30 , 12)

2)



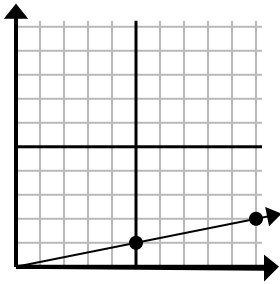
- A. (20 , 20)
- B. (11 , 6)
- C. (12 , 8)
- D. (12 , 12)

3)



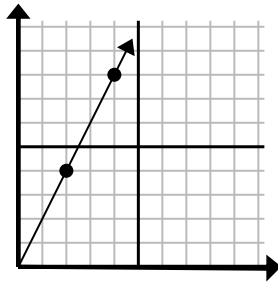
- A. (8 , 6)
- B. (10 , 10)
- C. (6 , 6)
- D. (14 , 14)

4)



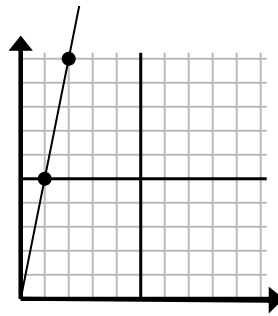
- A. (30 , 6)
- B. (14 , 5)
- C. (15 , 3)
- D. (14 , 3)

5)



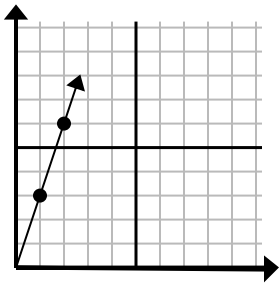
- A. (12 , 24)
- B. (6 , 12)
- C. (9 , 6)
- D. (7 , 7)

6)



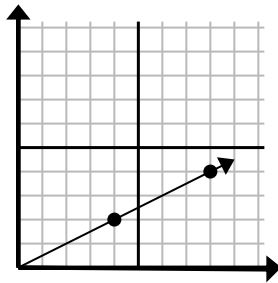
- A. (5 , 25)
- B. (6 , 7)
- C. (3 , 15)
- D. (4 , 8)

7)



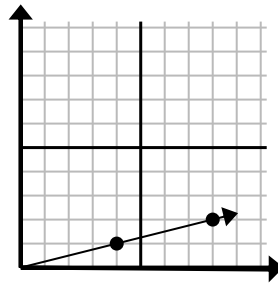
- A. (6 , 5)
- B. (6 , 18)
- C. (3 , 9)
- D. (7 , 21)

8)



- A. (20 , 10)
- B. (28 , 14)
- C. (13 , 7)
- D. (12 , 6)

9)



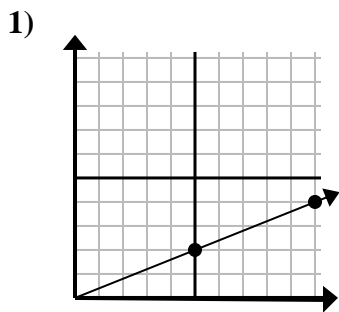
- A. (16 , 4)
- B. (24 , 6)
- C. (28 , 7)
- D. (12 , 3)

1. _____
2. _____
3. _____
4. _____
5. _____
6. _____
7. _____
8. _____
9. _____

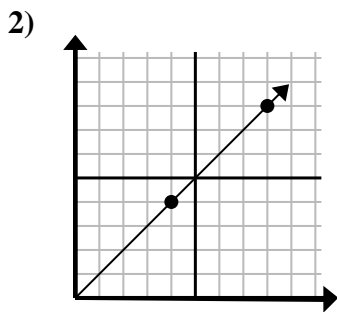


Determine which choice represents a point on the line if it were to continue.

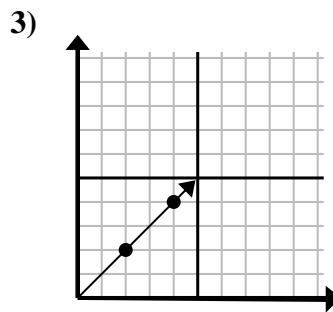
Answers



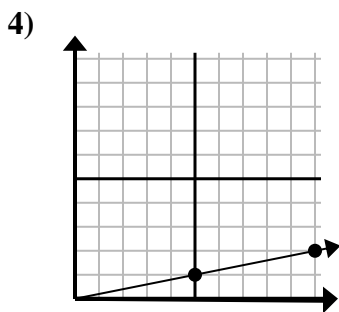
- A. (15 , 6)
- B. (25 , 10)
- C. (20 , 8)
- D. (30 , 12)



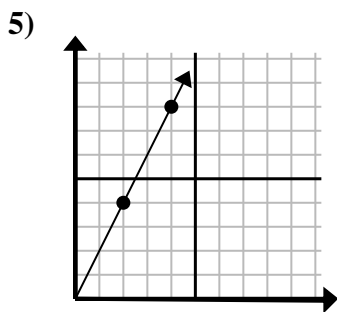
- A. (20 , 20)
- B. (11 , 6)
- C. (12 , 8)
- D. (12 , 12)



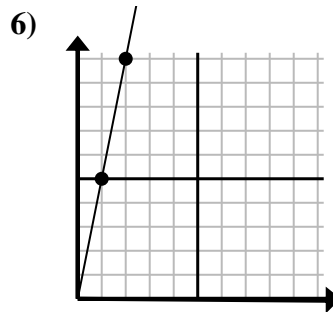
- A. (8 , 6)
- B. (10 , 10)
- C. (6 , 6)
- D. (14 , 14)



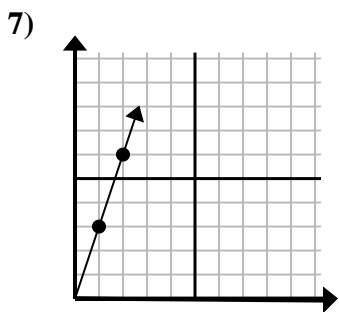
- A. (30 , 6)
- B. (14 , 5)
- C. (15 , 3)
- D. (14 , 3)



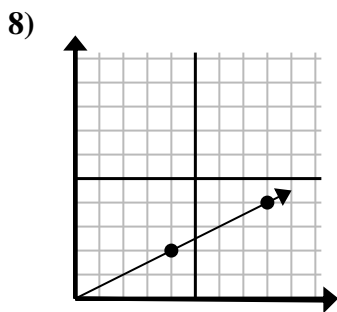
- A. (12 , 24)
- B. (6 , 12)
- C. (9 , 6)
- D. (7 , 7)



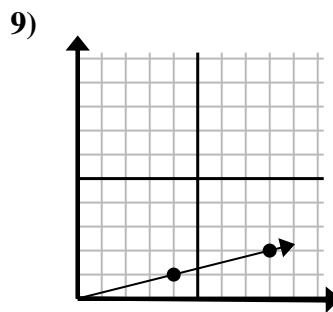
- A. (5 , 25)
- B. (6 , 7)
- C. (3 , 15)
- D. (4 , 8)



- A. (6 , 5)
- B. (6 , 18)
- C. (3 , 9)
- D. (7 , 21)



- A. (20 , 10)
- B. (28 , 14)
- C. (13 , 7)
- D. (12 , 6)



- A. (16 , 4)
- B. (24 , 6)
- C. (28 , 7)
- D. (12 , 3)

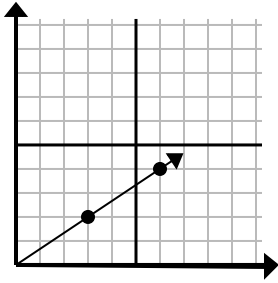
- 1. **A**
- 2. **D**
- 3. **C**
- 4. **C**
- 5. **B**
- 6. **C**
- 7. **C**
- 8. **D**
- 9. **D**



Determine which choice represents a point on the line if it were to continue.

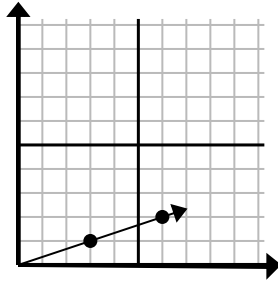
Answers

1)



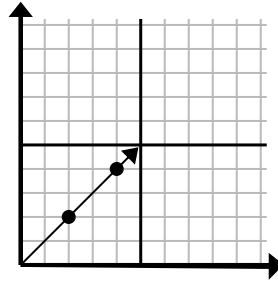
- A. (21, 14)
- B. (12, 8)
- C. (9, 6)
- D. (15, 10)

2)



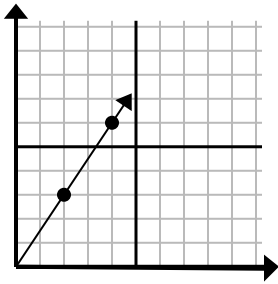
- A. (18, 6)
- B. (12, 4)
- C. (9, 3)
- D. (10, 3)

3)



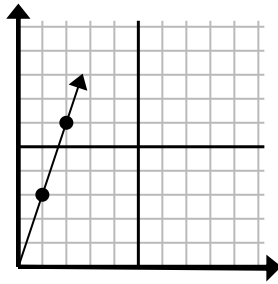
- A. (6, 6)
- B. (12, 12)
- C. (7, 7)
- D. (8, 4)

4)



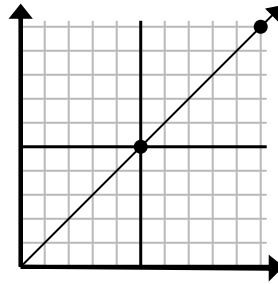
- A. (6, 9)
- B. (14, 21)
- C. (7, 5)
- D. (8, 7)

5)



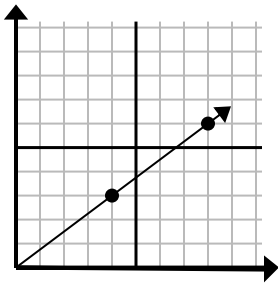
- A. (5, 4)
- B. (4, 8)
- C. (7, 21)
- D. (3, 9)

6)



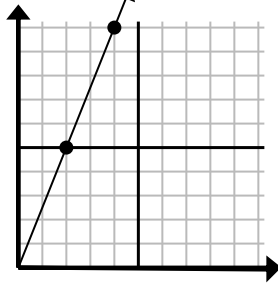
- A. (15, 6)
- B. (30, 30)
- C. (15, 15)
- D. (35, 35)

7)



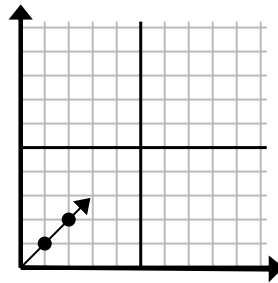
- A. (10, 5)
- B. (10, 6)
- C. (12, 9)
- D. (28, 21)

8)



- A. (12, 30)
- B. (8, 20)
- C. (6, 15)
- D. (8, 6)

9)



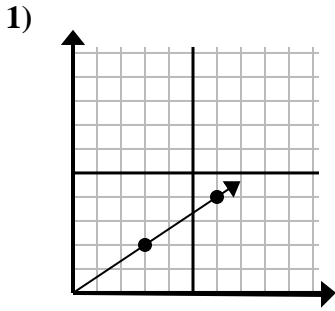
- A. (3, 3)
- B. (3, 2)
- C. (6, 6)
- D. (6, 3)

1. _____
2. _____
3. _____
4. _____
5. _____
6. _____
7. _____
8. _____
9. _____

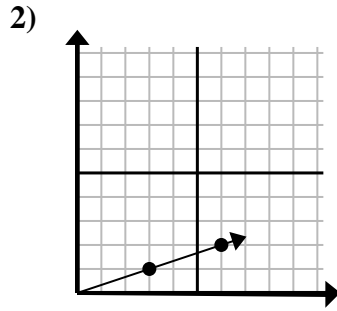


Determine which choice represents a point on the line if it were to continue.

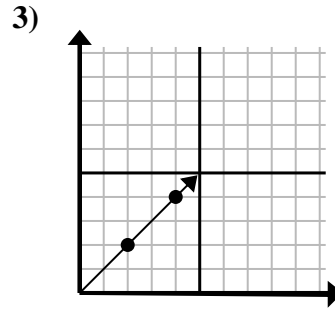
Answers



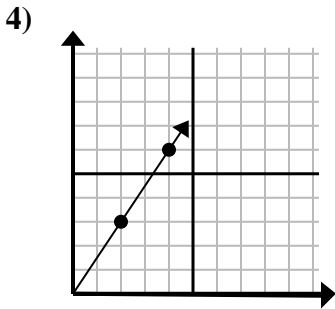
- A. (21 , 14)
- B. (12 , 8)
- C. (9 , 6)
- D. (15 , 10)



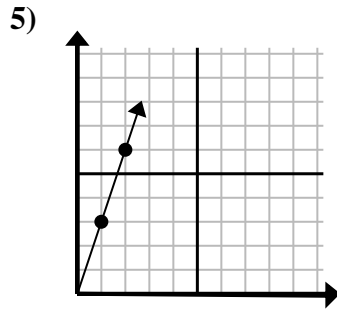
- A. (18 , 6)
- B. (12 , 4)
- C. (9 , 3)
- D. (10 , 3)



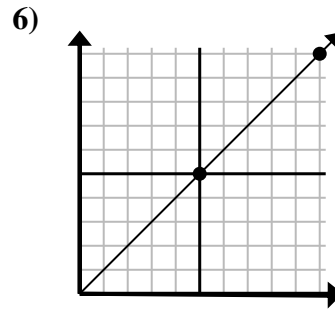
- A. (6 , 6)
- B. (12 , 12)
- C. (7 , 7)
- D. (8 , 4)



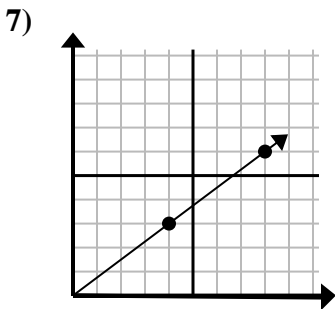
- A. (6 , 9)
- B. (14 , 21)
- C. (7 , 5)
- D. (8 , 7)



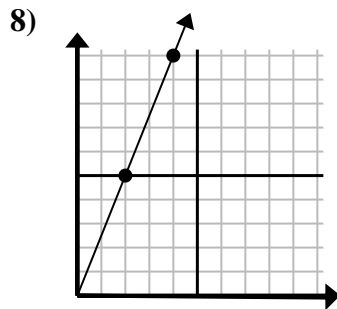
- A. (5 , 4)
- B. (4 , 8)
- C. (7 , 21)
- D. (3 , 9)



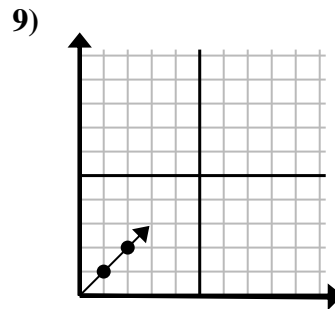
- A. (15 , 6)
- B. (30 , 30)
- C. (15 , 15)
- D. (35 , 35)



- A. (10 , 5)
- B. (10 , 6)
- C. (12 , 9)
- D. (28 , 21)



- A. (12 , 30)
- B. (8 , 20)
- C. (6 , 15)
- D. (8 , 6)



- A. (3 , 3)
- B. (3 , 2)
- C. (6 , 6)
- D. (6 , 3)

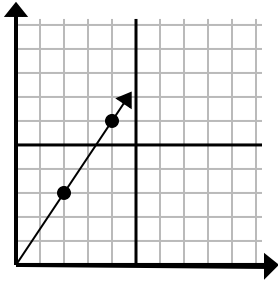
- 1. **C**
- 2. **C**
- 3. **A**
- 4. **A**
- 5. **D**
- 6. **C**
- 7. **C**
- 8. **C**
- 9. **A**



Determine which choice represents a point on the line if it were to continue.

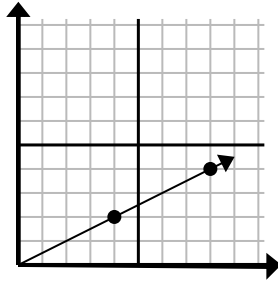
Answers

1)



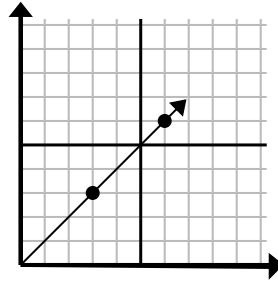
- A. (6, 9)
- B. (8, 6)
- C. (5, 8)
- D. (5, 5)

2)



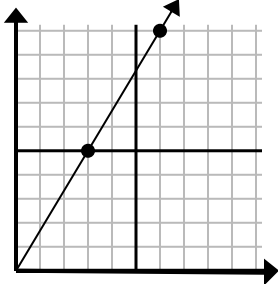
- A. (12, 7)
- B. (12, 6)
- C. (24, 12)
- D. (20, 10)

3)



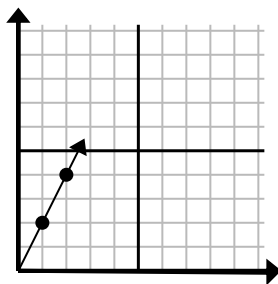
- A. (11, 5)
- B. (9, 9)
- C. (18, 18)
- D. (11, 8)

4)



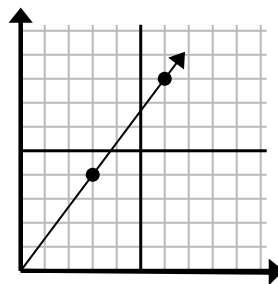
- A. (8, 9)
- B. (12, 20)
- C. (9, 15)
- D. (11, 6)

5)



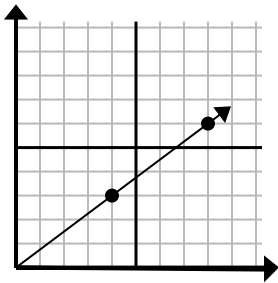
- A. (7, 14)
- B. (7, 7)
- C. (3, 6)
- D. (6, 12)

6)



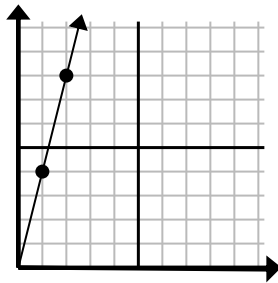
- A. (18, 24)
- B. (21, 28)
- C. (9, 12)
- D. (11, 9)

7)



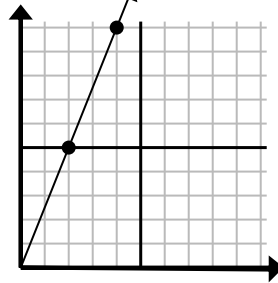
- A. (12, 9)
- B. (28, 21)
- C. (24, 18)
- D. (11, 8)

8)



- A. (3, 12)
- B. (4, 6)
- C. (4, 16)
- D. (7, 28)

9)



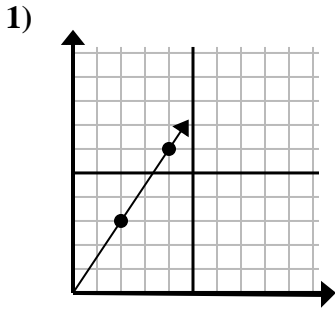
- A. (8, 20)
- B. (14, 35)
- C. (5, 9)
- D. (6, 15)

1. _____
2. _____
3. _____
4. _____
5. _____
6. _____
7. _____
8. _____
9. _____

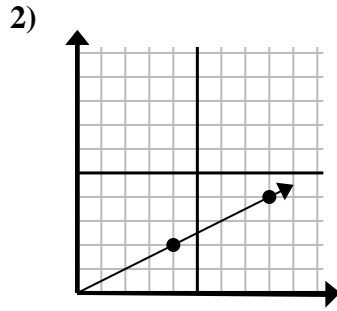


Determine which choice represents a point on the line if it were to continue.

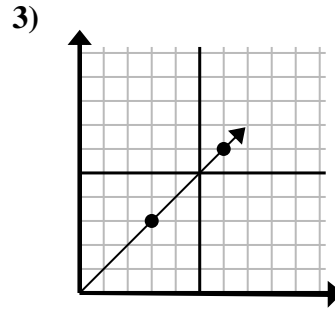
Answers



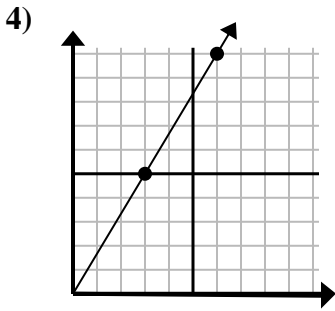
- A. (6, 9)
- B. (8, 6)
- C. (5, 8)
- D. (5, 5)



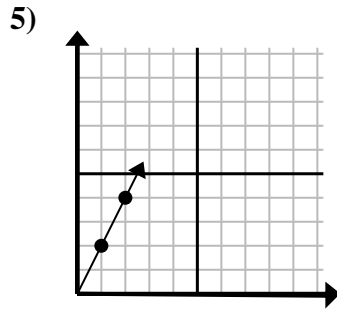
- A. (12, 7)
- B. (12, 6)
- C. (24, 12)
- D. (20, 10)



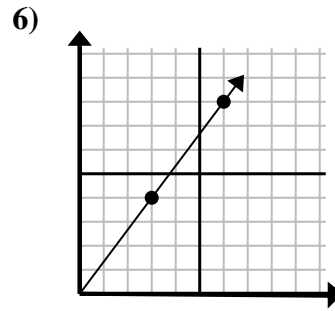
- A. (11, 5)
- B. (9, 9)
- C. (18, 18)
- D. (11, 8)



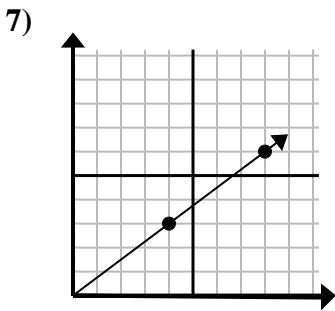
- A. (8, 9)
- B. (12, 20)
- C. (9, 15)
- D. (11, 6)



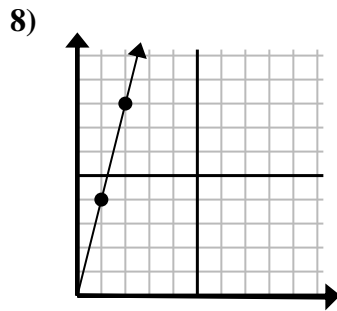
- A. (7, 14)
- B. (7, 7)
- C. (3, 6)
- D. (6, 12)



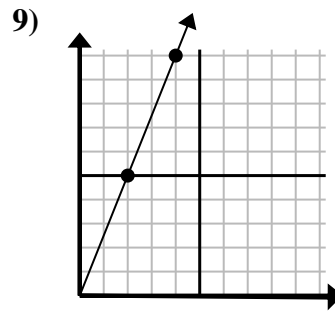
- A. (18, 24)
- B. (21, 28)
- C. (9, 12)
- D. (11, 9)



- A. (12, 9)
- B. (28, 21)
- C. (24, 18)
- D. (11, 8)



- A. (3, 12)
- B. (4, 6)
- C. (4, 16)
- D. (7, 28)



- A. (8, 20)
- B. (14, 35)
- C. (5, 9)
- D. (6, 15)

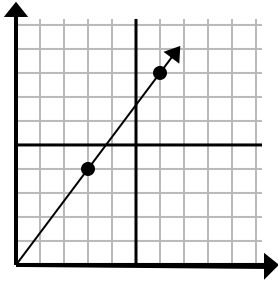
- 1. **A**
- 2. **B**
- 3. **B**
- 4. **C**
- 5. **C**
- 6. **C**
- 7. **A**
- 8. **A**
- 9. **D**



Determine which choice represents a point on the line if it were to continue.

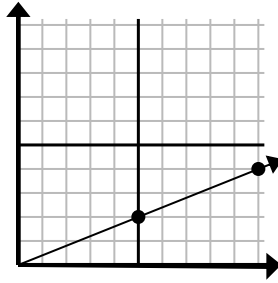
Answers

1)



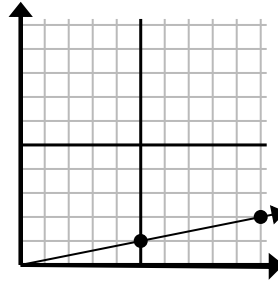
- A. (18 , 24)
- B. (15 , 20)
- C. (9 , 12)
- D. (9 , 5)

2)



- A. (11 , 7)
- B. (25 , 10)
- C. (30 , 12)
- D. (15 , 6)

3)



- A. (15 , 3)
- B. (20 , 4)
- C. (30 , 6)
- D. (12 , 6)

1. _____

2. _____

3. _____

4. _____

5. _____

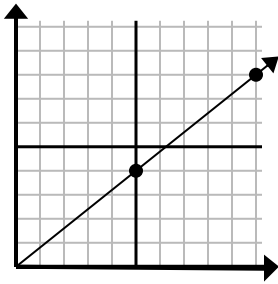
6. _____

7. _____

8. _____

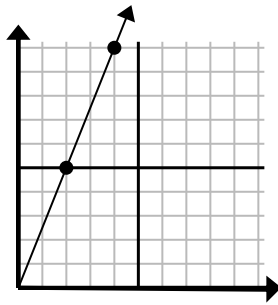
9. _____

4)



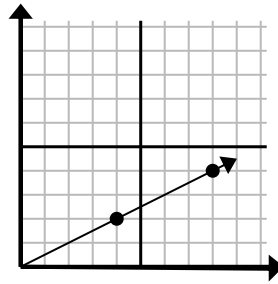
- A. (13 , 5)
- B. (15 , 12)
- C. (30 , 24)
- D. (11 , 6)

5)



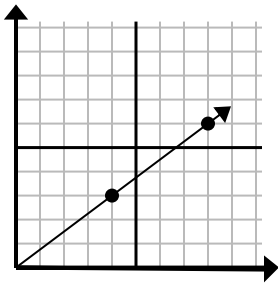
- A. (8 , 20)
- B. (7 , 6)
- C. (6 , 15)
- D. (10 , 25)

6)



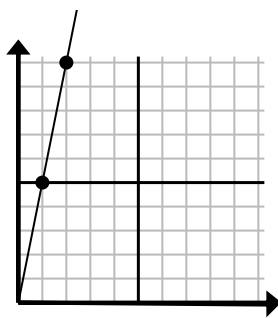
- A. (24 , 12)
- B. (28 , 14)
- C. (12 , 6)
- D. (10 , 4)

7)



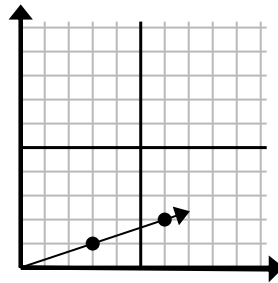
- A. (12 , 9)
- B. (24 , 18)
- C. (12 , 4)
- D. (16 , 12)

8)



- A. (6 , 8)
- B. (3 , 15)
- C. (7 , 7)
- D. (6 , 30)

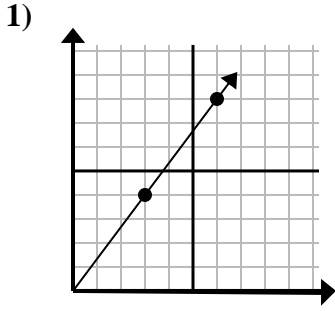
9)



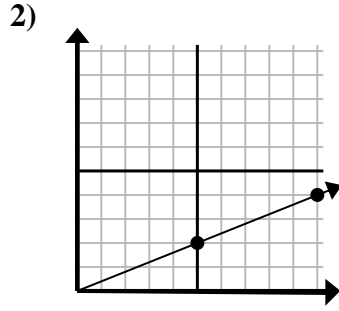
- A. (9 , 3)
- B. (8 , 6)
- C. (7 , 2)
- D. (18 , 6)



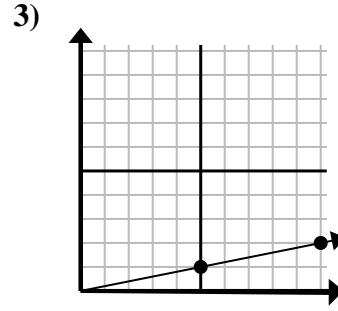
Determine which choice represents a point on the line if it were to continue.



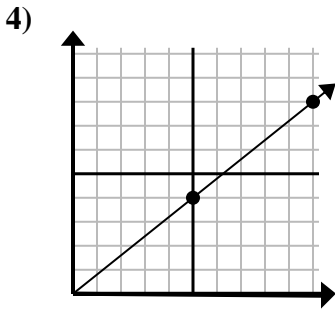
- A. (18 , 24)
- B. (15 , 20)
- C. (9 , 12)
- D. (9 , 5)



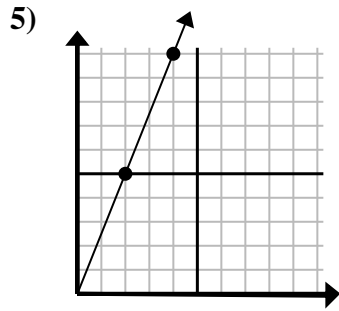
- A. (11 , 7)
- B. (25 , 10)
- C. (30 , 12)
- D. (15 , 6)



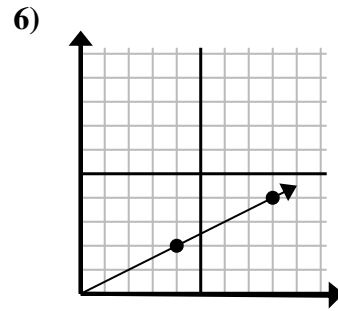
- A. (15 , 3)
- B. (20 , 4)
- C. (30 , 6)
- D. (12 , 6)



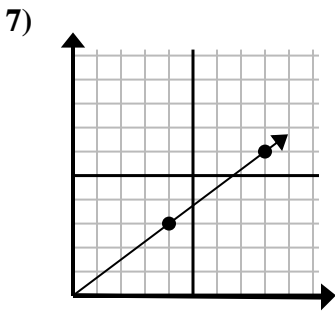
- A. (13 , 5)
- B. (15 , 12)
- C. (30 , 24)
- D. (11 , 6)



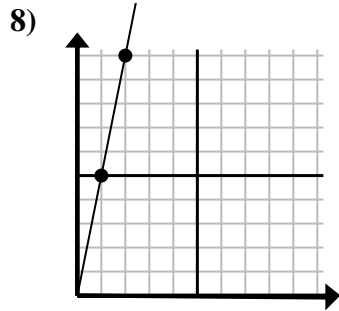
- A. (8 , 20)
- B. (7 , 6)
- C. (6 , 15)
- D. (10 , 25)



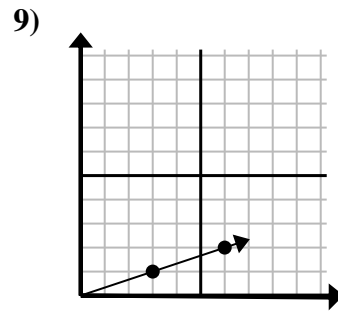
- A. (24 , 12)
- B. (28 , 14)
- C. (12 , 6)
- D. (10 , 4)



- A. (12 , 9)
- B. (24 , 18)
- C. (12 , 4)
- D. (16 , 12)



- A. (6 , 8)
- B. (3 , 15)
- C. (7 , 7)
- D. (6 , 30)



- A. (9 , 3)
- B. (8 , 6)
- C. (7 , 2)
- D. (18 , 6)

Answers

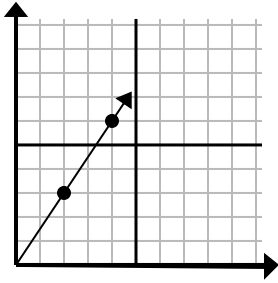
- 1. **C**
- 2. **D**
- 3. **A**
- 4. **B**
- 5. **C**
- 6. **C**
- 7. **A**
- 8. **B**
- 9. **A**



Determine which choice represents a point on the line if it were to continue.

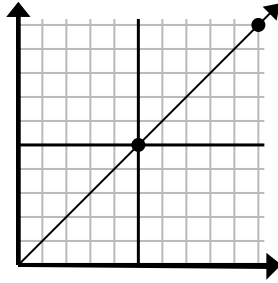
Answers

1)



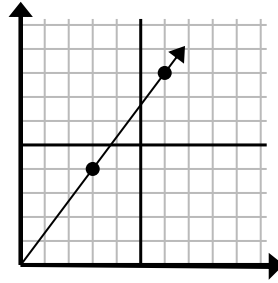
- A. (6, 9)
- B. (5, 4)
- C. (12, 18)
- D. (14, 21)

2)



- A. (30, 30)
- B. (15, 15)
- C. (15, 7)
- D. (20, 20)

3)



- A. (8, 5)
- B. (12, 16)
- C. (9, 12)
- D. (11, 6)

1. _____

2. _____

3. _____

4. _____

5. _____

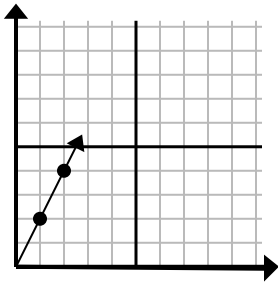
6. _____

7. _____

8. _____

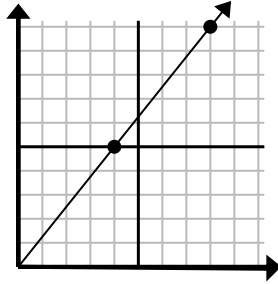
9. _____

4)



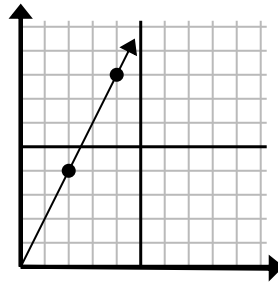
- A. (3, 6)
- B. (4, 8)
- C. (6, 12)
- D. (7, 14)

5)



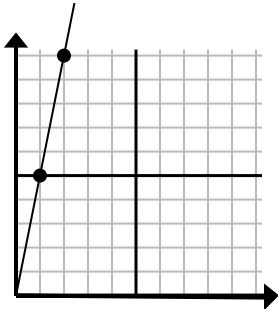
- A. (16, 20)
- B. (13, 10)
- C. (28, 35)
- D. (12, 15)

6)



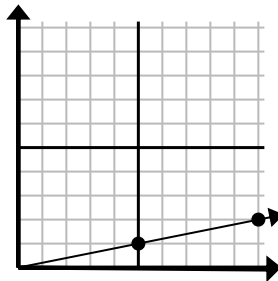
- A. (14, 28)
- B. (7, 8)
- C. (10, 20)
- D. (6, 12)

7)



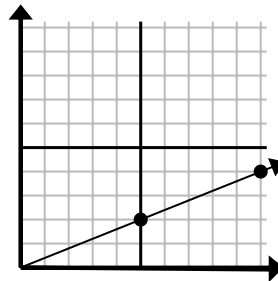
- A. (5, 8)
- B. (7, 35)
- C. (3, 15)
- D. (6, 30)

8)



- A. (25, 5)
- B. (15, 3)
- C. (35, 7)
- D. (11, 4)

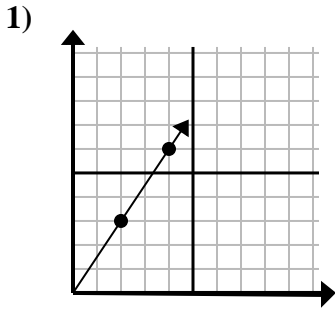
9)



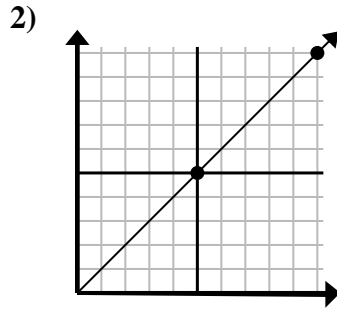
- A. (20, 8)
- B. (14, 6)
- C. (15, 6)
- D. (25, 10)



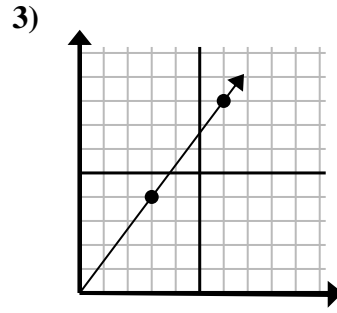
Determine which choice represents a point on the line if it were to continue.



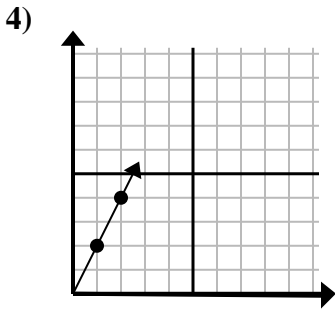
- A. (6, 9)
- B. (5, 4)
- C. (12, 18)
- D. (14, 21)



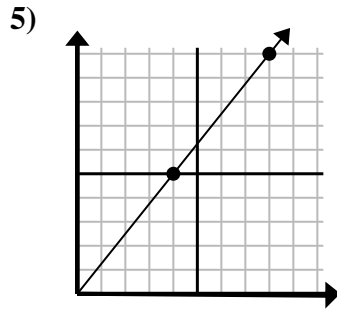
- A. (30, 30)
- B. (15, 15)
- C. (15, 7)
- D. (20, 20)



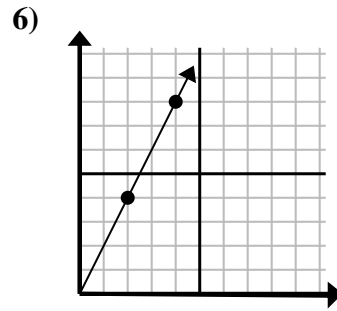
- A. (8, 5)
- B. (12, 16)
- C. (9, 12)
- D. (11, 6)



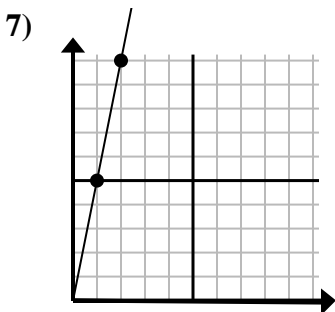
- A. (3, 6)
- B. (4, 8)
- C. (6, 12)
- D. (7, 14)



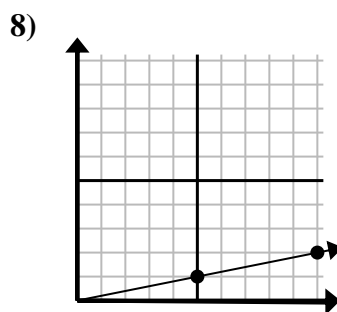
- A. (16, 20)
- B. (13, 10)
- C. (28, 35)
- D. (12, 15)



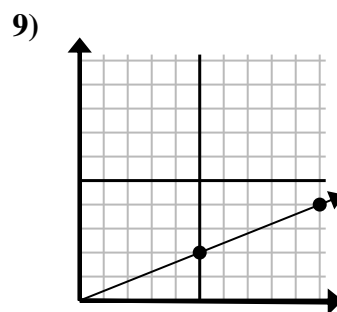
- A. (14, 28)
- B. (7, 8)
- C. (10, 20)
- D. (6, 12)



- A. (5, 8)
- B. (7, 35)
- C. (3, 15)
- D. (6, 30)



- A. (25, 5)
- B. (15, 3)
- C. (35, 7)
- D. (11, 4)



- A. (20, 8)
- B. (14, 6)
- C. (15, 6)
- D. (25, 10)

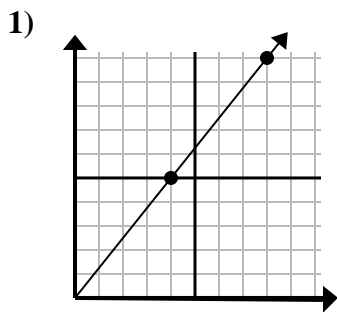
Answers

- 1. **A**
- 2. **B**
- 3. **C**
- 4. **A**
- 5. **D**
- 6. **D**
- 7. **C**
- 8. **B**
- 9. **C**

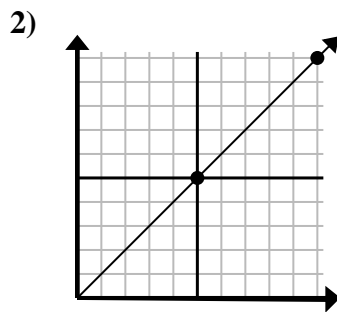


Determine which choice represents a point on the line if it were to continue.

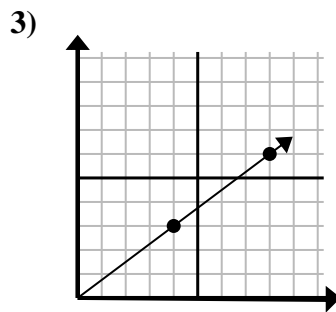
Answers



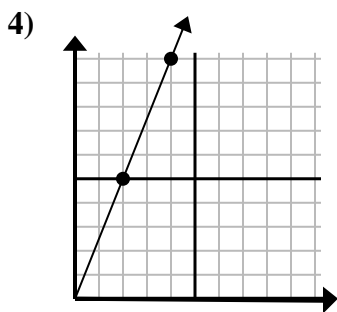
- A. (20 , 25)
- B. (12 , 15)
- C. (24 , 30)
- D. (11 , 10)



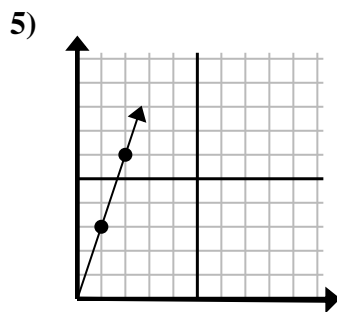
- A. (15 , 15)
- B. (12 , 10)
- C. (14 , 6)
- D. (25 , 25)



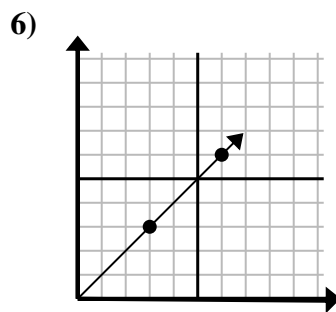
- A. (28 , 21)
- B. (12 , 9)
- C. (24 , 18)
- D. (16 , 12)



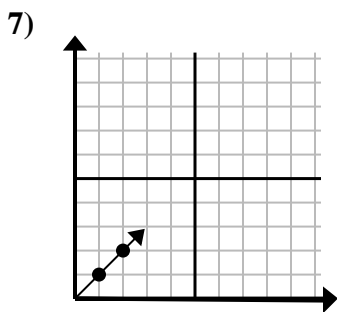
- A. (6 , 15)
- B. (5 , 9)
- C. (8 , 20)
- D. (12 , 30)



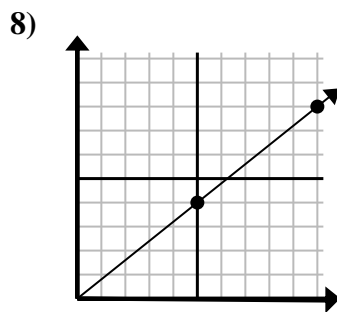
- A. (4 , 12)
- B. (3 , 9)
- C. (4 , 6)
- D. (7 , 6)



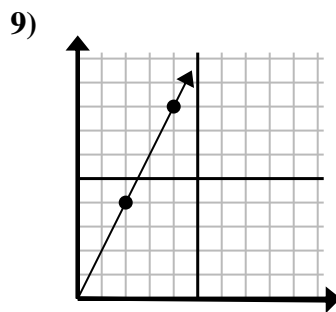
- A. (12 , 12)
- B. (9 , 9)
- C. (18 , 18)
- D. (9 , 5)



- A. (5 , 6)
- B. (3 , 3)
- C. (5 , 5)
- D. (7 , 3)



- A. (15 , 12)
- B. (35 , 28)
- C. (14 , 8)
- D. (14 , 5)



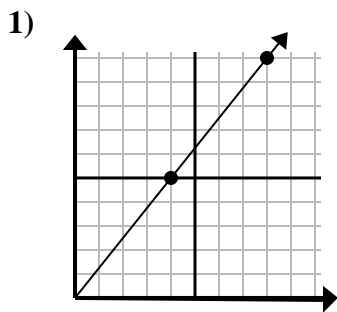
- A. (6 , 12)
- B. (7 , 9)
- C. (10 , 20)
- D. (8 , 16)

1. _____
2. _____
3. _____
4. _____
5. _____
6. _____
7. _____
8. _____
9. _____

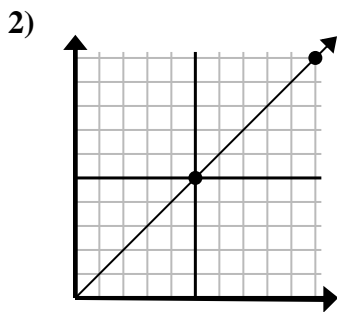


Determine which choice represents a point on the line if it were to continue.

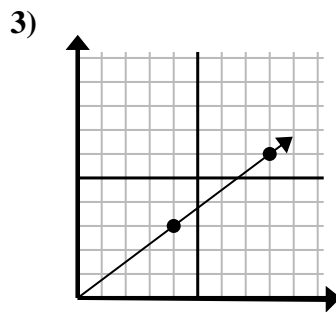
Answers



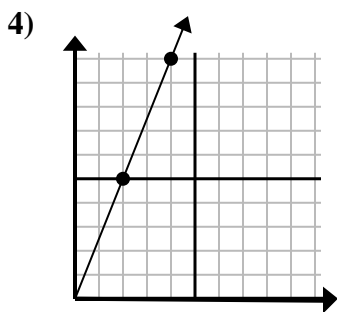
- A. (20 , 25)
- B. (12 , 15)
- C. (24 , 30)
- D. (11 , 10)



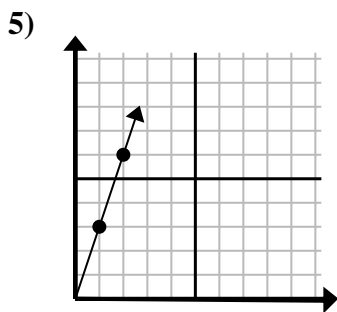
- A. (15 , 15)
- B. (12 , 10)
- C. (14 , 6)
- D. (25 , 25)



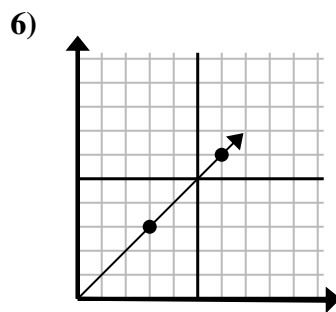
- A. (28 , 21)
- B. (12 , 9)
- C. (24 , 18)
- D. (16 , 12)



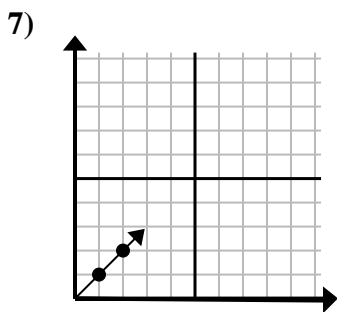
- A. (6 , 15)
- B. (5 , 9)
- C. (8 , 20)
- D. (12 , 30)



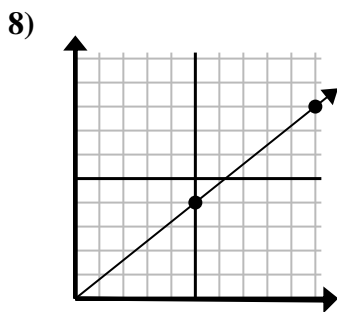
- A. (4 , 12)
- B. (3 , 9)
- C. (4 , 6)
- D. (7 , 6)



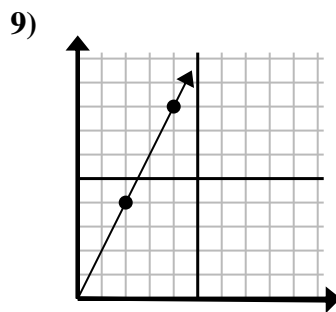
- A. (12 , 12)
- B. (9 , 9)
- C. (18 , 18)
- D. (9 , 5)



- A. (5 , 6)
- B. (3 , 3)
- C. (5 , 5)
- D. (7 , 3)



- A. (15 , 12)
- B. (35 , 28)
- C. (14 , 8)
- D. (14 , 5)



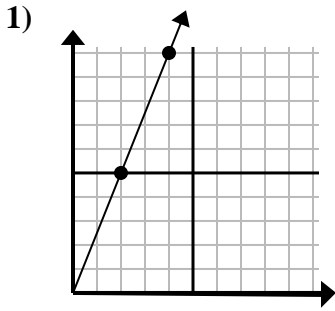
- A. (6 , 12)
- B. (7 , 9)
- C. (10 , 20)
- D. (8 , 16)

- 1. **B**
- 2. **A**
- 3. **B**
- 4. **A**
- 5. **B**
- 6. **B**
- 7. **B**
- 8. **A**
- 9. **A**

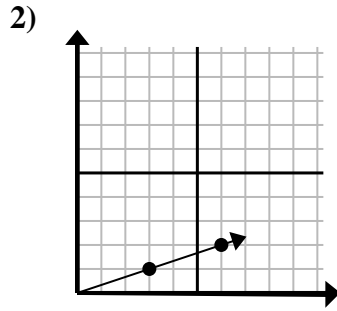


Determine which choice represents a point on the line if it were to continue.

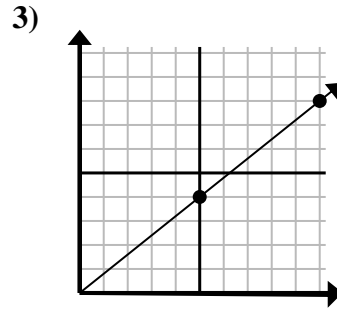
Answers



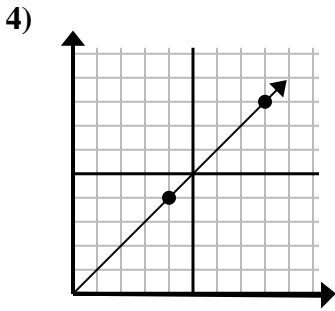
- A. (12, 30)
- B. (8, 20)
- C. (8, 10)
- D. (6, 15)



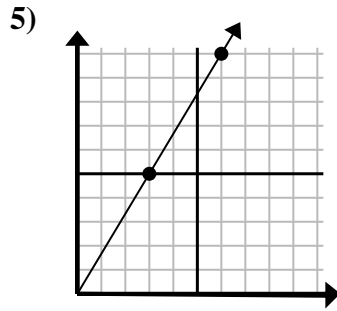
- A. (9, 3)
- B. (10, 6)
- C. (15, 5)
- D. (18, 6)



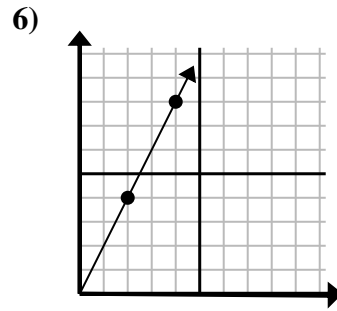
- A. (11, 9)
- B. (15, 12)
- C. (20, 16)
- D. (25, 20)



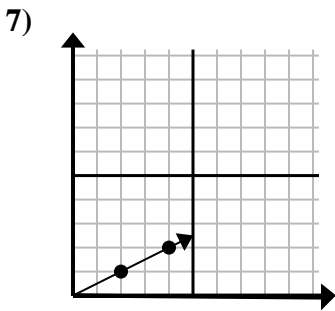
- A. (16, 16)
- B. (12, 12)
- C. (13, 5)
- D. (28, 28)



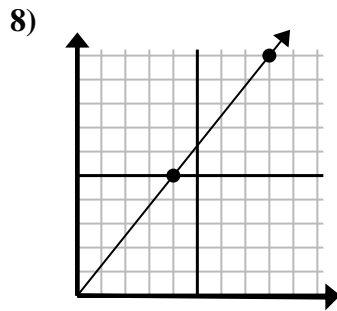
- A. (8, 10)
- B. (15, 25)
- C. (7, 6)
- D. (9, 15)



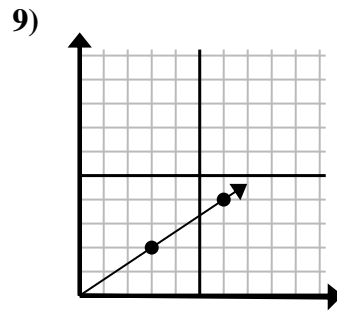
- A. (6, 5)
- B. (6, 12)
- C. (12, 24)
- D. (8, 16)



- A. (9, 2)
- B. (6, 3)
- C. (14, 7)
- D. (7, 4)



- A. (9, 10)
- B. (12, 15)
- C. (20, 25)
- D. (24, 30)

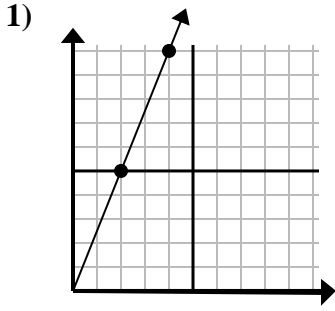


- A. (18, 12)
- B. (8, 7)
- C. (11, 5)
- D. (9, 6)

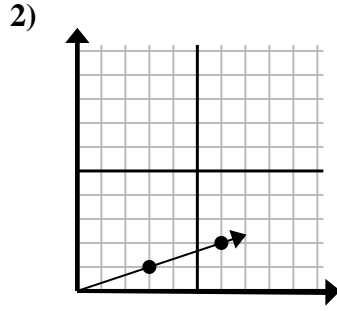
1. _____
2. _____
3. _____
4. _____
5. _____
6. _____
7. _____
8. _____
9. _____



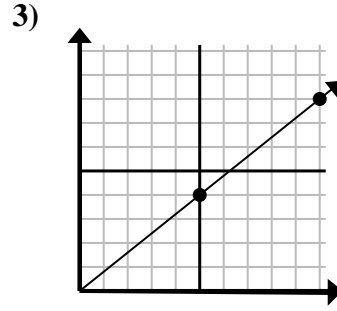
Determine which choice represents a point on the line if it were to continue.



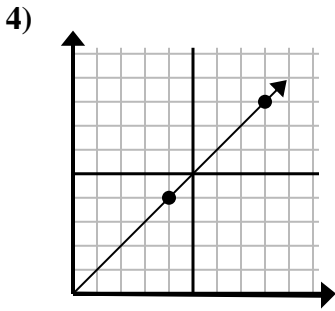
- A. (12, 30)
- B. (8, 20)
- C. (8, 10)
- D. (6, 15)



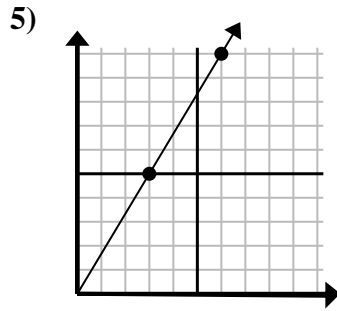
- A. (9, 3)
- B. (10, 6)
- C. (15, 5)
- D. (18, 6)



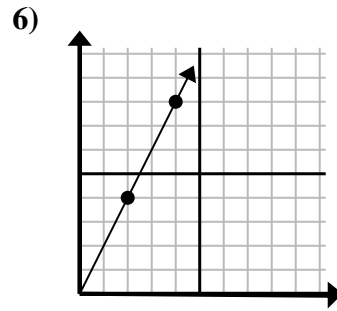
- A. (11, 9)
- B. (15, 12)
- C. (20, 16)
- D. (25, 20)



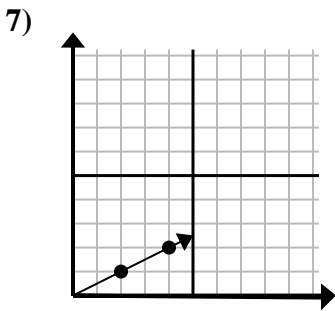
- A. (16, 16)
- B. (12, 12)
- C. (13, 5)
- D. (28, 28)



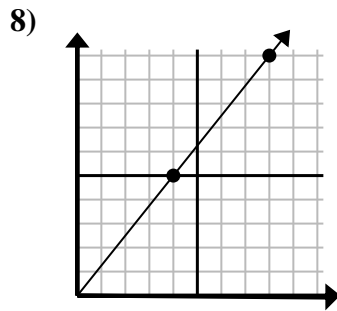
- A. (8, 10)
- B. (15, 25)
- C. (7, 6)
- D. (9, 15)



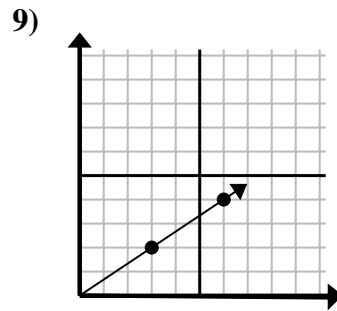
- A. (6, 5)
- B. (6, 12)
- C. (12, 24)
- D. (8, 16)



- A. (9, 2)
- B. (6, 3)
- C. (14, 7)
- D. (7, 4)



- A. (9, 10)
- B. (12, 15)
- C. (20, 25)
- D. (24, 30)



- A. (18, 12)
- B. (8, 7)
- C. (11, 5)
- D. (9, 6)

Answers

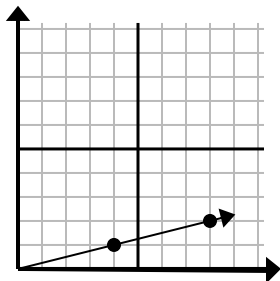
- 1. **D**
- 2. **A**
- 3. **B**
- 4. **B**
- 5. **D**
- 6. **B**
- 7. **B**
- 8. **B**
- 9. **D**



Determine which choice represents a point on the line if it were to continue.

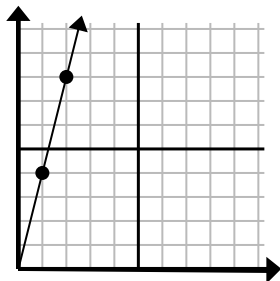
Answers

1)



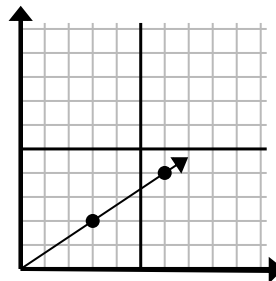
- A. (10, 4)
- B. (13, 5)
- C. (12, 3)
- D. (9, 3)

2)



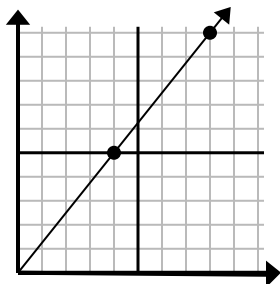
- A. (3, 9)
- B. (7, 8)
- C. (5, 5)
- D. (3, 12)

3)



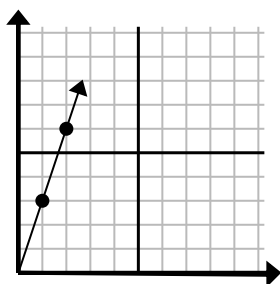
- A. (12, 8)
- B. (9, 6)
- C. (18, 12)
- D. (11, 3)

4)



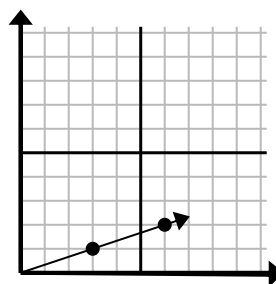
- A. (9, 9)
- B. (12, 15)
- C. (12, 7)
- D. (28, 35)

5)



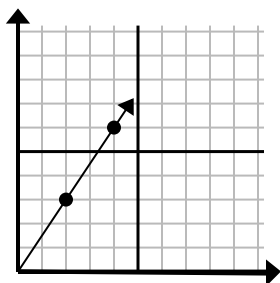
- A. (3, 9)
- B. (4, 12)
- C. (3, 5)
- D. (7, 4)

6)



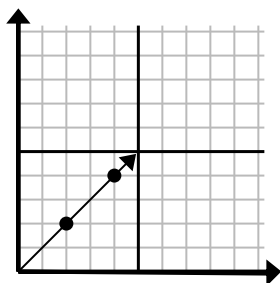
- A. (9, 3)
- B. (11, 4)
- C. (11, 5)
- D. (15, 5)

7)



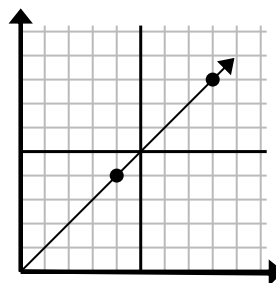
- A. (8, 7)
- B. (6, 4)
- C. (6, 9)
- D. (12, 18)

8)



- A. (6, 6)
- B. (8, 8)
- C. (10, 10)
- D. (14, 14)

9)



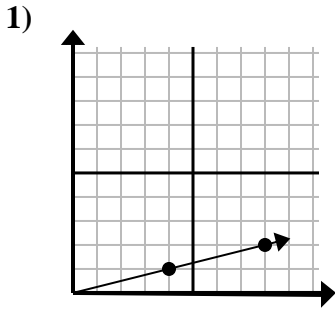
- A. (24, 24)
- B. (12, 12)
- C. (28, 28)
- D. (20, 20)

1. _____
2. _____
3. _____
4. _____
5. _____
6. _____
7. _____
8. _____
9. _____

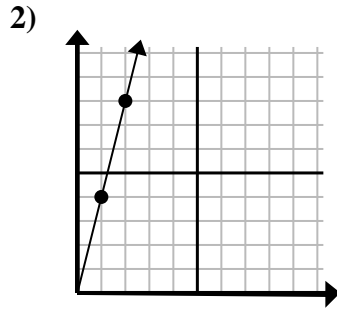


Determine which choice represents a point on the line if it were to continue.

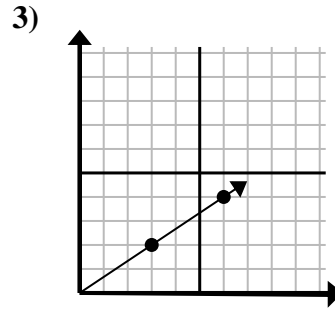
Answers



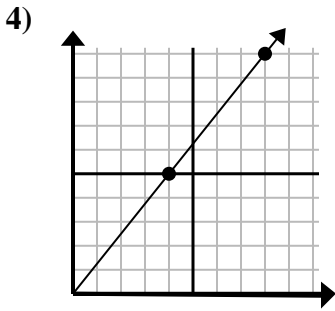
- A. (10, 4)
- B. (13, 5)
- C. (12, 3)
- D. (9, 3)



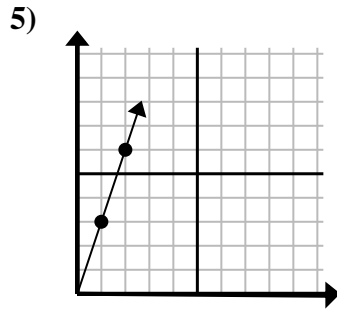
- A. (3, 9)
- B. (7, 8)
- C. (5, 5)
- D. (3, 12)



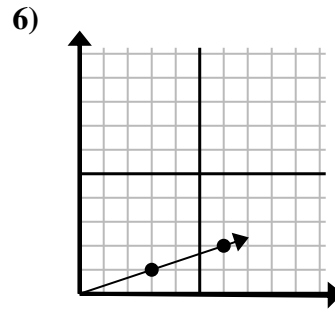
- A. (12, 8)
- B. (9, 6)
- C. (18, 12)
- D. (11, 3)



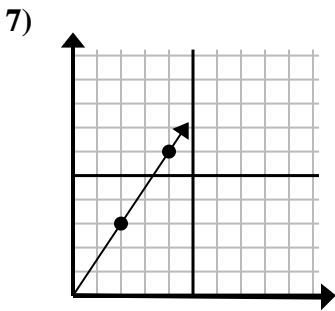
- A. (9, 9)
- B. (12, 15)
- C. (12, 7)
- D. (28, 35)



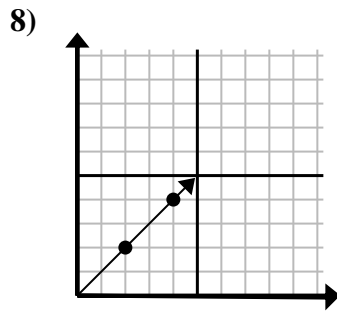
- A. (3, 9)
- B. (4, 12)
- C. (3, 5)
- D. (7, 4)



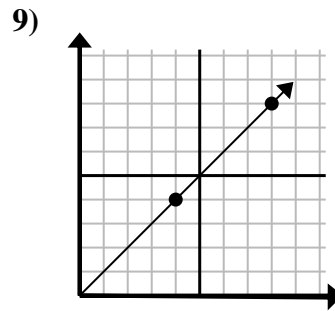
- A. (9, 3)
- B. (11, 4)
- C. (11, 5)
- D. (15, 5)



- A. (8, 7)
- B. (6, 4)
- C. (6, 9)
- D. (12, 18)



- A. (6, 6)
- B. (8, 8)
- C. (10, 10)
- D. (14, 14)



- A. (24, 24)
- B. (12, 12)
- C. (28, 28)
- D. (20, 20)

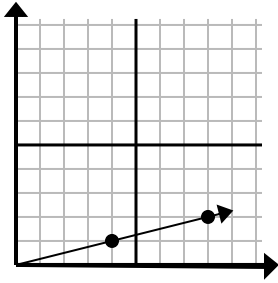
- 1. **C**
- 2. **D**
- 3. **B**
- 4. **B**
- 5. **A**
- 6. **A**
- 7. **C**
- 8. **A**
- 9. **B**



Determine which choice represents a point on the line if it were to continue.

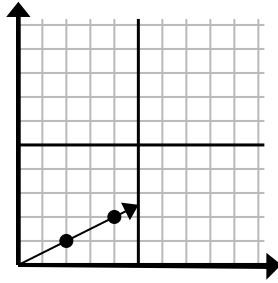
Answers

1)



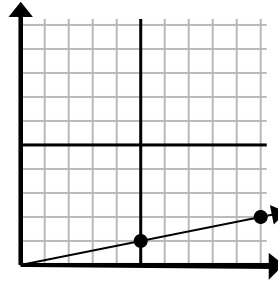
- A. (12, 3)
- B. (28, 7)
- C. (20, 5)
- D. (10, 2)

2)



- A. (6, 3)
- B. (10, 5)
- C. (14, 7)
- D. (7, 3)

3)



- A. (14, 3)
- B. (13, 5)
- C. (15, 3)
- D. (35, 7)

1. _____

2. _____

3. _____

4. _____

5. _____

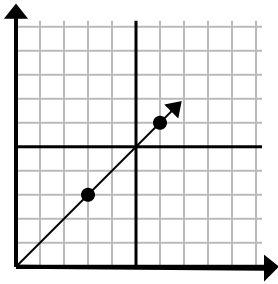
6. _____

7. _____

8. _____

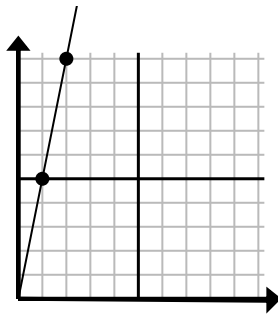
9. _____

4)



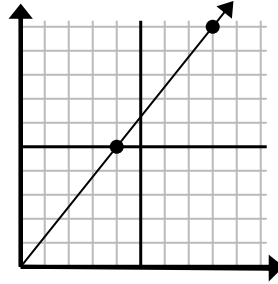
- A. (8, 7)
- B. (15, 15)
- C. (9, 9)
- D. (21, 21)

5)



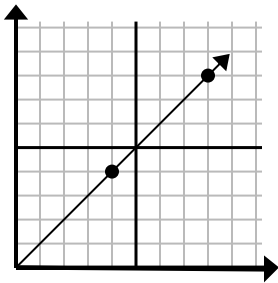
- A. (3, 15)
- B. (3, 7)
- C. (7, 35)
- D. (5, 25)

6)



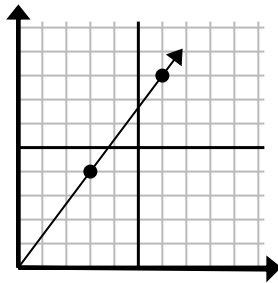
- A. (12, 10)
- B. (24, 30)
- C. (13, 9)
- D. (12, 15)

7)



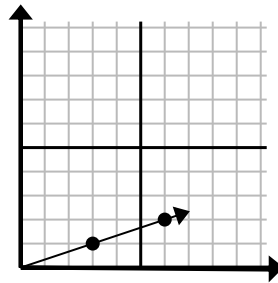
- A. (12, 8)
- B. (12, 12)
- C. (13, 8)
- D. (20, 20)

8)



- A. (21, 28)
- B. (8, 6)
- C. (9, 12)
- D. (9, 7)

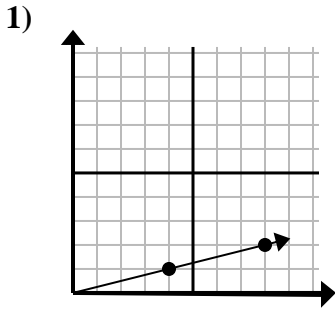
9)



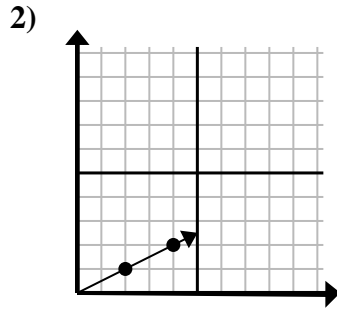
- A. (15, 5)
- B. (9, 3)
- C. (10, 2)
- D. (12, 4)



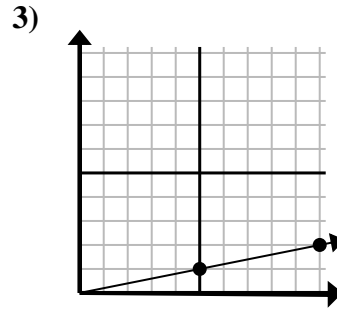
Determine which choice represents a point on the line if it were to continue.



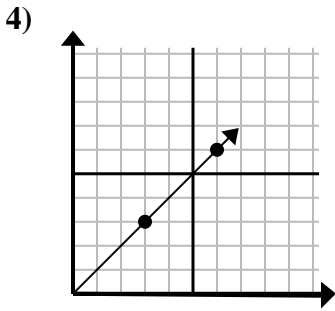
- A. (12, 3)
- B. (28, 7)
- C. (20, 5)
- D. (10, 2)



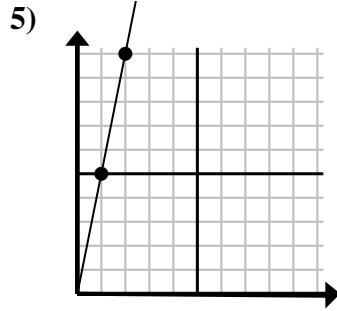
- A. (6, 3)
- B. (10, 5)
- C. (14, 7)
- D. (7, 3)



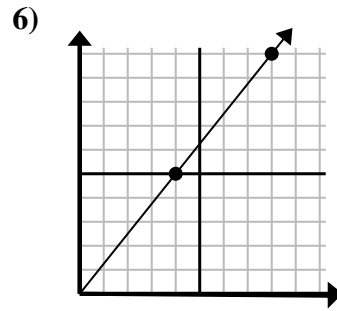
- A. (14, 3)
- B. (13, 5)
- C. (15, 3)
- D. (35, 7)



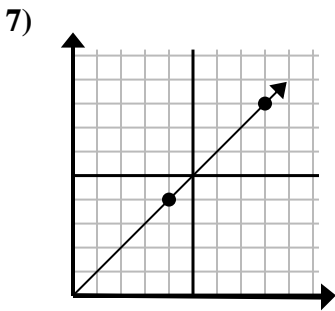
- A. (8, 7)
- B. (15, 15)
- C. (9, 9)
- D. (21, 21)



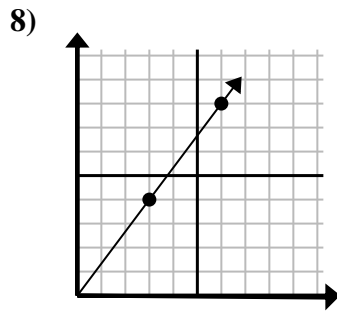
- A. (3, 15)
- B. (3, 7)
- C. (7, 35)
- D. (5, 25)



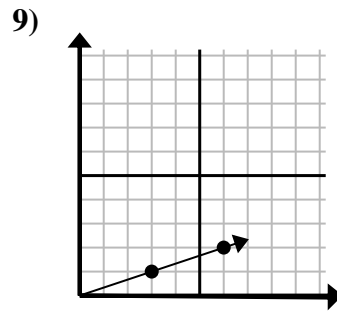
- A. (12, 10)
- B. (24, 30)
- C. (13, 9)
- D. (12, 15)



- A. (12, 8)
- B. (12, 12)
- C. (13, 8)
- D. (20, 20)



- A. (21, 28)
- B. (8, 6)
- C. (9, 12)
- D. (9, 7)



- A. (15, 5)
- B. (9, 3)
- C. (10, 2)
- D. (12, 4)

Answers

- 1. **A**
- 2. **A**
- 3. **C**
- 4. **C**
- 5. **A**
- 6. **D**
- 7. **B**
- 8. **C**
- 9. **B**