



Fill in the grid using the chart.

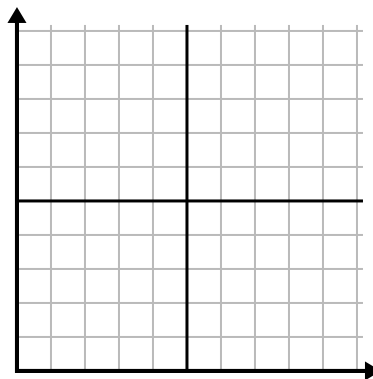
1)

| Week | 1 | 2 | 3 | 4 | 5 |
|----------------------|----|----|----|----|----|
| Water Used (gallons) | 50 | 40 | 20 | 10 | 30 |



2)

| Year | 1 | 2 | 3 | 4 | 5 |
|--------------------|---|---|---|---|---|
| Boxes of Pens Used | 5 | 7 | 8 | 6 | 1 |



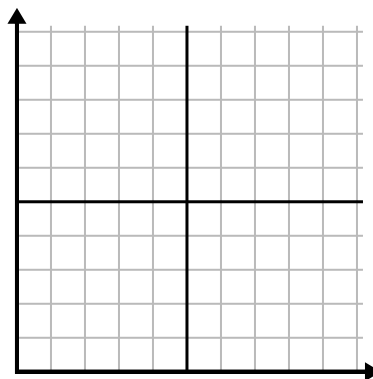
3)

| Day | 1 | 2 | 3 | 4 | 5 | 6 | 7 |
|-------------|---|---|---|---|---|---|----|
| Money Spent | 6 | 1 | 7 | 8 | 5 | 3 | 10 |



4)

| Year | 1 | 2 | 3 | 4 | 5 | 6 |
|---------------------|---|---|----|---|----|---|
| Ink Cartridges Used | 4 | 2 | 18 | 6 | 10 | 8 |



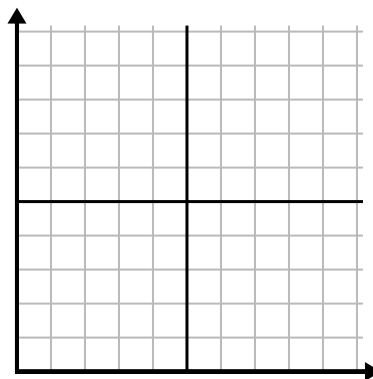
5)

| Hour | 1 | 2 | 3 | 4 | 5 | 6 | 7 |
|-------------|---|---|---|---|---|---|----|
| Amount Sold | 4 | 7 | 9 | 8 | 3 | 5 | 10 |



6)

| Week | 1 | 2 | 3 | 4 | 5 | 6 |
|---------------------|---|----|----|----|----|----|
| Hours of TV watched | 5 | 25 | 50 | 15 | 10 | 35 |

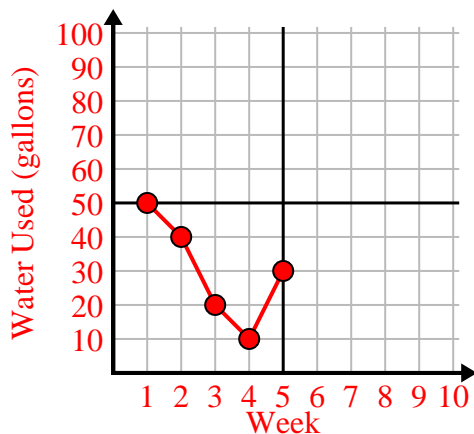




Fill in the grid using the chart.

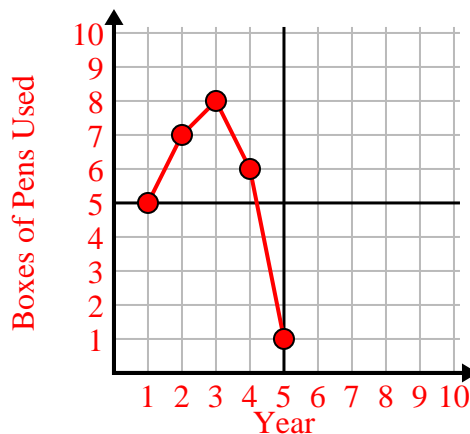
1)

| Week | 1 | 2 | 3 | 4 | 5 |
|----------------------|----|----|----|----|----|
| Water Used (gallons) | 50 | 40 | 20 | 10 | 30 |



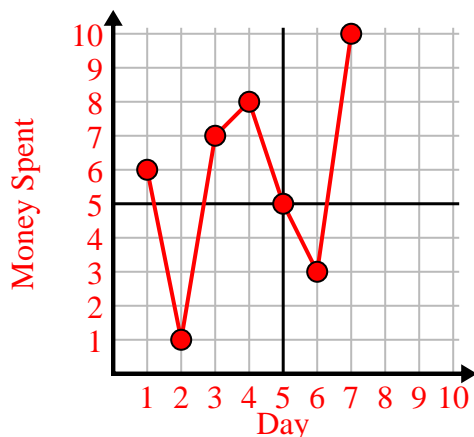
2)

| Year | 1 | 2 | 3 | 4 | 5 |
|--------------------|---|---|---|---|---|
| Boxes of Pens Used | 5 | 7 | 8 | 6 | 1 |



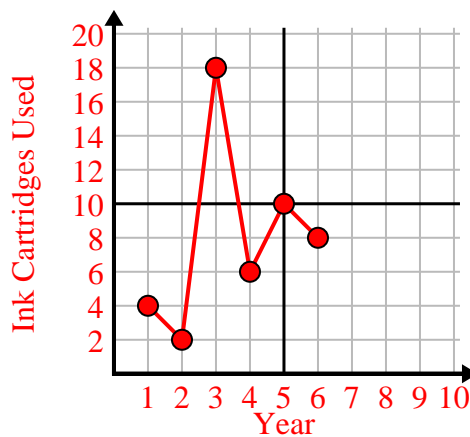
3)

| Day | 1 | 2 | 3 | 4 | 5 | 6 | 7 |
|-------------|---|---|---|---|---|---|----|
| Money Spent | 6 | 1 | 7 | 8 | 5 | 3 | 10 |



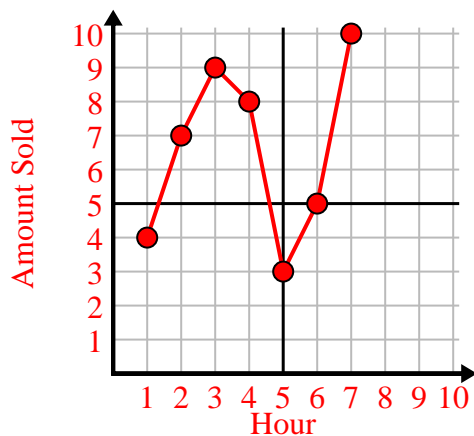
4)

| Year | 1 | 2 | 3 | 4 | 5 | 6 |
|---------------------|---|---|----|---|----|---|
| Ink Cartridges Used | 4 | 2 | 18 | 6 | 10 | 8 |



5)

| Hour | 1 | 2 | 3 | 4 | 5 | 6 | 7 |
|-------------|---|---|---|---|---|---|----|
| Amount Sold | 4 | 7 | 9 | 8 | 3 | 5 | 10 |



6)

| Week | 1 | 2 | 3 | 4 | 5 | 6 |
|---------------------|---|----|----|----|----|----|
| Hours of TV watched | 5 | 25 | 50 | 15 | 10 | 35 |

