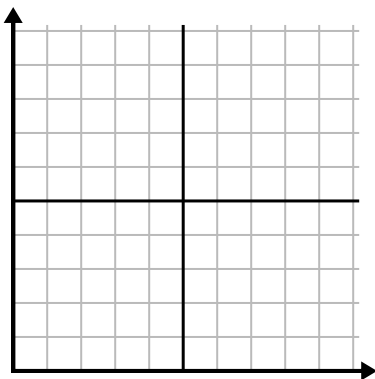




Fill in the grid using the chart.

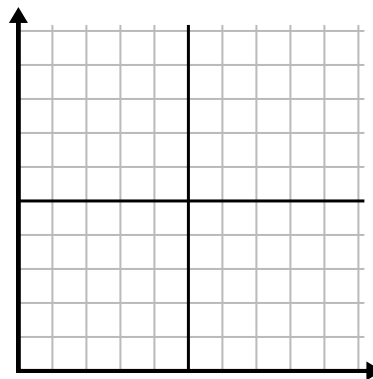
1)

Month	1	2	3	4	5	6
Electric Bill Price	175	50	250	200	100	150



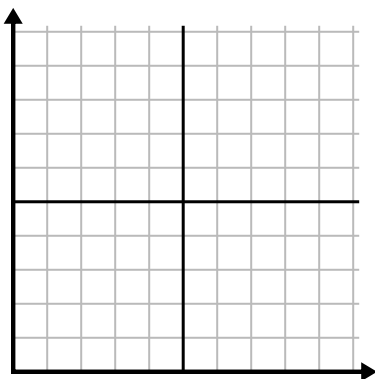
2)

Day	1	2	3	4	5
Meals Sold	900	300	600	1,000	400



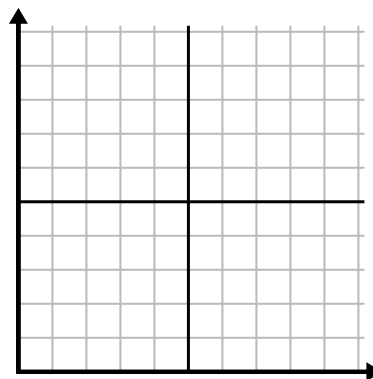
3)

Week	1	2	3	4	5	6	7
Hours of TV watched	15	30	50	35	10	25	45



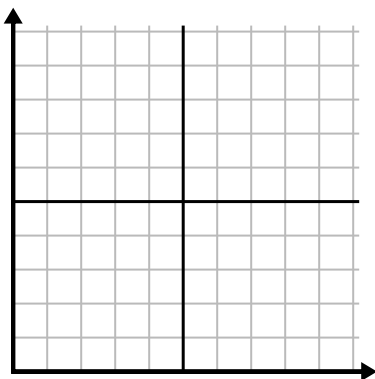
4)

Hour	1	2	3	4	5
Amount Sold	2	3	8	1	4



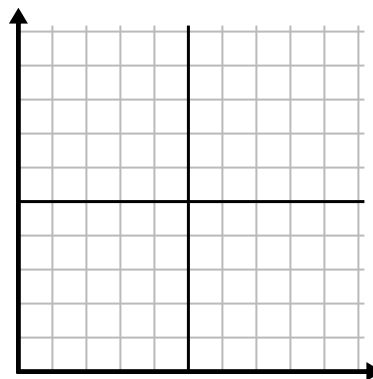
5)

Day	1	2	3	4	5
Calories Burned	200	180	40	80	120



6)

Year	1	2	3	4	5	6
Ink Cartridges Used	18	20	14	16	12	8

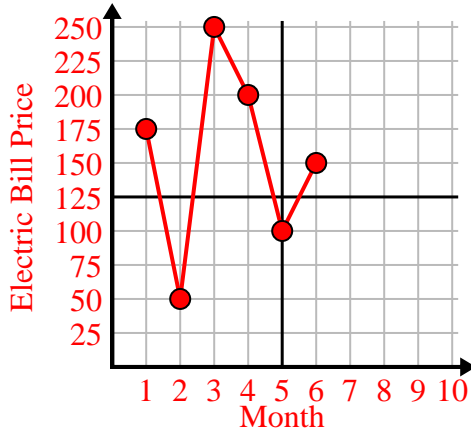




Fill in the grid using the chart.

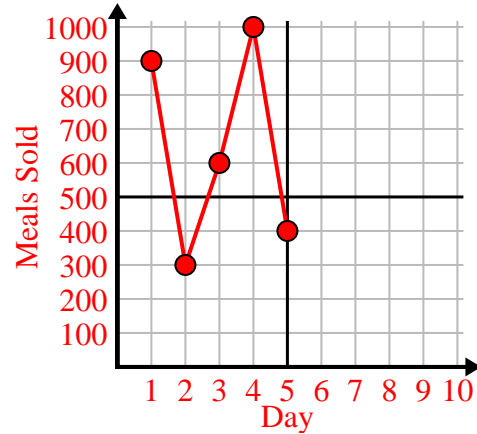
1)

Month	1	2	3	4	5	6
Electric Bill Price	175	50	250	200	100	150



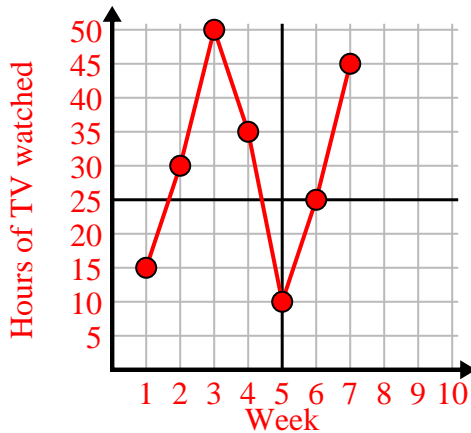
2)

Day	1	2	3	4	5
Meals Sold	900	300	600	1,000	400



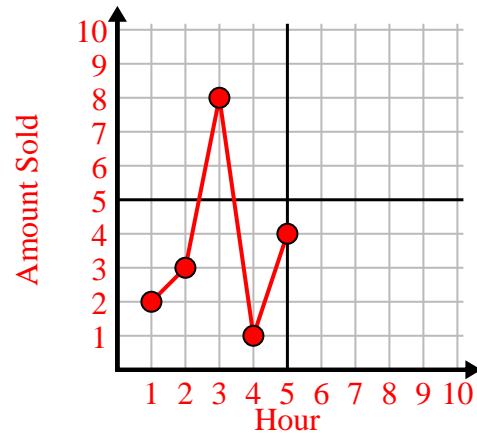
3)

Week	1	2	3	4	5	6	7
Hours of TV watched	15	30	50	35	10	25	45



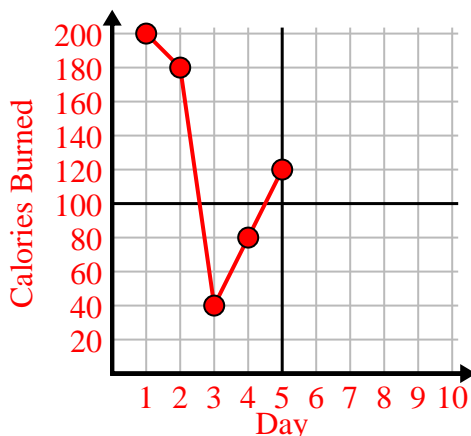
4)

Hour	1	2	3	4	5
Amount Sold	2	3	8	1	4



5)

Day	1	2	3	4	5
Calories Burned	200	180	40	80	120



6)

Year	1	2	3	4	5	6
Ink Cartridges Used	18	20	14	16	12	8

