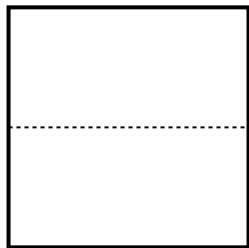



**Partition and label each shape.**


- Ex)** Split the shape into 8 equal parts and label each part.



- 1)** Split the shape into 2 equal parts and label each part.




- 2)** Split the shape into 6 equal parts and label each part.




- 3)** Split the shape into 3 equal parts and label each part.




- 4)** Split the shape into 4 equal parts and label each part.




- 5)** Split the shape into 2 equal parts and label each part.




- 6)** Split the shape into 4 equal parts and label each part.




- 7)** Split the shape into 8 equal parts and label each part.



- 8)** Split the shape into 6 equal parts and label each part.



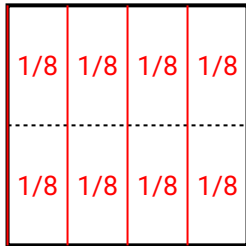
- 9)** Split the shape into 3 equal parts and label each part.



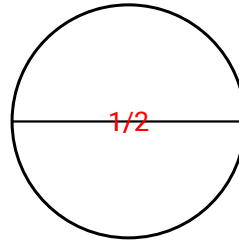


Partition and label each shape.

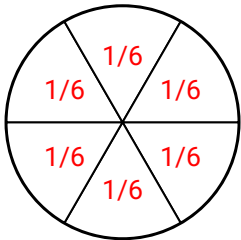
- Ex)** Split the shape into 8 equal parts and label each part.



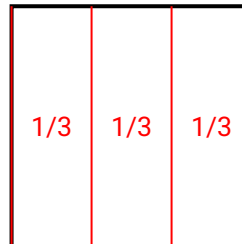
- 1)** Split the shape into 2 equal parts and label each part.



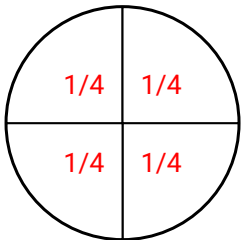
- 2)** Split the shape into 6 equal parts and label each part.



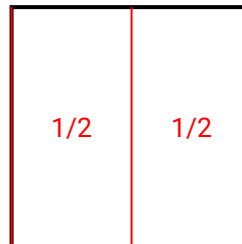
- 3)** Split the shape into 3 equal parts and label each part.



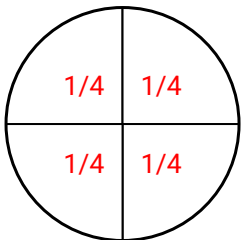
- 4)** Split the shape into 4 equal parts and label each part.



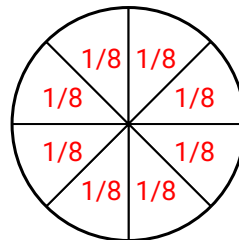
- 5)** Split the shape into 2 equal parts and label each part.



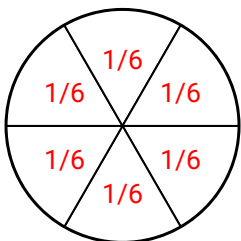
- 6)** Split the shape into 4 equal parts and label each part.



- 7)** Split the shape into 8 equal parts and label each part.



- 8)** Split the shape into 6 equal parts and label each part.



- 9)** Split the shape into 3 equal parts and label each part.

