




Use the numberline to solve each problem. The first is marked for you.


**Answers**




1. \_\_\_\_\_




2. \_\_\_\_\_



3. \_\_\_\_\_




4. \_\_\_\_\_



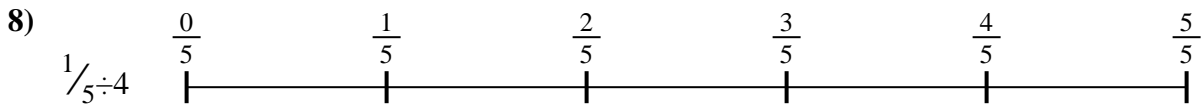
5. \_\_\_\_\_



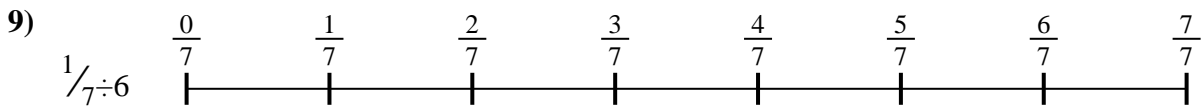
6. \_\_\_\_\_



7. \_\_\_\_\_



8. \_\_\_\_\_

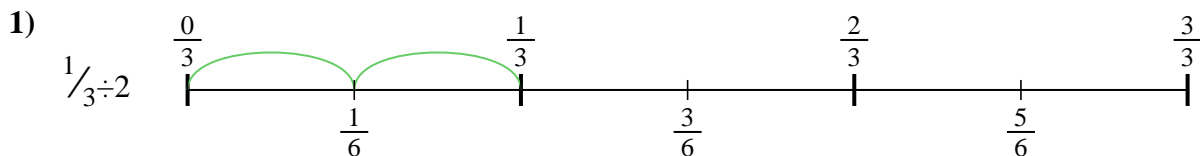


9. \_\_\_\_\_

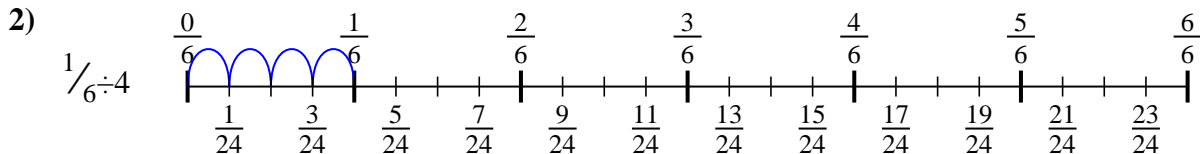


Use the numberline to solve each problem. The first is marked for you.

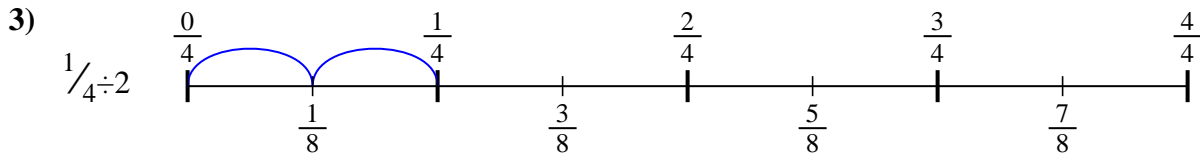
**Answers**



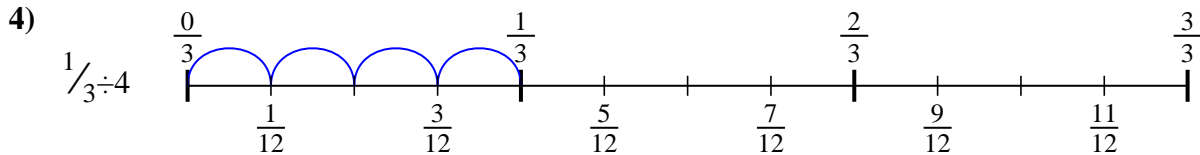
1.  $\frac{1}{6}$



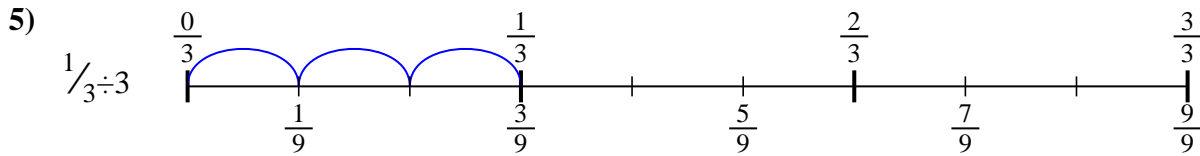
2.  $\frac{1}{24}$



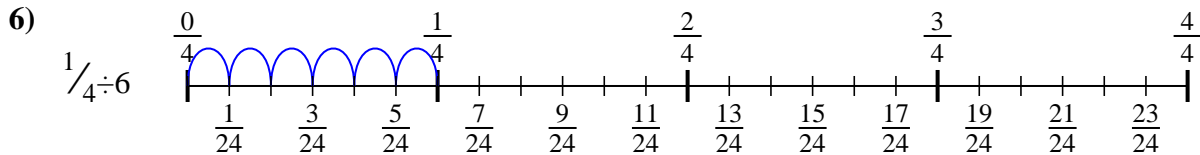
3.  $\frac{1}{8}$



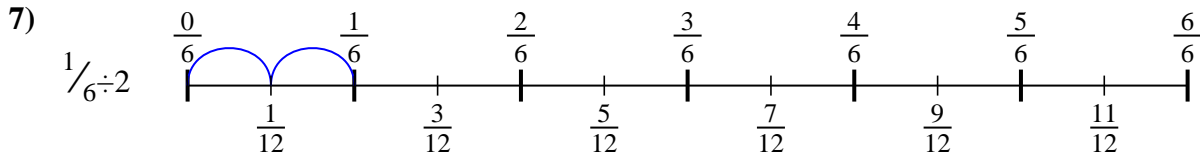
4.  $\frac{1}{12}$



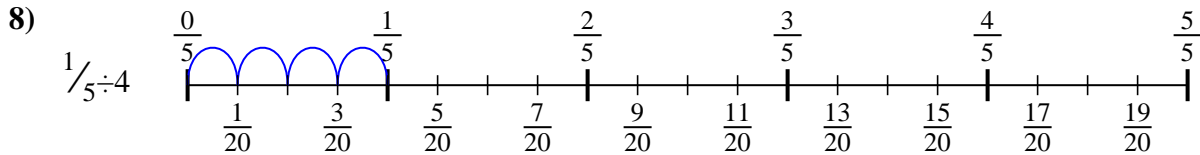
5.  $\frac{1}{9}$



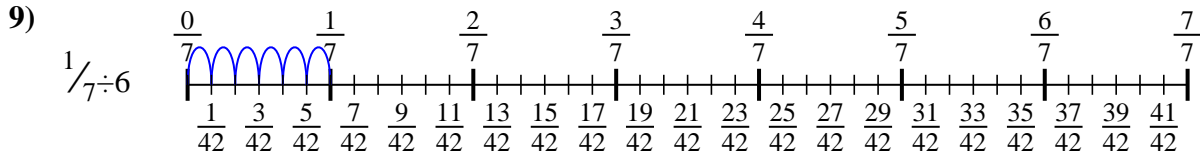
6.  $\frac{1}{24}$



7.  $\frac{1}{12}$



8.  $\frac{1}{20}$



9.  $\frac{1}{42}$



Use the numberline to solve each problem. The first is marked for you.

**Answers**

$\frac{1}{42}$

$\frac{1}{8}$

$\frac{1}{12}$

$\frac{1}{24}$

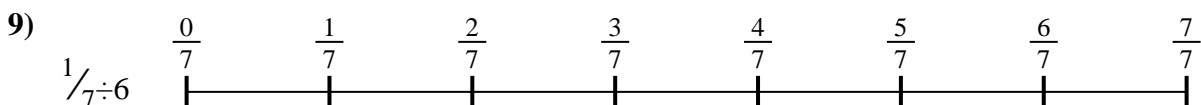
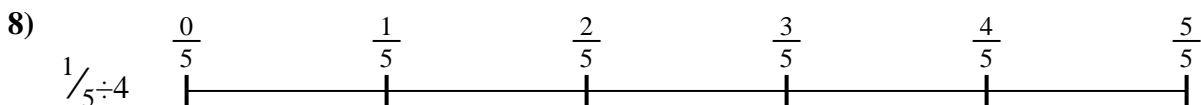



$\frac{1}{12}$

$\frac{1}{6}$

$\frac{1}{20}$

$\frac{1}{9}$

$\frac{1}{24}$



1. \_\_\_\_\_
2. \_\_\_\_\_
3. \_\_\_\_\_
4. \_\_\_\_\_
5. \_\_\_\_\_
6. \_\_\_\_\_
7. \_\_\_\_\_
8. \_\_\_\_\_
9. \_\_\_\_\_