

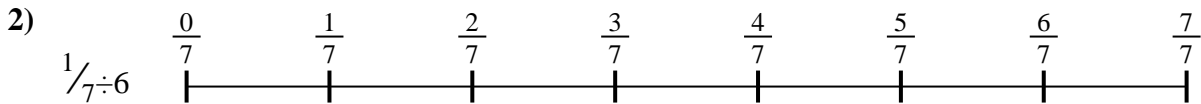


Use the numberline to solve each problem. The first is marked for you.

Answers



1. _____




2. _____



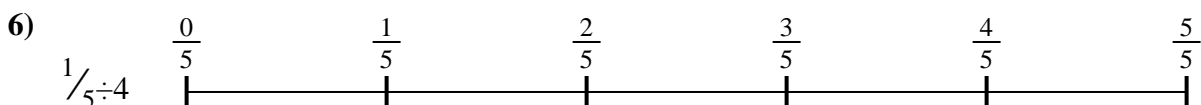
3. _____




4. _____



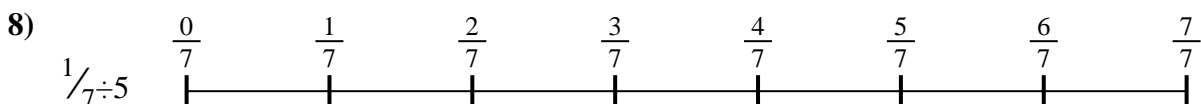
5. _____



6. _____



7. _____



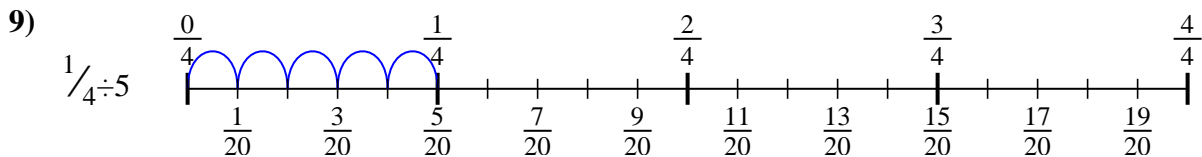
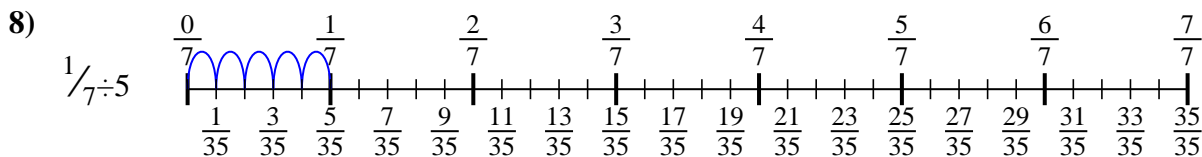
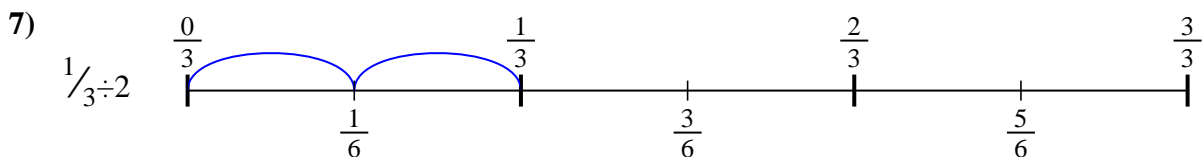
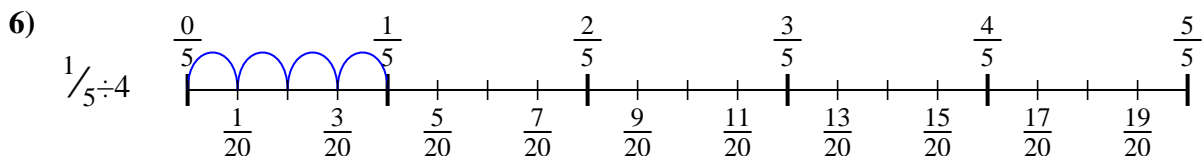
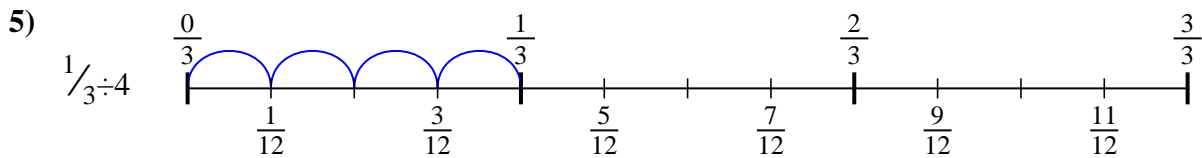
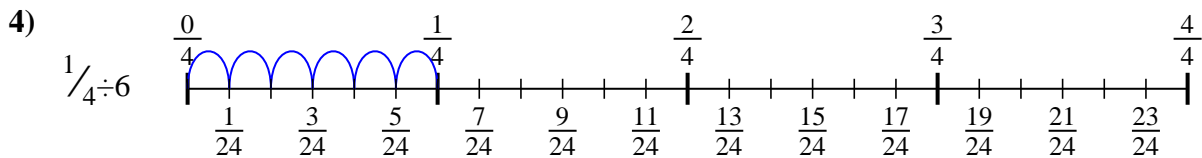
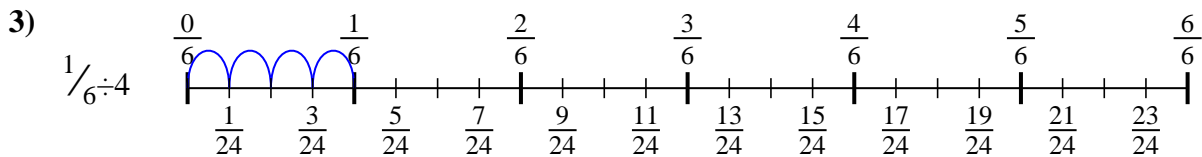
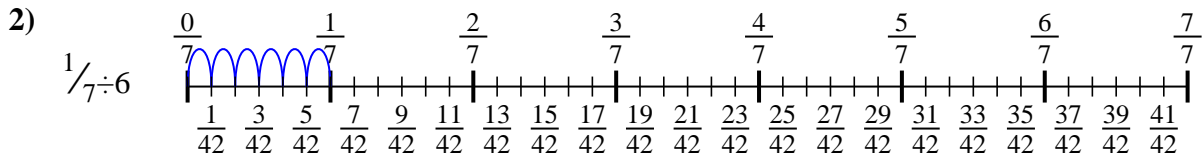
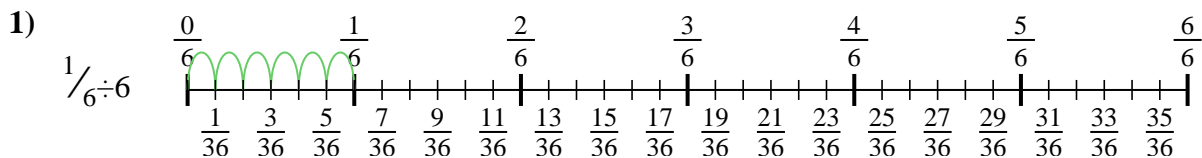
8. _____



9. _____



Use the numberline to solve each problem. The first is marked for you.



Answers

1. $\frac{1}{36}$

2. $\frac{1}{42}$

3. $\frac{1}{24}$

4. $\frac{1}{24}$

5. $\frac{1}{12}$

6. $\frac{1}{20}$

7. $\frac{1}{6}$

8. $\frac{1}{35}$

9. $\frac{1}{20}$



Use the numberline to solve each problem. The first is marked for you.

Answers

$\frac{1}{35}$

$\frac{1}{6}$

$\frac{1}{24}$

$\frac{1}{42}$

$\frac{1}{24}$

$\frac{1}{36}$

$\frac{1}{20}$

$\frac{1}{20}$

$\frac{1}{12}$

1. _____
2. _____
3. _____
4. _____
5. _____
6. _____
7. _____
8. _____
9. _____

