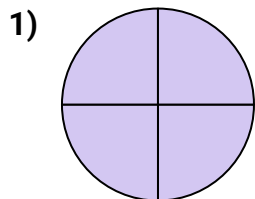
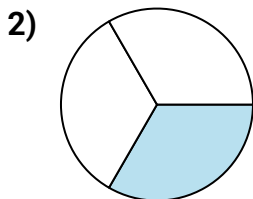




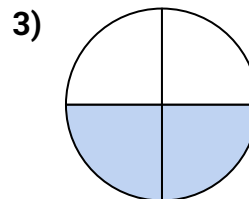
Determine which letter best describes the shaded portion.

Answers

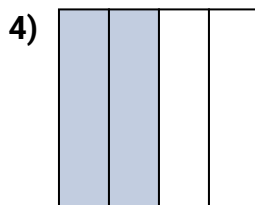
- A. one-quarter
B. one-half
C. four-fourths



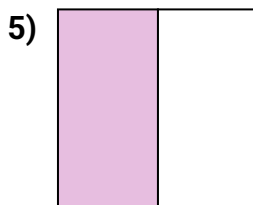
- A. one-third
B. three-fourths
C. one-quarter



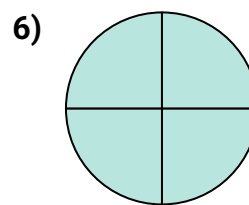
- A. two-halves
B. one-quarter
C. two-fourths



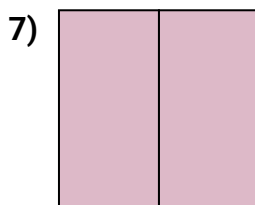
- A. four-fourths
B. one-quarter
C. two-quarters



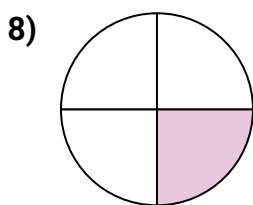
- A. two-quarters
B. one-half
C. four-quarters



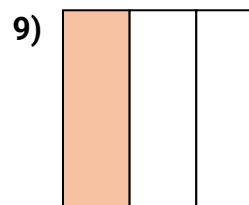
- A. one-fourth
B. four-quarters
C. two-halves



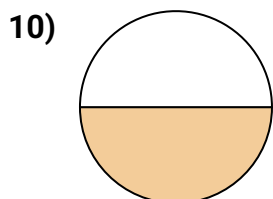
- A. two-halves
B. one-half
C. two-fourths



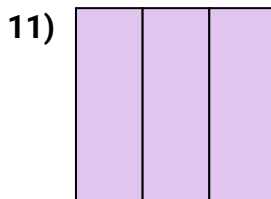
- A. one-fourth
B. four-fourths
C. two-halves



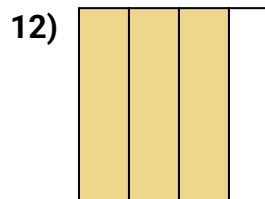
- A. two-halves
B. four-fourths
C. one-third



- A. four-quarters
B. one-half
C. two-halves



- A. three-fourths
B. two-quarters
C. three-thirds



- A. three-fourths
B. one-quarter
C. two-quarters

1. _____

2. _____

3. _____

4. _____

5. _____

6. _____

7. _____

8. _____

9. _____

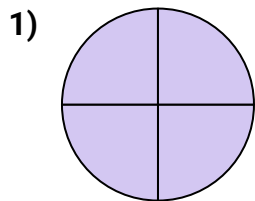
10. _____

11. _____

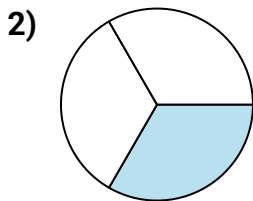
12. _____



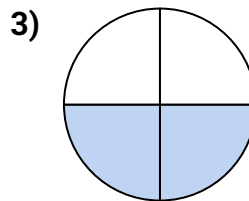
Determine which letter best describes the shaded portion.

Answers

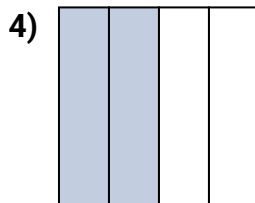
- A. one-quarter
B. one-half
C. four-fourths



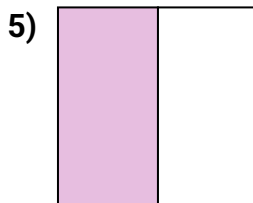
- A. one-third
B. three-fourths
C. one-quarter



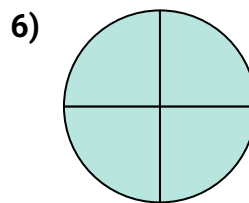
- A. two-halves
B. one-quarter
C. two-fourths



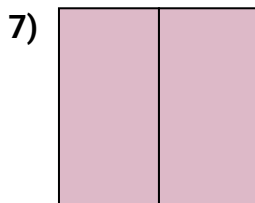
- A. four-fourths
B. one-quarter
C. two-quarters



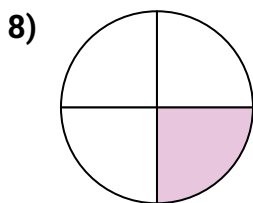
- A. two-quarters
B. one-half
C. four-quarters



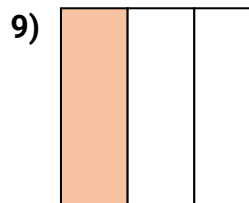
- A. one-fourth
B. four-quarters
C. two-halves



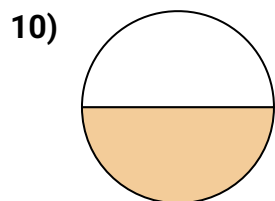
- A. two-halves
B. one-half
C. two-fourths



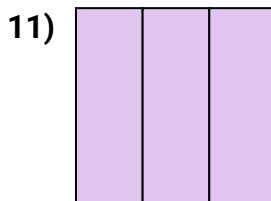
- A. one-fourth
B. four-fourths
C. two-halves



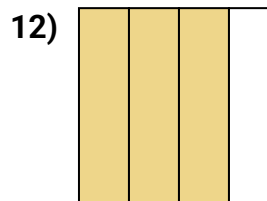
- A. two-halves
B. four-fourths
C. one-third



- A. four-quarters
B. one-half
C. two-halves



- A. three-fourths
B. two-quarters
C. three-thirds



- A. three-fourths
B. one-quarter
C. two-quarters

1. **C**2. **A**3. **C**4. **C**5. **B**6. **B**7. **A**8. **A**9. **C**10. **B**11. **C**12. **A**