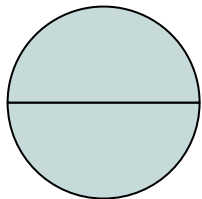



**Determine which letter best describes the shaded portion.****Answers**

1)



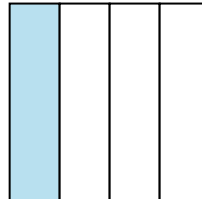
- A. one-quarter  
B. two-fourths  
C. two-halves

2)



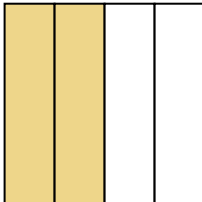
- A. two-halves  
B. one-half  
C. three-fourths

3)




- A. two-halves  
B. three-quarters  
C. one-quarter

4)



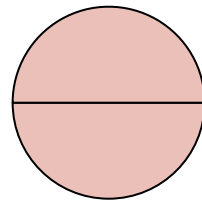
- A. one-half  
B. two-fourths  
C. two-halves

5)




- A. three-fourths  
B. one-half  
C. two-halves

6)



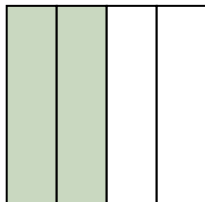
- A. four-fourths  
B. two-halves  
C. one-quarter

7)



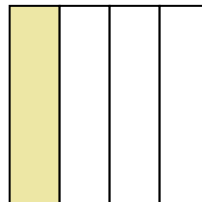
- A. two-halves  
B. one-quarter  
C. four-fourths

8)



- A. two-fourths  
B. four-quarters  
C. one-half

9)



- A. one-fourth  
B. three-quarters  
C. two-halves

1. \_\_\_\_\_

2. \_\_\_\_\_

3. \_\_\_\_\_

4. \_\_\_\_\_

5. \_\_\_\_\_

6. \_\_\_\_\_

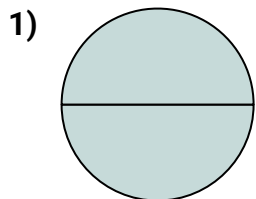
7. \_\_\_\_\_

8. \_\_\_\_\_

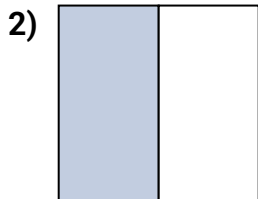
9. \_\_\_\_\_




Determine which letter best describes the shaded portion.

**Answers**

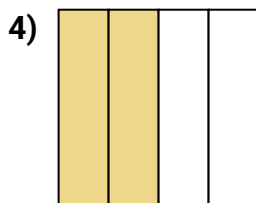
- A. one-quarter  
B. two-fourths  
C. two-halves



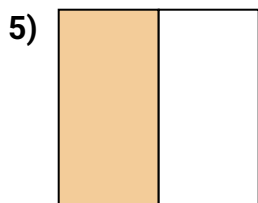
- A. two-halves  
B. one-half  
C. three-fourths



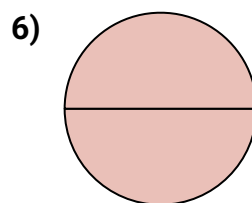
- A. two-halves  
B. three-quarters  
C. one-quarter



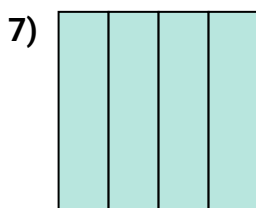
- A. one-half  
B. two-fourths  
C. two-halves



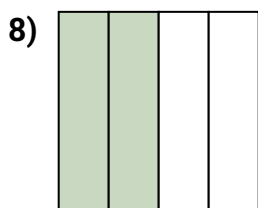
- A. three-fourths  
B. one-half  
C. two-halves



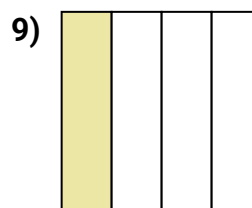
- A. four-fourths  
B. two-halves  
C. one-quarter



- A. two-halves  
B. one-quarter  
C. four-fourths



- A. two-fourths  
B. four-quarters  
C. one-half



- A. one-fourth  
B. three-quarters  
C. two-halves

1. **C**2. **B**3. **C**4. **B**5. **B**6. **B**7. **C**8. **A**9. **A**