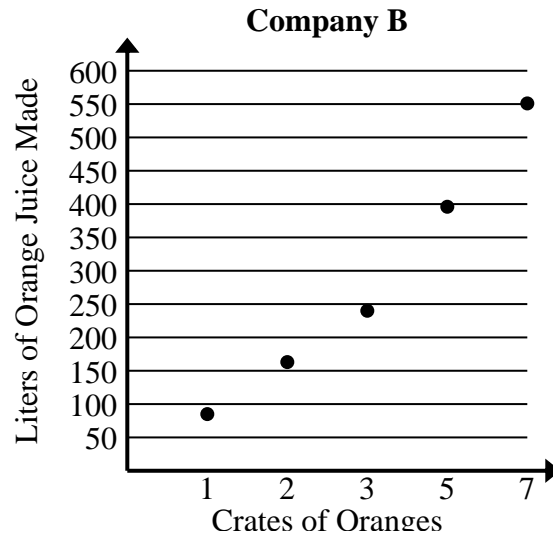




Solve each problem.

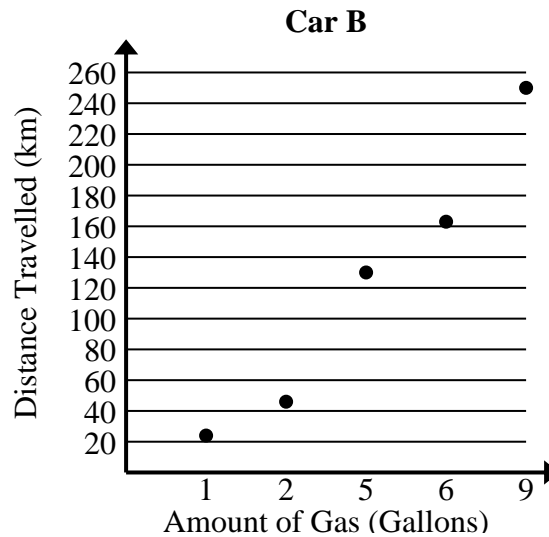
- 1) Compare the approximate liters of orange juice produced per crates used of Company A to Company B.

Company A	
Crates of Oranges	Liters of Orange Juice Made
1	73
2	149
6	462
7	541
9	695



- 2) Compare the approximate kilometers per gallon of Car A to Car B.

Car A	
Amount of Gas (Gallons)	Distance Travelled (km)
3	89
4	114
5	142
7	198
8	231





Solve each problem.

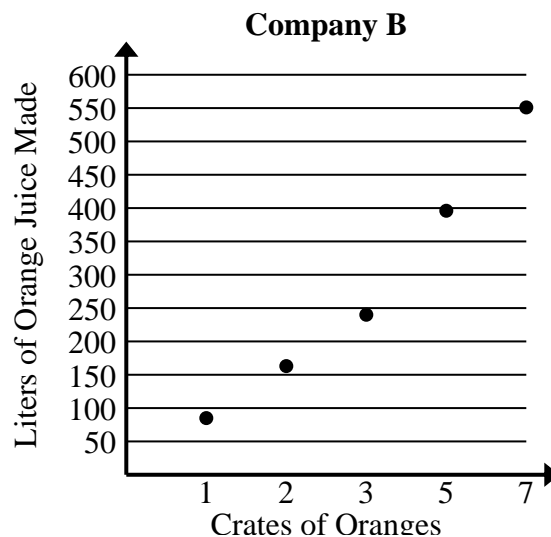
- 1) Compare the approximate liters of orange juice produced per crates used of Company A to Company B.

Company A	
Crates of Oranges	Liters of Orange Juice Made
1	73
2	149
6	462
7	541
9	695

$$73+149+462+541+695 = 1,920 \text{ total liters}$$

$$1+2+6+7+9 = 25 \text{ total crates}$$

$$1,920 \div 25 = 76.8$$



$$85+163+240+396+551 = 1,435 \text{ total liters}$$

$$1+2+3+5+7 = 18 \text{ total crates}$$

$$1,435 \div 18 = 79.7$$

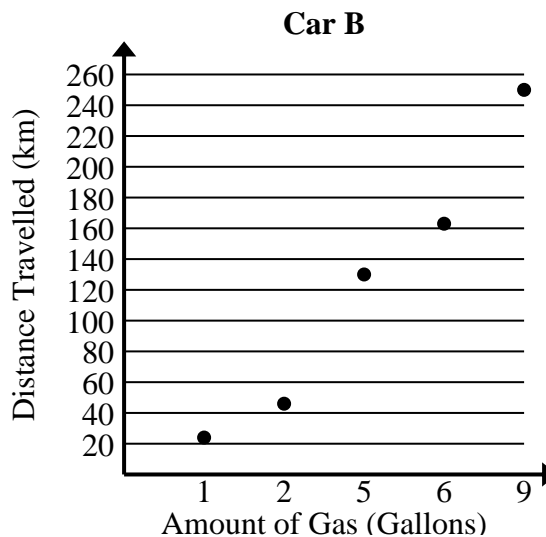
- 2) Compare the approximate kilometers per gallon of Car A to Car B.

Car A	
Amount of Gas (Gallons)	Distance Travelled (km)
3	89
4	114
5	142
7	198
8	231

$$89+114+142+198+231 = 774 \text{ total km}$$

$$3+4+5+7+8 = 27 \text{ total gallons}$$

$$774 \div 27 = 28.7$$



$$24+46+130+163+250 = 613 \text{ total km}$$

$$1+2+5+6+9 = 23 \text{ total gallons}$$

$$613 \div 23 = 26.7$$