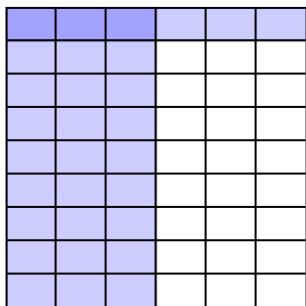


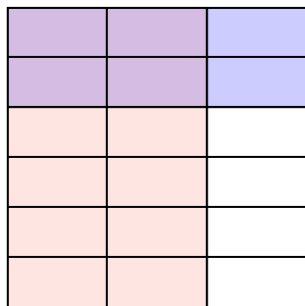


Use the box provided to show a visual example of how to multiply two fractions.

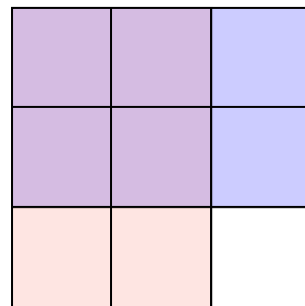
Ex) $\frac{3}{6} \times \frac{1}{9} =$



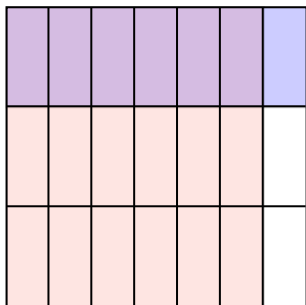
1) $\frac{2}{3} \times \frac{2}{6} =$



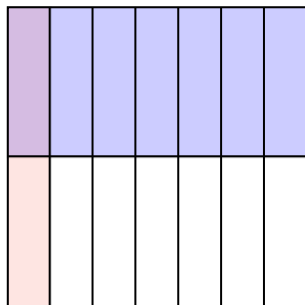
2) $\frac{2}{3} \times \frac{2}{3} =$



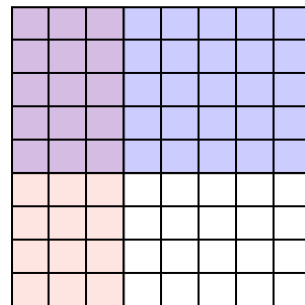
3) $\frac{6}{7} \times \frac{1}{3} =$



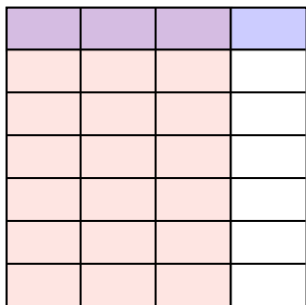
4) $\frac{1}{7} \times \frac{1}{2} =$



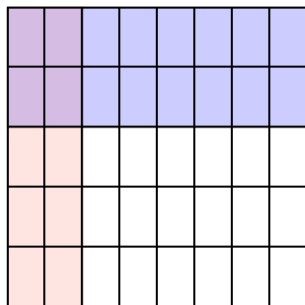
5) $\frac{3}{8} \times \frac{5}{9} =$




6) $\frac{3}{4} \times \frac{1}{7} =$



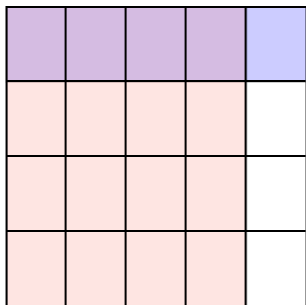
7) $\frac{2}{8} \times \frac{2}{5} =$




8) $\frac{3}{7} \times \frac{3}{8} =$



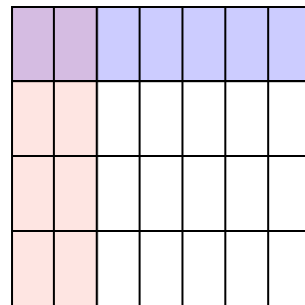
9) $\frac{4}{5} \times \frac{1}{4} =$



10) $\frac{2}{4} \times \frac{6}{8} =$



11) $\frac{2}{7} \times \frac{1}{4} =$



Answers

Ex. $\frac{3}{54}$

1. $\frac{4}{18}$

2. $\frac{4}{9}$

3. $\frac{6}{21}$

4. $\frac{1}{14}$

5. $\frac{15}{72}$

6. $\frac{3}{28}$

7. $\frac{4}{40}$

8. $\frac{9}{56}$

9. $\frac{4}{20}$

10. $\frac{12}{32}$

11. $\frac{2}{28}$