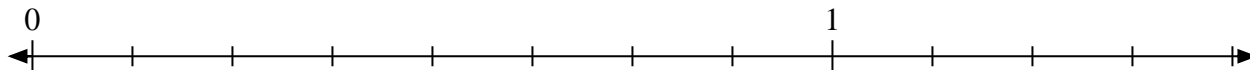


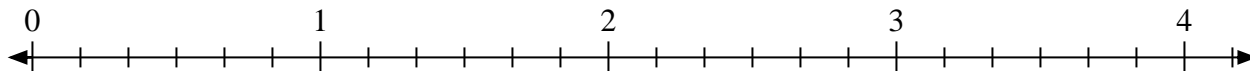


Solve each problem.

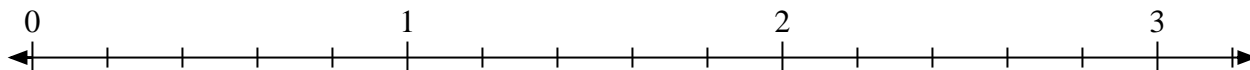
- 1) Mark the location of
- $\frac{9}{8}$



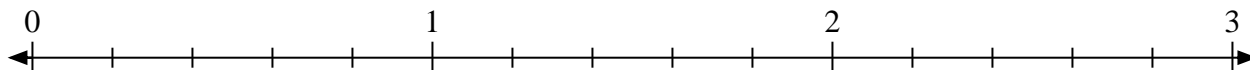
- 2) Mark the location of
- $\frac{11}{6}$



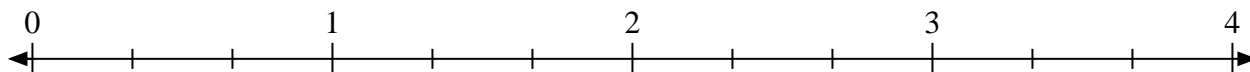
- 3) Mark the location of
- $\frac{12}{5}$




- 4) Mark the location of
- $\frac{11}{5}$



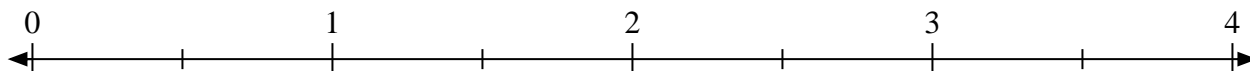
- 5) Mark the location of
- $\frac{4}{3}$



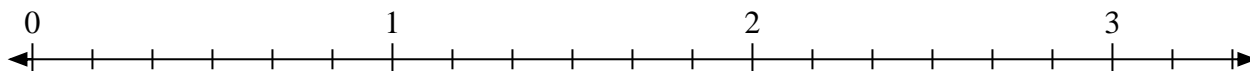
- 6) Mark the location of
- $\frac{8}{4}$



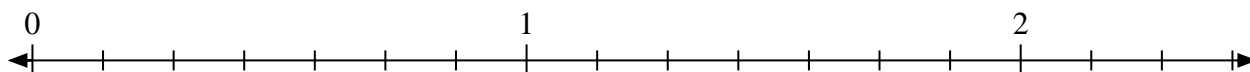
- 7) Mark the location of
- $\frac{5}{2}$



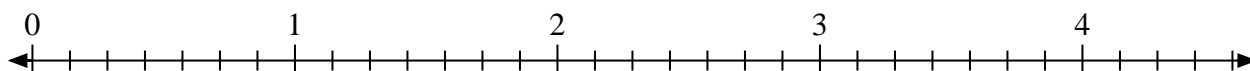
- 8) Mark the location of
- $\frac{17}{6}$



- 9) Mark the location of
- $\frac{11}{7}$



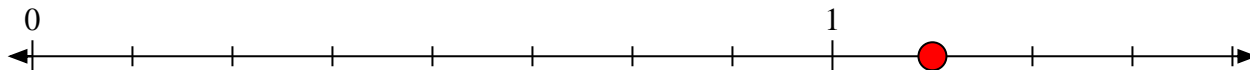
- 10) Mark the location of
- $\frac{16}{7}$



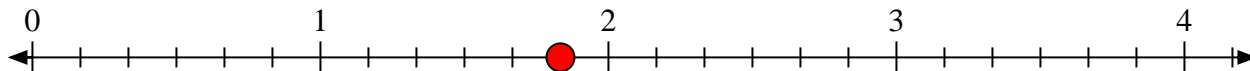


Solve each problem.

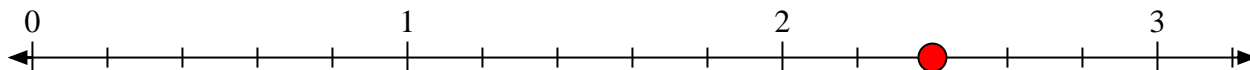
- 1) Mark the location of
- $\frac{9}{8}$



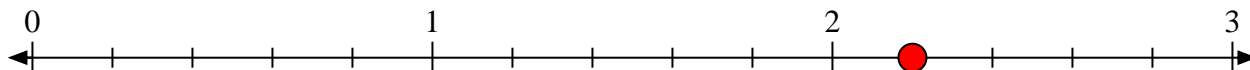
- 2) Mark the location of
- $\frac{11}{6}$



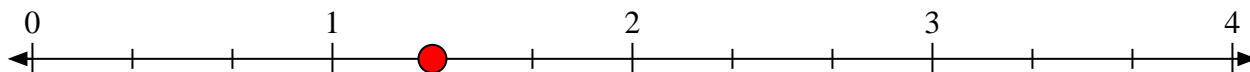
- 3) Mark the location of
- $\frac{12}{5}$




- 4) Mark the location of
- $\frac{11}{5}$



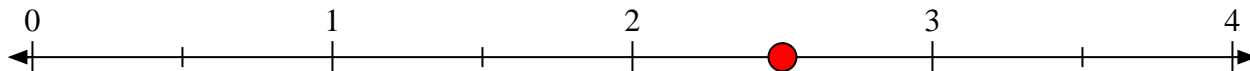
- 5) Mark the location of
- $\frac{4}{3}$



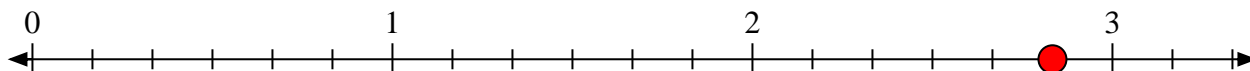
- 6) Mark the location of
- $\frac{8}{4}$



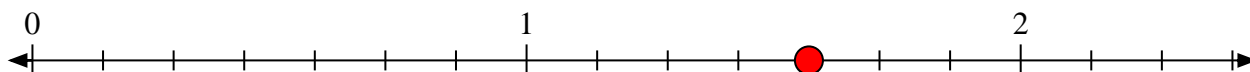
- 7) Mark the location of
- $\frac{5}{2}$



- 8) Mark the location of
- $\frac{17}{6}$



- 9) Mark the location of
- $\frac{11}{7}$



- 10) Mark the location of
- $\frac{16}{7}$

