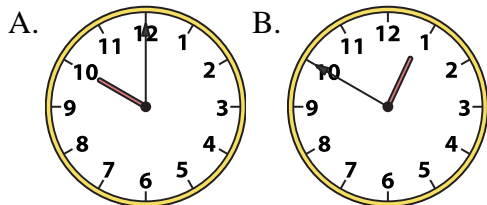




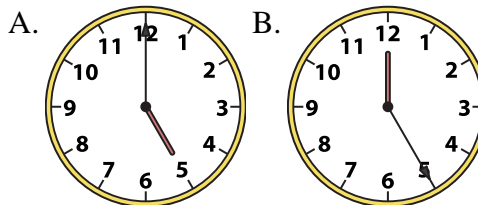
Determine which clock accurately shows the time.

**Answers**

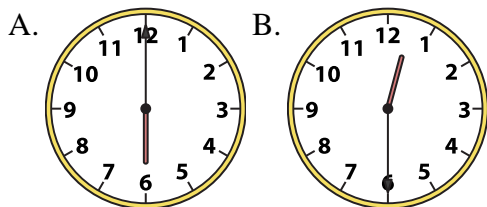
1) 10:00



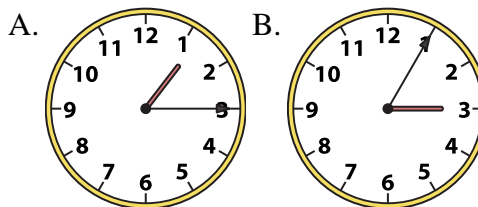
2) 5:00



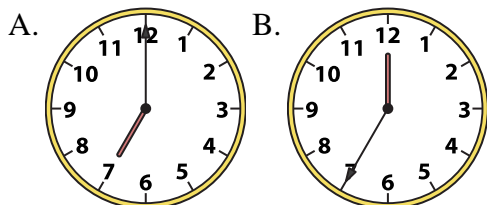
3) 12:30



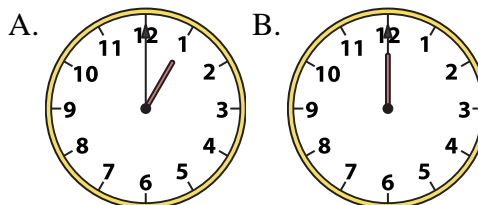
4) 1:15



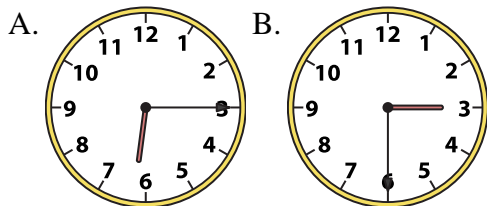
5) 7:00



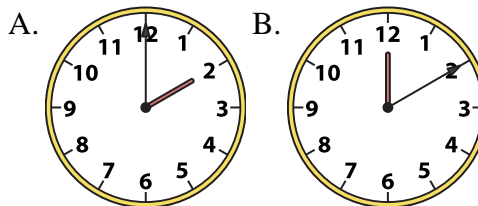
6) 12:00



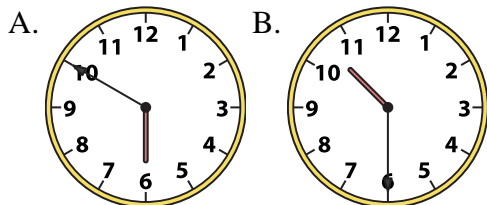
7) 6:15



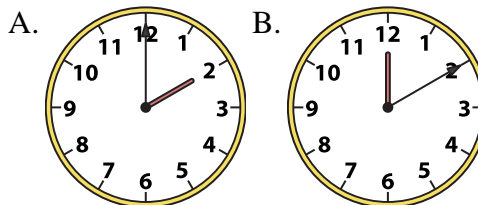
8) 2:00



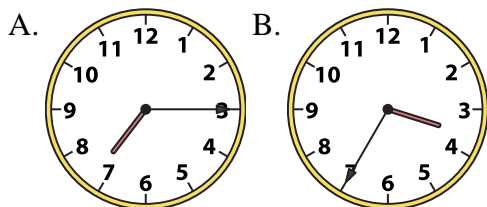
9) 10:30



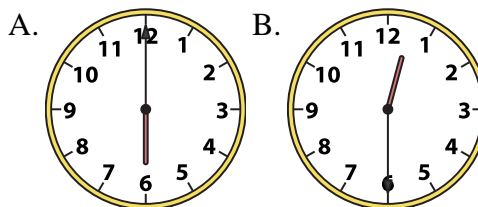
10) 2:00



11) 7:15



12) 6:00



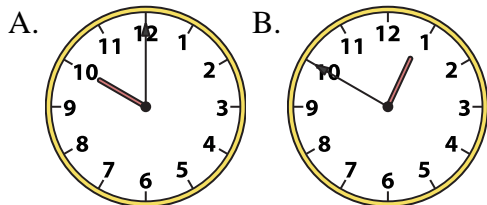
1. \_\_\_\_\_
2. \_\_\_\_\_
3. \_\_\_\_\_
4. \_\_\_\_\_
5. \_\_\_\_\_
6. \_\_\_\_\_
7. \_\_\_\_\_
8. \_\_\_\_\_
9. \_\_\_\_\_
10. \_\_\_\_\_
11. \_\_\_\_\_
12. \_\_\_\_\_



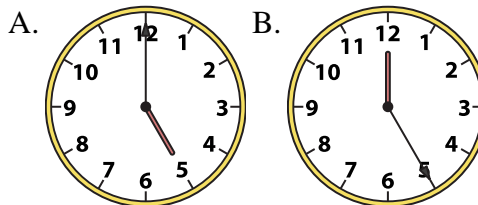
Determine which clock accurately shows the time.

**Answers**

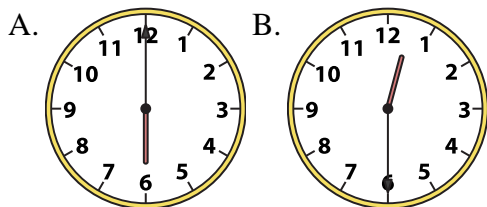
1) 10:00



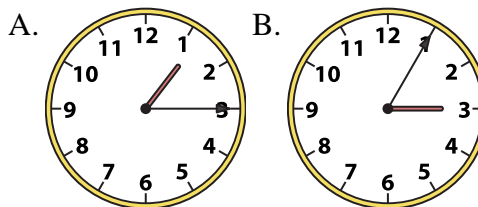
2) 5:00



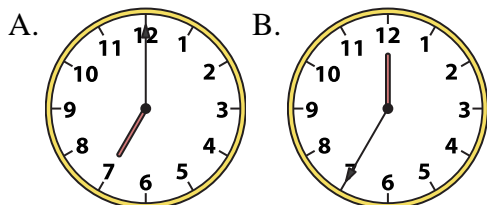
3) 12:30



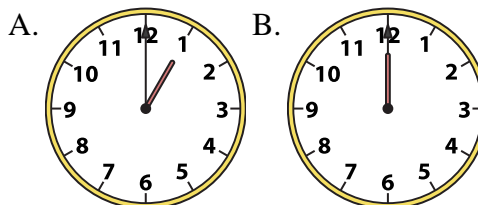
4) 1:15



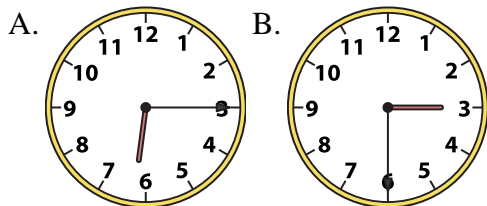
5) 7:00



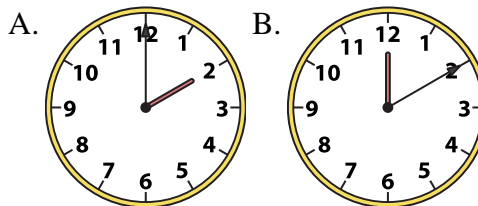
6) 12:00



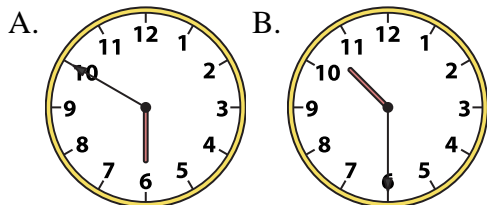
7) 6:15



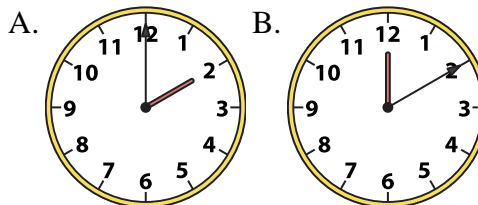
8) 2:00



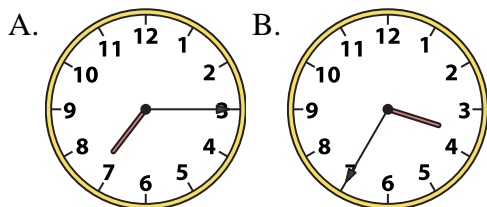
9) 10:30



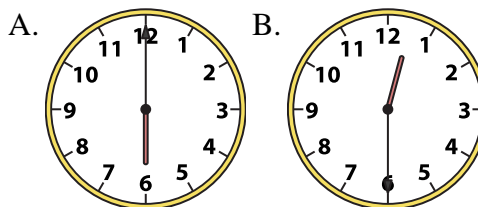
10) 2:00



11) 7:15



12) 6:00



1.     **A**    

2.     **A**    

3.     **B**    

4.     **A**    

5.     **A**    

6.     **B**    

7.     **A**    

8.     **A**    

9.     **B**    

10.     **A**    

11.     **A**    

12.     **A**