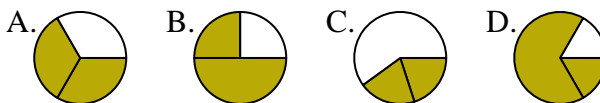




Determine which letter best represents each fraction.

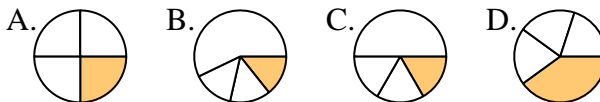
**Answers**

1) Which choice best represents  $\frac{2}{3}$ ?



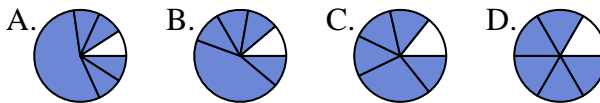
1. \_\_\_\_\_

2) Which choice best represents  $\frac{1}{4}$ ?



2. \_\_\_\_\_

3) Which choice best represents  $\frac{5}{6}$ ?



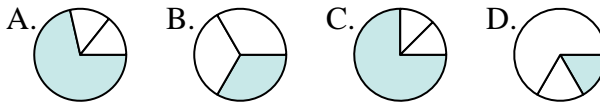
4. \_\_\_\_\_

4) Which choice best represents  $\frac{3}{8}$ ?



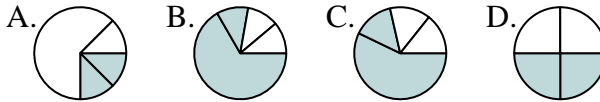
6. \_\_\_\_\_

5) Which choice best represents  $\frac{1}{3}$ ?



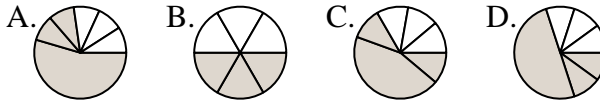
7. \_\_\_\_\_

6) Which choice best represents  $\frac{2}{4}$ ?



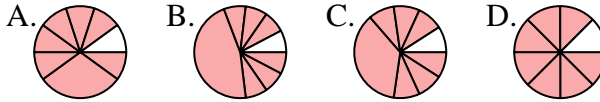
9. \_\_\_\_\_

7) Which choice best represents  $\frac{3}{6}$ ?



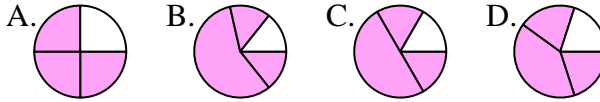
11. \_\_\_\_\_

8) Which choice best represents  $\frac{7}{8}$ ?

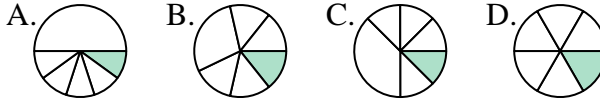


12. \_\_\_\_\_

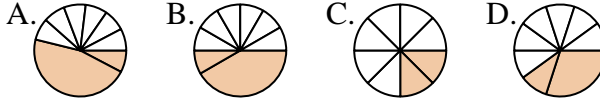
9) Which choice best represents  $\frac{3}{4}$ ?



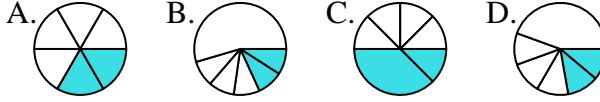
10) Which choice best represents  $\frac{1}{6}$ ?



11) Which choice best represents  $\frac{2}{8}$ ?



12) Which choice best represents  $\frac{2}{6}$ ?

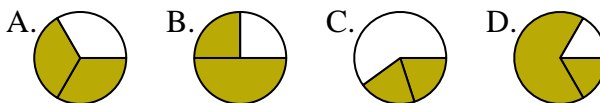




Determine which letter best represents each fraction.

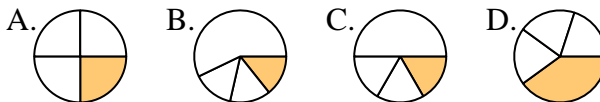
**Answers**

1) Which choice best represents  $\frac{2}{3}$ ?



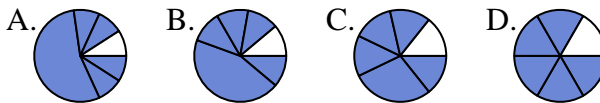
1.   **A**  

2) Which choice best represents  $\frac{1}{4}$ ?



2.   **A**  

3) Which choice best represents  $\frac{5}{6}$ ?



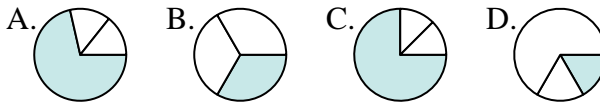
3.   **D**  

4) Which choice best represents  $\frac{3}{8}$ ?



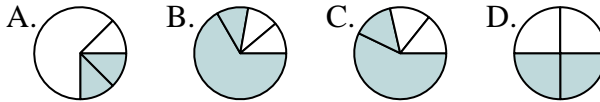
4.   **D**  

5) Which choice best represents  $\frac{1}{3}$ ?



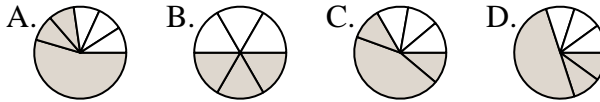
5.   **B**  

6) Which choice best represents  $\frac{2}{4}$ ?



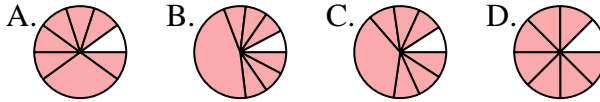
6.   **D**  

7) Which choice best represents  $\frac{3}{6}$ ?



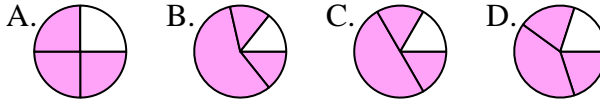
7.   **B**  

8) Which choice best represents  $\frac{7}{8}$ ?



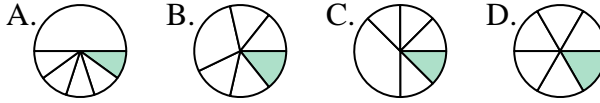
8.   **D**  

9) Which choice best represents  $\frac{3}{4}$ ?



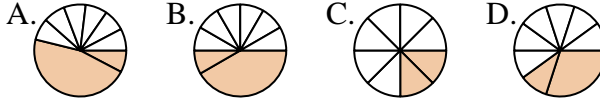
9.   **A**  

10) Which choice best represents  $\frac{1}{6}$ ?



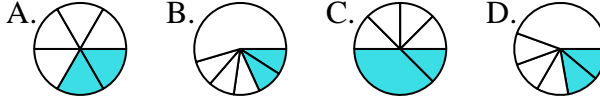
10.   **D**  

11) Which choice best represents  $\frac{2}{8}$ ?



11.   **C**  

12) Which choice best represents  $\frac{2}{6}$ ?



12.   **A**