



Solve each problem.

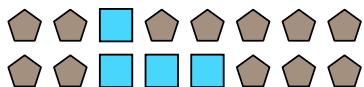
Ex) Express the moons as a fraction of the entire set.




1) Express the stars as a fraction of the entire set.




2) Express the squares as a fraction of the entire set.




3) Express the hearts as a fraction of the entire set.



4) Express the stars as a fraction of the entire set.



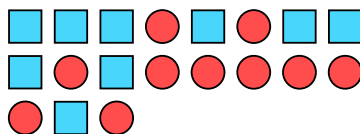
5) Express the hearts as a fraction of the entire set.



6) Express the moons as a fraction of the entire set.




7) Express the squares as a fraction of the entire set.



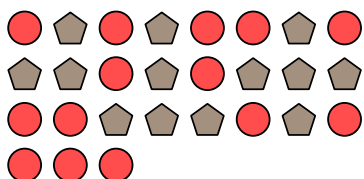
8) Express the stars as a fraction of the entire set.




9) Express the triangles as a fraction of the entire set.



10) Express the circles as a fraction of the entire set.



11) Express the stars as a fraction of the entire set.



Answers

Ex. $\frac{15}{22}$

1. $\frac{3}{13}$

2. $\frac{4}{16}$

3. $\frac{6}{9}$

4. $\frac{2}{17}$

5. $\frac{9}{19}$

6. $\frac{4}{12}$

7. $\frac{9}{19}$

8. $\frac{2}{10}$

9. $\frac{6}{11}$

10. $\frac{14}{27}$

11. $\frac{7}{17}$