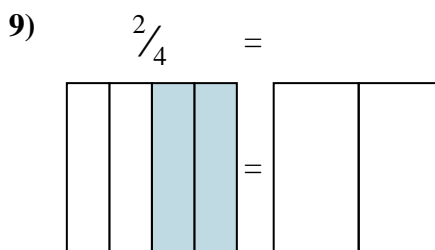
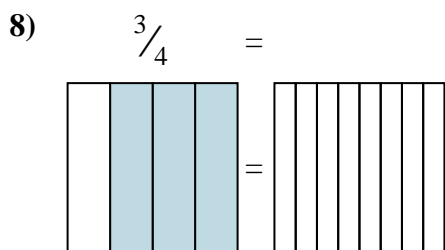
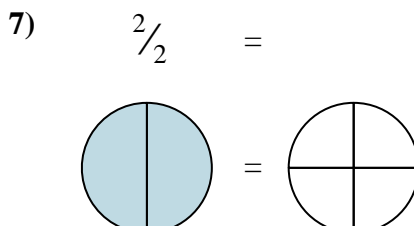
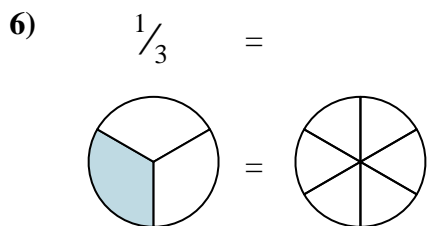
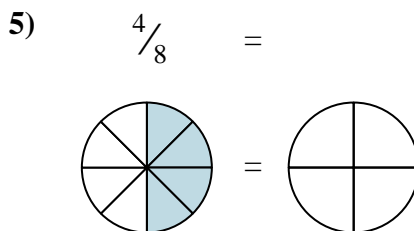
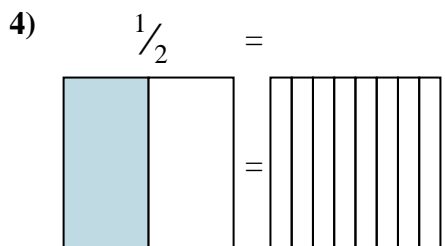
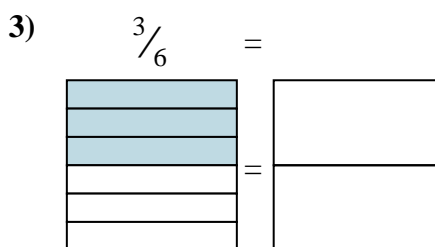
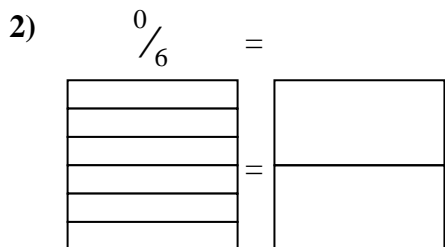
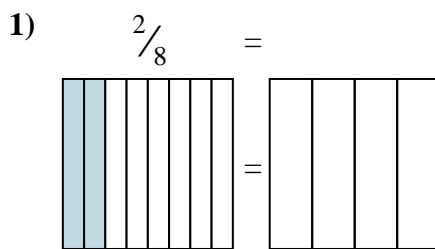
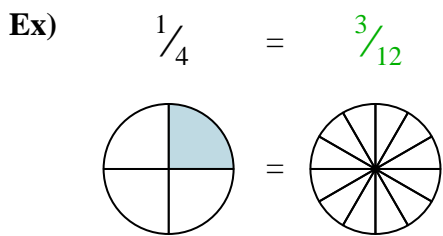




Shade in the visual fraction to find the equivalent fraction.



Answers

Ex. $\frac{3}{12}$

1. _____

2. _____

3. _____

4. _____

5. _____

6. _____

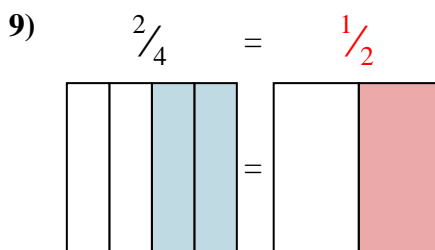
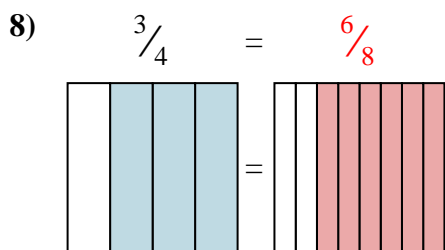
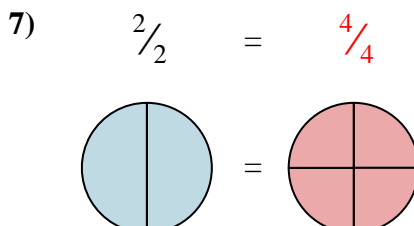
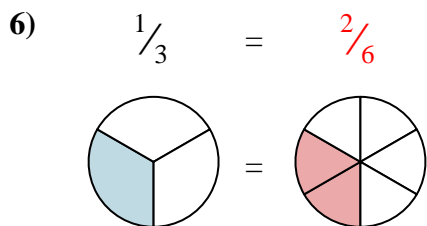
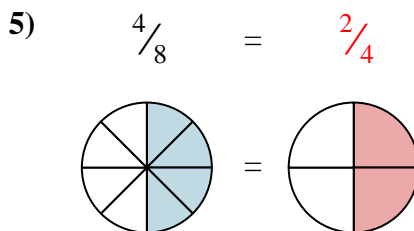
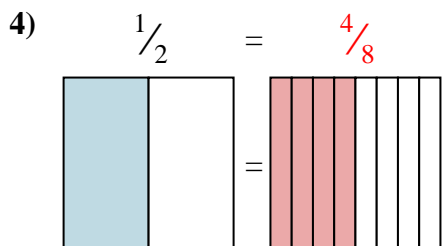
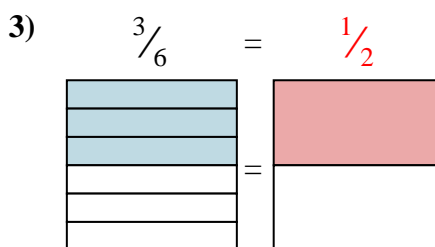
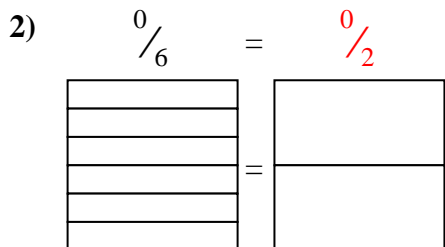
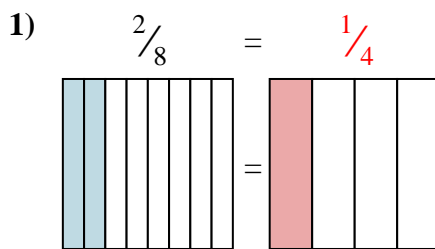
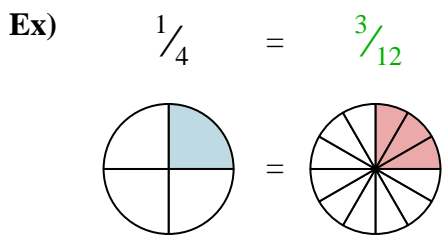
7. _____

8. _____

9. _____



Shade in the visual fraction to find the equivalent fraction.

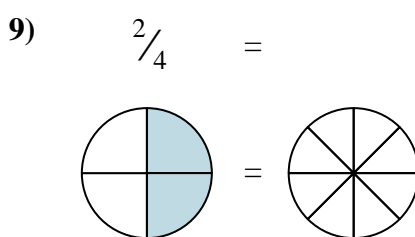
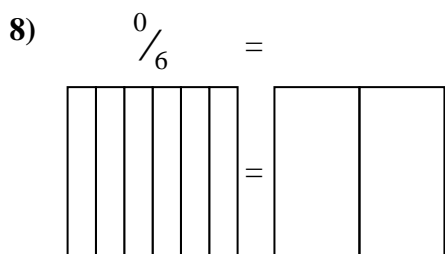
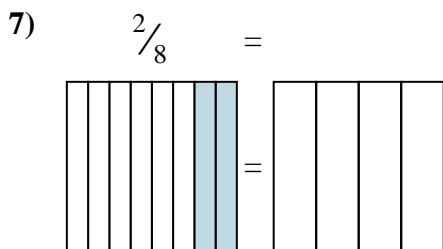
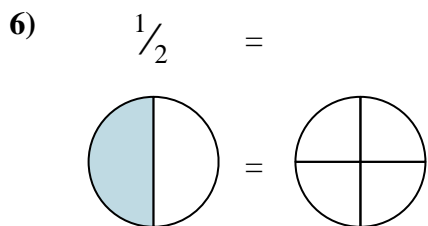
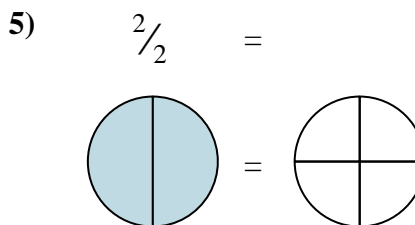
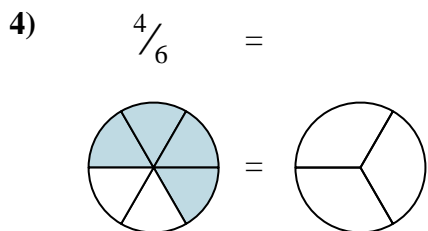
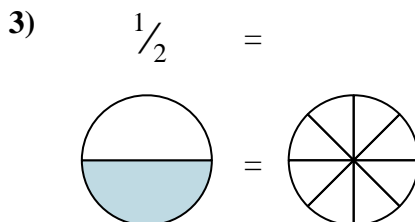
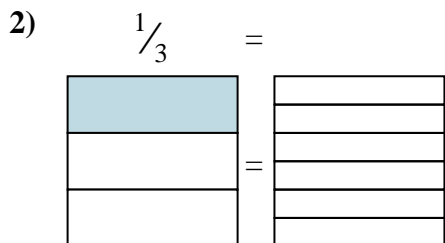
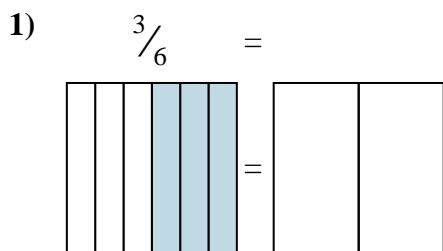
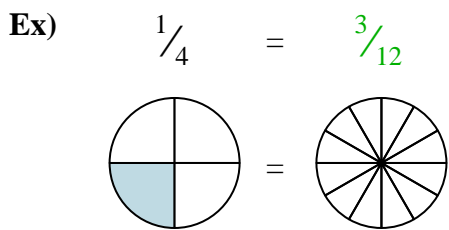


Answers

- Ex. $\frac{3}{12}$
1. $\frac{1}{4}$
2. $\frac{0}{2}$
3. $\frac{1}{2}$
4. $\frac{4}{8}$
5. $\frac{2}{4}$
6. $\frac{2}{6}$
7. $\frac{4}{4}$
8. $\frac{6}{8}$
9. $\frac{1}{2}$



Shade in the visual fraction to find the equivalent fraction.



Answers

Ex. $\frac{3}{12}$

1. _____

2. _____

3. _____

4. _____

5. _____

6. _____

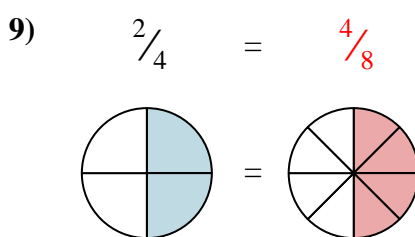
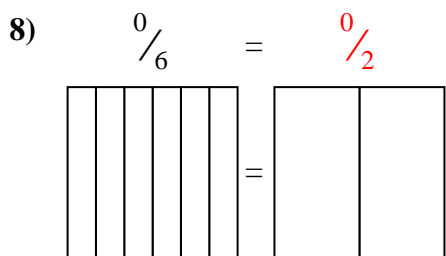
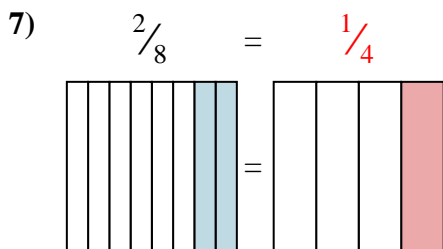
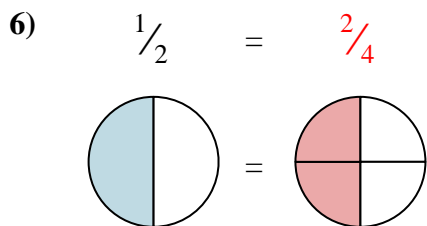
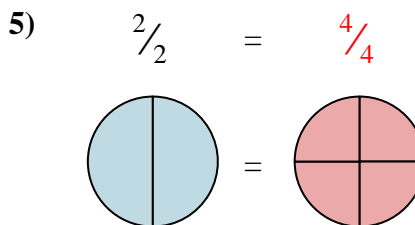
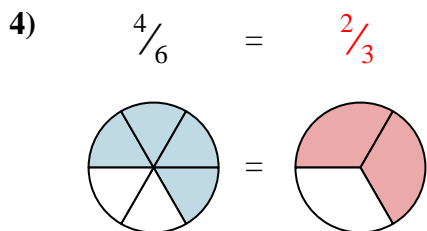
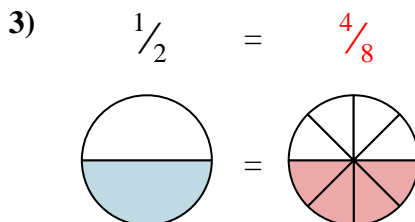
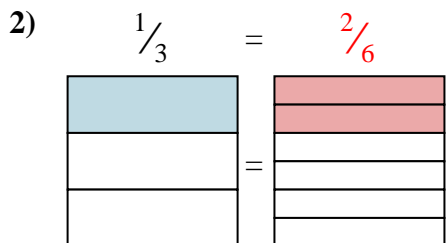
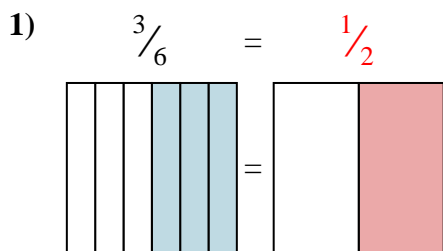
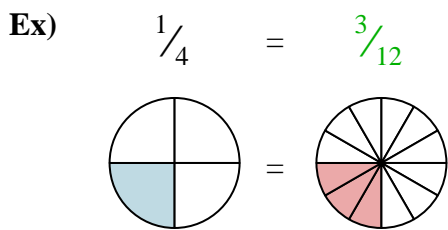
7. _____

8. _____

9. _____



Shade in the visual fraction to find the equivalent fraction.

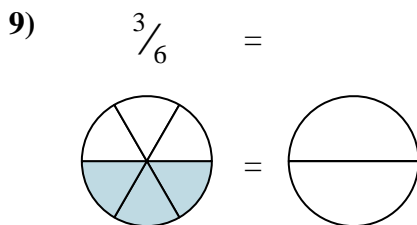
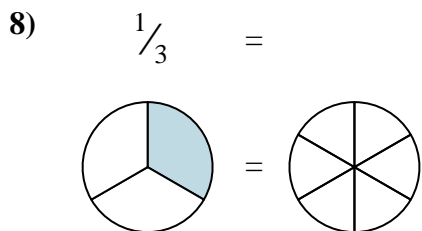
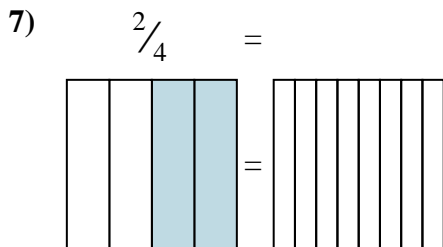
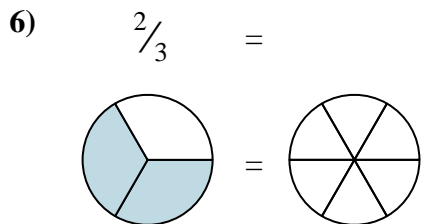
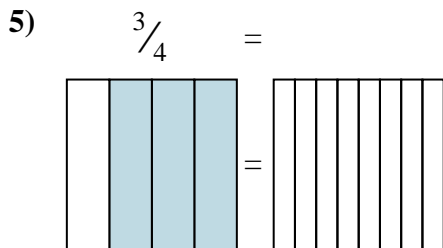
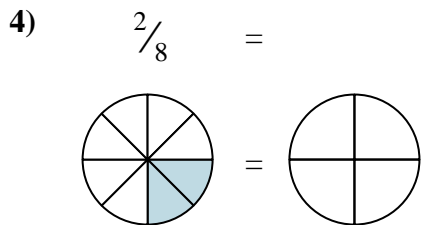
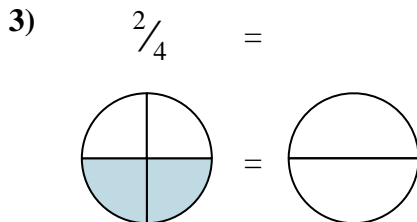
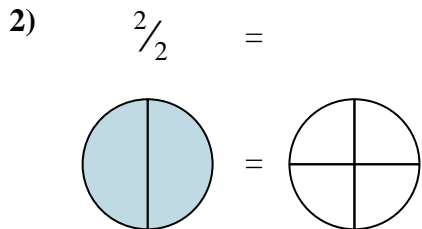
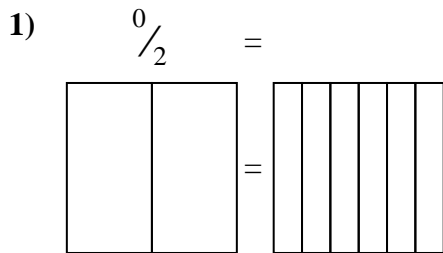
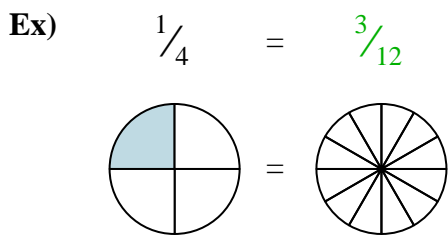


Answers

- Ex. $\frac{3}{12}$
1. $\frac{1}{2}$
2. $\frac{2}{6}$
3. $\frac{4}{8}$
4. $\frac{2}{3}$
5. $\frac{4}{4}$
6. $\frac{2}{4}$
7. $\frac{1}{4}$
8. $\frac{0}{2}$
9. $\frac{4}{8}$



Shade in the visual fraction to find the equivalent fraction.



Answers

Ex. $\frac{3}{12}$

1. _____

2. _____

3. _____

4. _____

5. _____

6. _____

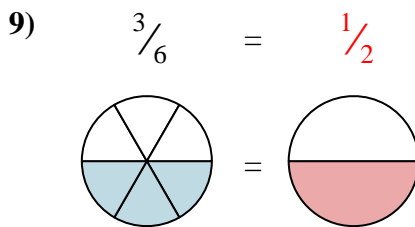
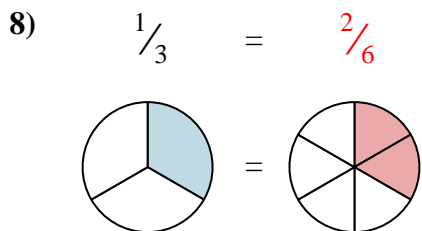
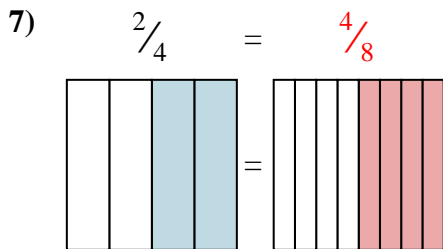
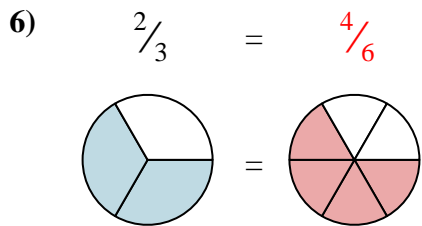
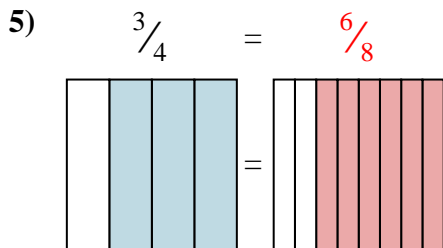
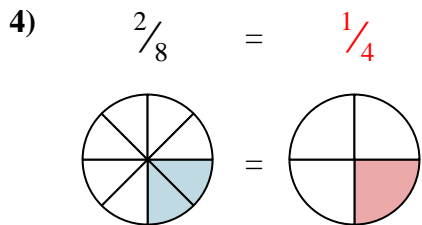
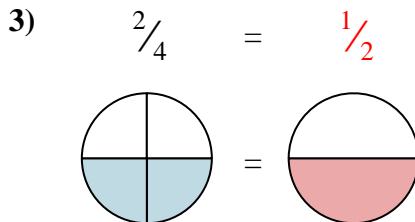
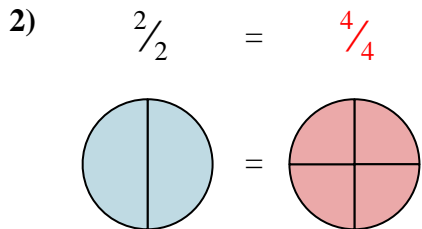
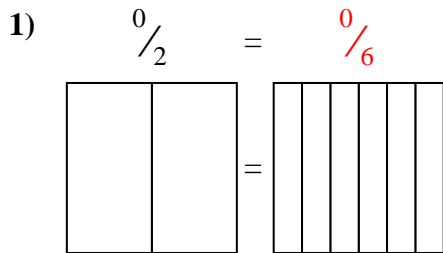
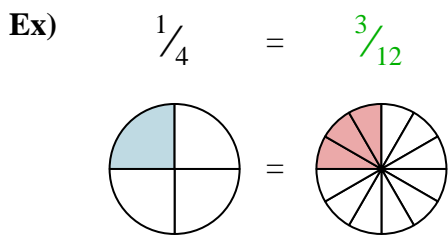
7. _____

8. _____

9. _____



Shade in the visual fraction to find the equivalent fraction.



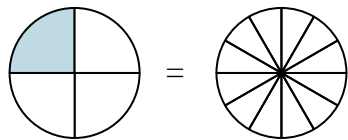
Answers

- Ex. $\frac{3}{12}$
1. $\frac{0}{6}$
2. $\frac{4}{4}$
3. $\frac{1}{2}$
4. $\frac{1}{4}$
5. $\frac{6}{8}$
6. $\frac{4}{6}$
7. $\frac{4}{8}$
8. $\frac{2}{6}$
9. $\frac{1}{2}$

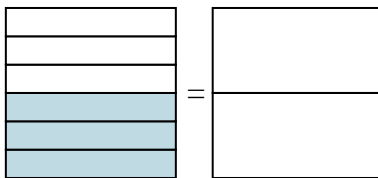


Shade in the visual fraction to find the equivalent fraction.

Ex) $\frac{1}{4} = \frac{3}{12}$



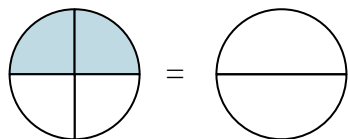
1) $\frac{3}{6} =$



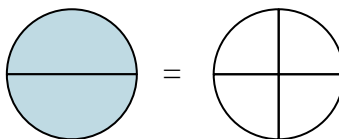
Answers

Ex. $\frac{3}{12}$

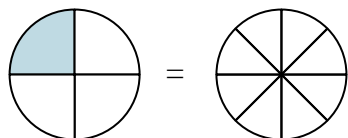
2) $\frac{2}{4} =$



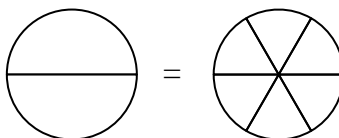
3) $\frac{2}{2} =$



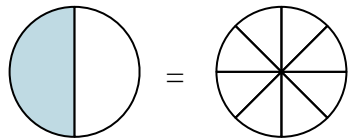
4) $\frac{1}{4} =$



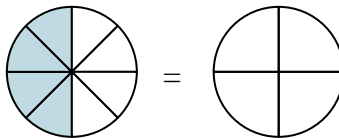
5) $\frac{0}{2} =$



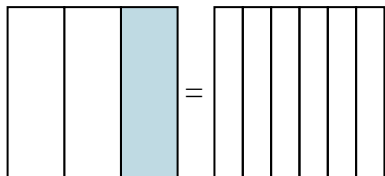
6) $\frac{1}{2} =$



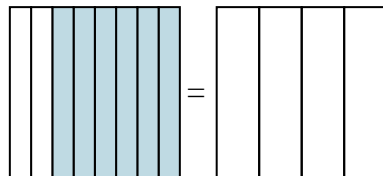
7) $\frac{4}{8} =$



8) $\frac{1}{3} =$



9) $\frac{6}{8} =$



1. _____

2. _____

3. _____

4. _____

5. _____

6. _____

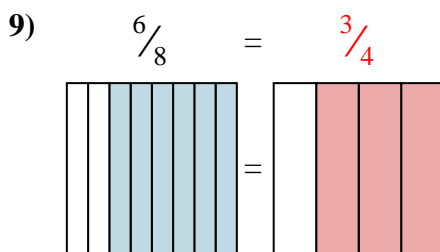
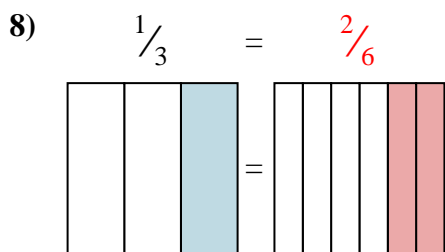
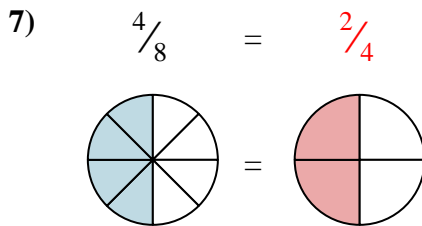
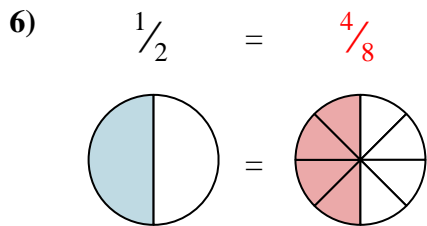
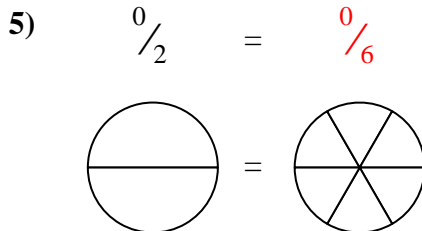
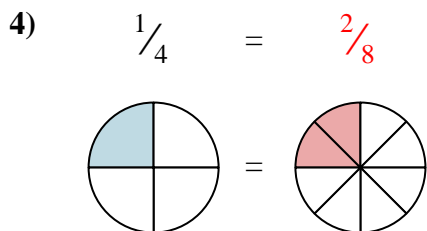
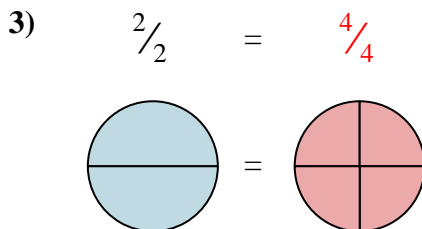
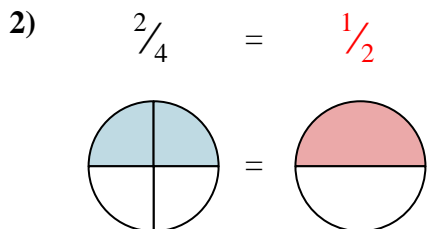
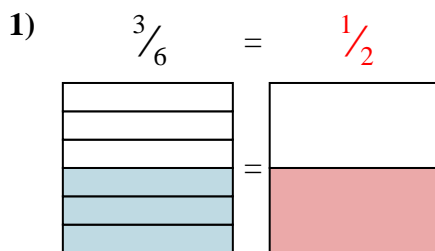
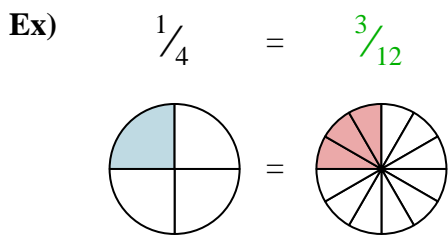
7. _____

8. _____

9. _____



Shade in the visual fraction to find the equivalent fraction.

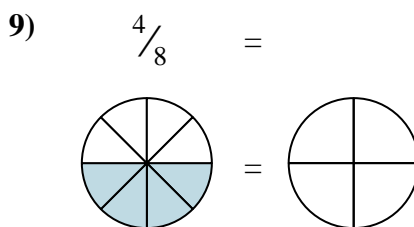
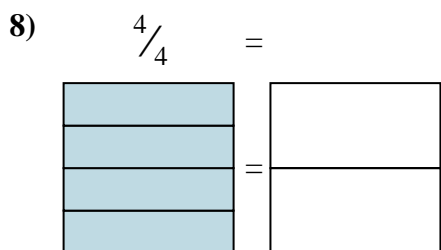
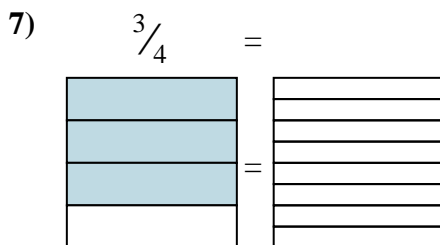
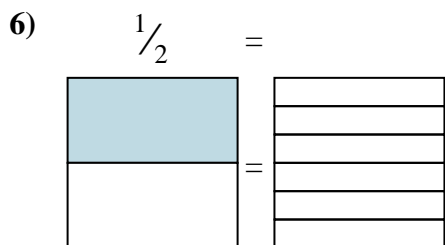
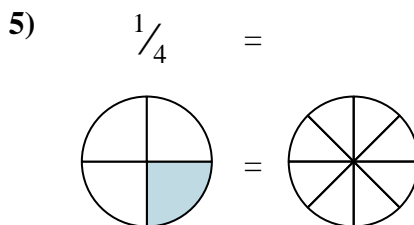
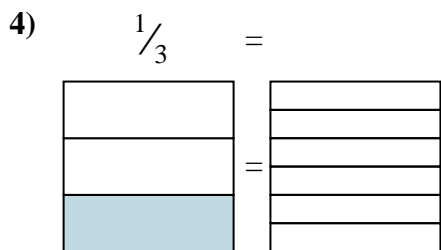
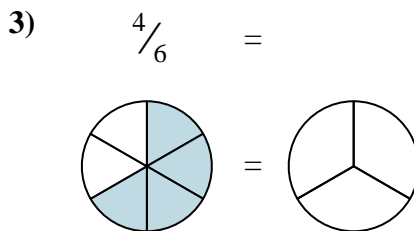
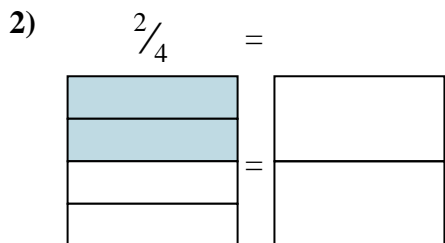
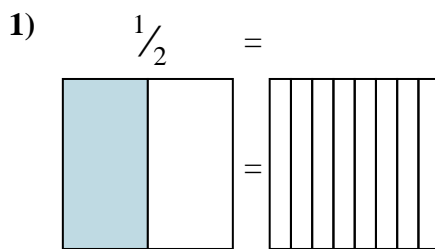
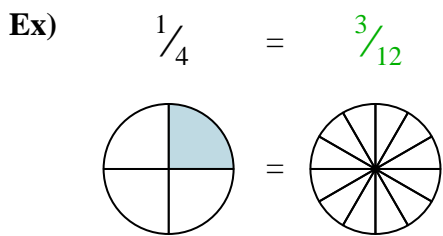


Answers

- Ex. $\frac{3}{12}$
1. $\frac{1}{2}$
2. $\frac{1}{2}$
3. $\frac{4}{4}$
4. $\frac{2}{8}$
5. $\frac{0}{6}$
6. $\frac{4}{8}$
7. $\frac{2}{4}$
8. $\frac{2}{6}$
9. $\frac{3}{4}$



Shade in the visual fraction to find the equivalent fraction.



Answers

Ex. $\frac{3}{12}$

1. _____

2. _____

3. _____

4. _____

5. _____

6. _____

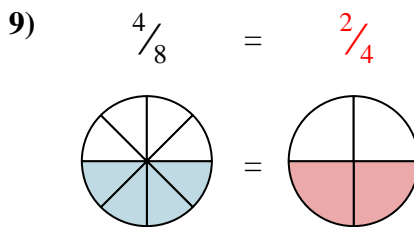
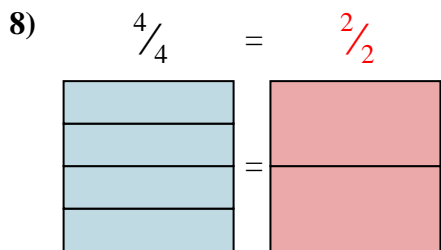
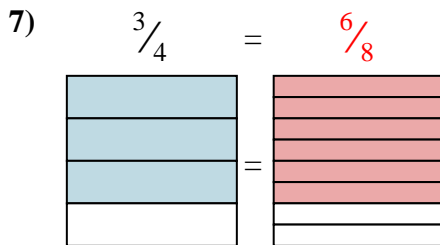
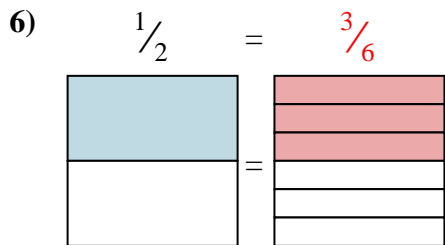
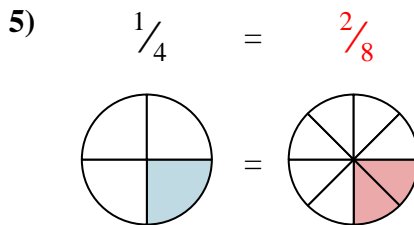
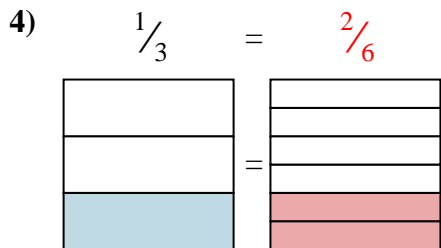
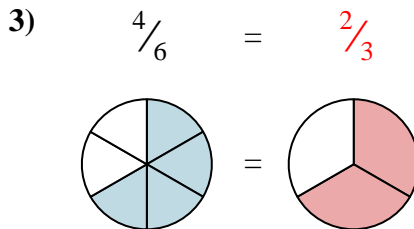
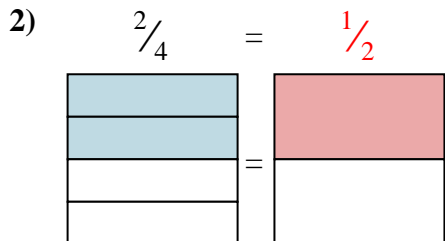
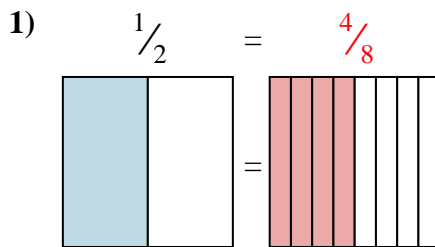
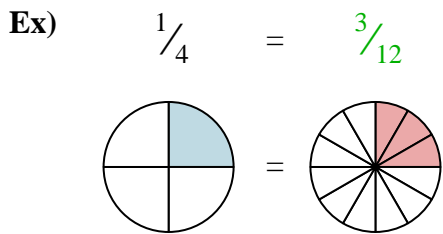
7. _____

8. _____

9. _____



Shade in the visual fraction to find the equivalent fraction.



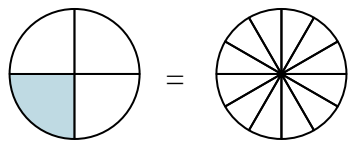
Answers

- Ex. $\frac{3}{12}$
1. $\frac{4}{8}$
2. $\frac{1}{2}$
3. $\frac{2}{3}$
4. $\frac{2}{6}$
5. $\frac{2}{8}$
6. $\frac{3}{6}$
7. $\frac{6}{8}$
8. $\frac{2}{2}$
9. $\frac{2}{4}$

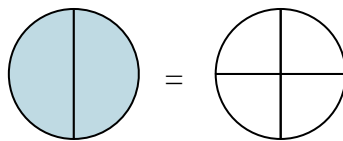


Shade in the visual fraction to find the equivalent fraction.

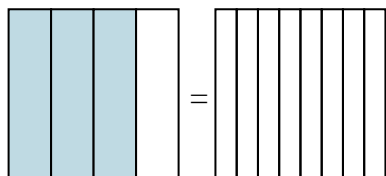
Ex) $\frac{1}{4} = \frac{3}{12}$



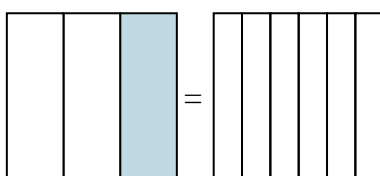
1) $\frac{2}{2} =$



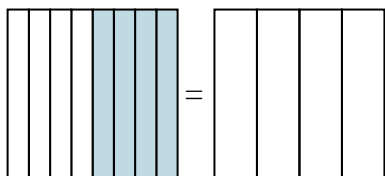
2) $\frac{3}{4} =$



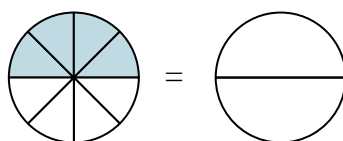
3) $\frac{1}{3} =$



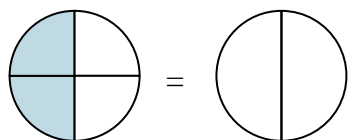
4) $\frac{4}{8} =$



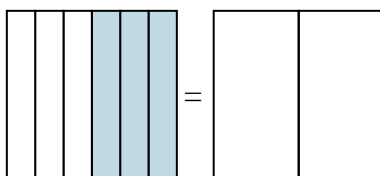
5) $\frac{4}{8} =$



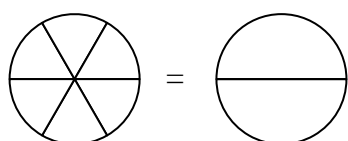
6) $\frac{2}{4} =$



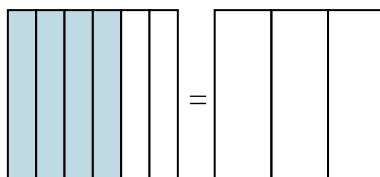
7) $\frac{3}{6} =$



8) $\frac{0}{6} =$



9) $\frac{4}{6} =$



Answers

Ex. $\frac{3}{12}$

1. _____

2. _____

3. _____

4. _____

5. _____

6. _____

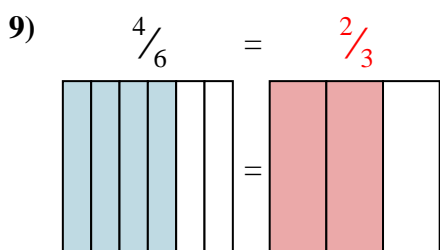
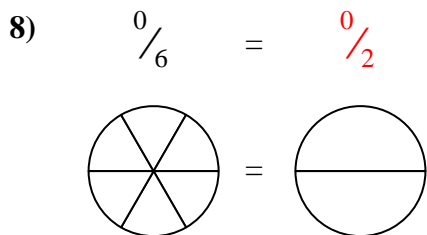
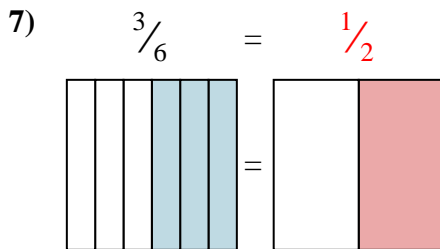
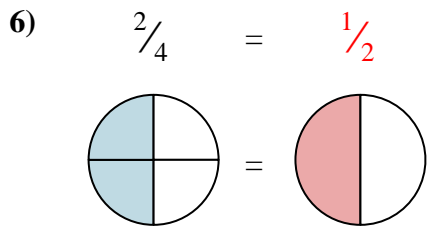
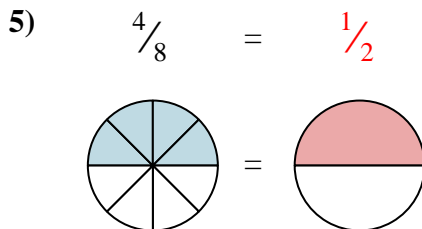
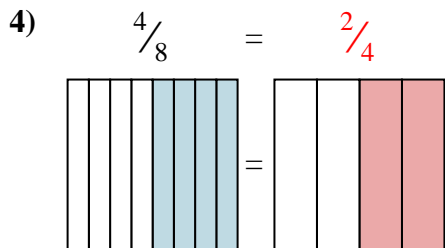
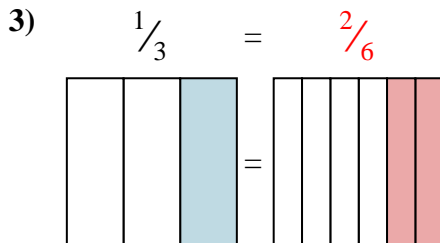
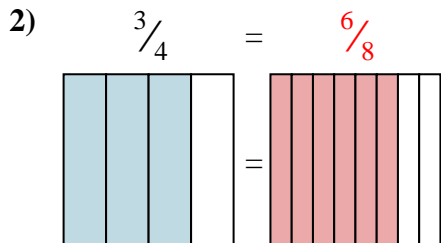
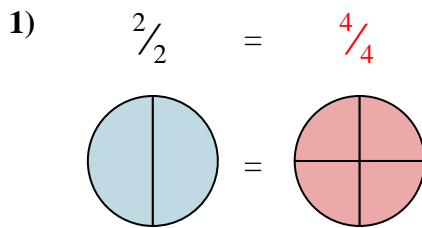
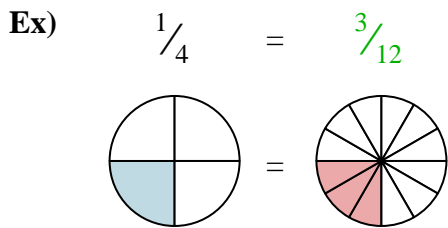
7. _____

8. _____

9. _____



Shade in the visual fraction to find the equivalent fraction.



Answers

Ex. $\frac{3}{12}$

1. $\frac{4}{4}$

2. $\frac{6}{8}$

3. $\frac{2}{6}$

4. $\frac{2}{4}$

5. $\frac{1}{2}$

6. $\frac{1}{2}$

7. $\frac{1}{2}$

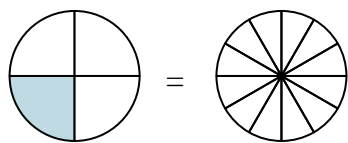
8. $\frac{0}{2}$

9. $\frac{2}{3}$

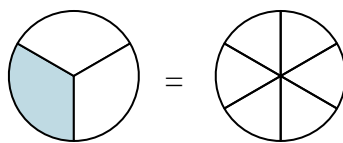


Shade in the visual fraction to find the equivalent fraction.

Ex) $\frac{1}{4} = \frac{3}{12}$



1) $\frac{1}{3} =$



Ex. $\frac{3}{12}$

1. _____

2. _____

3. _____

4. _____

5. _____

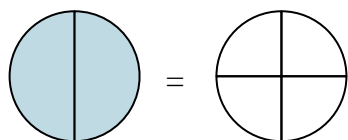
6. _____

7. _____

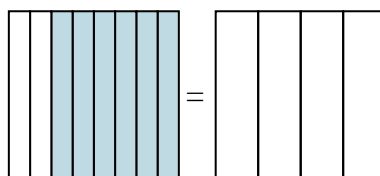
8. _____

9. _____

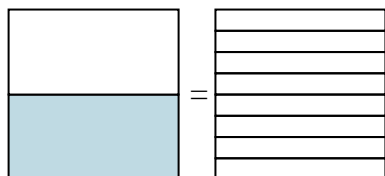
2) $\frac{2}{2} =$



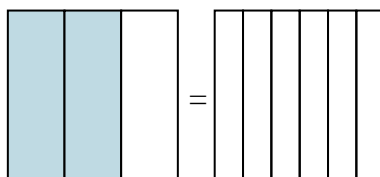
3) $\frac{6}{8} =$



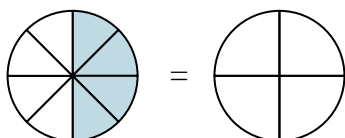
4) $\frac{1}{2} =$



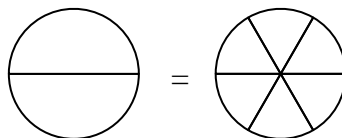
5) $\frac{2}{3} =$



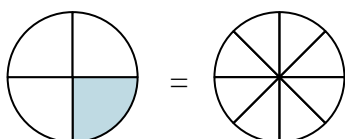
6) $\frac{4}{8} =$



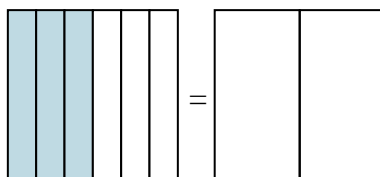
7) $\frac{0}{2} =$



8) $\frac{1}{4} =$

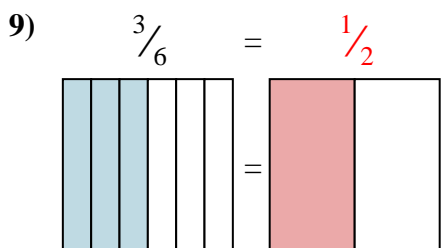
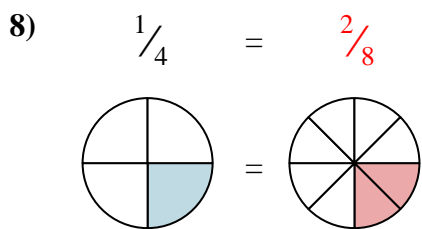
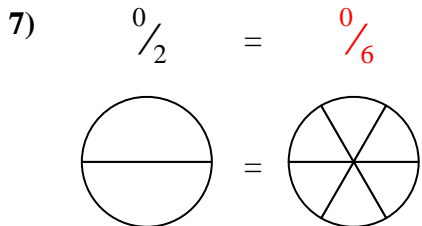
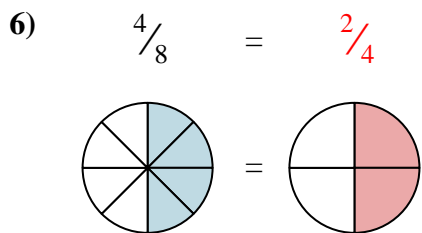
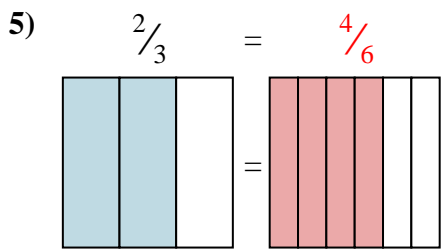
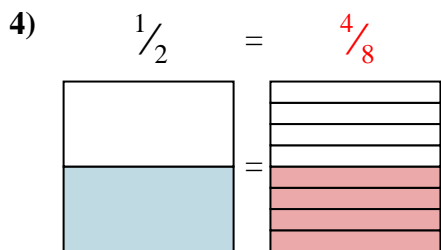
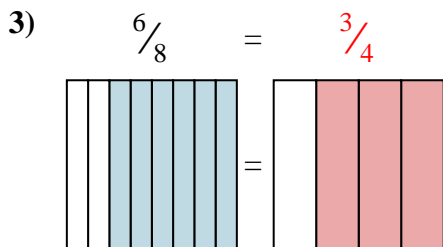
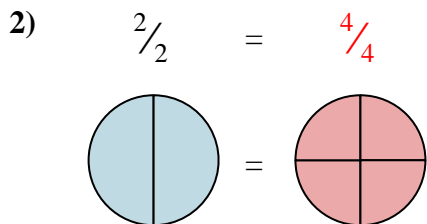
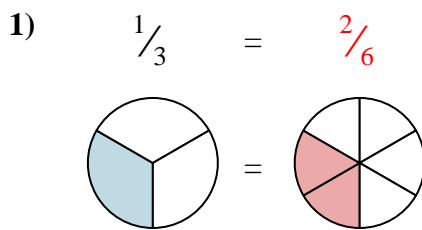
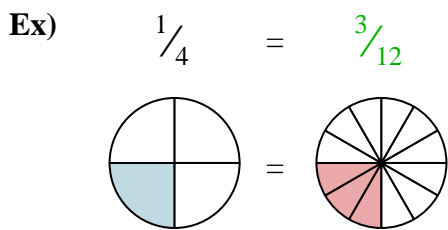


9) $\frac{3}{6} =$





Shade in the visual fraction to find the equivalent fraction.



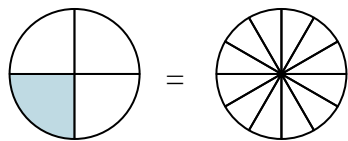
Answers

- Ex. $\frac{3}{12}$
1. $\frac{2}{6}$
2. $\frac{4}{4}$
3. $\frac{3}{4}$
4. $\frac{4}{8}$
5. $\frac{4}{6}$
6. $\frac{2}{4}$
7. $\frac{0}{6}$
8. $\frac{2}{8}$
9. $\frac{1}{2}$

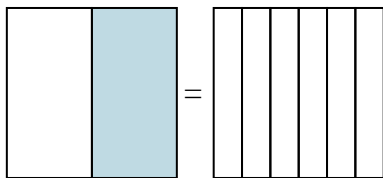


Shade in the visual fraction to find the equivalent fraction.

Ex) $\frac{1}{4} = \frac{3}{12}$



1) $\frac{1}{2} =$



Answers

Ex. $\frac{3}{12}$

1. _____

2. _____

3. _____

4. _____

5. _____

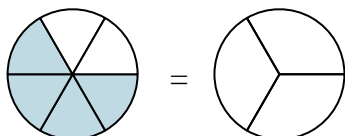
6. _____

7. _____

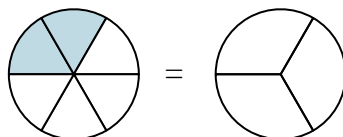
8. _____

9. _____

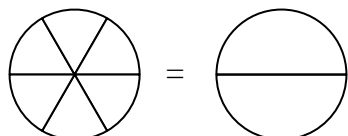
2) $\frac{4}{6} =$



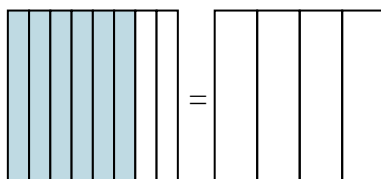
3) $\frac{2}{6} =$



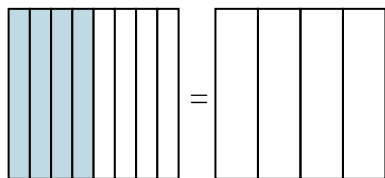
4) $\frac{0}{6} =$



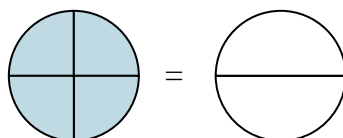
5) $\frac{6}{8} =$



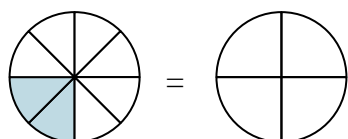
6) $\frac{4}{8} =$



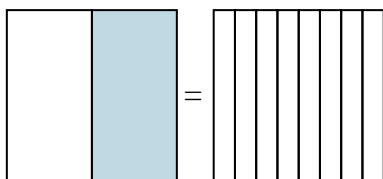
7) $\frac{4}{4} =$



8) $\frac{2}{8} =$

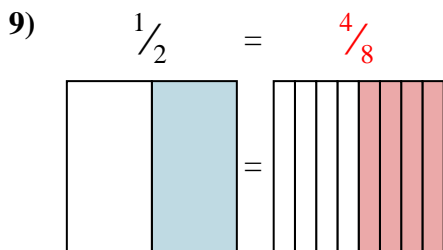
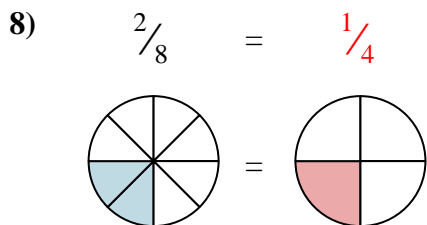
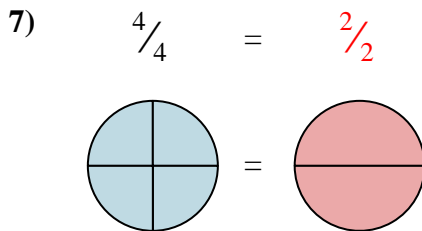
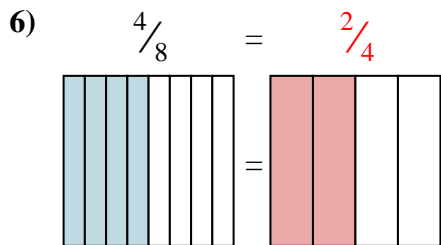
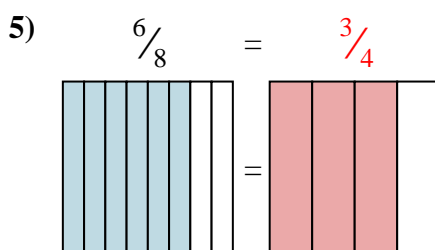
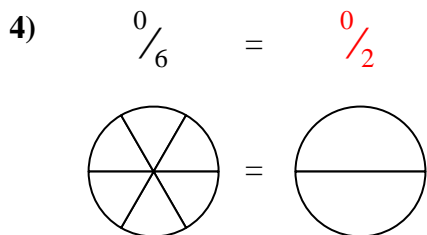
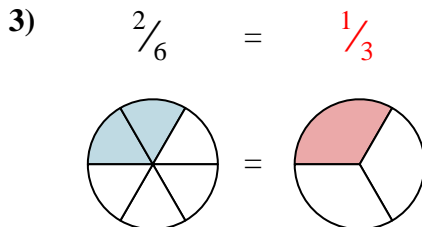
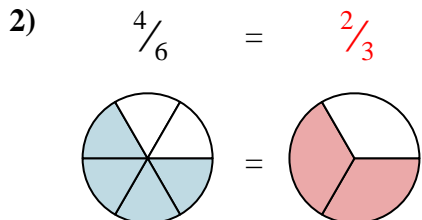
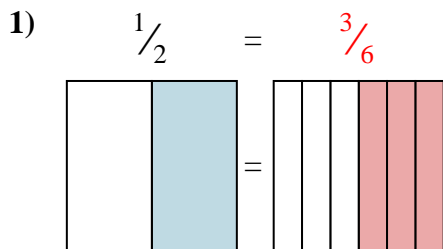
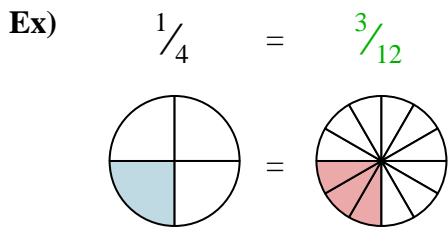


9) $\frac{1}{2} =$





Shade in the visual fraction to find the equivalent fraction.

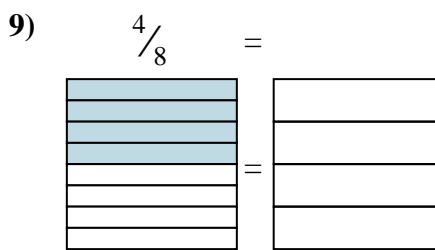
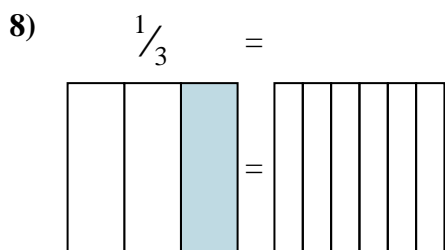
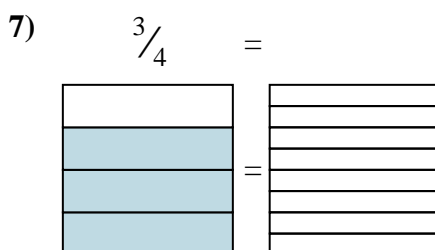
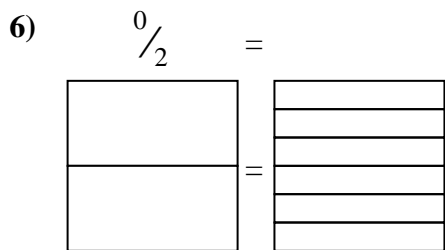
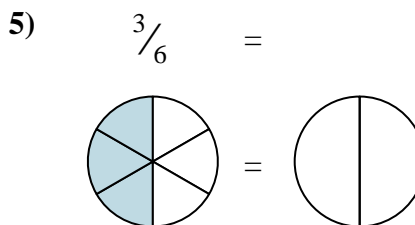
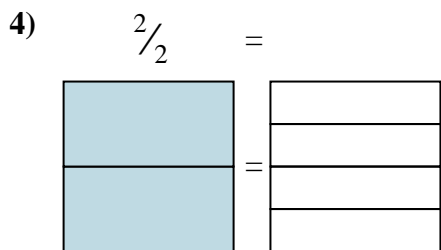
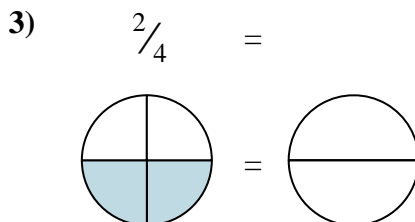
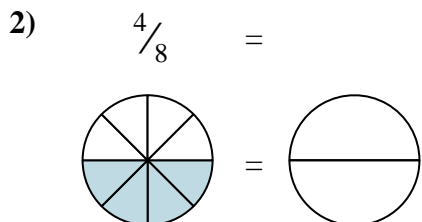
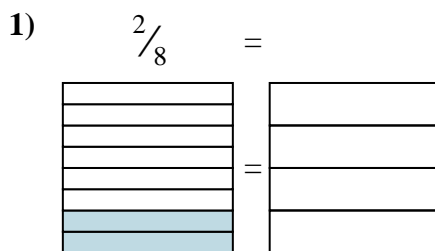
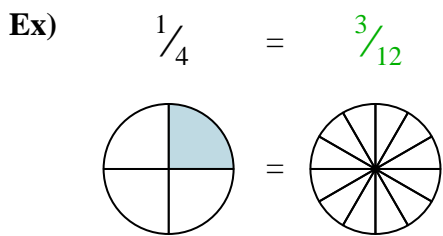


Answers

- Ex. $\frac{3}{12}$
1. $\frac{3}{6}$
2. $\frac{2}{3}$
3. $\frac{1}{3}$
4. $\frac{0}{2}$
5. $\frac{3}{4}$
6. $\frac{2}{4}$
7. $\frac{2}{2}$
8. $\frac{1}{4}$
9. $\frac{4}{8}$



Shade in the visual fraction to find the equivalent fraction.

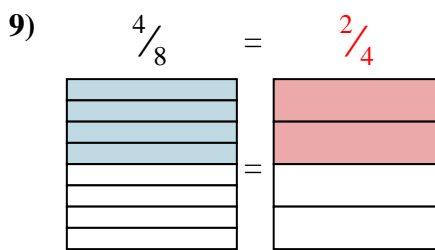
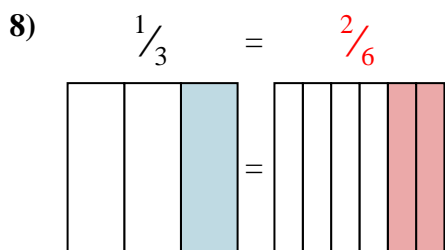
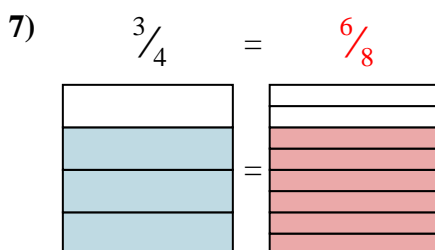
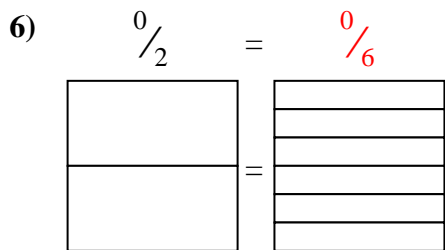
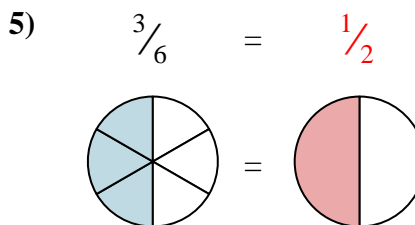
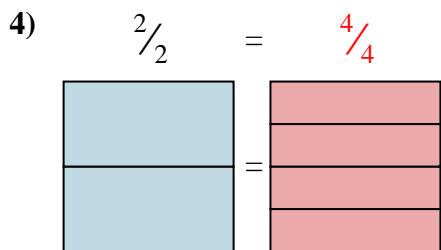
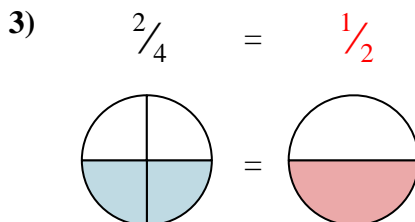
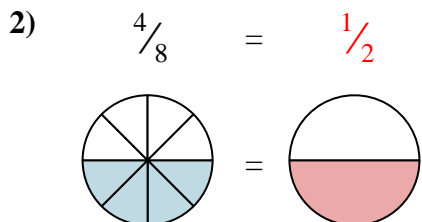
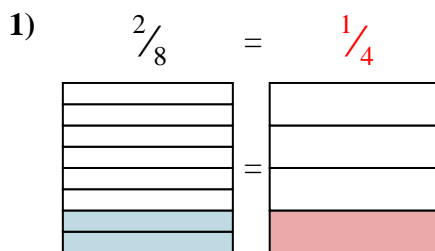
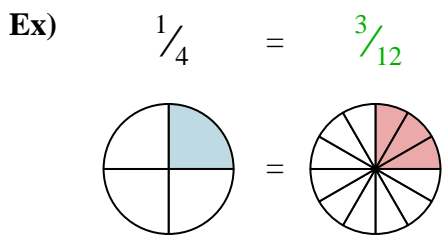


Answers

- Ex. $\frac{3}{12}$
1. _____
2. _____
3. _____
4. _____
5. _____
6. _____
7. _____
8. _____
9. _____



Shade in the visual fraction to find the equivalent fraction.



Answers

- Ex. $\frac{3}{12}$
1. $\frac{1}{4}$
2. $\frac{1}{2}$
3. $\frac{1}{2}$
4. $\frac{4}{4}$
5. $\frac{1}{2}$
6. $\frac{0}{6}$
7. $\frac{6}{8}$
8. $\frac{2}{6}$
9. $\frac{2}{4}$



Shade in the visual fraction to find the equivalent fraction.

Ex) $\frac{1}{4} = \frac{3}{12}$

1) $\frac{4}{4} =$

2) $\frac{4}{6} =$

3) $\frac{0}{6} =$

4) $\frac{4}{8} =$

5) $\frac{2}{6} =$

6) $\frac{6}{8} =$

7) $\frac{4}{8} =$

8) $\frac{3}{6} =$

9) $\frac{1}{4} =$

Answers

Ex. $\frac{3}{12}$

1. _____

2. _____

3. _____

4. _____

5. _____

6. _____

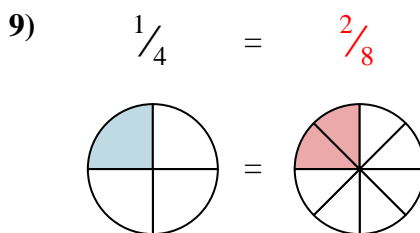
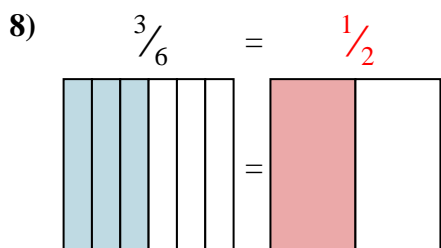
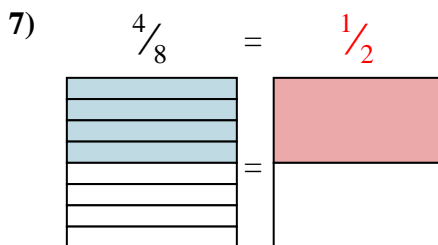
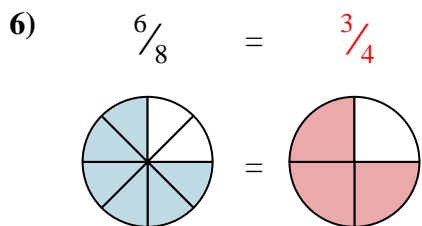
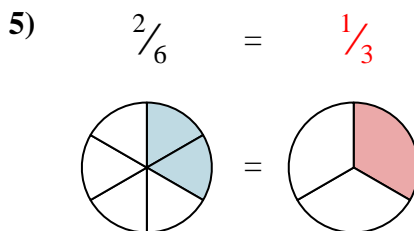
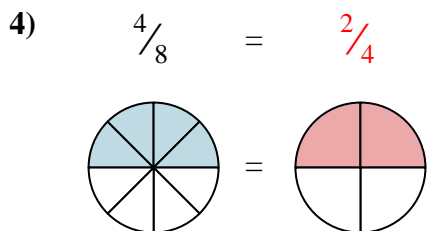
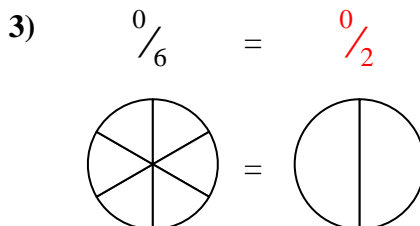
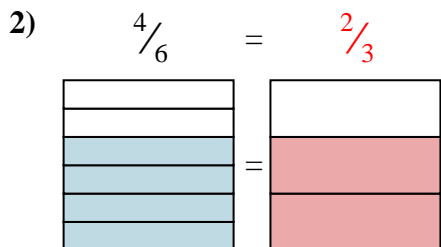
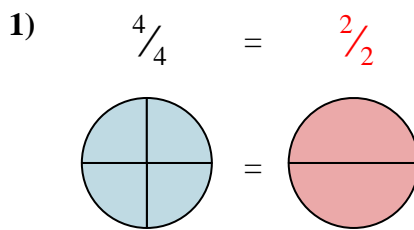
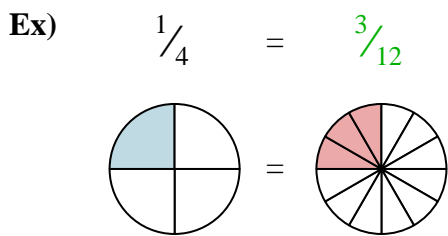
7. _____

8. _____

9. _____



Shade in the visual fraction to find the equivalent fraction.



Answers

- Ex. $\frac{3}{12}$
1. $\frac{2}{2}$
2. $\frac{2}{3}$
3. $\frac{0}{2}$
4. $\frac{2}{4}$
5. $\frac{1}{3}$
6. $\frac{3}{4}$
7. $\frac{1}{2}$
8. $\frac{1}{2}$
9. $\frac{2}{8}$