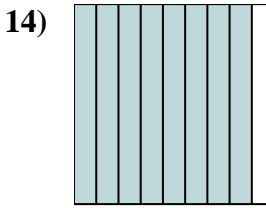
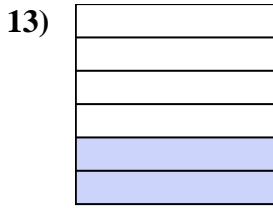
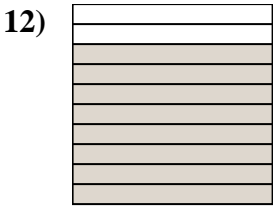
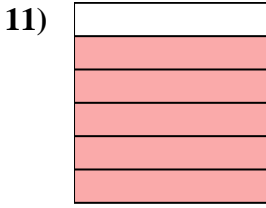
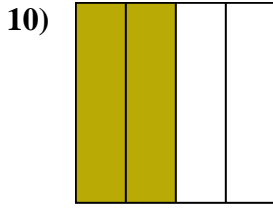
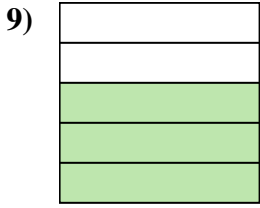
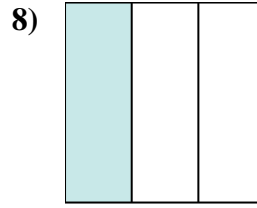
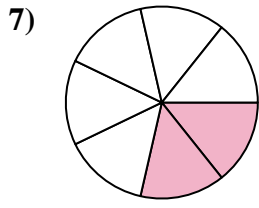
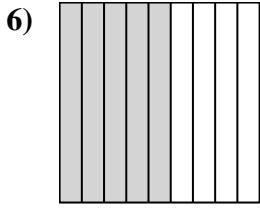
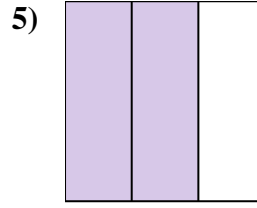
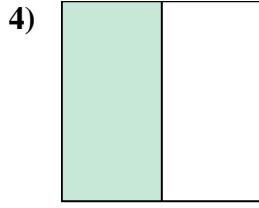
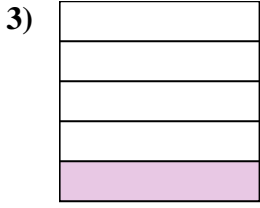
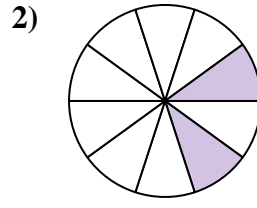
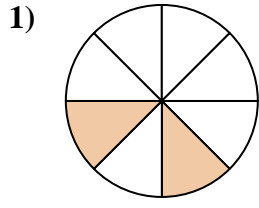
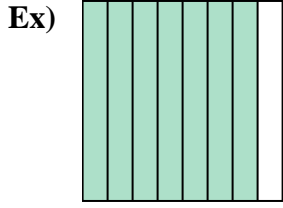




Write the shaded amount in word form.



Answers

Ex. seven-eighths

1. \_\_\_\_\_

2. \_\_\_\_\_

3. \_\_\_\_\_

4. \_\_\_\_\_

5. \_\_\_\_\_

6. \_\_\_\_\_

7. \_\_\_\_\_

8. \_\_\_\_\_

9. \_\_\_\_\_

10. \_\_\_\_\_

11. \_\_\_\_\_

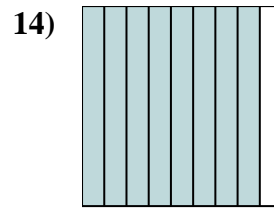
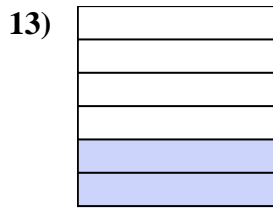
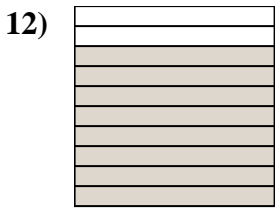
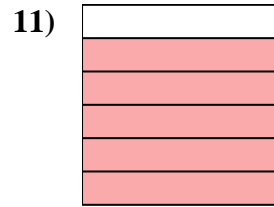
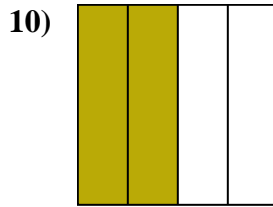
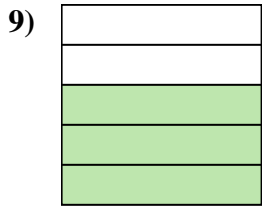
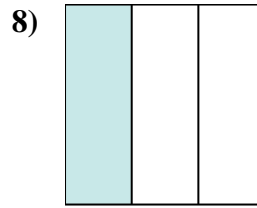
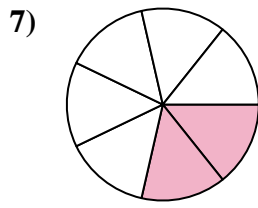
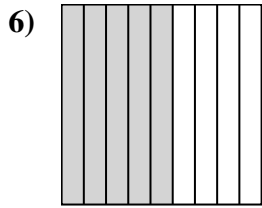
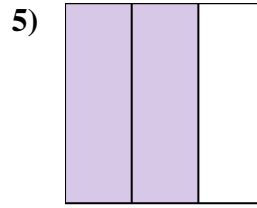
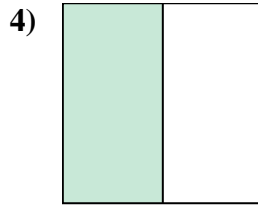
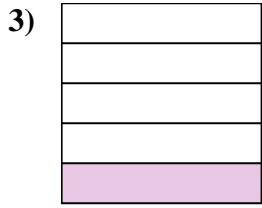
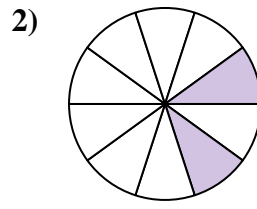
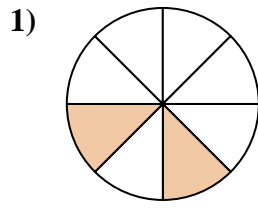
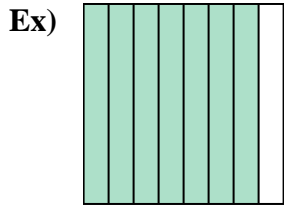
12. \_\_\_\_\_

13. \_\_\_\_\_

14. \_\_\_\_\_



Write the shaded amount in word form.



Answers

Ex. seven-eighths

1. two-eighths

2. two-tenths

3. one-fifth

4. one-half

5. two-thirds

6. five-ninths

7. two-sevenths

8. one-third

9. three-fifths

10. two-fourths

11. five-sixths

12. eight-tenths

13. two-sixths

14. eight-ninths