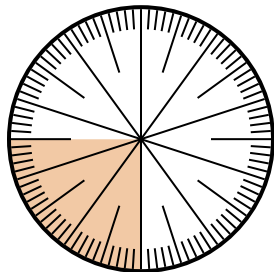


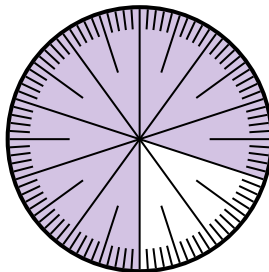


Solve each problem.

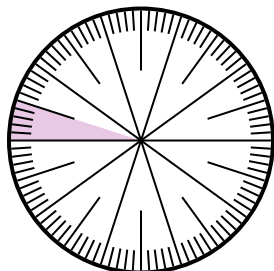
- 1) Express the un-shaded portion as a fraction of the whole with a 100 as the denominator.



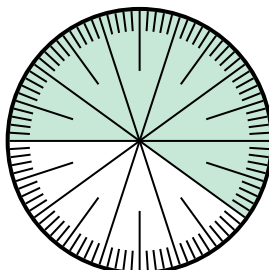
- 2) Express the un-shaded portion as a decimal of the whole.



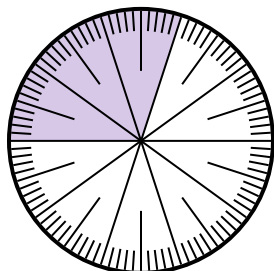
- 3) Express the shaded portion as a fraction of the whole with a 100 as the denominator.



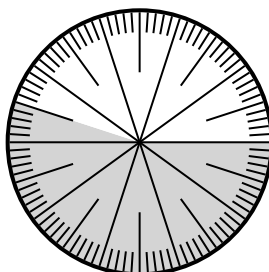
- 4) Express the shaded portion as a fraction of the whole with a 100 as the denominator.



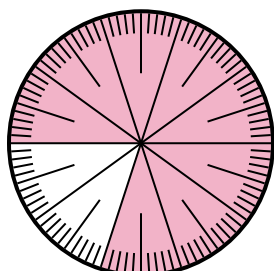
- 5) Express the un-shaded portion as a fraction of the whole with a 100 as the denominator.



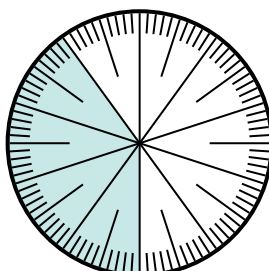
- 6) Express the un-shaded portion as a fraction of the whole with a 100 as the denominator.



- 7) Express the un-shaded portion as a fraction of the whole with a 100 as the denominator.



- 8) Express the un-shaded portion as a decimal of the whole.



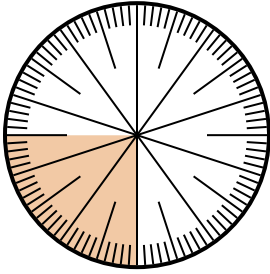
**Answers**

1. \_\_\_\_\_
2. \_\_\_\_\_
3. \_\_\_\_\_
4. \_\_\_\_\_
5. \_\_\_\_\_
6. \_\_\_\_\_
7. \_\_\_\_\_
8. \_\_\_\_\_

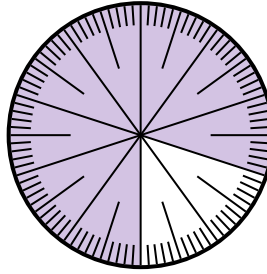


Solve each problem.

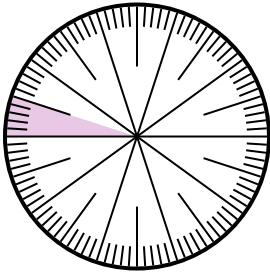
- 1) Express the un-shaded portion as a fraction of the whole with a 100 as the denominator.



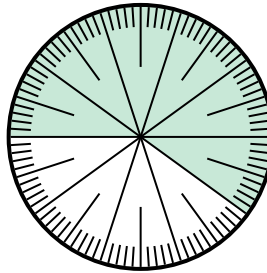
- 2) Express the un-shaded portion as a decimal of the whole.



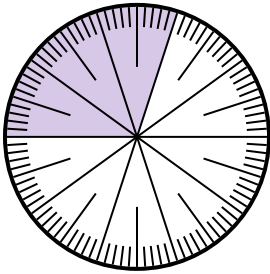
- 3) Express the shaded portion as a fraction of the whole with a 100 as the denominator.



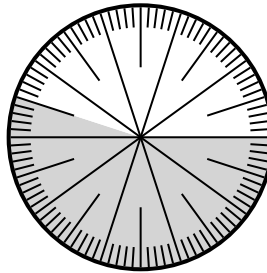
- 4) Express the shaded portion as a fraction of the whole with a 100 as the denominator.



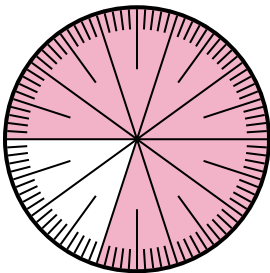
- 5) Express the un-shaded portion as a fraction of the whole with a 100 as the denominator.



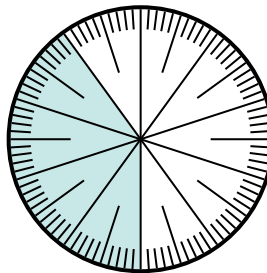
- 6) Express the un-shaded portion as a fraction of the whole with a 100 as the denominator.



- 7) Express the un-shaded portion as a fraction of the whole with a 100 as the denominator.



- 8) Express the un-shaded portion as a decimal of the whole.



Answers

1.  $\frac{75}{100}$

2. **0.2**

3.  $\frac{5}{100}$

4.  $\frac{60}{100}$

5.  $\frac{70}{100}$

6.  $\frac{45}{100}$

7.  $\frac{20}{100}$

8. **0.6**