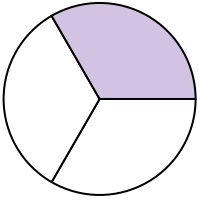





Write the shaded amount as a fraction.

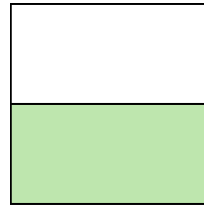
Ex)



1)



2)



**Answers**

Ex.  $\frac{1}{3}$

1. \_\_\_\_\_

2. \_\_\_\_\_

3. \_\_\_\_\_

4. \_\_\_\_\_

5. \_\_\_\_\_

6. \_\_\_\_\_

7. \_\_\_\_\_

8. \_\_\_\_\_

9. \_\_\_\_\_

10. \_\_\_\_\_

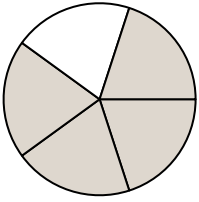
11. \_\_\_\_\_

12. \_\_\_\_\_

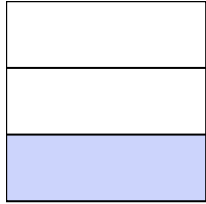
13. \_\_\_\_\_

14. \_\_\_\_\_


3)



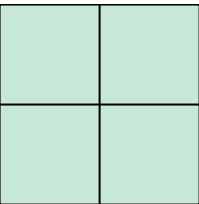
4)



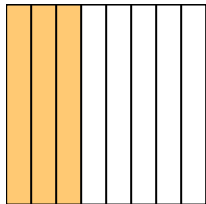
5)




6)



7)



8)




9)



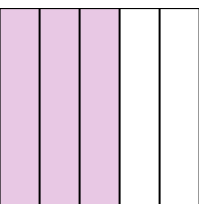
10)




11)




12)



13)



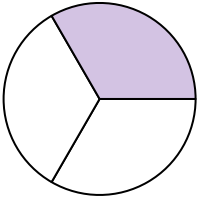
14)






Write the shaded amount as a fraction.

Ex)



1)



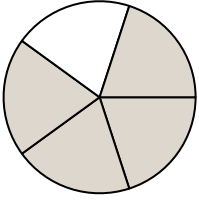
2)



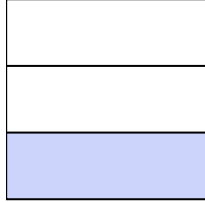
**Answers**

Ex. 1/3


3)



4)



5)



1. 3/4

2. 1/2

3. 4/5

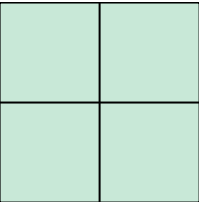
4. 1/3

5. 1/8

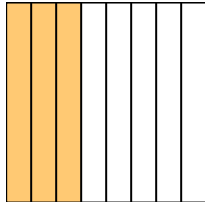
6. 4/4

7. 3/8


6)



7)



8)



8. 1/2

9. 3/4

10. 2/5

11. 7/8


9)



10)



11)

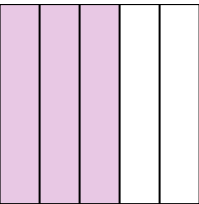


12. 3/5


13. 1/2

14. 2/3

12)



13)



14)

