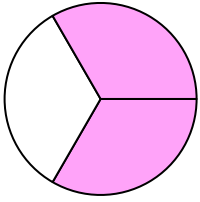


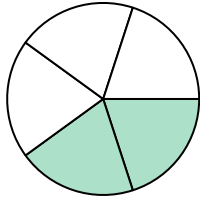


Write the shaded amount as a fraction.

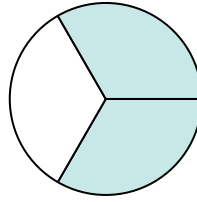
Ex)



1)



2)



**Answers**

Ex.  $\frac{2}{3}$

1. \_\_\_\_\_

2. \_\_\_\_\_

3. \_\_\_\_\_

4. \_\_\_\_\_

5. \_\_\_\_\_

6. \_\_\_\_\_

7. \_\_\_\_\_

8. \_\_\_\_\_

9. \_\_\_\_\_

10. \_\_\_\_\_

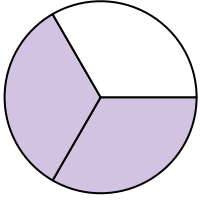
11. \_\_\_\_\_

12. \_\_\_\_\_

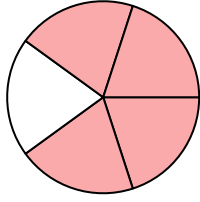
13. \_\_\_\_\_

14. \_\_\_\_\_


3)




4)



5)




6)



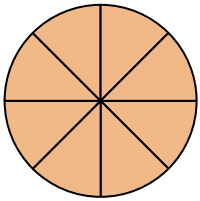
7)



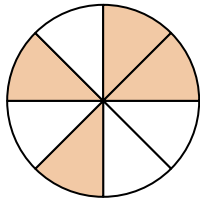
8)




9)



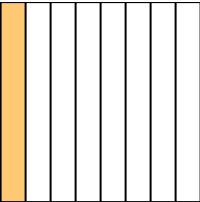
10)



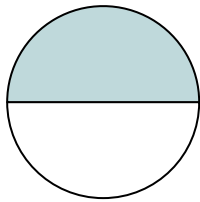
11)



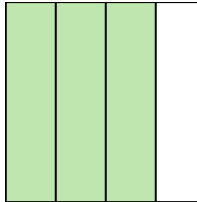
12)



13)



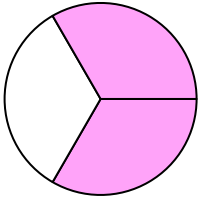
14)



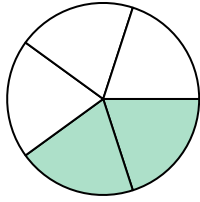


Write the shaded amount as a fraction.

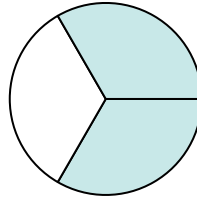
Ex)



1)



2)



Answers

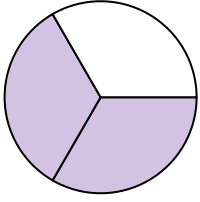
Ex. 2/3

1. 2/5

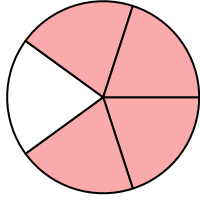
2. 2/3

3. 2/3


3)



4)



5)




4. 4/5

5. 2/2

6. 4/4


6)



7)



8)



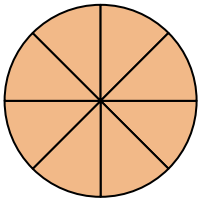
7. 1/4

8. 4/5

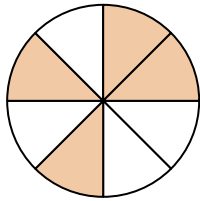
9. 8/8

10. 4/8


9)



10)



11)



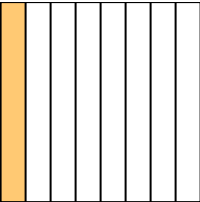
11. 1/2

12. 1/8

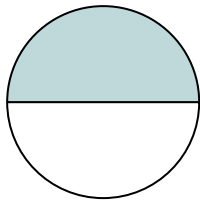
13. 1/2

14. 3/4

12)



13)



14)

