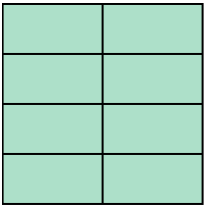





Write the shaded amount as a fraction.

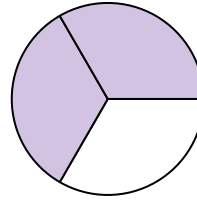
Ex)



1)



2)



Answers

Ex. $\frac{8}{8}$

1. _____

2. _____

3. _____

4. _____

5. _____

6. _____

7. _____

8. _____

9. _____

10. _____

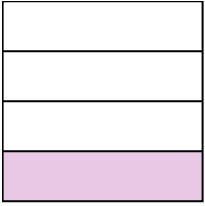
11. _____

12. _____

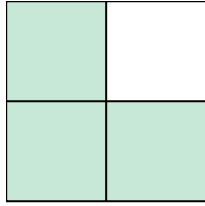
13. _____

14. _____


3)



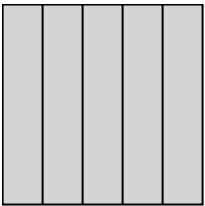
4)



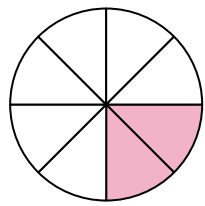
5)



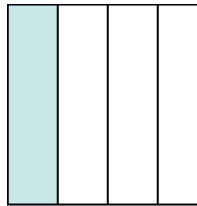
6)




7)



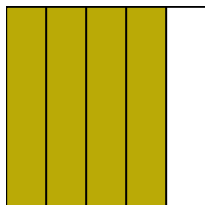
8)



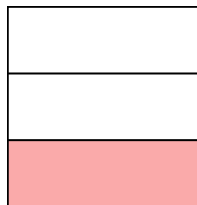
9)




10)




11)




12)



13)

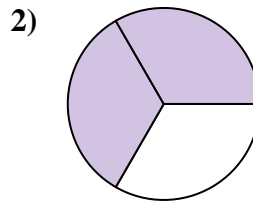
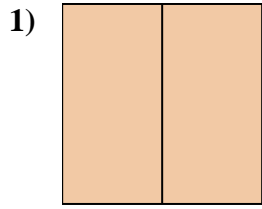
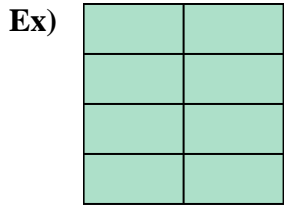


14)



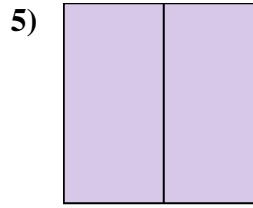
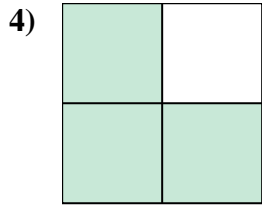
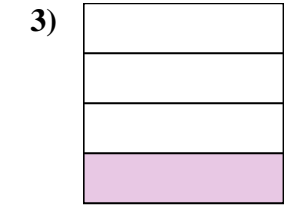


Write the shaded amount as a fraction.



Answers

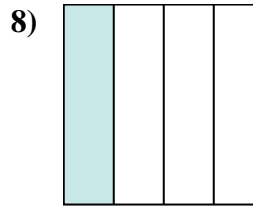
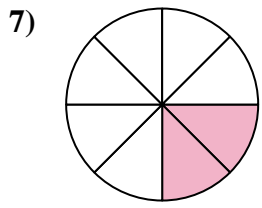
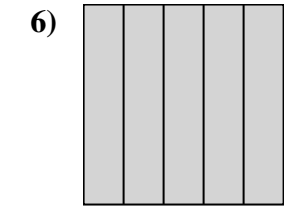
Ex. 8/8



1. 2/2

2. 2/3

3. 1/4



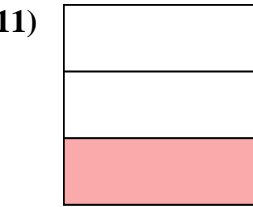
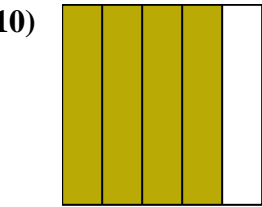
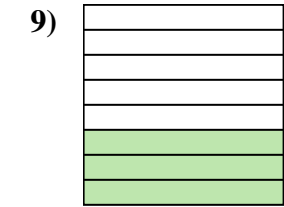
4. 3/4

5. 2/2

6. 5/5

7. 2/8

8. 1/4



9. 3/8

10. 4/5

11. 1/3

12. 1/5

13. 2/2

14. 3/3

