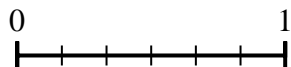
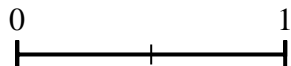




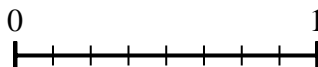
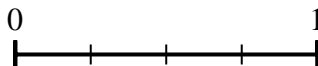
Use the number lines to answer the questions.

Answers

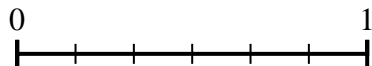
1) Using the number lines shown, what is the equivalent fraction to $\frac{2}{2}$?



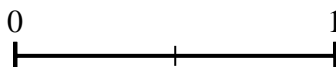
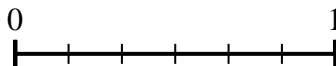
2) Using the number lines shown, what is the equivalent fraction to $\frac{3}{4}$?



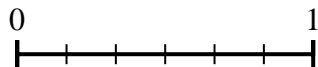
3) Using the number lines shown, what is the equivalent fraction to $\frac{6}{6}$?



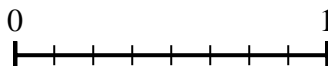
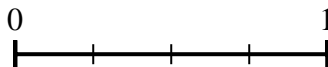
4) Using the number lines shown, what is the equivalent fraction to $\frac{0}{6}$?



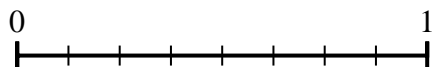
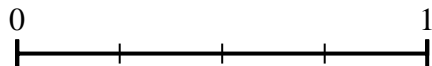
5) Using the number lines shown, what is the equivalent fraction to $\frac{2}{6}$?



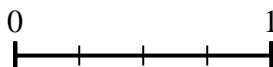
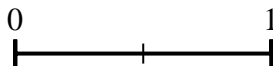
6) Using the number lines shown, what is the equivalent fraction to $\frac{1}{4}$?



7) Using the number lines shown, what is the equivalent fraction to $\frac{2}{4}$?



8) Using the number lines shown, what is the equivalent fraction to $\frac{2}{2}$?

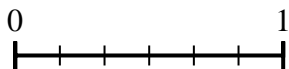
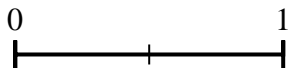


1. _____
2. _____
3. _____
4. _____
5. _____
6. _____
7. _____
8. _____

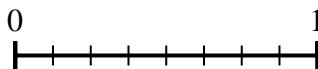
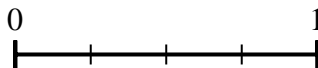


Use the number lines to answer the questions.

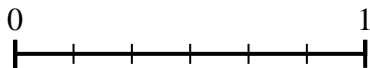
1) Using the number lines shown, what is the equivalent fraction to $\frac{2}{2}$?



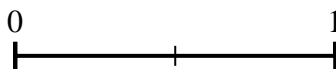
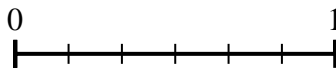
2) Using the number lines shown, what is the equivalent fraction to $\frac{3}{4}$?




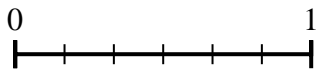
3) Using the number lines shown, what is the equivalent fraction to $\frac{6}{6}$?



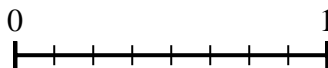
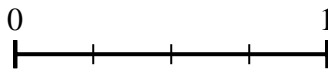
4) Using the number lines shown, what is the equivalent fraction to $\frac{0}{6}$?



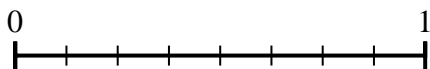
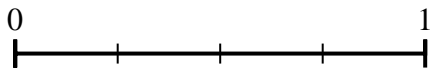
5) Using the number lines shown, what is the equivalent fraction to $\frac{2}{6}$?



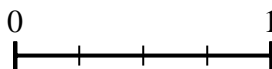
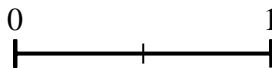
6) Using the number lines shown, what is the equivalent fraction to $\frac{1}{4}$?



7) Using the number lines shown, what is the equivalent fraction to $\frac{2}{4}$?



8) Using the number lines shown, what is the equivalent fraction to $\frac{2}{2}$?



Answers

1. $\frac{6}{6}$

2. $\frac{6}{8}$

3. $\frac{3}{3}$

4. $\frac{0}{2}$

5. $\frac{1}{3}$

6. $\frac{2}{8}$

7. $\frac{4}{8}$

8. $\frac{4}{4}$