

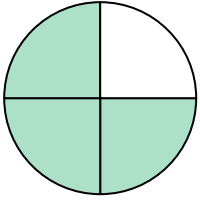


Shade in the equivalent fraction and answer with shaded fraction.

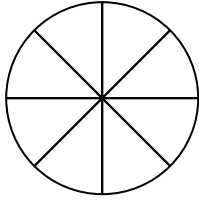
Answers

1)

$\frac{3}{4}$

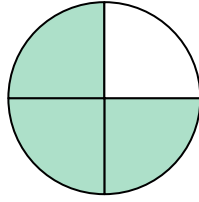


$\frac{3 \times 2}{4 \times 2}$

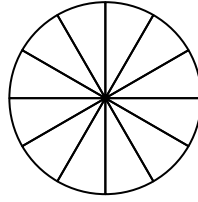


2)

$\frac{3}{4}$

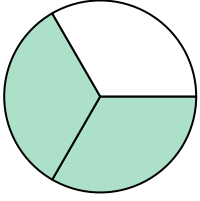


$\frac{3 \times 3}{4 \times 3}$

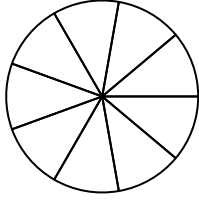


3)

$\frac{2}{3}$

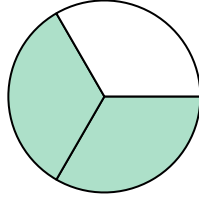


$\frac{2 \times 3}{3 \times 3}$

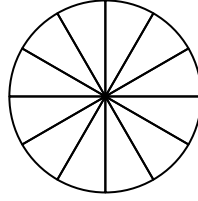


4)

$\frac{2}{3}$

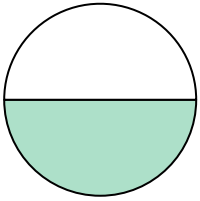


$\frac{2 \times 4}{3 \times 4}$

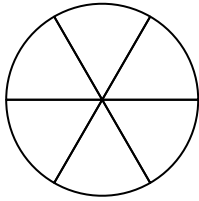


5)

$\frac{1}{2}$

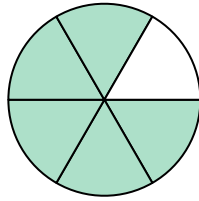


$\frac{1 \times 3}{2 \times 3}$

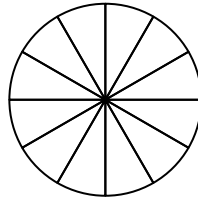


6)

$\frac{5}{6}$

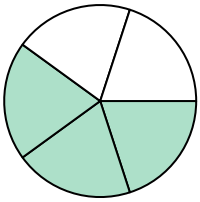


$\frac{5 \times 2}{6 \times 2}$

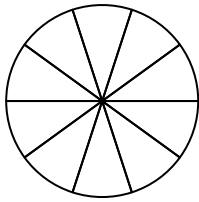


7)

$\frac{3}{5}$

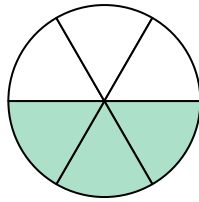


$\frac{3 \times 2}{5 \times 2}$

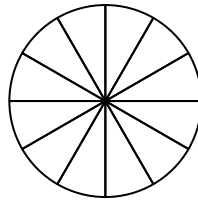


8)

$\frac{3}{6}$

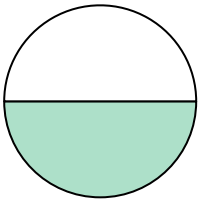


$\frac{3 \times 2}{6 \times 2}$

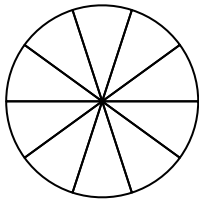


9)

$\frac{1}{2}$

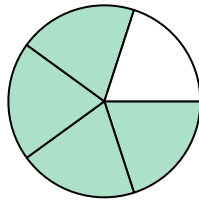


$\frac{1 \times 5}{2 \times 5}$

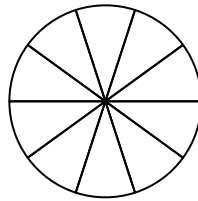


10)

$\frac{4}{5}$



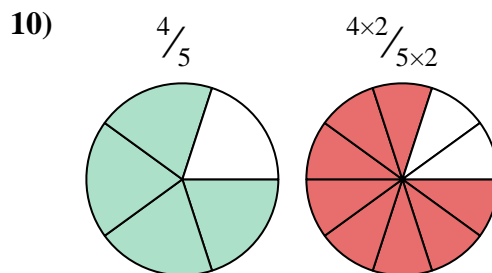
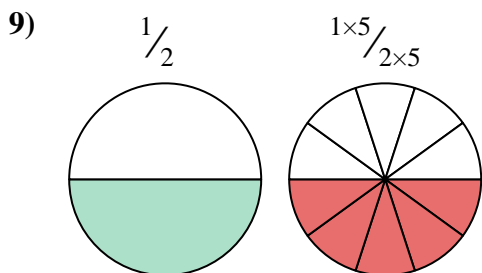
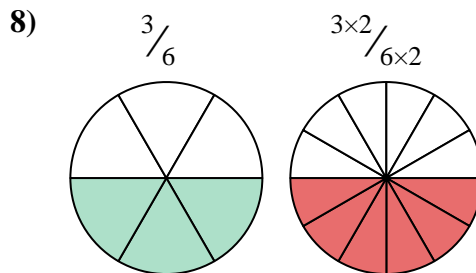
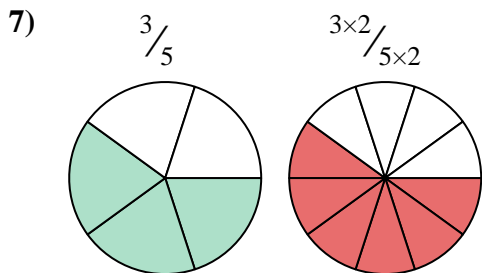
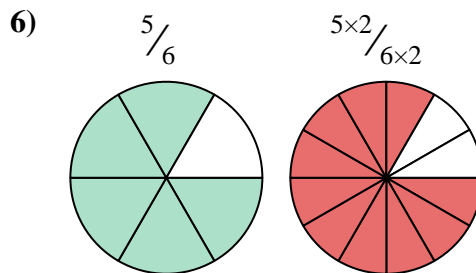
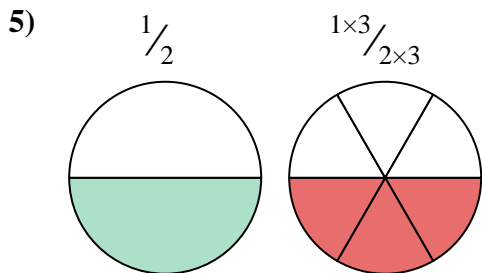
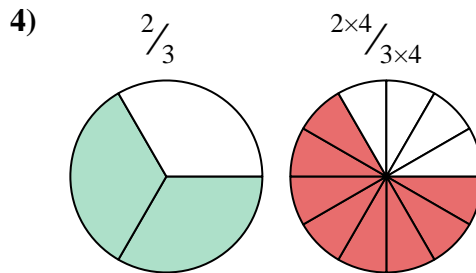
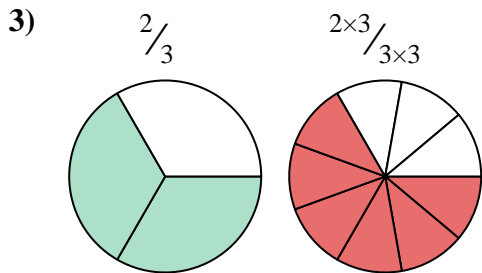
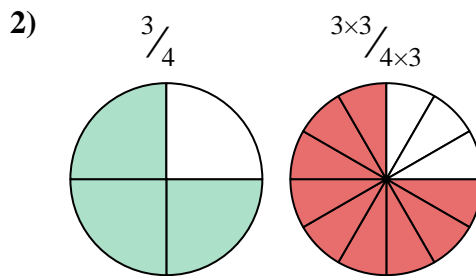
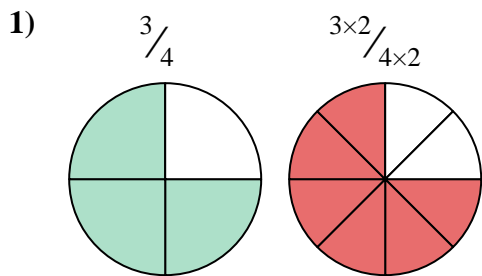
$\frac{4 \times 2}{5 \times 2}$



1. \_\_\_\_\_
2. \_\_\_\_\_
3. \_\_\_\_\_
4. \_\_\_\_\_
5. \_\_\_\_\_
6. \_\_\_\_\_
7. \_\_\_\_\_
8. \_\_\_\_\_
9. \_\_\_\_\_
10. \_\_\_\_\_



Shade in the equivalent fraction and answer with shaded fraction.



**Answers**

1.  $\frac{6}{8}$

2.  $\frac{9}{12}$

3.  $\frac{6}{9}$

4.  $\frac{8}{12}$

5.  $\frac{3}{6}$

6.  $\frac{10}{12}$

7.  $\frac{6}{10}$

8.  $\frac{6}{12}$

9.  $\frac{5}{10}$

10.  $\frac{8}{10}$