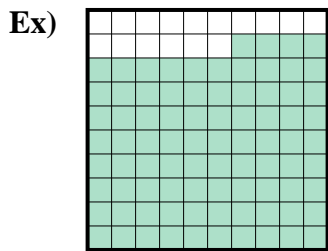
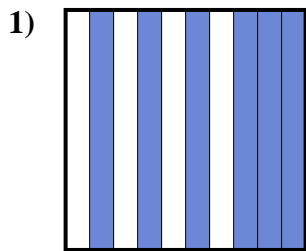




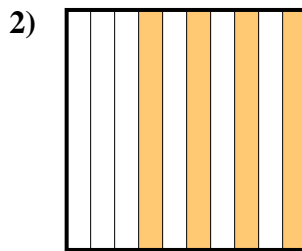
Determine the value written as a fraction , decimal & a percent.



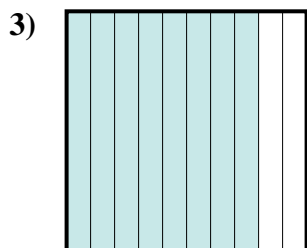
fraction $\frac{84}{100}$
 decimal 0.84
 percent 84



fraction _____
 decimal _____
 percent _____



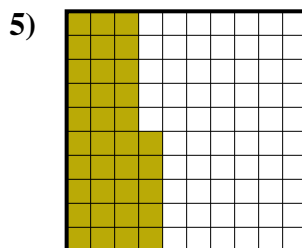
fraction _____
 decimal _____
 percent _____



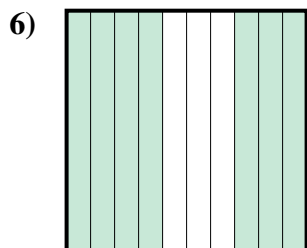
fraction _____
 decimal _____
 percent _____



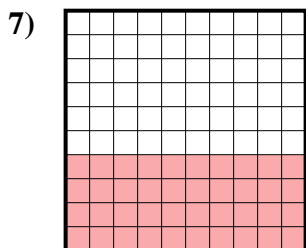
fraction _____
 decimal _____
 percent _____



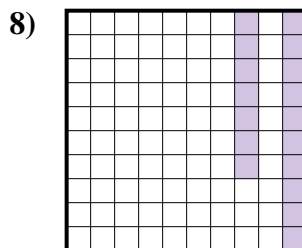
fraction _____
 decimal _____
 percent _____



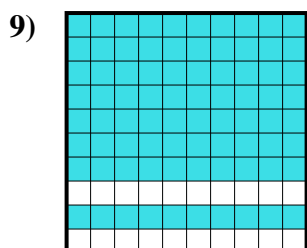
fraction _____
 decimal _____
 percent _____



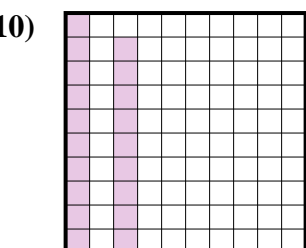
fraction _____
 decimal _____
 percent _____



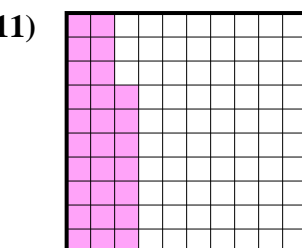
fraction _____
 decimal _____
 percent _____



fraction _____
 decimal _____
 percent _____



fraction _____
 decimal _____
 percent _____



fraction _____
 decimal _____
 percent _____

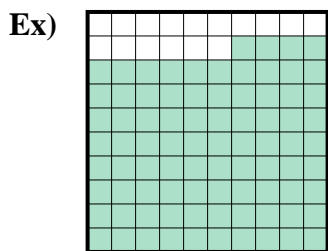
Answers

Ex. $\frac{84}{100}$ **0.84** **84%**

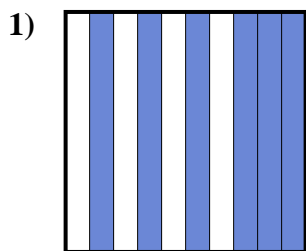
- 1. _____
- 2. _____
- 3. _____
- 4. _____
- 5. _____
- 6. _____
- 7. _____
- 8. _____
- 9. _____
- 10. _____
- 11. _____



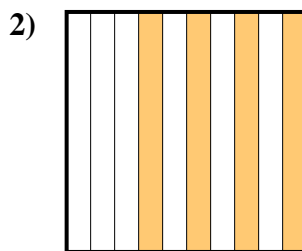
Determine the value written as a fraction , decimal & a percent.



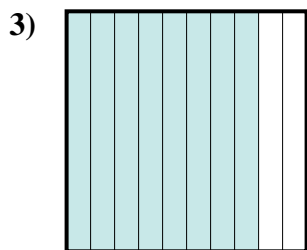
fraction $\frac{84}{100}$
 decimal 0.84
 percent 84




fraction $\frac{6}{10}$
 decimal 0.6
 percent 60



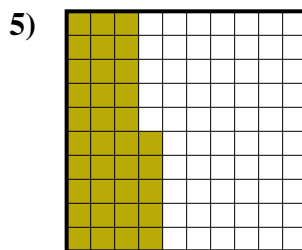
fraction $\frac{4}{10}$
 decimal 0.4
 percent 40



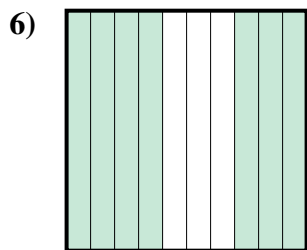
fraction $\frac{8}{10}$
 decimal 0.8
 percent 80



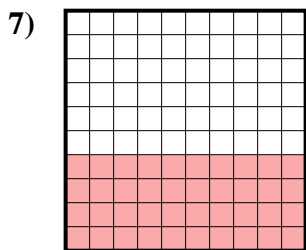
fraction $\frac{1}{10}$
 decimal 0.1
 percent 10



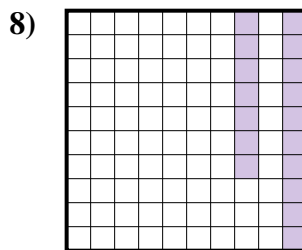
fraction $\frac{35}{100}$
 decimal 0.35
 percent 35



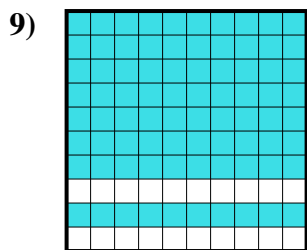
fraction $\frac{7}{10}$
 decimal 0.7
 percent 70



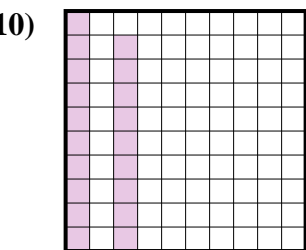
fraction $\frac{40}{100}$
 decimal 0.40
 percent 40



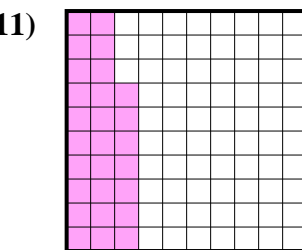
fraction $\frac{17}{100}$
 decimal 0.17
 percent 17



fraction $\frac{80}{100}$
 decimal 0.80
 percent 80



fraction $\frac{19}{100}$
 decimal 0.19
 percent 19



fraction $\frac{27}{100}$
 decimal 0.27
 percent 27

Answers

Ex.	$\frac{84}{100}$	0.84	84%
1.	$\frac{6}{10}$	0.6	60%
2.	$\frac{4}{10}$	0.4	40%
3.	$\frac{8}{10}$	0.8	80%
4.	$\frac{1}{10}$	0.1	10%
5.	$\frac{35}{100}$	0.35	35%
6.	$\frac{7}{10}$	0.7	70%
7.	$\frac{40}{100}$	0.40	40%
8.	$\frac{17}{100}$	0.17	17%
9.	$\frac{80}{100}$	0.80	80%
10.	$\frac{19}{100}$	0.19	19%
11.	$\frac{27}{100}$	0.27	27%