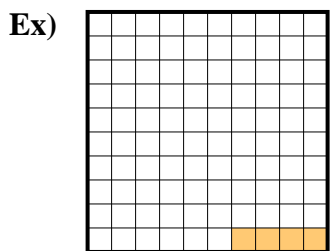
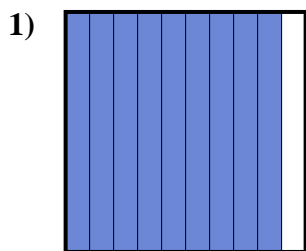




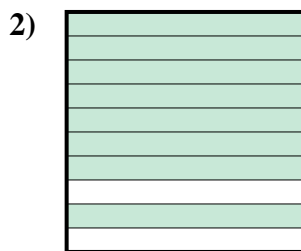
Determine the value written as a fraction , decimal & a percent.




fraction $\frac{4}{100}$
 decimal 0.04
 percent 4



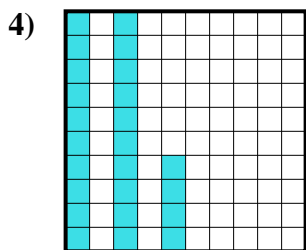
fraction $\frac{9}{10}$
 decimal 0.9
 percent 90



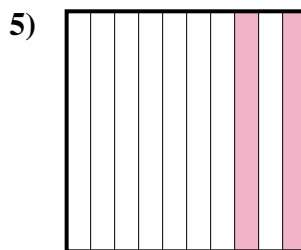
fraction $\frac{8}{10}$
 decimal 0.8
 percent 80



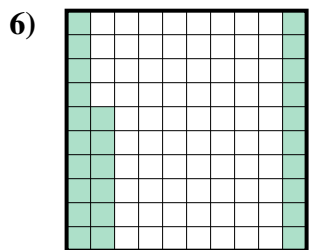
fraction $\frac{3}{10}$
 decimal 0.3
 percent 30



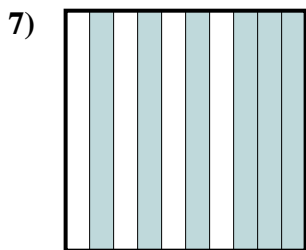
fraction $\frac{24}{100}$
 decimal 0.24
 percent 24



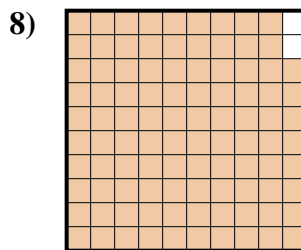
fraction $\frac{2}{10}$
 decimal 0.2
 percent 20



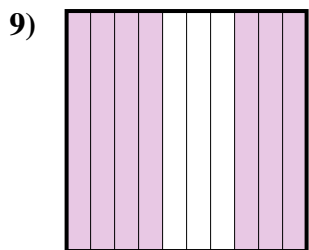
fraction $\frac{26}{100}$
 decimal 0.26
 percent 26



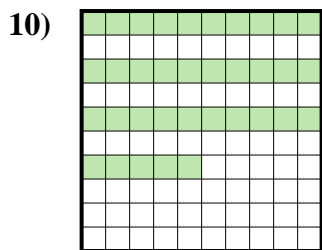
fraction $\frac{6}{10}$
 decimal 0.6
 percent 60



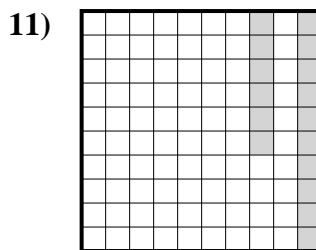
fraction $\frac{98}{100}$
 decimal 0.98
 percent 98



fraction $\frac{7}{10}$
 decimal 0.7
 percent 70



fraction $\frac{35}{100}$
 decimal 0.35
 percent 35



fraction $\frac{16}{100}$
 decimal 0.16
 percent 16

Answers

Ex.	$\frac{4}{100}$	0.04	4%
1.	$\frac{9}{10}$	0.9	90%
2.	$\frac{8}{10}$	0.8	80%
3.	$\frac{3}{10}$	0.3	30%
4.	$\frac{24}{100}$	0.24	24%
5.	$\frac{2}{10}$	0.2	20%
6.	$\frac{26}{100}$	0.26	26%
7.	$\frac{6}{10}$	0.6	60%
8.	$\frac{98}{100}$	0.98	98%
9.	$\frac{7}{10}$	0.7	70%
10.	$\frac{35}{100}$	0.35	35%
11.	$\frac{16}{100}$	0.16	16%