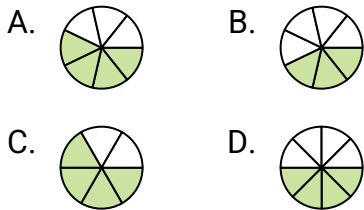
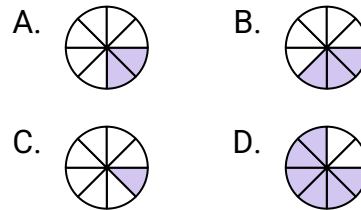


**Determine which choice best answers each question.****Answers**

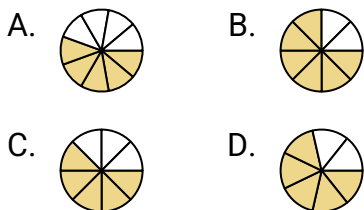
- 1) Which of the shapes below is shaded to represent  $\frac{4}{7}$ ?



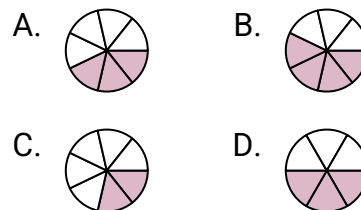
- 2) Which of the shapes below is shaded to represent  $\frac{2}{8}$ ?



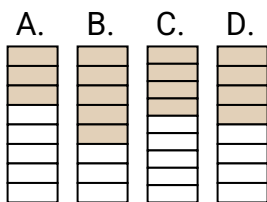
- 3) Which of the shapes below is shaded to represent  $\frac{5}{8}$ ?



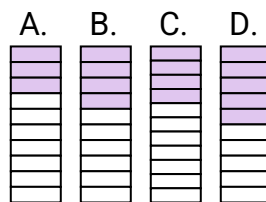
- 4) Which of the shapes below is shaded to represent  $\frac{3}{7}$ ?



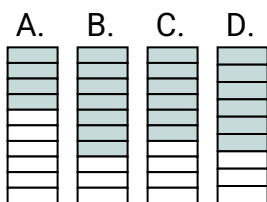
- 5) Which of the shapes below is shaded to represent  $\frac{4}{8}$ ?



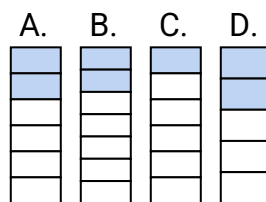
- 6) Which of the shapes below is shaded to represent  $\frac{4}{10}$ ?



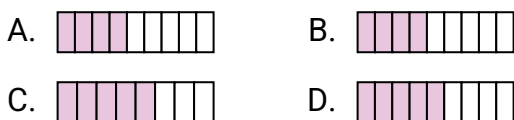
- 7) Which of the shapes below is shaded to represent  $\frac{6}{10}$ ?



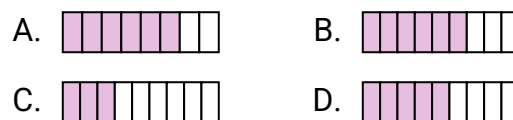
- 8) Which of the shapes below is shaded to represent  $\frac{2}{6}$ ?



- 9) Which of the shapes below is shaded to represent  $\frac{5}{9}$ ?



- 10) Which of the shapes below is shaded to represent  $\frac{6}{9}$ ?



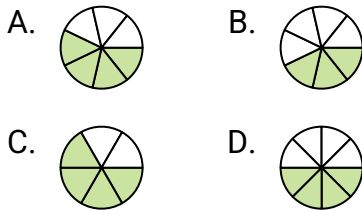
1. \_\_\_\_\_
2. \_\_\_\_\_
3. \_\_\_\_\_
4. \_\_\_\_\_
5. \_\_\_\_\_
6. \_\_\_\_\_
7. \_\_\_\_\_
8. \_\_\_\_\_
9. \_\_\_\_\_
10. \_\_\_\_\_



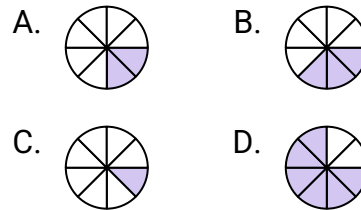
Determine which choice best answers each question.

**Answers**

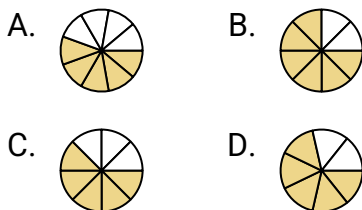
- 1) Which of the shapes below is shaded to represent  $\frac{4}{7}$ ?



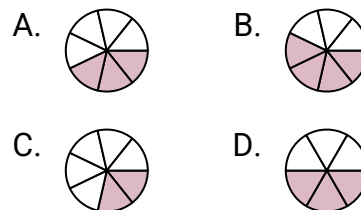
- 2) Which of the shapes below is shaded to represent  $\frac{2}{8}$ ?



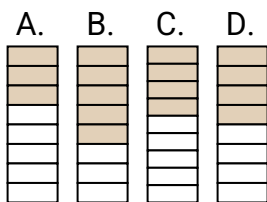
- 3) Which of the shapes below is shaded to represent  $\frac{5}{8}$ ?



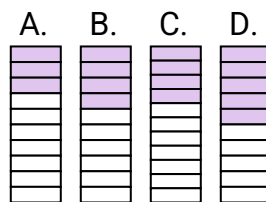
- 4) Which of the shapes below is shaded to represent  $\frac{3}{7}$ ?



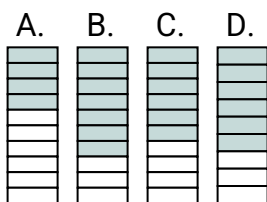
- 5) Which of the shapes below is shaded to represent  $\frac{4}{8}$ ?



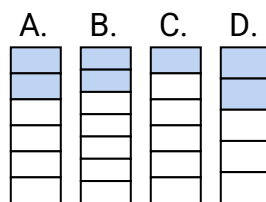
- 6) Which of the shapes below is shaded to represent  $\frac{4}{10}$ ?



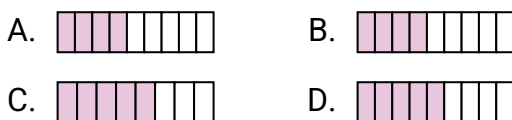
- 7) Which of the shapes below is shaded to represent  $\frac{6}{10}$ ?



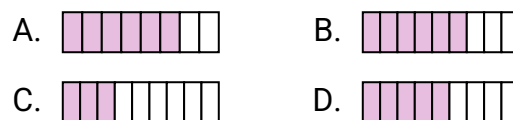
- 8) Which of the shapes below is shaded to represent  $\frac{2}{6}$ ?



- 9) Which of the shapes below is shaded to represent  $\frac{5}{9}$ ?



- 10) Which of the shapes below is shaded to represent  $\frac{6}{9}$ ?



1. **A**
2. **A**
3. **C**
4. **A**
5. **D**
6. **B**
7. **C**
8. **A**
9. **D**
10. **B**