

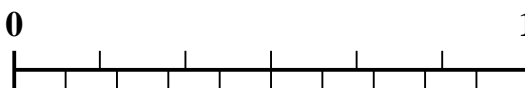


Use the number line to solve each problem.


1) Which amount is larger, $\frac{4}{10}$ or 0.58?



2) Which amount is larger, $\frac{2}{6}$ or 0.52?



3) Which amount is larger, $\frac{4}{5}$ or 0.65?




4) Which amount is larger, $\frac{6}{7}$ or 0.66?



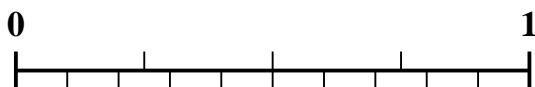
5) Which amount is larger, $\frac{6}{9}$ or 0.77?



6) Which amount is larger, $\frac{2}{3}$ or 0.8?



7) Which amount is larger, $\frac{2}{4}$ or 0.69?



8) Which amount is larger, $\frac{1}{4}$ or 0.35?



9) Which amount is larger, $\frac{6}{10}$ or 0.7?



10) Which amount is larger, $\frac{1}{2}$ or 0.32?



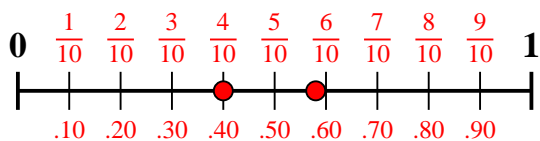
Answers

1. _____
2. _____
3. _____
4. _____
5. _____
6. _____
7. _____
8. _____
9. _____
10. _____

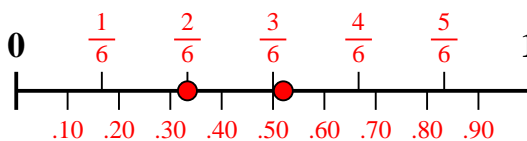


Use the number line to solve each problem.

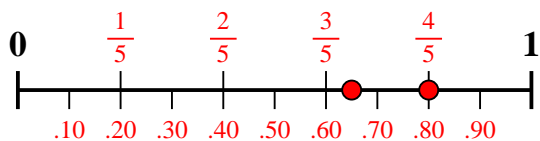
1) Which amount is larger, $\frac{4}{10}$ or 0.58?



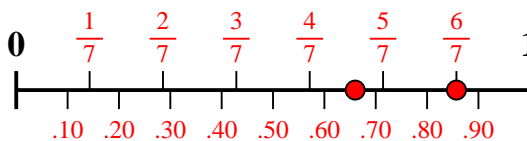
2) Which amount is larger, $\frac{2}{6}$ or 0.52?



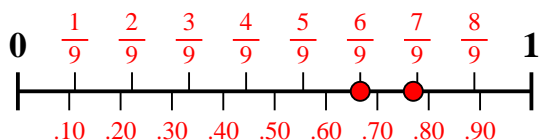
3) Which amount is larger, $\frac{4}{5}$ or 0.65?



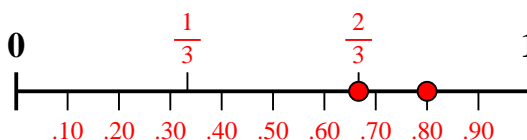
4) Which amount is larger, $\frac{6}{7}$ or 0.66?



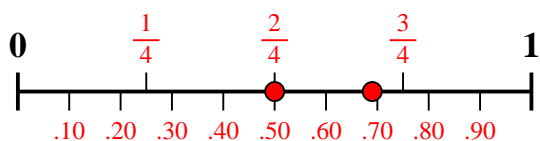
5) Which amount is larger, $\frac{6}{9}$ or 0.77?



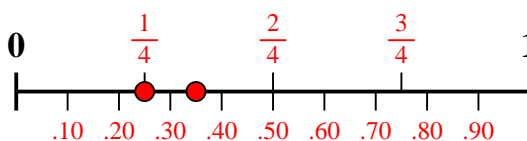
6) Which amount is larger, $\frac{2}{3}$ or 0.8?



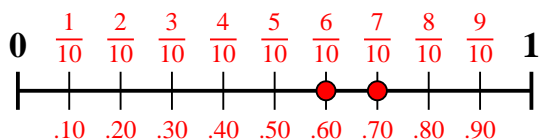
7) Which amount is larger, $\frac{2}{4}$ or 0.69?



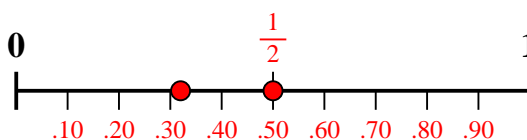
8) Which amount is larger, $\frac{1}{4}$ or 0.35?



9) Which amount is larger, $\frac{6}{10}$ or 0.7?



10) Which amount is larger, $\frac{1}{2}$ or 0.32?



Answers

1. 0.58
2. 0.52
3. $\frac{4}{5}$
4. $\frac{6}{7}$
5. 0.77
6. 0.8
7. 0.69
8. 0.35
9. 0.7
10. $\frac{1}{2}$