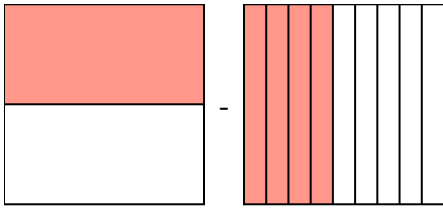


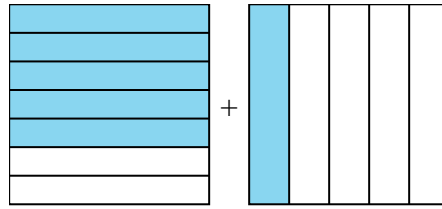


Solve each problem.

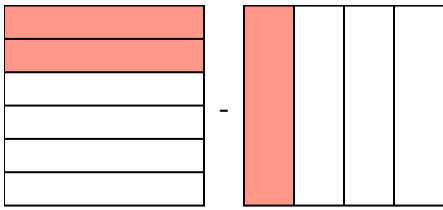
1)  $\frac{1}{2} - \frac{4}{9} =$



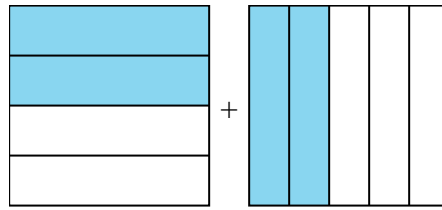
2)  $\frac{5}{7} + \frac{1}{5} =$



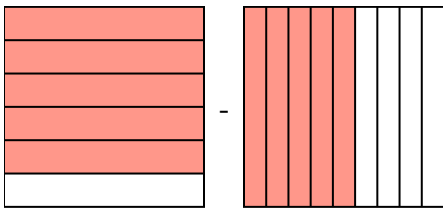
3)  $\frac{2}{6} - \frac{1}{4} =$



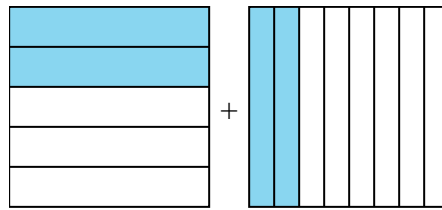
4)  $\frac{2}{4} + \frac{2}{5} =$



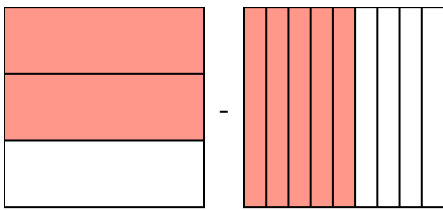
5)  $\frac{5}{6} - \frac{5}{9} =$



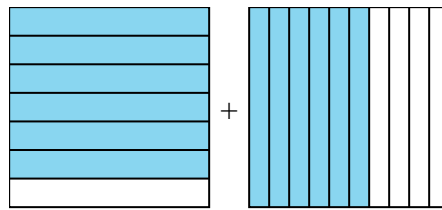
6)  $\frac{2}{5} + \frac{2}{8} =$



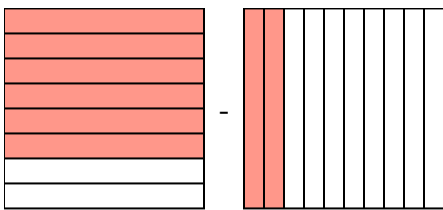
7)  $\frac{2}{3} - \frac{5}{9} =$



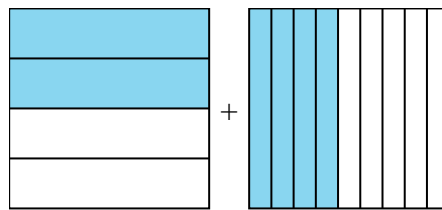
8)  $\frac{6}{7} + \frac{6}{10} =$



9)  $\frac{6}{8} - \frac{2}{10} =$



10)  $\frac{2}{4} + \frac{4}{9} =$



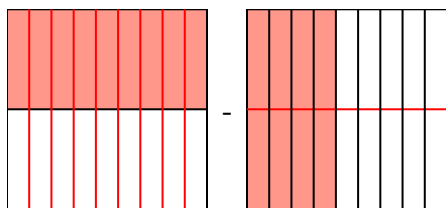
Answers

1. \_\_\_\_\_
2. \_\_\_\_\_
3. \_\_\_\_\_
4. \_\_\_\_\_
5. \_\_\_\_\_
6. \_\_\_\_\_
7. \_\_\_\_\_
8. \_\_\_\_\_
9. \_\_\_\_\_
10. \_\_\_\_\_

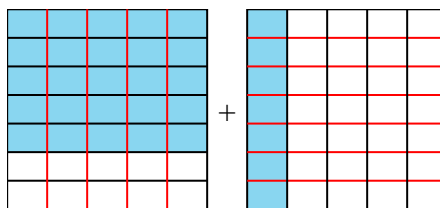


Solve each problem.

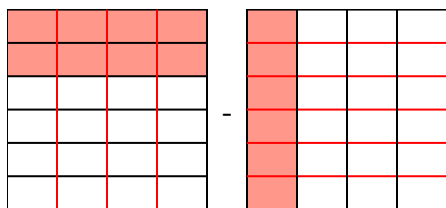
1)  $\frac{1}{2} - \frac{4}{9} = \frac{9}{18} - \frac{8}{18} = \frac{1}{18}$



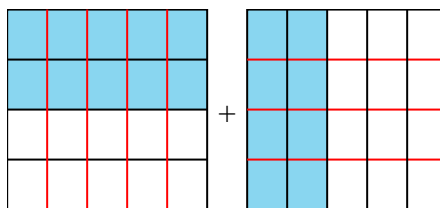
2)  $\frac{5}{7} + \frac{1}{5} = \frac{25}{35} + \frac{7}{35} = \frac{32}{35}$



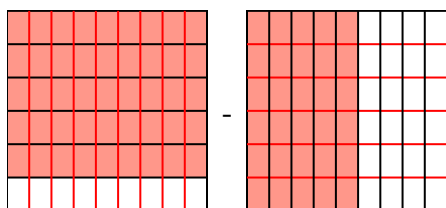
3)  $\frac{2}{6} - \frac{1}{4} = \frac{4}{12} - \frac{3}{12} = \frac{1}{12}$



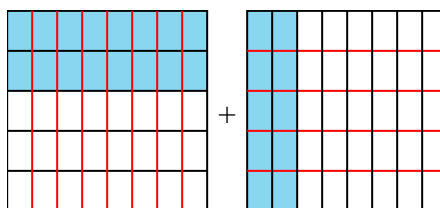
4)  $\frac{2}{4} + \frac{2}{5} = \frac{10}{20} + \frac{8}{20} = \frac{18}{20}$



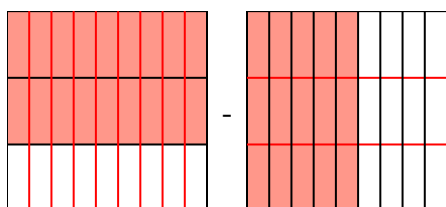
5)  $\frac{5}{6} - \frac{5}{9} = \frac{15}{18} - \frac{10}{18} = \frac{5}{18}$



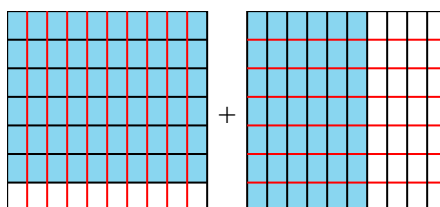
6)  $\frac{2}{5} + \frac{2}{8} = \frac{16}{40} + \frac{10}{40} = \frac{26}{40}$



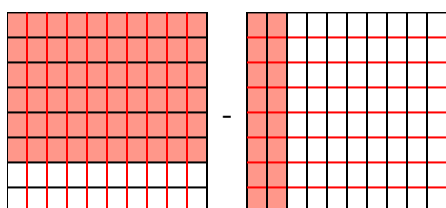
7)  $\frac{2}{3} - \frac{5}{9} = \frac{6}{9} - \frac{5}{9} = \frac{1}{9}$



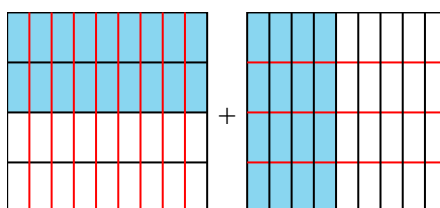
8)  $\frac{6}{7} + \frac{6}{10} = \frac{60}{70} + \frac{42}{70} = 1\frac{32}{70}$



9)  $\frac{6}{8} - \frac{2}{10} = \frac{30}{40} - \frac{8}{40} = \frac{22}{40}$



10)  $\frac{2}{4} + \frac{4}{9} = \frac{18}{36} + \frac{16}{36} = \frac{34}{36}$



Answers

1.  $\frac{1}{18}$

2.  $\frac{32}{35}$

3.  $\frac{1}{12}$

4.  $\frac{18}{20}$

5.  $\frac{5}{18}$

6.  $\frac{26}{40}$

7.  $\frac{1}{9}$

8.  $1\frac{32}{70}$

9.  $\frac{22}{40}$

10.  $\frac{34}{36}$