



Match each equation to the answer and write the answer.

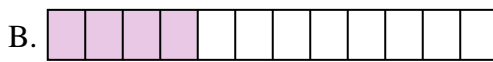
Answers

Ex) $\frac{1}{6} + \frac{1}{6} + \frac{1}{6}$




Ex. A

1) $\frac{1}{8} + \frac{1}{8} + \frac{1}{8} + \frac{1}{8}$



1. _____

2) $\frac{1}{6} + \frac{1}{6}$




2. _____

3) $\frac{1}{4} + \frac{1}{4}$




3. _____

4) $\frac{1}{12} + \frac{1}{12} + \frac{1}{12} + \frac{1}{12}$



4. _____

5) $\frac{1}{10} + \frac{1}{10} + \frac{1}{10}$




5. _____

6) $\frac{1}{10} + \frac{1}{10} + \frac{1}{10} + \frac{1}{10} + \frac{1}{10} + \frac{1}{10}$



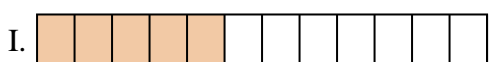
6. _____

7) $\frac{1}{3} + \frac{1}{3}$



7. _____

8) $\frac{1}{6} + \frac{1}{6} + \frac{1}{6} + \frac{1}{6} + \frac{1}{6}$



8. _____

9) $\frac{1}{5} + \frac{1}{5}$




9. _____

10) $\frac{1}{10} + \frac{1}{10}$



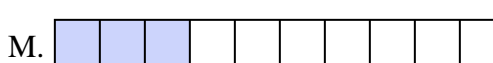
10. _____

11) $\frac{1}{10} + \frac{1}{10} + \frac{1}{10} + \frac{1}{10} + \frac{1}{10} + \frac{1}{10} + \frac{1}{10}$



11. _____

12) $\frac{1}{12} + \frac{1}{12} + \frac{1}{12} + \frac{1}{12} + \frac{1}{12}$



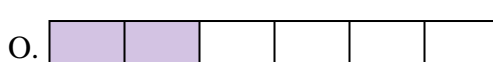
12. _____

13) $\frac{1}{4} + \frac{1}{4} + \frac{1}{4}$




13. _____

14) $\frac{1}{6} + \frac{1}{6} + \frac{1}{6} + \frac{1}{6}$



14. _____

15) $\frac{1}{5} + \frac{1}{5} + \frac{1}{5} + \frac{1}{5}$




15. _____



Match each equation to the answer and write the answer.

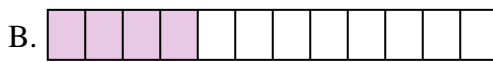
Ex) $\frac{1}{6} + \frac{1}{6} + \frac{1}{6}$



Answers


Ex. **A**

1) $\frac{1}{8} + \frac{1}{8} + \frac{1}{8} + \frac{1}{8}$



1. **L**

2) $\frac{1}{6} + \frac{1}{6}$




2. **O**

3) $\frac{1}{4} + \frac{1}{4}$



3. **P**

4) $\frac{1}{12} + \frac{1}{12} + \frac{1}{12} + \frac{1}{12}$



4. **B**

5) $\frac{1}{10} + \frac{1}{10} + \frac{1}{10}$



5. **M**

6) $\frac{1}{10} + \frac{1}{10} + \frac{1}{10} + \frac{1}{10} + \frac{1}{10} + \frac{1}{10}$



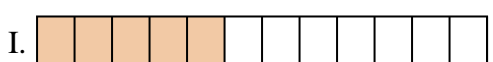
6. **G**

7) $\frac{1}{3} + \frac{1}{3}$



7. **F**

8) $\frac{1}{6} + \frac{1}{6} + \frac{1}{6} + \frac{1}{6} + \frac{1}{6}$



8. **N**

9) $\frac{1}{5} + \frac{1}{5}$




9. **D**

10) $\frac{1}{10} + \frac{1}{10}$



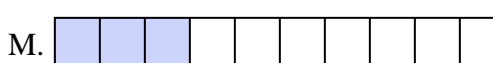
10. **J**

11) $\frac{1}{10} + \frac{1}{10} + \frac{1}{10} + \frac{1}{10} + \frac{1}{10} + \frac{1}{10} + \frac{1}{10}$




11. **E**

12) $\frac{1}{12} + \frac{1}{12} + \frac{1}{12} + \frac{1}{12} + \frac{1}{12}$



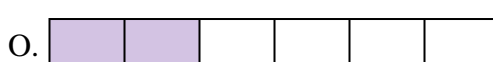
12. **I**

13) $\frac{1}{4} + \frac{1}{4} + \frac{1}{4}$




13. **K**

14) $\frac{1}{6} + \frac{1}{6} + \frac{1}{6} + \frac{1}{6}$



14. **H**

15) $\frac{1}{5} + \frac{1}{5} + \frac{1}{5} + \frac{1}{5}$




15. **C**



Match each equation to the answer and write the answer.

Answers

Ex) $\frac{1}{5} + \frac{1}{5}$



Ex. **G**

1) $\frac{1}{10} + \frac{1}{10}$



1. _____

2) $\frac{1}{5} + \frac{1}{5} + \frac{1}{5}$



2. _____

3) $\frac{1}{3} + \frac{1}{3}$



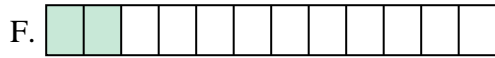
3. _____

4) $\frac{1}{12} + \frac{1}{12}$



4. _____

5) $\frac{1}{12} + \frac{1}{12} + \frac{1}{12} + \frac{1}{12}$



5. _____

6) $\frac{1}{4} + \frac{1}{4}$



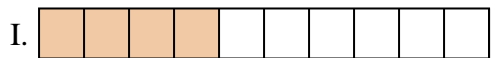
6. _____

7) $\frac{1}{6} + \frac{1}{6}$



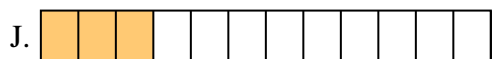
7. _____

8) $\frac{1}{4} + \frac{1}{4} + \frac{1}{4}$



8. _____

9) $\frac{1}{10} + \frac{1}{10} + \frac{1}{10} + \frac{1}{10}$



9. _____

10) $\frac{1}{6} + \frac{1}{6} + \frac{1}{6} + \frac{1}{6} + \frac{1}{6}$



10. _____

11) $\frac{1}{8} + \frac{1}{8} + \frac{1}{8} + \frac{1}{8}$




11. _____

12) $\frac{1}{12} + \frac{1}{12} + \frac{1}{12}$




12. _____

13) $\frac{1}{8} + \frac{1}{8}$




13. _____

14) $\frac{1}{6} + \frac{1}{6} + \frac{1}{6} + \frac{1}{6}$



14. _____

15) $\frac{1}{8} + \frac{1}{8} + \frac{1}{8} + \frac{1}{8} + \frac{1}{8}$



15. _____

16. _____

17. _____

18. _____

19. _____

20. _____

21. _____

22. _____

23. _____

24. _____

25. _____

26. _____

27. _____

28. _____

29. _____

30. _____

31. _____

32. _____

33. _____

34. _____

35. _____




Match each equation to the answer and write the answer.

Ex) $\frac{1}{5} + \frac{1}{5}$



Ex. **G**

1) $\frac{1}{10} + \frac{1}{10}$



1. **E**

2) $\frac{1}{5} + \frac{1}{5} + \frac{1}{5}$




2. **O**

3) $\frac{1}{3} + \frac{1}{3}$



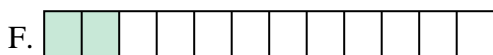
3. **K**

4) $\frac{1}{12} + \frac{1}{12}$



4. **F**

5) $\frac{1}{12} + \frac{1}{12} + \frac{1}{12} + \frac{1}{12}$



6. **D**

6) $\frac{1}{4} + \frac{1}{4}$




7. **A**

7) $\frac{1}{6} + \frac{1}{6}$



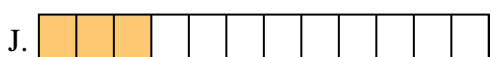
8. **P**

8) $\frac{1}{4} + \frac{1}{4} + \frac{1}{4}$



9. **I**

9) $\frac{1}{10} + \frac{1}{10} + \frac{1}{10} + \frac{1}{10}$




10. **B**

10) $\frac{1}{6} + \frac{1}{6} + \frac{1}{6} + \frac{1}{6} + \frac{1}{6}$



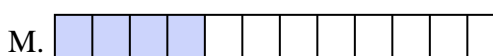
11. **C**

11) $\frac{1}{8} + \frac{1}{8} + \frac{1}{8} + \frac{1}{8}$




12. **J**

12) $\frac{1}{12} + \frac{1}{12} + \frac{1}{12}$




13. **N**

13) $\frac{1}{8} + \frac{1}{8}$




14. **L**

14) $\frac{1}{6} + \frac{1}{6} + \frac{1}{6} + \frac{1}{6}$



15. **H**

15) $\frac{1}{8} + \frac{1}{8} + \frac{1}{8} + \frac{1}{8} + \frac{1}{8}$



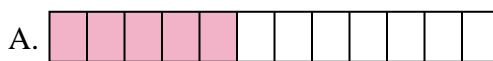
Answers



Match each equation to the answer and write the answer.

Answers

Ex) $\frac{1}{10} + \frac{1}{10} + \frac{1}{10} + \frac{1}{10} + \frac{1}{10} + \frac{1}{10} + \frac{1}{10}$



Ex. **H**

1) $\frac{1}{12} + \frac{1}{12} + \frac{1}{12} + \frac{1}{12}$



1. _____

2) $\frac{1}{5} + \frac{1}{5} + \frac{1}{5} + \frac{1}{5}$




2. _____

3) $\frac{1}{6} + \frac{1}{6} + \frac{1}{6}$



3. _____

4) $\frac{1}{8} + \frac{1}{8} + \frac{1}{8} + \frac{1}{8}$



5. _____

5) $\frac{1}{4} + \frac{1}{4}$



6. _____

6) $\frac{1}{5} + \frac{1}{5} + \frac{1}{5}$




7. _____

7) $\frac{1}{8} + \frac{1}{8} + \frac{1}{8} + \frac{1}{8} + \frac{1}{8}$



8. _____

8) $\frac{1}{3} + \frac{1}{3}$



10. _____

9) $\frac{1}{5} + \frac{1}{5}$




11. _____

10) $\frac{1}{12} + \frac{1}{12}$




12. _____

11) $\frac{1}{8} + \frac{1}{8}$



13. _____

12) $\frac{1}{10} + \frac{1}{10} + \frac{1}{10}$




14. _____

13) $\frac{1}{4} + \frac{1}{4} + \frac{1}{4}$




15. _____

14) $\frac{1}{12} + \frac{1}{12} + \frac{1}{12} + \frac{1}{12} + \frac{1}{12}$



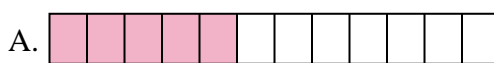
15) $\frac{1}{6} + \frac{1}{6} + \frac{1}{6} + \frac{1}{6} + \frac{1}{6}$





Match each equation to the answer and write the answer.

Ex) $\frac{1}{10} + \frac{1}{10} + \frac{1}{10} + \frac{1}{10} + \frac{1}{10} + \frac{1}{10} + \frac{1}{10}$



1) $\frac{1}{12} + \frac{1}{12} + \frac{1}{12} + \frac{1}{12}$




2) $\frac{1}{5} + \frac{1}{5} + \frac{1}{5} + \frac{1}{5}$



3) $\frac{1}{6} + \frac{1}{6} + \frac{1}{6}$



4) $\frac{1}{8} + \frac{1}{8} + \frac{1}{8} + \frac{1}{8}$



5) $\frac{1}{4} + \frac{1}{4}$




6) $\frac{1}{5} + \frac{1}{5} + \frac{1}{5}$



7) $\frac{1}{8} + \frac{1}{8} + \frac{1}{8} + \frac{1}{8} + \frac{1}{8}$



8) $\frac{1}{3} + \frac{1}{3}$



9) $\frac{1}{5} + \frac{1}{5}$




10) $\frac{1}{12} + \frac{1}{12}$



11) $\frac{1}{8} + \frac{1}{8}$




12) $\frac{1}{10} + \frac{1}{10} + \frac{1}{10}$




13) $\frac{1}{4} + \frac{1}{4} + \frac{1}{4}$



14) $\frac{1}{12} + \frac{1}{12} + \frac{1}{12} + \frac{1}{12} + \frac{1}{12}$



15) $\frac{1}{6} + \frac{1}{6} + \frac{1}{6} + \frac{1}{6} + \frac{1}{6}$



Answers

Ex. **H**

1. **G**

2. **M**

3. **J**

4. **O**

5. **L**

6. **P**

7. **C**

8. **F**

9. **K**

10. **D**

11. **I**

12. **B**

13. **N**

14. **A**

15. **E**



Match each equation to the answer and write the answer.

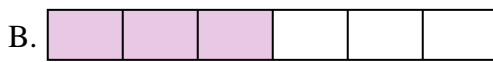
Answers

Ex) $\frac{1}{4} + \frac{1}{4}$



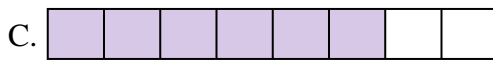
Ex. **I**

1) $\frac{1}{10} + \frac{1}{10} + \frac{1}{10} + \frac{1}{10} + \frac{1}{10} + \frac{1}{10} + \frac{1}{10}$



1. _____

2) $\frac{1}{5} + \frac{1}{5}$



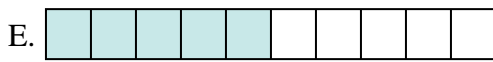
2. _____

3) $\frac{1}{5} + \frac{1}{5} + \frac{1}{5}$



3. _____

4) $\frac{1}{8} + \frac{1}{8}$



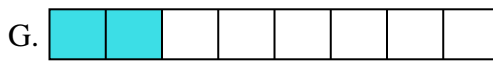
5. _____

5) $\frac{1}{10} + \frac{1}{10} + \frac{1}{10} + \frac{1}{10} + \frac{1}{10}$



6. _____

6) $\frac{1}{3} + \frac{1}{3}$



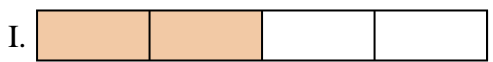
7. _____

7) $\frac{1}{10} + \frac{1}{10} + \frac{1}{10} + \frac{1}{10}$




8. _____

8) $\frac{1}{4} + \frac{1}{4} + \frac{1}{4}$




9. _____

9) $\frac{1}{12} + \frac{1}{12}$




10. _____

10) $\frac{1}{8} + \frac{1}{8} + \frac{1}{8} + \frac{1}{8} + \frac{1}{8} + \frac{1}{8}$




11. _____

11) $\frac{1}{12} + \frac{1}{12} + \frac{1}{12} + \frac{1}{12}$



12. _____

12) $\frac{1}{6} + \frac{1}{6} + \frac{1}{6}$




13. _____

13) $\frac{1}{5} + \frac{1}{5} + \frac{1}{5} + \frac{1}{5}$




14. _____

14) $\frac{1}{8} + \frac{1}{8} + \frac{1}{8} + \frac{1}{8}$



15. _____


15) $\frac{1}{10} + \frac{1}{10} + \frac{1}{10}$





Match each equation to the answer and write the answer.

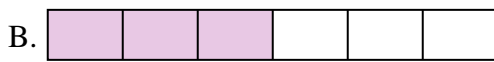
Ex) $\frac{1}{4} + \frac{1}{4}$



Answers

Ex. I

1) $\frac{1}{10} + \frac{1}{10} + \frac{1}{10} + \frac{1}{10} + \frac{1}{10} + \frac{1}{10} + \frac{1}{10}$



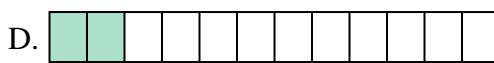
1. L

2) $\frac{1}{5} + \frac{1}{5}$




2. K

3) $\frac{1}{5} + \frac{1}{5} + \frac{1}{5}$




3. M

4) $\frac{1}{8} + \frac{1}{8}$




4. G

5) $\frac{1}{10} + \frac{1}{10} + \frac{1}{10} + \frac{1}{10} + \frac{1}{10}$



5. E

6) $\frac{1}{3} + \frac{1}{3}$




6. N

7) $\frac{1}{10} + \frac{1}{10} + \frac{1}{10} + \frac{1}{10}$



7. J

8) $\frac{1}{4} + \frac{1}{4} + \frac{1}{4}$



8. A

9) $\frac{1}{12} + \frac{1}{12}$



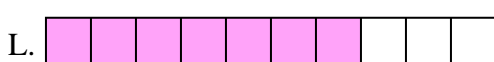
9. D

10) $\frac{1}{8} + \frac{1}{8} + \frac{1}{8} + \frac{1}{8} + \frac{1}{8} + \frac{1}{8}$




10. C

11) $\frac{1}{12} + \frac{1}{12} + \frac{1}{12} + \frac{1}{12}$



11. H

12) $\frac{1}{6} + \frac{1}{6} + \frac{1}{6}$




12. B

13) $\frac{1}{5} + \frac{1}{5} + \frac{1}{5} + \frac{1}{5}$




13. P

14) $\frac{1}{8} + \frac{1}{8} + \frac{1}{8} + \frac{1}{8}$



14. O

15) $\frac{1}{10} + \frac{1}{10} + \frac{1}{10}$




15. F



Match each equation to the answer and write the answer.

Answers

Ex) $\frac{1}{12} + \frac{1}{12} + \frac{1}{12}$



Ex. **N**

1) $\frac{1}{6} + \frac{1}{6} + \frac{1}{6} + \frac{1}{6} + \frac{1}{6}$




1. _____

2) $\frac{1}{8} + \frac{1}{8} + \frac{1}{8} + \frac{1}{8} + \frac{1}{8}$




2. _____

3) $\frac{1}{5} + \frac{1}{5}$




3. _____

4) $\frac{1}{3} + \frac{1}{3}$



4. _____

5) $\frac{1}{10} + \frac{1}{10} + \frac{1}{10} + \frac{1}{10} + \frac{1}{10} + \frac{1}{10} + \frac{1}{10} + \frac{1}{10}$



5. _____

6) $\frac{1}{5} + \frac{1}{5} + \frac{1}{5} + \frac{1}{5}$




6. _____

7) $\frac{1}{4} + \frac{1}{4}$



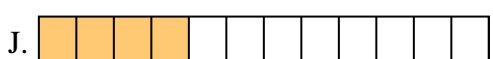
7. _____

8) $\frac{1}{6} + \frac{1}{6}$



8. _____

9) $\frac{1}{10} + \frac{1}{10} + \frac{1}{10} + \frac{1}{10} + \frac{1}{10}$




9. _____

10) $\frac{1}{6} + \frac{1}{6} + \frac{1}{6}$



10. _____

11) $\frac{1}{8} + \frac{1}{8} + \frac{1}{8}$



11. _____

12) $\frac{1}{12} + \frac{1}{12} + \frac{1}{12} + \frac{1}{12}$



12. _____

13) $\frac{1}{6} + \frac{1}{6} + \frac{1}{6} + \frac{1}{6}$




13. _____

14) $\frac{1}{10} + \frac{1}{10}$



14. _____

15) $\frac{1}{12} + \frac{1}{12} + \frac{1}{12} + \frac{1}{12} + \frac{1}{12} + \frac{1}{12} + \frac{1}{12}$




15. _____



Match each equation to the answer and write the answer.


Ex) $\frac{1}{12} + \frac{1}{12} + \frac{1}{12}$



Answers


Ex. N

1) $\frac{1}{6} + \frac{1}{6} + \frac{1}{6} + \frac{1}{6} + \frac{1}{6}$




1. I

2) $\frac{1}{8} + \frac{1}{8} + \frac{1}{8} + \frac{1}{8} + \frac{1}{8}$




2. C

3) $\frac{1}{5} + \frac{1}{5}$




3. D

4) $\frac{1}{3} + \frac{1}{3}$



4. M

5) $\frac{1}{10} + \frac{1}{10} + \frac{1}{10} + \frac{1}{10} + \frac{1}{10} + \frac{1}{10} + \frac{1}{10} + \frac{1}{10}$



5. F

6) $\frac{1}{5} + \frac{1}{5} + \frac{1}{5} + \frac{1}{5}$




6. A

7) $\frac{1}{4} + \frac{1}{4}$



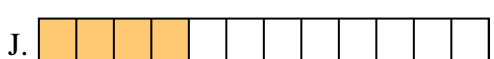
7. E

8) $\frac{1}{6} + \frac{1}{6}$



8. B

9) $\frac{1}{10} + \frac{1}{10} + \frac{1}{10} + \frac{1}{10} + \frac{1}{10}$




9. P

10) $\frac{1}{6} + \frac{1}{6} + \frac{1}{6}$



10. G

11) $\frac{1}{8} + \frac{1}{8} + \frac{1}{8}$



11. L

12) $\frac{1}{12} + \frac{1}{12} + \frac{1}{12} + \frac{1}{12}$



12. J

13) $\frac{1}{6} + \frac{1}{6} + \frac{1}{6} + \frac{1}{6}$




13. K

14) $\frac{1}{10} + \frac{1}{10}$



14. O

15) $\frac{1}{12} + \frac{1}{12} + \frac{1}{12} + \frac{1}{12} + \frac{1}{12} + \frac{1}{12} + \frac{1}{12}$




15. H



Match each equation to the answer and write the answer.

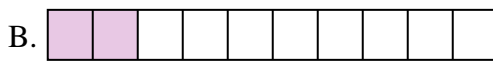
Answers

Ex) $\frac{1}{4} + \frac{1}{4} + \frac{1}{4}$



Ex. **N**

1) $\frac{1}{8} + \frac{1}{8} + \frac{1}{8} + \frac{1}{8} + \frac{1}{8} + \frac{1}{8} + \frac{1}{8}$



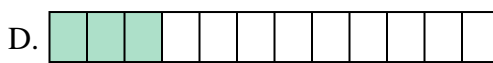
1. _____

2) $\frac{1}{10} + \frac{1}{10} + \frac{1}{10}$




2. _____

3) $\frac{1}{6} + \frac{1}{6} + \frac{1}{6} + \frac{1}{6}$




3. _____

4) $\frac{1}{10} + \frac{1}{10} + \frac{1}{10} + \frac{1}{10} + \frac{1}{10} + \frac{1}{10} + \frac{1}{10}$



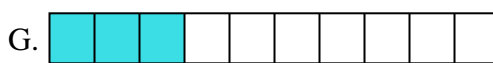
5. _____

5) $\frac{1}{8} + \frac{1}{8} + \frac{1}{8}$




6. _____

6) $\frac{1}{12} + \frac{1}{12} + \frac{1}{12} + \frac{1}{12} + \frac{1}{12} + \frac{1}{12}$




7. _____

7) $\frac{1}{5} + \frac{1}{5} + \frac{1}{5}$




8. _____

8) $\frac{1}{3} + \frac{1}{3}$



9. _____

9) $\frac{1}{5} + \frac{1}{5} + \frac{1}{5} + \frac{1}{5}$




10. _____

10) $\frac{1}{12} + \frac{1}{12} + \frac{1}{12}$



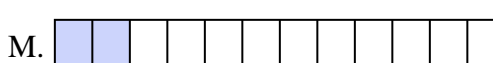
11. _____

11) $\frac{1}{10} + \frac{1}{10} + \frac{1}{10} + \frac{1}{10} + \frac{1}{10} + \frac{1}{10}$



12. _____

12) $\frac{1}{12} + \frac{1}{12}$



13. _____

13) $\frac{1}{10} + \frac{1}{10}$



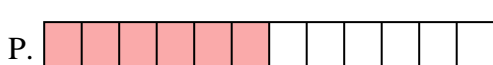
14. _____

14) $\frac{1}{6} + \frac{1}{6} + \frac{1}{6}$



15. _____

15) $\frac{1}{8} + \frac{1}{8} + \frac{1}{8} + \frac{1}{8} + \frac{1}{8} + \frac{1}{8}$






Match each equation to the answer and write the answer.

Answers

Ex) $\frac{1}{4} + \frac{1}{4} + \frac{1}{4}$



Ex. **N**

1) $\frac{1}{8} + \frac{1}{8} + \frac{1}{8} + \frac{1}{8} + \frac{1}{8} + \frac{1}{8} + \frac{1}{8}$



1. **J**

2) $\frac{1}{10} + \frac{1}{10} + \frac{1}{10}$



2. **G**

3) $\frac{1}{6} + \frac{1}{6} + \frac{1}{6} + \frac{1}{6}$




3. **E**

4) $\frac{1}{10} + \frac{1}{10} + \frac{1}{10} + \frac{1}{10} + \frac{1}{10} + \frac{1}{10} + \frac{1}{10}$



5. **O**

5) $\frac{1}{8} + \frac{1}{8} + \frac{1}{8}$



6. **P**

6) $\frac{1}{12} + \frac{1}{12} + \frac{1}{12} + \frac{1}{12} + \frac{1}{12} + \frac{1}{12}$



7. **H**

7) $\frac{1}{5} + \frac{1}{5} + \frac{1}{5}$



8. **C**

8) $\frac{1}{3} + \frac{1}{3}$



9. **F**

9) $\frac{1}{5} + \frac{1}{5} + \frac{1}{5} + \frac{1}{5}$



10. **D**

10) $\frac{1}{12} + \frac{1}{12} + \frac{1}{12}$



11. **I**

11) $\frac{1}{10} + \frac{1}{10} + \frac{1}{10} + \frac{1}{10} + \frac{1}{10} + \frac{1}{10}$



12. **M**

12) $\frac{1}{12} + \frac{1}{12}$




13. **B**

13) $\frac{1}{10} + \frac{1}{10}$



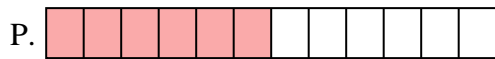
14. **L**

14) $\frac{1}{6} + \frac{1}{6} + \frac{1}{6}$



15. **A**

15) $\frac{1}{8} + \frac{1}{8} + \frac{1}{8} + \frac{1}{8} + \frac{1}{8} + \frac{1}{8}$






Match each equation to the answer and write the answer.


Answers

Ex) $\frac{1}{10} + \frac{1}{10}$




Ex. **G**

1) $\frac{1}{5} + \frac{1}{5} + \frac{1}{5}$




1. _____

2) $\frac{1}{10} + \frac{1}{10} + \frac{1}{10} + \frac{1}{10} + \frac{1}{10} + \frac{1}{10}$




2. _____

3) $\frac{1}{8} + \frac{1}{8} + \frac{1}{8}$




3. _____

4) $\frac{1}{6} + \frac{1}{6} + \frac{1}{6} + \frac{1}{6} + \frac{1}{6}$



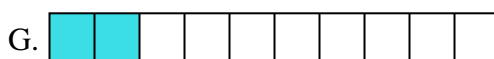
4. _____

5) $\frac{1}{4} + \frac{1}{4}$



6. _____

6) $\frac{1}{3} + \frac{1}{3}$




7. _____

7) $\frac{1}{12} + \frac{1}{12} + \frac{1}{12} + \frac{1}{12} + \frac{1}{12}$



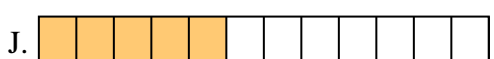
8. _____

8) $\frac{1}{10} + \frac{1}{10} + \frac{1}{10} + \frac{1}{10} + \frac{1}{10} + \frac{1}{10} + \frac{1}{10}$



9. _____

9) $\frac{1}{8} + \frac{1}{8}$



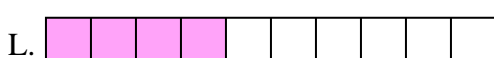
10. _____

10) $\frac{1}{10} + \frac{1}{10} + \frac{1}{10} + \frac{1}{10}$




11. _____

11) $\frac{1}{10} + \frac{1}{10} + \frac{1}{10} + \frac{1}{10} + \frac{1}{10}$



12. _____

12) $\frac{1}{5} + \frac{1}{5} + \frac{1}{5} + \frac{1}{5}$



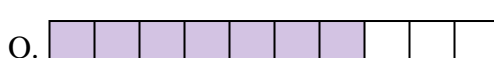
13. _____

13) $\frac{1}{4} + \frac{1}{4} + \frac{1}{4}$




14. _____

14) $\frac{1}{6} + \frac{1}{6} + \frac{1}{6} + \frac{1}{6}$



15. _____

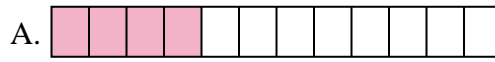
15) $\frac{1}{12} + \frac{1}{12} + \frac{1}{12} + \frac{1}{12}$





Match each equation to the answer and write the answer.

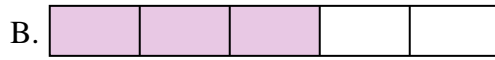
Ex) $\frac{1}{10} + \frac{1}{10}$



Answers


Ex. **G**

1) $\frac{1}{5} + \frac{1}{5} + \frac{1}{5}$



1. **B**

2) $\frac{1}{10} + \frac{1}{10} + \frac{1}{10} + \frac{1}{10} + \frac{1}{10} + \frac{1}{10}$




2. **E**

3) $\frac{1}{8} + \frac{1}{8} + \frac{1}{8}$



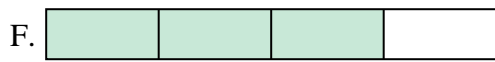
3. **N**

4) $\frac{1}{6} + \frac{1}{6} + \frac{1}{6} + \frac{1}{6} + \frac{1}{6}$



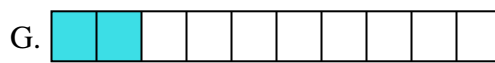
4. **I**

5) $\frac{1}{4} + \frac{1}{4}$




5. **C**

6) $\frac{1}{3} + \frac{1}{3}$



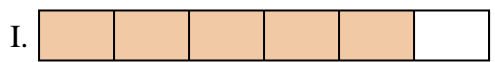
6. **H**

7) $\frac{1}{12} + \frac{1}{12} + \frac{1}{12} + \frac{1}{12} + \frac{1}{12}$



7. **J**

8) $\frac{1}{10} + \frac{1}{10} + \frac{1}{10} + \frac{1}{10} + \frac{1}{10} + \frac{1}{10} + \frac{1}{10}$




8. **O**

9) $\frac{1}{8} + \frac{1}{8}$



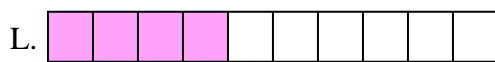
9. **K**

10) $\frac{1}{10} + \frac{1}{10} + \frac{1}{10} + \frac{1}{10}$



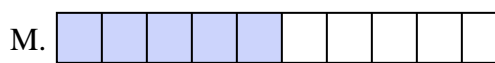
10. **L**

11) $\frac{1}{10} + \frac{1}{10} + \frac{1}{10} + \frac{1}{10} + \frac{1}{10}$



11. **M**

12) $\frac{1}{5} + \frac{1}{5} + \frac{1}{5} + \frac{1}{5}$



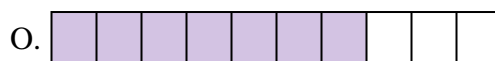
12. **D**

13) $\frac{1}{4} + \frac{1}{4} + \frac{1}{4}$




13. **F**

14) $\frac{1}{6} + \frac{1}{6} + \frac{1}{6} + \frac{1}{6}$



14. **P**

15) $\frac{1}{12} + \frac{1}{12} + \frac{1}{12} + \frac{1}{12}$



15. **A**



Match each equation to the answer and write the answer.


Answers

Ex) $\frac{1}{5} + \frac{1}{5}$



Ex. E

1) $\frac{1}{10} + \frac{1}{10} + \frac{1}{10} + \frac{1}{10} + \frac{1}{10} + \frac{1}{10} + \frac{1}{10}$



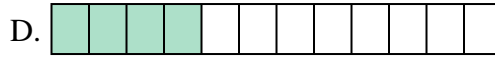
1. _____

2) $\frac{1}{12} + \frac{1}{12} + \frac{1}{12} + \frac{1}{12}$



2. _____

3) $\frac{1}{6} + \frac{1}{6}$




3. _____

4) $\frac{1}{8} + \frac{1}{8} + \frac{1}{8} + \frac{1}{8} + \frac{1}{8} + \frac{1}{8} + \frac{1}{8}$



4. _____

5) $\frac{1}{10} + \frac{1}{10} + \frac{1}{10} + \frac{1}{10} + \frac{1}{10} + \frac{1}{10}$



6. _____

6) $\frac{1}{5} + \frac{1}{5} + \frac{1}{5} + \frac{1}{5}$




7. _____

7) $\frac{1}{10} + \frac{1}{10} + \frac{1}{10} + \frac{1}{10}$



8. _____

8) $\frac{1}{4} + \frac{1}{4}$



9. _____

9) $\frac{1}{3} + \frac{1}{3}$




10. _____

10) $\frac{1}{8} + \frac{1}{8} + \frac{1}{8} + \frac{1}{8} + \frac{1}{8}$



11. _____

11) $\frac{1}{4} + \frac{1}{4} + \frac{1}{4}$




12. _____

12) $\frac{1}{10} + \frac{1}{10} + \frac{1}{10} + \frac{1}{10} + \frac{1}{10}$



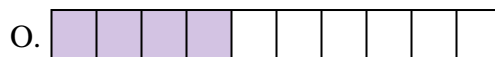
13. _____

13) $\frac{1}{8} + \frac{1}{8} + \frac{1}{8}$




14. _____

14) $\frac{1}{8} + \frac{1}{8} + \frac{1}{8} + \frac{1}{8} + \frac{1}{8} + \frac{1}{8}$



15. _____


15) $\frac{1}{8} + \frac{1}{8} + \frac{1}{8} + \frac{1}{8}$





Match each equation to the answer and write the answer.


Ex) $\frac{1}{5} + \frac{1}{5}$



Answers


Ex. E

1) $\frac{1}{10} + \frac{1}{10} + \frac{1}{10} + \frac{1}{10} + \frac{1}{10} + \frac{1}{10} + \frac{1}{10}$



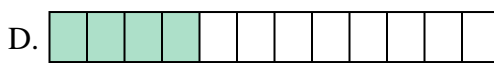
1. K

2) $\frac{1}{12} + \frac{1}{12} + \frac{1}{12} + \frac{1}{12}$



2. D

3) $\frac{1}{6} + \frac{1}{6}$




3. B

4) $\frac{1}{8} + \frac{1}{8} + \frac{1}{8} + \frac{1}{8} + \frac{1}{8} + \frac{1}{8} + \frac{1}{8}$




4. G

5) $\frac{1}{10} + \frac{1}{10} + \frac{1}{10} + \frac{1}{10} + \frac{1}{10} + \frac{1}{10}$




5. P

6) $\frac{1}{5} + \frac{1}{5} + \frac{1}{5} + \frac{1}{5}$




6. A

7) $\frac{1}{10} + \frac{1}{10} + \frac{1}{10} + \frac{1}{10}$



7. O

8) $\frac{1}{4} + \frac{1}{4}$



8. M

9) $\frac{1}{3} + \frac{1}{3}$




9. J

10) $\frac{1}{8} + \frac{1}{8} + \frac{1}{8} + \frac{1}{8} + \frac{1}{8}$



10. H

11) $\frac{1}{4} + \frac{1}{4} + \frac{1}{4}$



11. L

12) $\frac{1}{10} + \frac{1}{10} + \frac{1}{10} + \frac{1}{10} + \frac{1}{10}$



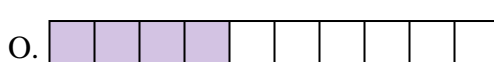
12. C

13) $\frac{1}{8} + \frac{1}{8} + \frac{1}{8}$




13. F

14) $\frac{1}{8} + \frac{1}{8} + \frac{1}{8} + \frac{1}{8} + \frac{1}{8} + \frac{1}{8}$



14. N

15) $\frac{1}{8} + \frac{1}{8} + \frac{1}{8} + \frac{1}{8}$



15. I



Match each equation to the answer and write the answer.

Answers

Ex) $\frac{1}{8} + \frac{1}{8} + \frac{1}{8} + \frac{1}{8} + \frac{1}{8}$



Ex. A

1) $\frac{1}{4} + \frac{1}{4} + \frac{1}{4}$



1. _____

2) $\frac{1}{10} + \frac{1}{10} + \frac{1}{10} + \frac{1}{10} + \frac{1}{10} + \frac{1}{10}$




2. _____

3) $\frac{1}{6} + \frac{1}{6}$




3. _____

4) $\frac{1}{8} + \frac{1}{8} + \frac{1}{8} + \frac{1}{8} + \frac{1}{8} + \frac{1}{8} + \frac{1}{8}$




4. _____

5) $\frac{1}{6} + \frac{1}{6} + \frac{1}{6} + \frac{1}{6}$



5. _____

6) $\frac{1}{12} + \frac{1}{12} + \frac{1}{12} + \frac{1}{12} + \frac{1}{12}$



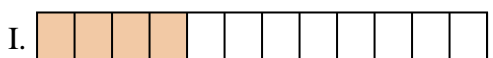
6. _____

7) $\frac{1}{8} + \frac{1}{8} + \frac{1}{8} + \frac{1}{8}$



7. _____

8) $\frac{1}{3} + \frac{1}{3}$



8. _____

9) $\frac{1}{6} + \frac{1}{6} + \frac{1}{6} + \frac{1}{6} + \frac{1}{6}$




9. _____

10) $\frac{1}{12} + \frac{1}{12} + \frac{1}{12} + \frac{1}{12}$



10. _____

11) $\frac{1}{10} + \frac{1}{10} + \frac{1}{10} + \frac{1}{10}$



11. _____

12) $\frac{1}{5} + \frac{1}{5} + \frac{1}{5} + \frac{1}{5}$




12. _____

13) $\frac{1}{4} + \frac{1}{4}$




13. _____

14) $\frac{1}{8} + \frac{1}{8} + \frac{1}{8} + \frac{1}{8} + \frac{1}{8} + \frac{1}{8}$



14. _____

15) $\frac{1}{5} + \frac{1}{5}$




15. _____



Match each equation to the answer and write the answer.


Ex) $\frac{1}{8} + \frac{1}{8} + \frac{1}{8} + \frac{1}{8} + \frac{1}{8}$



Answers

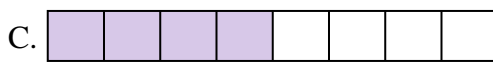
Ex. **A**

1) $\frac{1}{4} + \frac{1}{4} + \frac{1}{4}$



1. **F**

2) $\frac{1}{10} + \frac{1}{10} + \frac{1}{10} + \frac{1}{10} + \frac{1}{10} + \frac{1}{10}$




2. **P**

3) $\frac{1}{6} + \frac{1}{6}$




3. **N**

4) $\frac{1}{8} + \frac{1}{8} + \frac{1}{8} + \frac{1}{8} + \frac{1}{8} + \frac{1}{8} + \frac{1}{8}$



4. **O**

5) $\frac{1}{6} + \frac{1}{6} + \frac{1}{6} + \frac{1}{6}$




5. **H**

6) $\frac{1}{12} + \frac{1}{12} + \frac{1}{12} + \frac{1}{12} + \frac{1}{12}$




6. **J**

7) $\frac{1}{8} + \frac{1}{8} + \frac{1}{8} + \frac{1}{8}$



7. **C**

8) $\frac{1}{3} + \frac{1}{3}$



8. **K**

9) $\frac{1}{6} + \frac{1}{6} + \frac{1}{6} + \frac{1}{6} + \frac{1}{6}$




9. **L**

10) $\frac{1}{12} + \frac{1}{12} + \frac{1}{12} + \frac{1}{12}$



10. **I**

11) $\frac{1}{10} + \frac{1}{10} + \frac{1}{10} + \frac{1}{10}$




11. **D**

12) $\frac{1}{5} + \frac{1}{5} + \frac{1}{5} + \frac{1}{5}$




12. **B**

13) $\frac{1}{4} + \frac{1}{4}$




13. **M**

14) $\frac{1}{8} + \frac{1}{8} + \frac{1}{8} + \frac{1}{8} + \frac{1}{8} + \frac{1}{8}$



14. **G**

15) $\frac{1}{5} + \frac{1}{5}$



15. **E**



Match each equation to the answer and write the answer.

Answers

Ex) $\frac{1}{8} + \frac{1}{8} + \frac{1}{8} + \frac{1}{8} + \frac{1}{8}$



Ex. **J**

1) $\frac{1}{5} + \frac{1}{5} + \frac{1}{5}$




1. _____

2) $\frac{1}{4} + \frac{1}{4}$



2. _____

3) $\frac{1}{5} + \frac{1}{5} + \frac{1}{5} + \frac{1}{5}$



3. _____

4) $\frac{1}{8} + \frac{1}{8}$



5. _____

5) $\frac{1}{4} + \frac{1}{4} + \frac{1}{4}$




6. _____

6) $\frac{1}{5} + \frac{1}{5}$




7. _____

7) $\frac{1}{8} + \frac{1}{8} + \frac{1}{8} + \frac{1}{8} + \frac{1}{8} + \frac{1}{8}$



8. _____

8) $\frac{1}{6} + \frac{1}{6} + \frac{1}{6} + \frac{1}{6} + \frac{1}{6}$




9. _____

9) $\frac{1}{6} + \frac{1}{6} + \frac{1}{6} + \frac{1}{6}$




10. _____

10) $\frac{1}{12} + \frac{1}{12} + \frac{1}{12} + \frac{1}{12} + \frac{1}{12} + \frac{1}{12}$



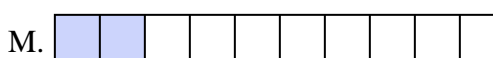
11. _____

11) $\frac{1}{10} + \frac{1}{10} + \frac{1}{10}$



12. _____

12) $\frac{1}{10} + \frac{1}{10} + \frac{1}{10} + \frac{1}{10} + \frac{1}{10}$



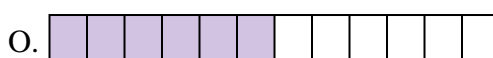
13. _____

13) $\frac{1}{3} + \frac{1}{3}$




14. _____

14) $\frac{1}{8} + \frac{1}{8} + \frac{1}{8} + \frac{1}{8}$



15. _____


15) $\frac{1}{10} + \frac{1}{10}$





Match each equation to the answer and write the answer.

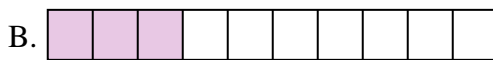
Ex) $\frac{1}{8} + \frac{1}{8} + \frac{1}{8} + \frac{1}{8} + \frac{1}{8}$



Answers

Ex. **J**

1) $\frac{1}{5} + \frac{1}{5} + \frac{1}{5}$




1. **L**

2) $\frac{1}{4} + \frac{1}{4}$




2. **D**

3) $\frac{1}{5} + \frac{1}{5} + \frac{1}{5} + \frac{1}{5}$




3. **H**

4) $\frac{1}{8} + \frac{1}{8}$



4. **K**

5) $\frac{1}{4} + \frac{1}{4} + \frac{1}{4}$




5. **E**

6) $\frac{1}{5} + \frac{1}{5}$



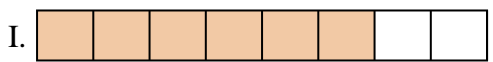
6. **P**

7) $\frac{1}{8} + \frac{1}{8} + \frac{1}{8} + \frac{1}{8} + \frac{1}{8} + \frac{1}{8}$




7. **I**

8) $\frac{1}{6} + \frac{1}{6} + \frac{1}{6} + \frac{1}{6} + \frac{1}{6}$



8. **G**

9) $\frac{1}{6} + \frac{1}{6} + \frac{1}{6} + \frac{1}{6}$



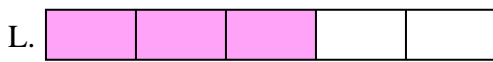
9. **A**

10) $\frac{1}{12} + \frac{1}{12} + \frac{1}{12} + \frac{1}{12} + \frac{1}{12} + \frac{1}{12}$



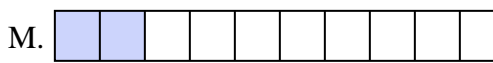
10. **O**

11) $\frac{1}{10} + \frac{1}{10} + \frac{1}{10}$



11. **B**

12) $\frac{1}{10} + \frac{1}{10} + \frac{1}{10} + \frac{1}{10} + \frac{1}{10}$



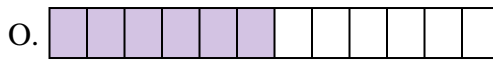
12. **N**

13) $\frac{1}{3} + \frac{1}{3}$



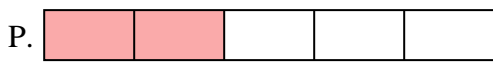
13. **F**

14) $\frac{1}{8} + \frac{1}{8} + \frac{1}{8} + \frac{1}{8}$



14. **C**

15) $\frac{1}{10} + \frac{1}{10}$



15. **M**