



Use the visual model to solve each problem.

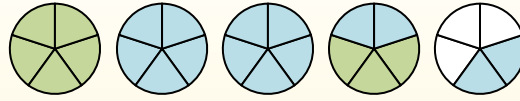
$1 \frac{3}{5} + 2 \frac{4}{5} = ?$



To solve a fraction addition problem one strategy is to shade in the whole amounts first (1 & 2).



Next fill in the fraction amounts ( $\frac{3}{5}$  &  $\frac{4}{5}$ ).



When all of the pieces are filled in we can see that  $1 \frac{3}{5} + 2 \frac{4}{5} = 4 \frac{2}{5}$

**Answers**

1. \_\_\_\_\_
2. \_\_\_\_\_
3. \_\_\_\_\_
4. \_\_\_\_\_
5. \_\_\_\_\_
6. \_\_\_\_\_
7. \_\_\_\_\_
8. \_\_\_\_\_
9. \_\_\_\_\_
10. \_\_\_\_\_

1)  $1 \frac{4}{5} + 2 \frac{1}{5} =$

2)  $1 \frac{1}{10} + 2 \frac{8}{10} =$

3)  $2 \frac{3}{4} + 3 \frac{1}{4} =$

4)  $3 \frac{1}{3} + 2 \frac{1}{3} =$

5)  $2 \frac{2}{5} + 1 \frac{4}{5} =$

6)  $1 \frac{4}{6} + 3 \frac{1}{6} =$

7)  $1 \frac{4}{12} + 1 \frac{2}{12} =$

8)  $2 \frac{3}{5} + 1 \frac{3}{5} =$

9)  $1 \frac{10}{12} + 3 \frac{2}{12} =$

10)  $1 \frac{4}{5} + 1 \frac{3}{5} =$



Use the visual model to solve each problem.

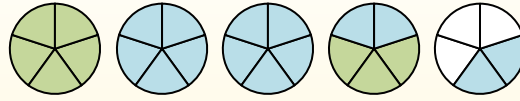
$$1\frac{3}{5} + 2\frac{4}{5} = ?$$



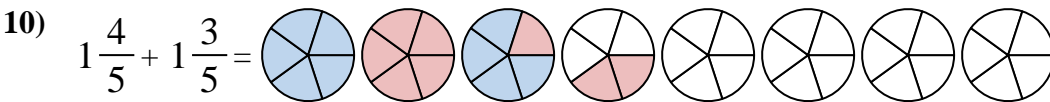
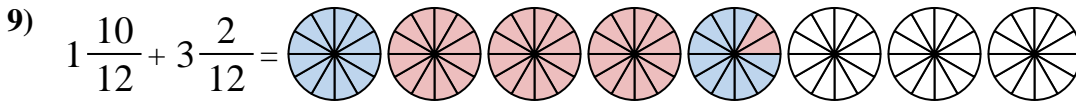
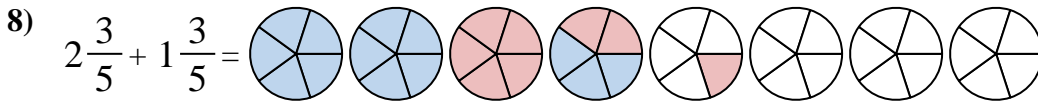
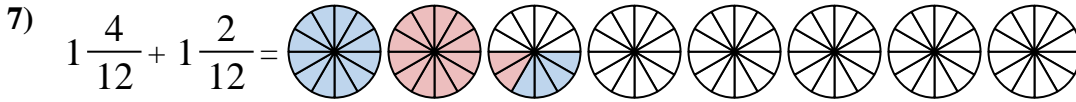
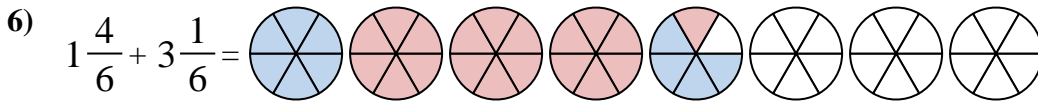
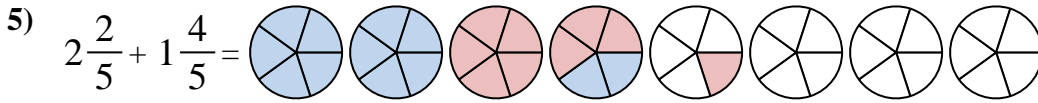
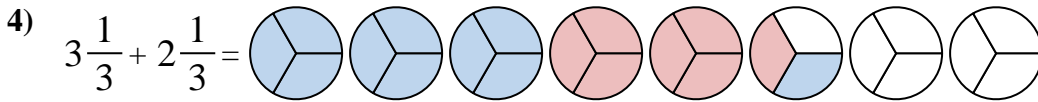
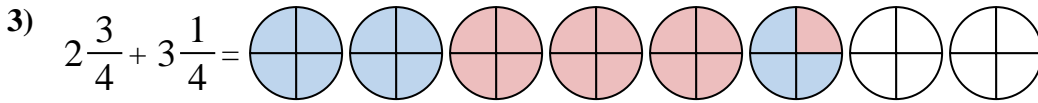
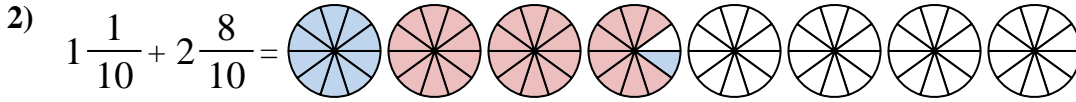
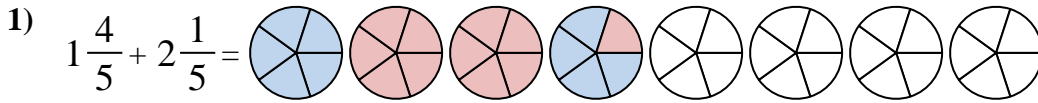
To solve a fraction addition problem one strategy is to shade in the whole amounts first (1 & 2).



Next fill in the fraction amounts ( $\frac{3}{5}$  &  $\frac{4}{5}$ ).



When all of the pieces are filled in we can see that  $1\frac{3}{5} + 2\frac{4}{5} = 4\frac{2}{5}$



**Answers**

1.  $4\frac{0}{5}$

2.  $3\frac{9}{10}$

3.  $6\frac{0}{4}$

4.  $5\frac{2}{3}$

5.  $4\frac{1}{5}$

6.  $4\frac{5}{6}$

7.  $2\frac{6}{12}$

8.  $4\frac{1}{5}$

9.  $5\frac{0}{12}$

10.  $3\frac{2}{5}$



Use the visual model to solve each problem.

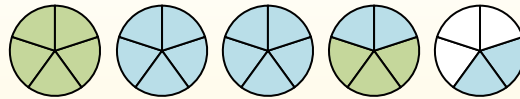
$1 \frac{3}{5} + 2 \frac{4}{5} = ?$



To solve a fraction addition problem one strategy is to shade in the whole amounts first (1 & 2).



Next fill in the fraction amounts ( $\frac{3}{5}$  &  $\frac{4}{5}$ ).



When all of the pieces are filled in we can see that  $1 \frac{3}{5} + 2 \frac{4}{5} = 4 \frac{2}{5}$

**Answers**

1. \_\_\_\_\_
2. \_\_\_\_\_
3. \_\_\_\_\_
4. \_\_\_\_\_
5. \_\_\_\_\_
6. \_\_\_\_\_
7. \_\_\_\_\_
8. \_\_\_\_\_
9. \_\_\_\_\_
10. \_\_\_\_\_

1)  $1 \frac{1}{4} + 2 \frac{1}{4} =$

2)  $3 \frac{1}{5} + 3 \frac{2}{5} =$

3)  $3 \frac{1}{4} + 1 \frac{1}{4} =$

4)  $1 \frac{5}{12} + 2 \frac{2}{12} =$

5)  $3 \frac{7}{12} + 2 \frac{3}{12} =$

6)  $2 \frac{1}{3} + 3 \frac{2}{3} =$

7)  $1 \frac{2}{3} + 3 \frac{1}{3} =$

8)  $3 \frac{2}{3} + 2 \frac{1}{3} =$

9)  $1 \frac{2}{12} + 2 \frac{5}{12} =$

10)  $1 \frac{3}{5} + 2 \frac{4}{5} =$



Use the visual model to solve each problem.

$1\frac{3}{5} + 2\frac{4}{5} = ?$

To solve a fraction addition problem one strategy is to shade in the whole amounts first (1 & 2).

Next fill in the fraction amounts ( $\frac{3}{5}$  &  $\frac{4}{5}$ ).

When all of the pieces are filled in we can see that  $1\frac{3}{5} + 2\frac{4}{5} = 4\frac{2}{5}$

**Answers**

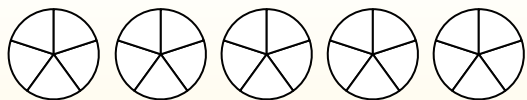
- 1)  $1\frac{1}{4} + 2\frac{1}{4} =$
- 2)  $3\frac{1}{5} + 3\frac{2}{5} =$
- 3)  $3\frac{1}{4} + 1\frac{1}{4} =$
- 4)  $1\frac{5}{12} + 2\frac{2}{12} =$
- 5)  $3\frac{7}{12} + 2\frac{3}{12} =$
- 6)  $2\frac{1}{3} + 3\frac{2}{3} =$
- 7)  $1\frac{2}{3} + 3\frac{1}{3} =$
- 8)  $3\frac{2}{3} + 2\frac{1}{3} =$
- 9)  $1\frac{2}{12} + 2\frac{5}{12} =$
- 10)  $1\frac{3}{5} + 2\frac{4}{5} =$

1.  $3\frac{2}{4}$
2.  $6\frac{3}{5}$
3.  $4\frac{2}{4}$
4.  $3\frac{7}{12}$
5.  $5\frac{10}{12}$
6.  $6\frac{0}{3}$
7.  $5\frac{0}{3}$
8.  $6\frac{0}{3}$
9.  $3\frac{7}{12}$
10.  $4\frac{2}{5}$



Use the visual model to solve each problem.

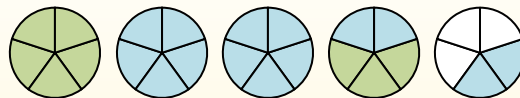
$$1 \frac{3}{5} + 2 \frac{4}{5} = ?$$



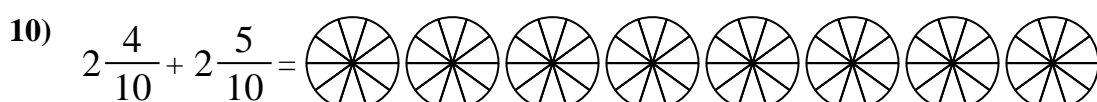
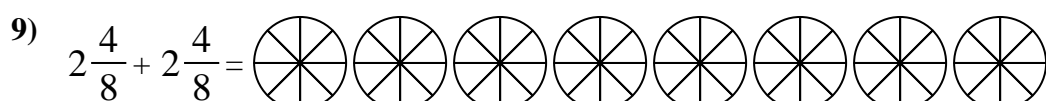
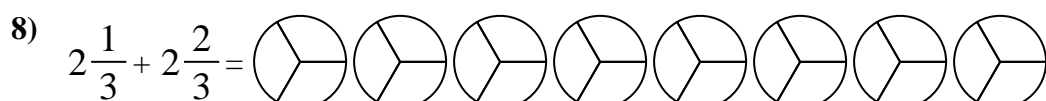
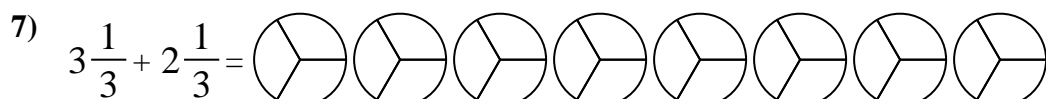

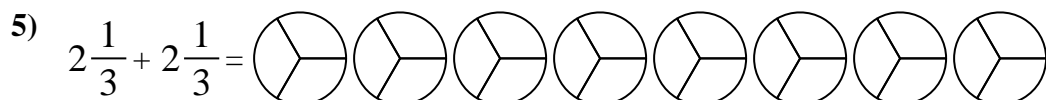
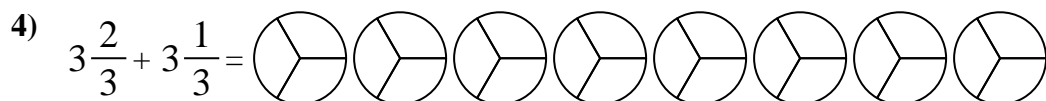
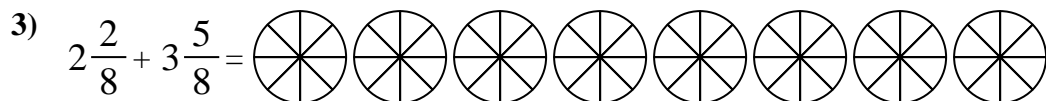
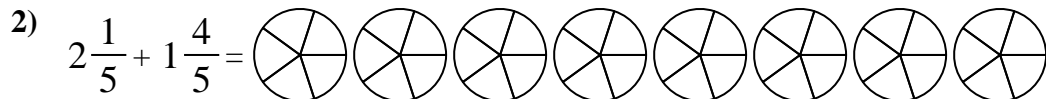
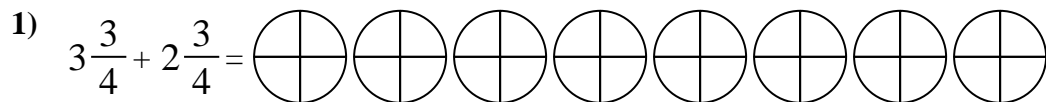
To solve a fraction addition problem one strategy is to shade in the whole amounts first (1 & 2).



Next fill in the fraction amounts ( $\frac{3}{5}$  &  $\frac{4}{5}$ ).



When all of the pieces are filled in we can see that  $1 \frac{3}{5} + 2 \frac{4}{5} = 4 \frac{2}{5}$



**Answers**

1. \_\_\_\_\_
2. \_\_\_\_\_
3. \_\_\_\_\_
4. \_\_\_\_\_
5. \_\_\_\_\_
6. \_\_\_\_\_
7. \_\_\_\_\_
8. \_\_\_\_\_
9. \_\_\_\_\_
10. \_\_\_\_\_



Use the visual model to solve each problem.

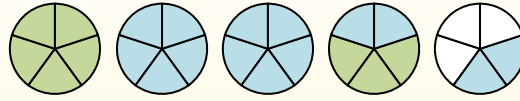
$$1 \frac{3}{5} + 2 \frac{4}{5} = ?$$



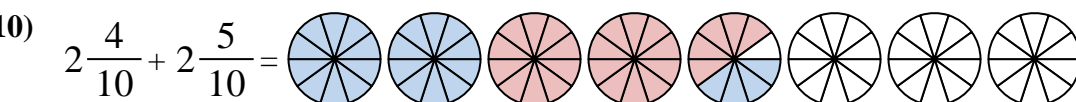
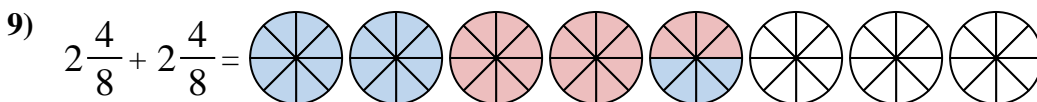
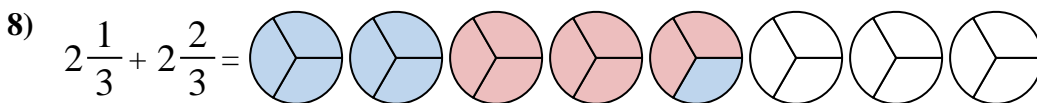
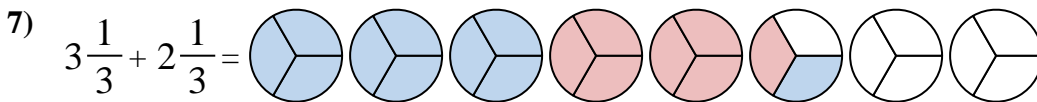
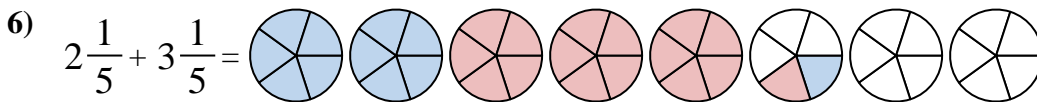
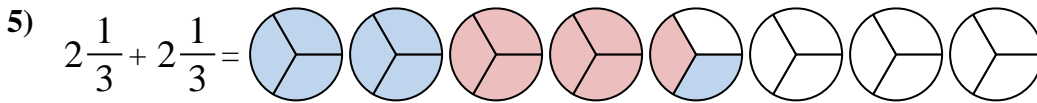
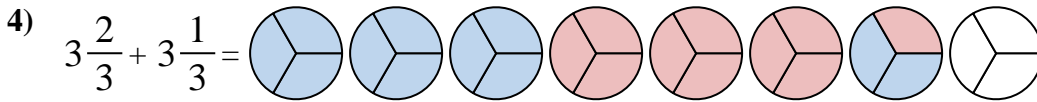
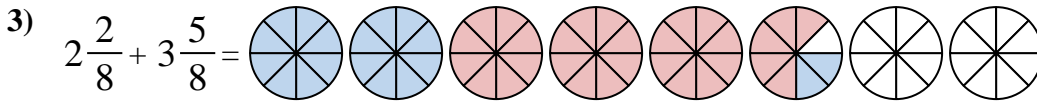
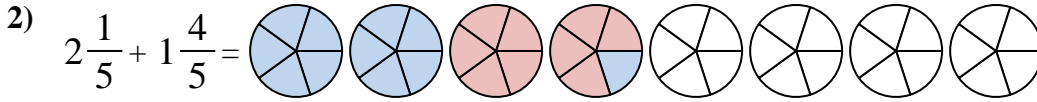
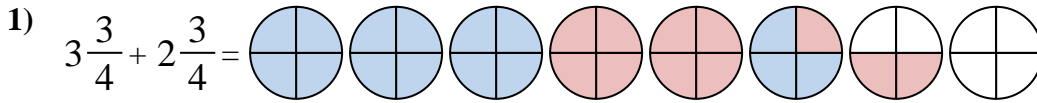
To solve a fraction addition problem one strategy is to shade in the whole amounts first (1 & 2).



Next fill in the fraction amounts ( $\frac{3}{5}$  &  $\frac{4}{5}$ ).



When all of the pieces are filled in we can see that  $1 \frac{3}{5} + 2 \frac{4}{5} = 4 \frac{2}{5}$



**Answers**

1.  $6 \frac{2}{4}$

2.  $4 \frac{0}{5}$

3.  $5 \frac{7}{8}$

4.  $7 \frac{0}{3}$

5.  $4 \frac{2}{3}$

6.  $5 \frac{2}{5}$

7.  $5 \frac{2}{3}$

8.  $5 \frac{0}{3}$

9.  $5 \frac{0}{8}$

10.  $4 \frac{9}{10}$



Use the visual model to solve each problem.

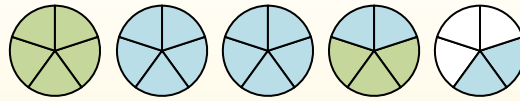
$1 \frac{3}{5} + 2 \frac{4}{5} = ?$



To solve a fraction addition problem one strategy is to shade in the whole amounts first (1 & 2).



Next fill in the fraction amounts ( $\frac{3}{5}$  &  $\frac{4}{5}$ ).



When all of the pieces are filled in we can see that  $1 \frac{3}{5} + 2 \frac{4}{5} = 4 \frac{2}{5}$

**Answers**

- 1. \_\_\_\_\_
- 2. \_\_\_\_\_
- 3. \_\_\_\_\_
- 4. \_\_\_\_\_
- 5. \_\_\_\_\_
- 6. \_\_\_\_\_
- 7. \_\_\_\_\_
- 8. \_\_\_\_\_
- 9. \_\_\_\_\_
- 10. \_\_\_\_\_

1)  $1 \frac{9}{12} + 1 \frac{5}{12} =$

2)  $3 \frac{2}{5} + 1 \frac{3}{5} =$

3)  $1 \frac{5}{8} + 2 \frac{1}{8} =$

4)  $1 \frac{3}{12} + 3 \frac{1}{12} =$

5)  $3 \frac{2}{6} + 3 \frac{2}{6} =$

6)  $1 \frac{3}{8} + 2 \frac{4}{8} =$

7)  $1 \frac{3}{12} + 2 \frac{7}{12} =$

8)  $3 \frac{6}{12} + 1 \frac{3}{12} =$

9)  $3 \frac{5}{6} + 3 \frac{3}{6} =$

10)  $3 \frac{5}{8} + 2 \frac{1}{8} =$



Use the visual model to solve each problem.

$1\frac{3}{5} + 2\frac{4}{5} = ?$

To solve a fraction addition problem one strategy is to shade in the whole amounts first (1 & 2).

Next fill in the fraction amounts ( $\frac{3}{5}$  &  $\frac{4}{5}$ ).

When all of the pieces are filled in we can see that  $1\frac{3}{5} + 2\frac{4}{5} = 4\frac{2}{5}$

**Answers**

1)  $1\frac{9}{12} + 1\frac{5}{12} =$

2)  $3\frac{2}{5} + 1\frac{3}{5} =$

3)  $1\frac{5}{8} + 2\frac{1}{8} =$

4)  $1\frac{3}{12} + 3\frac{1}{12} =$

5)  $3\frac{2}{6} + 3\frac{2}{6} =$

6)  $1\frac{3}{8} + 2\frac{4}{8} =$

7)  $1\frac{3}{12} + 2\frac{7}{12} =$

8)  $3\frac{6}{12} + 1\frac{3}{12} =$

9)  $3\frac{5}{6} + 3\frac{3}{6} =$

10)  $3\frac{5}{8} + 2\frac{1}{8} =$

1.            $3\frac{2}{12}$
2.            $5\frac{0}{5}$
3.            $3\frac{6}{8}$
4.            $4\frac{4}{12}$
5.            $6\frac{4}{6}$
6.            $3\frac{7}{8}$
7.            $3\frac{10}{12}$
8.            $4\frac{9}{12}$
9.            $7\frac{2}{6}$
10.            $5\frac{6}{8}$





Use the visual model to solve each problem.

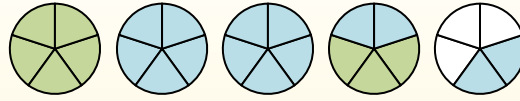
$$1 \frac{3}{5} + 2 \frac{4}{5} = ?$$



To solve a fraction addition problem one strategy is to shade in the whole amounts first (1 & 2).



Next fill in the fraction amounts ( $\frac{3}{5}$  &  $\frac{4}{5}$ ).



When all of the pieces are filled in we can see that  $1 \frac{3}{5} + 2 \frac{4}{5} = 4 \frac{2}{5}$

**Answers**

1. \_\_\_\_\_
2. \_\_\_\_\_
3. \_\_\_\_\_
4. \_\_\_\_\_
5. \_\_\_\_\_
6. \_\_\_\_\_
7. \_\_\_\_\_
8. \_\_\_\_\_
9. \_\_\_\_\_
10. \_\_\_\_\_

1)  $2 \frac{3}{12} + 2 \frac{3}{12} =$

2)  $1 \frac{2}{3} + 1 \frac{2}{3} =$

3)  $3 \frac{1}{6} + 1 \frac{5}{6} =$

4)  $1 \frac{7}{8} + 2 \frac{4}{8} =$

5)  $3 \frac{1}{5} + 2 \frac{1}{5} =$

6)  $1 \frac{2}{6} + 3 \frac{5}{6} =$

7)  $2 \frac{3}{5} + 3 \frac{2}{5} =$

8)  $2 \frac{6}{10} + 2 \frac{3}{10} =$


9)  $1 \frac{5}{8} + 3 \frac{3}{8} =$

10)  $3 \frac{1}{12} + 3 \frac{5}{12} =$




Use the visual model to solve each problem.


$1\frac{3}{5} + 2\frac{4}{5} = ?$



To solve a fraction addition problem one strategy is to shade in the whole amounts first (1 & 2).

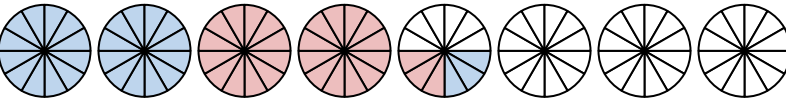


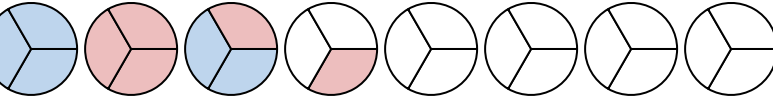
Next fill in the fraction amounts ( $\frac{3}{5}$  &  $\frac{4}{5}$ ).

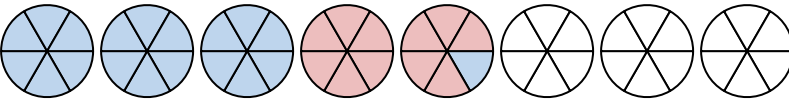


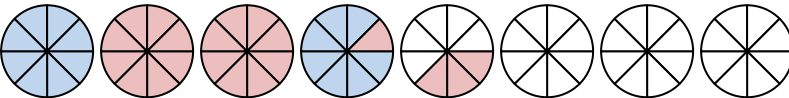
When all of the pieces are filled in we can see that  $1\frac{3}{5} + 2\frac{4}{5} = 4\frac{2}{5}$

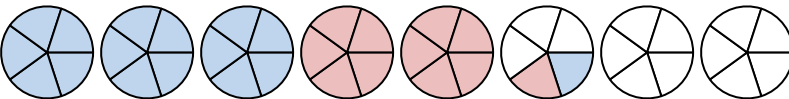
**Answers**

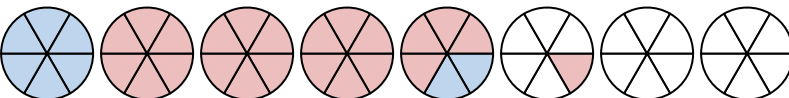
1)  $2\frac{3}{12} + 2\frac{3}{12} =$  

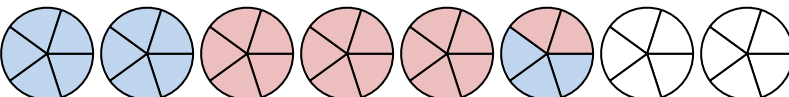
2)  $1\frac{2}{3} + 1\frac{2}{3} =$  

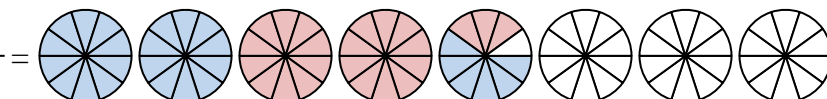
3)  $3\frac{1}{6} + 1\frac{5}{6} =$  

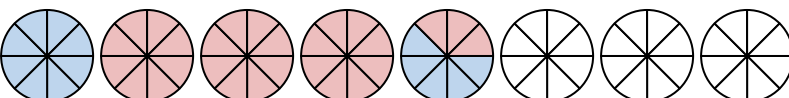
4)  $1\frac{7}{8} + 2\frac{4}{8} =$  

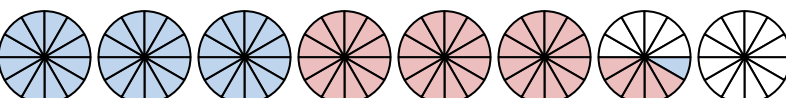
5)  $3\frac{1}{5} + 2\frac{1}{5} =$  

6)  $1\frac{2}{6} + 3\frac{5}{6} =$  

7)  $2\frac{3}{5} + 3\frac{2}{5} =$  

8)  $2\frac{6}{10} + 2\frac{3}{10} =$  

9)  $1\frac{5}{8} + 3\frac{3}{8} =$  

10)  $3\frac{1}{12} + 3\frac{5}{12} =$  

1.  $4\frac{6}{12}$
2.  $3\frac{1}{3}$
3.  $5\frac{0}{6}$
4.  $4\frac{3}{8}$
5.  $5\frac{2}{5}$
6.  $5\frac{1}{6}$
7.  $6\frac{0}{5}$
8.  $4\frac{9}{10}$
9.  $5\frac{0}{8}$
10.  $6\frac{6}{12}$



Use the visual model to solve each problem.

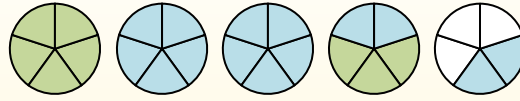
$$1 \frac{3}{5} + 2 \frac{4}{5} = ?$$



To solve a fraction addition problem one strategy is to shade in the whole amounts first (1 & 2).



Next fill in the fraction amounts ( $\frac{3}{5}$  &  $\frac{4}{5}$ ).



When all of the pieces are filled in we can see that  $1 \frac{3}{5} + 2 \frac{4}{5} = 4 \frac{2}{5}$

**Answers**

1. \_\_\_\_\_
2. \_\_\_\_\_
3. \_\_\_\_\_
4. \_\_\_\_\_
5. \_\_\_\_\_
6. \_\_\_\_\_
7. \_\_\_\_\_
8. \_\_\_\_\_
9. \_\_\_\_\_
10. \_\_\_\_\_

1)  $3 \frac{5}{10} + 2 \frac{4}{10} =$

2)  $1 \frac{1}{5} + 1 \frac{1}{5} =$

3)  $1 \frac{4}{8} + 2 \frac{3}{8} =$

4)  $2 \frac{2}{6} + 1 \frac{2}{6} =$

5)  $2 \frac{2}{5} + 1 \frac{3}{5} =$

6)  $1 \frac{5}{12} + 2 \frac{4}{12} =$

7)  $1 \frac{2}{3} + 1 \frac{1}{3} =$

8)  $1 \frac{6}{8} + 1 \frac{3}{8} =$

9)  $3 \frac{3}{8} + 3 \frac{4}{8} =$

10)  $1 \frac{3}{4} + 3 \frac{2}{4} =$

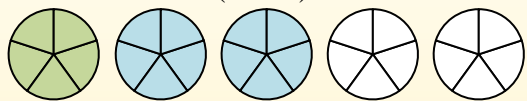


Use the visual model to solve each problem.

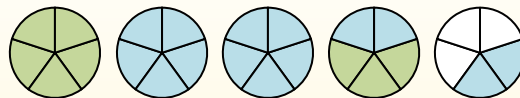
$$1 \frac{3}{5} + 2 \frac{4}{5} = ?$$



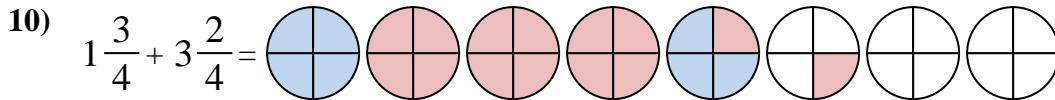
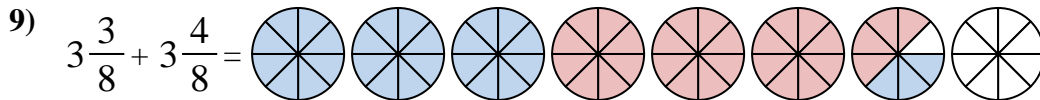
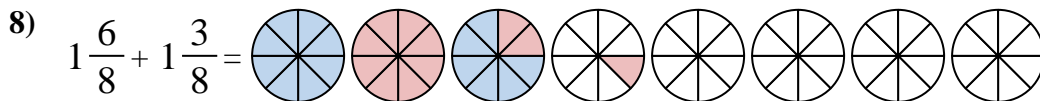
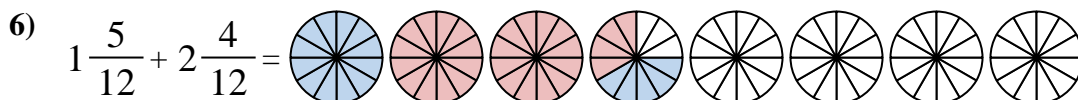
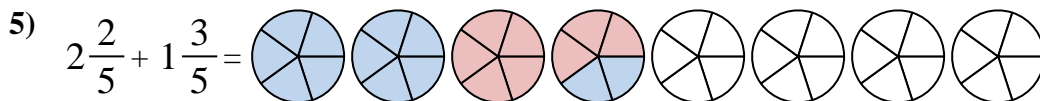
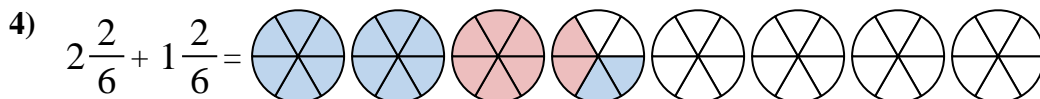
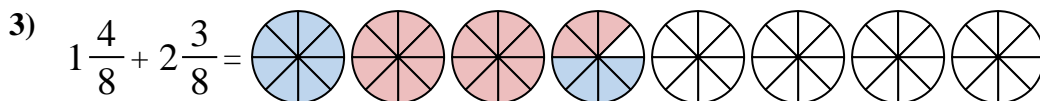
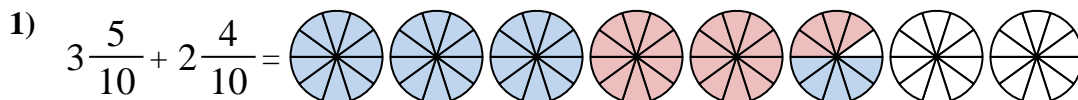
To solve a fraction addition problem one strategy is to shade in the whole amounts first (1 & 2).



Next fill in the fraction amounts ( $\frac{3}{5}$  &  $\frac{4}{5}$ ).



When all of the pieces are filled in we can see that  $1 \frac{3}{5} + 2 \frac{4}{5} = 4 \frac{2}{5}$



Answers

1.  $5 \frac{9}{10}$

2.  $2 \frac{2}{5}$

3.  $3 \frac{7}{8}$

4.  $3 \frac{4}{6}$

5.  $4 \frac{0}{5}$

6.  $3 \frac{9}{12}$

7.  $3 \frac{0}{3}$

8.  $3 \frac{1}{8}$

9.  $6 \frac{7}{8}$

10.  $5 \frac{1}{4}$



Use the visual model to solve each problem.

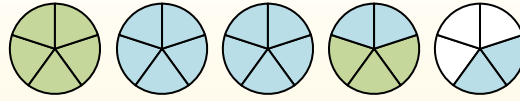
$$1 \frac{3}{5} + 2 \frac{4}{5} = ?$$



To solve a fraction addition problem one strategy is to shade in the whole amounts first (1 & 2).



Next fill in the fraction amounts ( $\frac{3}{5}$  &  $\frac{4}{5}$ ).



When all of the pieces are filled in we can see that  $1 \frac{3}{5} + 2 \frac{4}{5} = 4 \frac{2}{5}$

**Answers**

1. \_\_\_\_\_
2. \_\_\_\_\_
3. \_\_\_\_\_
4. \_\_\_\_\_
5. \_\_\_\_\_
6. \_\_\_\_\_
7. \_\_\_\_\_
8. \_\_\_\_\_
9. \_\_\_\_\_
10. \_\_\_\_\_

1)  $2 \frac{5}{12} + 2 \frac{8}{12} =$

2)  $3 \frac{1}{4} + 2 \frac{2}{4} =$

3)  $3 \frac{2}{5} + 3 \frac{3}{5} =$

4)  $1 \frac{1}{4} + 1 \frac{3}{4} =$

5)  $3 \frac{3}{6} + 2 \frac{5}{6} =$

6)  $3 \frac{9}{10} + 1 \frac{4}{10} =$

7)  $3 \frac{4}{12} + 3 \frac{10}{12} =$

8)  $1 \frac{8}{10} + 2 \frac{2}{10} =$


9)  $3 \frac{8}{10} + 1 \frac{5}{10} =$

10)  $3 \frac{3}{12} + 1 \frac{7}{12} =$




Use the visual model to solve each problem.


$1\frac{3}{5} + 2\frac{4}{5} = ?$



To solve a fraction addition problem one strategy is to shade in the whole amounts first (1 & 2).

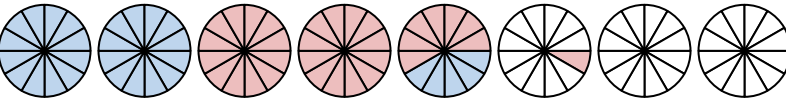


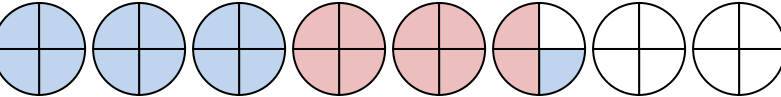
Next fill in the fraction amounts ( $\frac{3}{5}$  &  $\frac{4}{5}$ ).

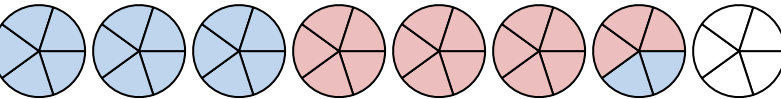


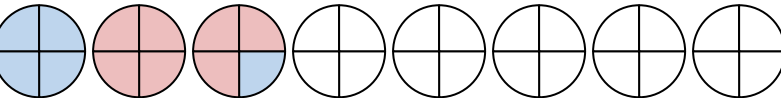
When all of the pieces are filled in we can see that  $1\frac{3}{5} + 2\frac{4}{5} = 4\frac{2}{5}$

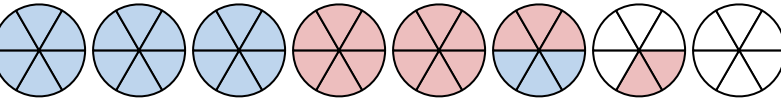
**Answers**

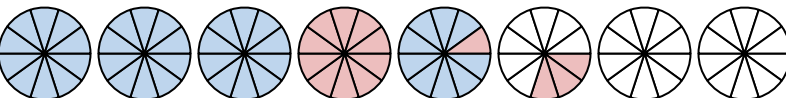
1)  $2\frac{5}{12} + 2\frac{8}{12} =$  

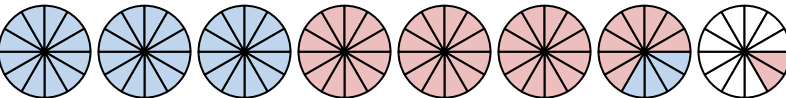
2)  $3\frac{1}{4} + 2\frac{2}{4} =$  

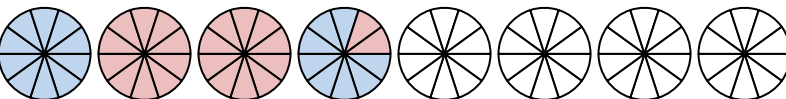
3)  $3\frac{2}{5} + 3\frac{3}{5} =$  

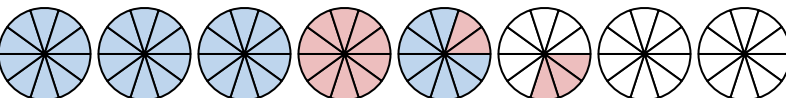
4)  $1\frac{1}{4} + 1\frac{3}{4} =$  

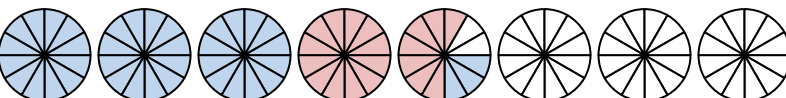
5)  $3\frac{3}{6} + 2\frac{5}{6} =$  

6)  $3\frac{9}{10} + 1\frac{4}{10} =$  

7)  $3\frac{4}{12} + 3\frac{10}{12} =$  

8)  $1\frac{8}{10} + 2\frac{2}{10} =$  

9)  $3\frac{8}{10} + 1\frac{5}{10} =$  

10)  $3\frac{3}{12} + 1\frac{7}{12} =$  

1.  $5\frac{1}{12}$
2.  $5\frac{3}{4}$
3.  $7\frac{0}{5}$
4.  $3\frac{0}{4}$
5.  $6\frac{2}{6}$
6.  $5\frac{3}{10}$
7.  $7\frac{2}{12}$
8.  $4\frac{0}{10}$
9.  $5\frac{3}{10}$
10.  $4\frac{10}{12}$

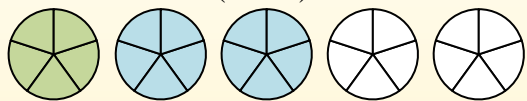


Use the visual model to solve each problem.

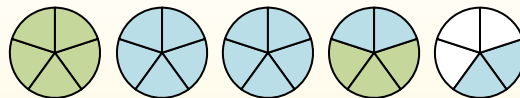
$$1 \frac{3}{5} + 2 \frac{4}{5} = ?$$



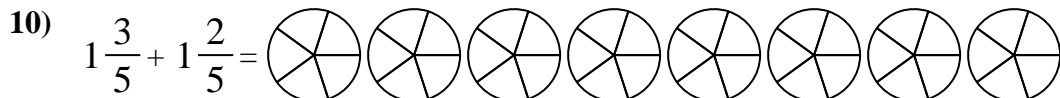
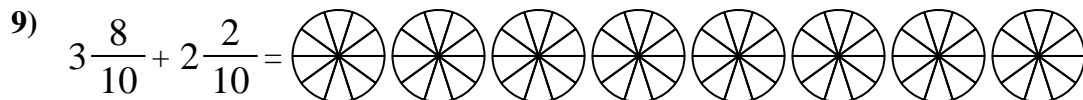
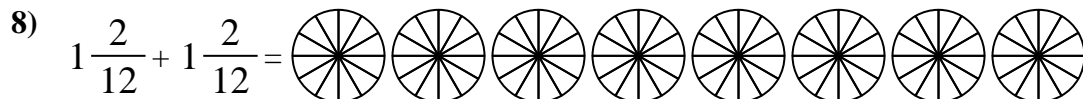
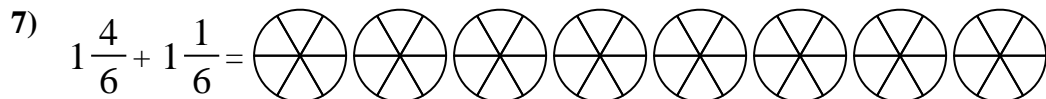

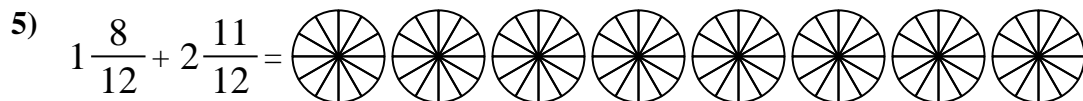
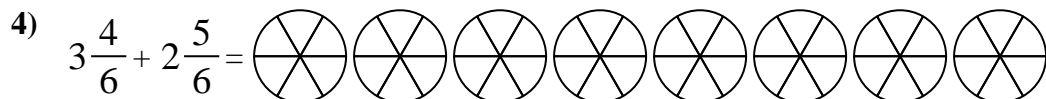
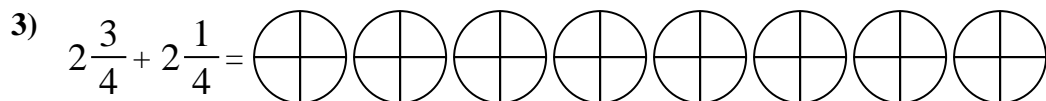
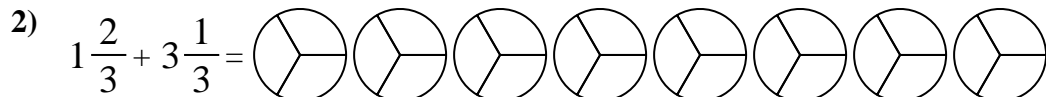
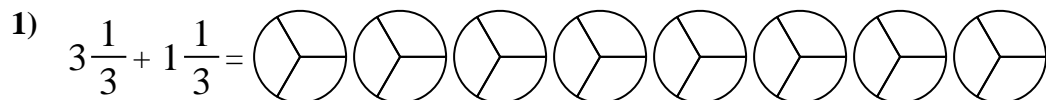
To solve a fraction addition problem one strategy is to shade in the whole amounts first (1 & 2).



Next fill in the fraction amounts ( $\frac{3}{5}$  &  $\frac{4}{5}$ ).



When all of the pieces are filled in we can see that  $1 \frac{3}{5} + 2 \frac{4}{5} = 4 \frac{2}{5}$



**Answers**

1. \_\_\_\_\_
2. \_\_\_\_\_
3. \_\_\_\_\_
4. \_\_\_\_\_
5. \_\_\_\_\_
6. \_\_\_\_\_
7. \_\_\_\_\_
8. \_\_\_\_\_
9. \_\_\_\_\_
10. \_\_\_\_\_



Use the visual model to solve each problem.

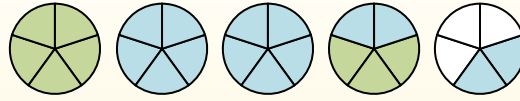
$$1\frac{3}{5} + 2\frac{4}{5} = ?$$



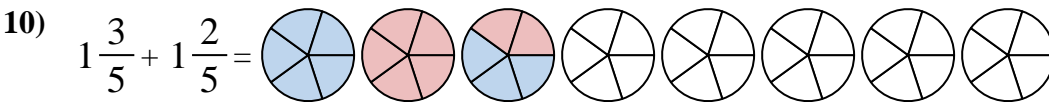
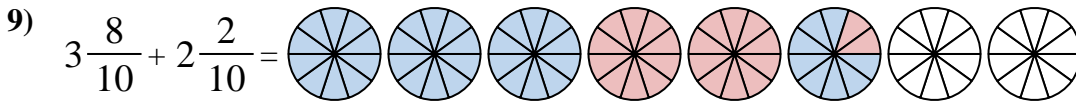
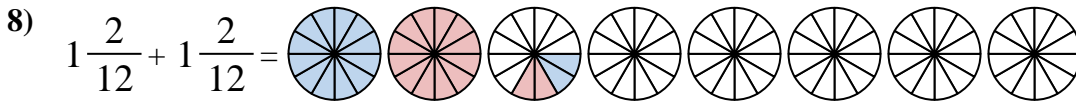
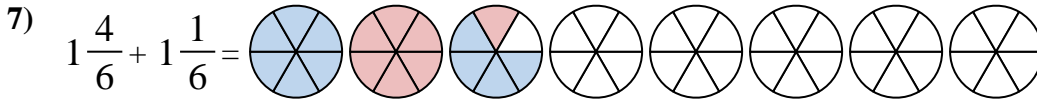
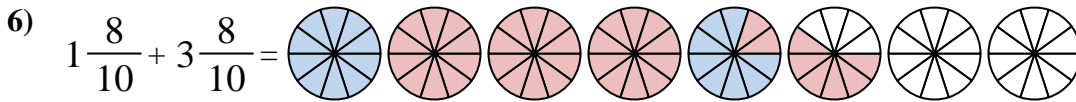
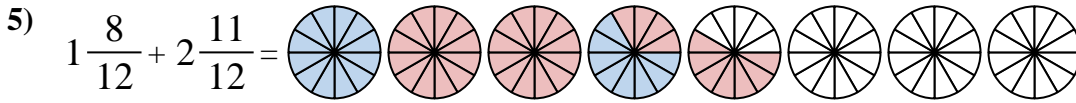
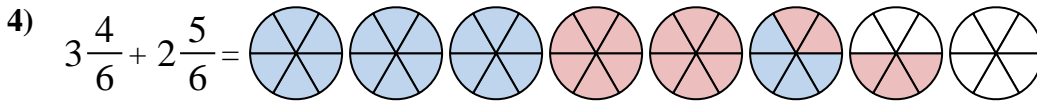
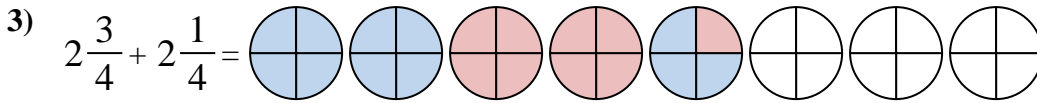
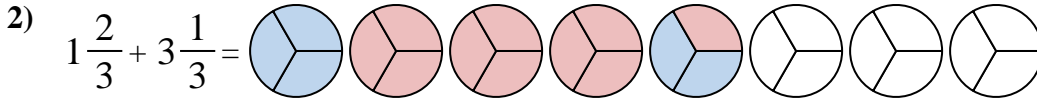
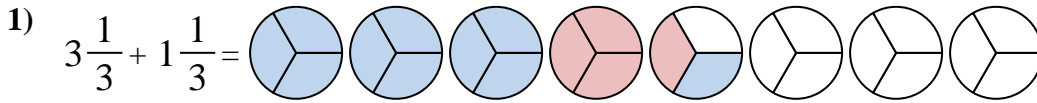
To solve a fraction addition problem one strategy is to shade in the whole amounts first (1 & 2).



Next fill in the fraction amounts ( $\frac{3}{5}$  &  $\frac{4}{5}$ ).



When all of the pieces are filled in we can see that  $1\frac{3}{5} + 2\frac{4}{5} = 4\frac{2}{5}$



**Answers**

1.  $4\frac{2}{3}$

2.  $5\frac{0}{3}$

3.  $5\frac{0}{4}$

4.  $6\frac{3}{6}$

5.  $4\frac{7}{12}$

6.  $5\frac{6}{10}$

7.  $2\frac{5}{6}$

8.  $2\frac{4}{12}$

9.  $6\frac{0}{10}$

10.  $3\frac{0}{5}$





Use the visual model to solve each problem.

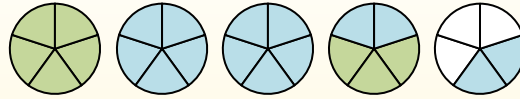
$1\frac{3}{5} + 2\frac{4}{5} = ?$



To solve a fraction addition problem one strategy is to shade in the whole amounts first (1 & 2).



Next fill in the fraction amounts ( $\frac{3}{5}$  &  $\frac{4}{5}$ ).



When all of the pieces are filled in we can see that  $1\frac{3}{5} + 2\frac{4}{5} = 4\frac{2}{5}$

**Answers**

- 1. \_\_\_\_\_
- 2. \_\_\_\_\_
- 3. \_\_\_\_\_
- 4. \_\_\_\_\_
- 5. \_\_\_\_\_
- 6. \_\_\_\_\_
- 7. \_\_\_\_\_
- 8. \_\_\_\_\_
- 9. \_\_\_\_\_
- 10. \_\_\_\_\_

1)  $2\frac{1}{4} + 1\frac{3}{4} =$

2)  $2\frac{2}{5} + 2\frac{1}{5} =$

3)  $1\frac{2}{5} + 2\frac{1}{5} =$

4)  $2\frac{9}{12} + 1\frac{1}{12} =$

5)  $2\frac{2}{3} + 1\frac{2}{3} =$

6)  $2\frac{3}{4} + 3\frac{2}{4} =$

7)  $2\frac{3}{6} + 1\frac{4}{6} =$

8)  $1\frac{2}{6} + 1\frac{1}{6} =$

9)  $3\frac{4}{6} + 1\frac{5}{6} =$

10)  $1\frac{10}{12} + 3\frac{1}{12} =$



Use the visual model to solve each problem.

$1\frac{3}{5} + 2\frac{4}{5} = ?$

To solve a fraction addition problem one strategy is to shade in the whole amounts first (1 & 2).

Next fill in the fraction amounts ( $\frac{3}{5}$  &  $\frac{4}{5}$ ).

When all of the pieces are filled in we can see that  $1\frac{3}{5} + 2\frac{4}{5} = 4\frac{2}{5}$

**Answers**

- 1)  $2\frac{1}{4} + 1\frac{3}{4} =$
- 2)  $2\frac{2}{5} + 2\frac{1}{5} =$
- 3)  $1\frac{2}{5} + 2\frac{1}{5} =$
- 4)  $2\frac{9}{12} + 1\frac{1}{12} =$
- 5)  $2\frac{2}{3} + 1\frac{2}{3} =$
- 6)  $2\frac{3}{4} + 3\frac{2}{4} =$
- 7)  $2\frac{3}{6} + 1\frac{4}{6} =$
- 8)  $1\frac{2}{6} + 1\frac{1}{6} =$
- 9)  $3\frac{4}{6} + 1\frac{5}{6} =$
- 10)  $1\frac{10}{12} + 3\frac{1}{12} =$

1.  $4\frac{0}{4}$
2.  $4\frac{3}{5}$
3.  $3\frac{3}{5}$
4.  $3\frac{10}{12}$
5.  $4\frac{1}{3}$
6.  $6\frac{1}{4}$
7.  $4\frac{1}{6}$
8.  $2\frac{3}{6}$
9.  $5\frac{3}{6}$
10.  $4\frac{11}{12}$



Use the visual model to solve each problem.

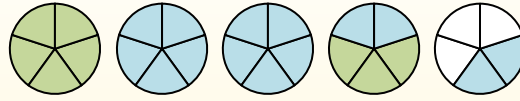
$$1 \frac{3}{5} + 2 \frac{4}{5} = ?$$



To solve a fraction addition problem one strategy is to shade in the whole amounts first (1 & 2).



Next fill in the fraction amounts ( $\frac{3}{5}$  &  $\frac{4}{5}$ ).



When all of the pieces are filled in we can see that  $1 \frac{3}{5} + 2 \frac{4}{5} = 4 \frac{2}{5}$

**Answers**

1. \_\_\_\_\_
2. \_\_\_\_\_
3. \_\_\_\_\_
4. \_\_\_\_\_
5. \_\_\_\_\_
6. \_\_\_\_\_
7. \_\_\_\_\_
8. \_\_\_\_\_
9. \_\_\_\_\_
10. \_\_\_\_\_

1)  $3 \frac{8}{10} + 1 \frac{3}{10} =$

2)  $3 \frac{4}{5} + 1 \frac{4}{5} =$

3)  $2 \frac{1}{10} + 1 \frac{6}{10} =$

4)  $3 \frac{7}{12} + 1 \frac{5}{12} =$

5)  $3 \frac{2}{3} + 3 \frac{2}{3} =$

6)  $3 \frac{2}{5} + 1 \frac{1}{5} =$

7)  $3 \frac{1}{8} + 3 \frac{2}{8} =$

8)  $3 \frac{8}{12} + 1 \frac{2}{12} =$


9)  $2 \frac{3}{4} + 2 \frac{3}{4} =$

10)  $1 \frac{1}{3} + 3 \frac{2}{3} =$




Use the visual model to solve each problem.


$1\frac{3}{5} + 2\frac{4}{5} = ?$



To solve a fraction addition problem one strategy is to shade in the whole amounts first (1 & 2).

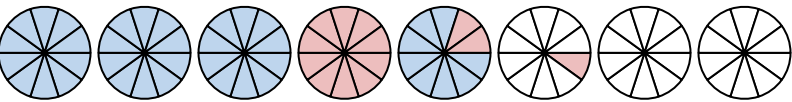
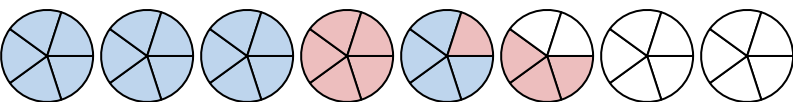
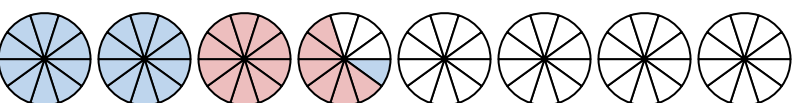
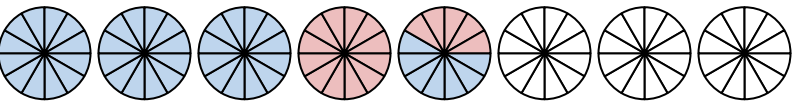
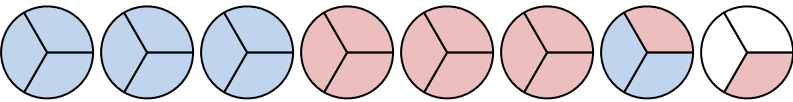
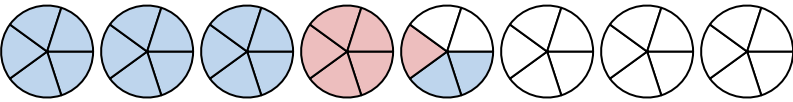
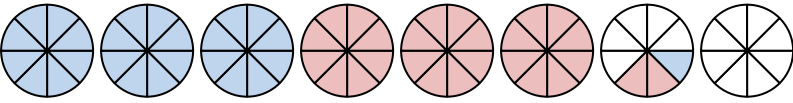

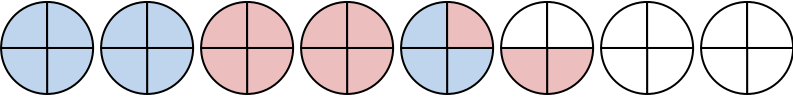
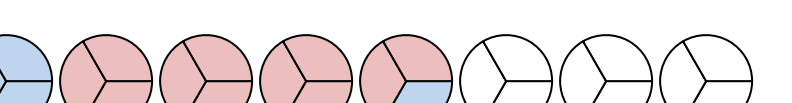


Next fill in the fraction amounts ( $\frac{3}{5}$  &  $\frac{4}{5}$ ).



When all of the pieces are filled in we can see that  $1\frac{3}{5} + 2\frac{4}{5} = 4\frac{2}{5}$

**Answers**

- 1)  $3\frac{8}{10} + 1\frac{3}{10} =$  
- 2)  $3\frac{4}{5} + 1\frac{4}{5} =$  
- 3)  $2\frac{1}{10} + 1\frac{6}{10} =$  
- 4)  $3\frac{7}{12} + 1\frac{5}{12} =$  
- 5)  $3\frac{2}{3} + 3\frac{2}{3} =$  
- 6)  $3\frac{2}{5} + 1\frac{1}{5} =$  
- 7)  $3\frac{1}{8} + 3\frac{2}{8} =$  
- 8)  $3\frac{8}{12} + 1\frac{2}{12} =$  
- 9)  $2\frac{3}{4} + 2\frac{3}{4} =$  
- 10)  $1\frac{1}{3} + 3\frac{2}{3} =$  

1.  $5\frac{1}{10}$
2.  $5\frac{3}{5}$
3.  $3\frac{7}{10}$
4.  $5\frac{0}{12}$
5.  $7\frac{1}{3}$
6.  $4\frac{3}{5}$
7.  $6\frac{3}{8}$
8.  $4\frac{10}{12}$
9.  $5\frac{2}{4}$
10.  $5\frac{0}{3}$