



Determine which letter best represents the sum.

1) $\frac{8}{10} + \frac{3}{10}$

2) $\frac{6}{10} + \frac{4}{10}$

3) $\frac{1}{2} + \frac{1}{2}$

4) $\frac{7}{10} + \frac{6}{10}$

5) $\frac{5}{10} + \frac{2}{10}$

6) $\frac{4}{6} + \frac{4}{6}$

7) $\frac{2}{8} + \frac{5}{8}$

8) $\frac{1}{5} + \frac{4}{5}$

9) $\frac{2}{5} + \frac{4}{5}$

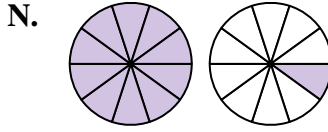
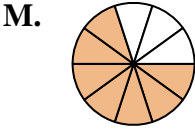
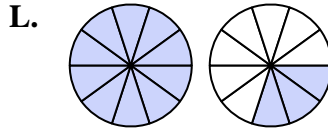
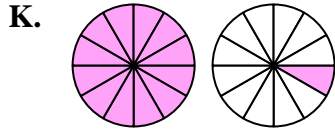
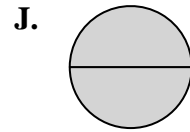
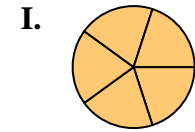
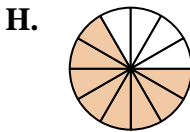
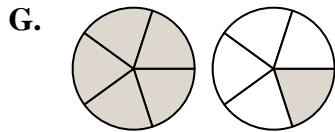
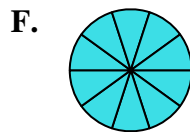
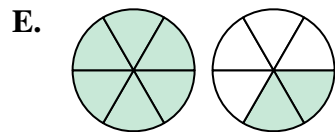
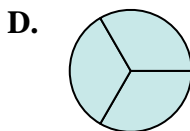
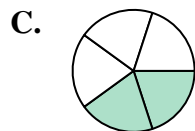
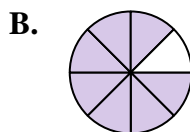
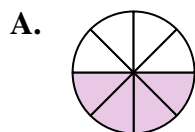
10) $\frac{2}{3} + \frac{1}{3}$

11) $\frac{1}{8} + \frac{3}{8}$

12) $\frac{1}{5} + \frac{1}{5}$

13) $\frac{1}{12} + \frac{7}{12}$

14) $\frac{4}{12} + \frac{9}{12}$



Answers

1. _____

2. _____

3. _____

4. _____

5. _____

6. _____

7. _____

8. _____

9. _____

10. _____

11. _____

12. _____

13. _____

14. _____



Determine which letter best represents the sum.

1) $\frac{8}{10} + \frac{3}{10}$

2) $\frac{6}{10} + \frac{4}{10}$

3) $\frac{1}{2} + \frac{1}{2}$

4) $\frac{7}{10} + \frac{6}{10}$

5) $\frac{5}{10} + \frac{2}{10}$

6) $\frac{4}{6} + \frac{4}{6}$

7) $\frac{2}{8} + \frac{5}{8}$

8) $\frac{1}{5} + \frac{4}{5}$

9) $\frac{2}{5} + \frac{4}{5}$

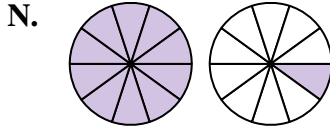
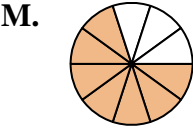
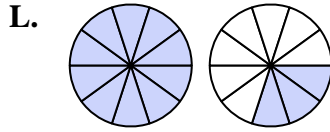
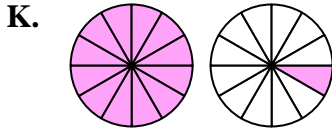
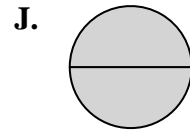
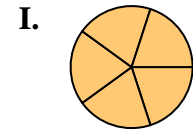
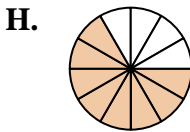
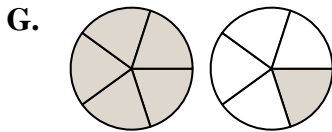
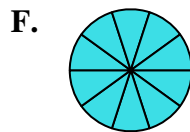
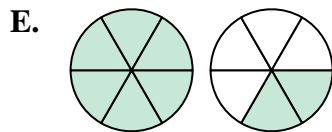
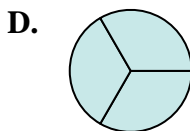
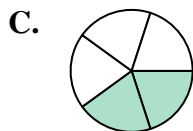
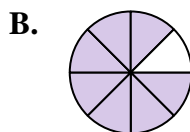
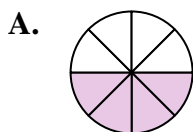
10) $\frac{2}{3} + \frac{1}{3}$

11) $\frac{1}{8} + \frac{3}{8}$

12) $\frac{1}{5} + \frac{1}{5}$

13) $\frac{1}{12} + \frac{7}{12}$

14) $\frac{4}{12} + \frac{9}{12}$



Answers

1. **N** $1\frac{1}{10}$

2. **F** $1\frac{10}{10}$

3. **J** $\frac{2}{2}$

4. **L** $1\frac{3}{10}$

5. **M** $\frac{7}{10}$

6. **E** $1\frac{2}{6}$

7. **B** $\frac{7}{8}$

8. **I** $\frac{5}{5}$

9. **G** $1\frac{1}{5}$

10. **D** $\frac{3}{3}$

11. **A** $\frac{4}{8}$

12. **C** $\frac{2}{5}$

13. **H** $\frac{8}{12}$

14. **K** $1\frac{1}{12}$