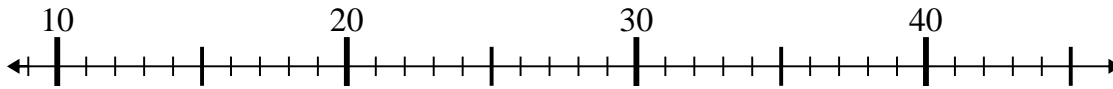




Use the numberlines to solve each problem.

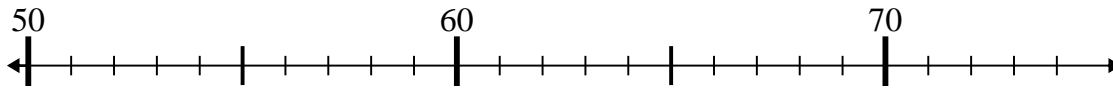
**Answers**

1)  $27 + 16 =$



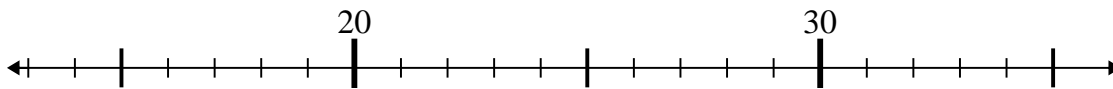
1. \_\_\_\_\_

2)  $56 + 12 =$



2. \_\_\_\_\_

3)  $29 + 2 =$



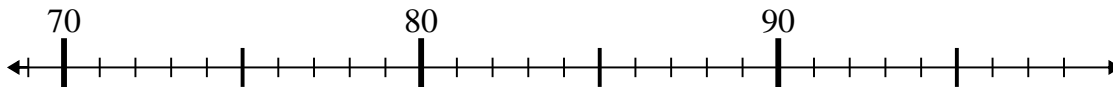
3. \_\_\_\_\_

4)  $19 + 11 =$



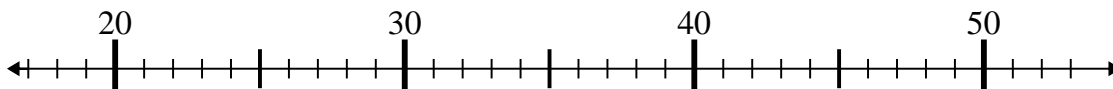
4. \_\_\_\_\_

5)  $82 - 9 =$



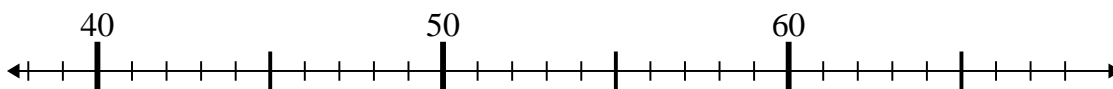
5. \_\_\_\_\_

6)  $35 - 5 =$



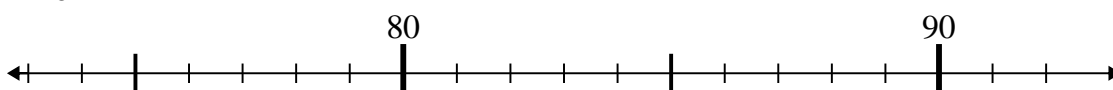
6. \_\_\_\_\_

7)  $65 + 1 =$



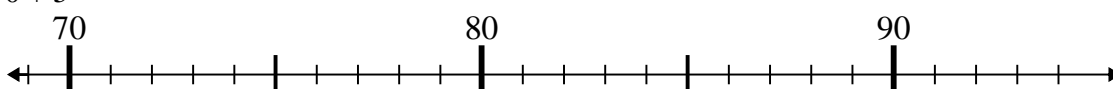
7. \_\_\_\_\_

8)  $74 + 6 =$



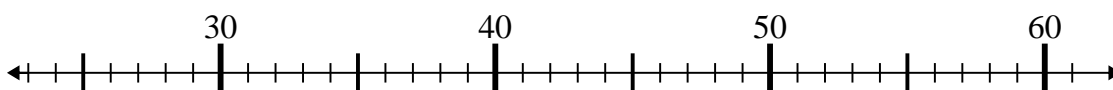
8. \_\_\_\_\_

9)  $70 + 5 =$



9. \_\_\_\_\_

10)  $32 + 2 =$

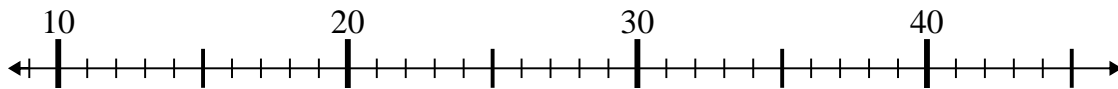


10. \_\_\_\_\_

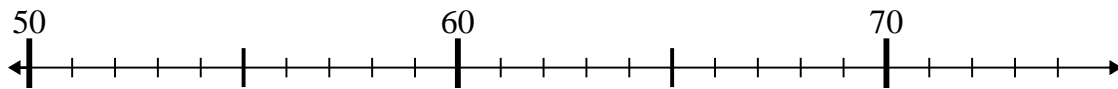


Use the numberlines to solve each problem.

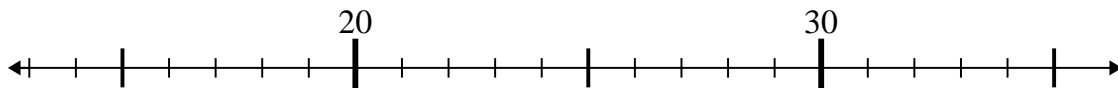
1)  $27 + 16 =$



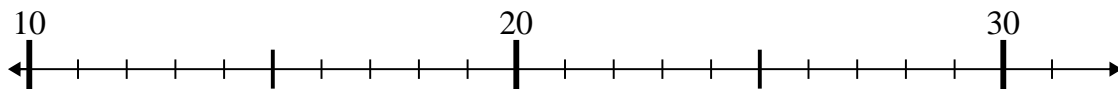
2)  $56 + 12 =$



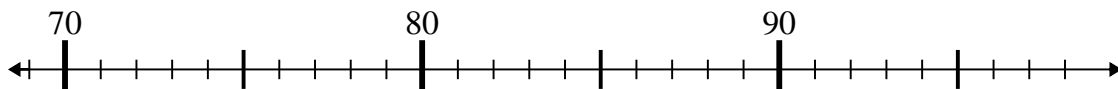
3)  $29 + 2 =$



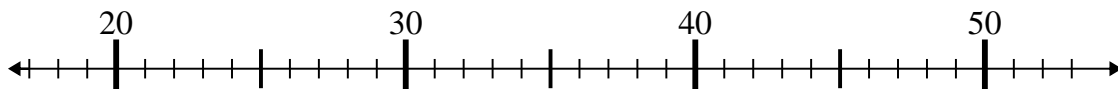
4)  $19 + 11 =$



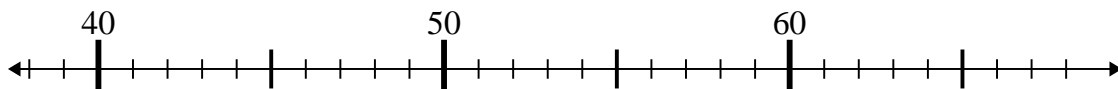
5)  $82 - 9 =$



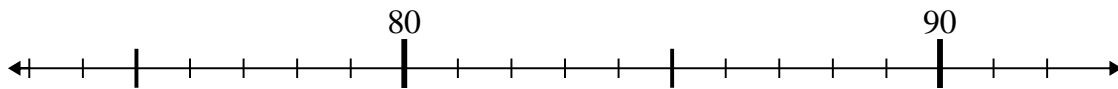
6)  $35 - 5 =$



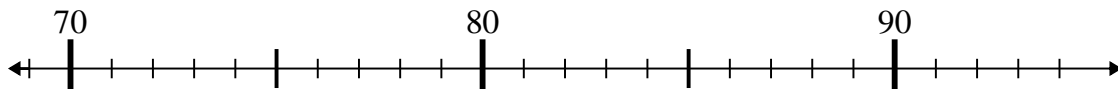
7)  $65 + 1 =$



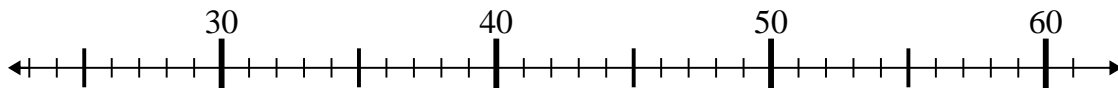
8)  $74 + 6 =$



9)  $70 + 5 =$



10)  $32 + 2 =$



Answers

1. 43

2. 68

3. 31

4. 30

5. 73

6. 30

7. 66

8. 80

9. 75

10. 34