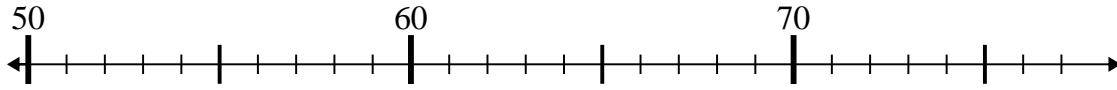




Use the numberlines to solve each problem.

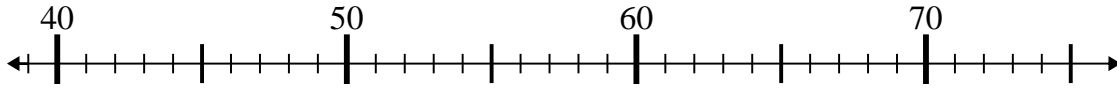
Answers

1) $70 - 16 =$



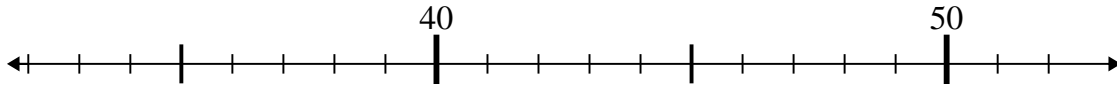
1. _____

2) $39 + 6 =$



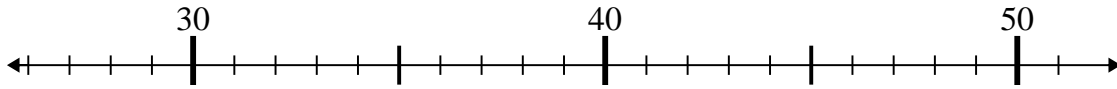
2. _____

3) $46 + 3 =$



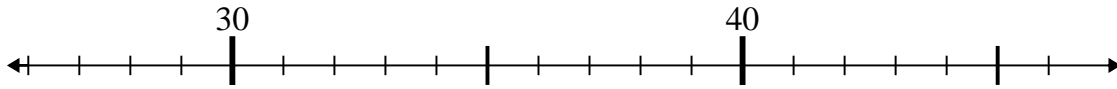
3. _____

4) $31 + 8 =$



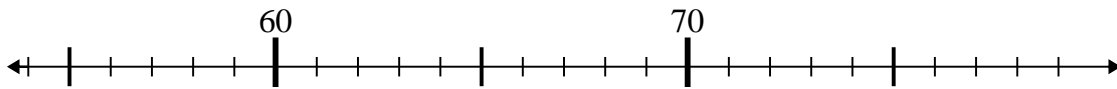
4. _____

5) $36 - 1 =$



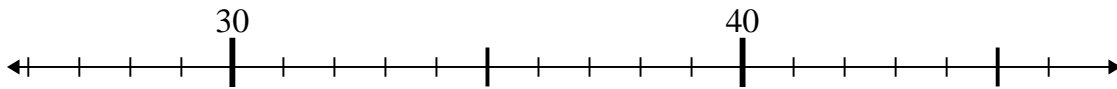
5. _____

6) $70 + 8 =$



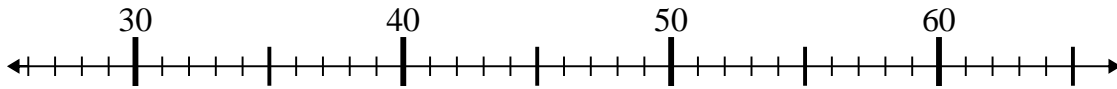
6. _____

7) $46 - 1 =$



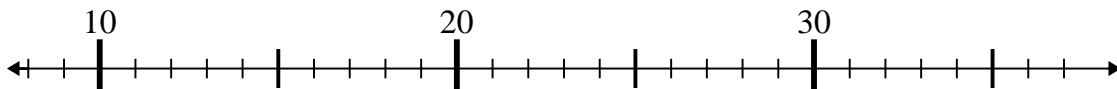
7. _____

8) $27 + 8 =$



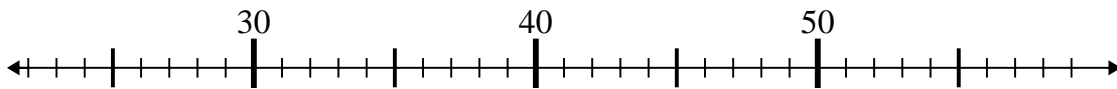
8. _____

9) $18 + 1 =$



9. _____

10) $25 + 3 =$

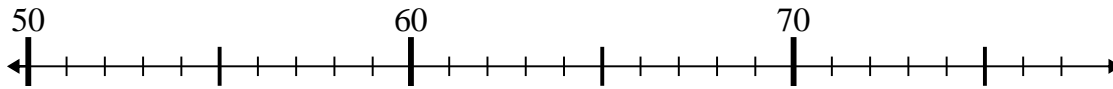


10. _____

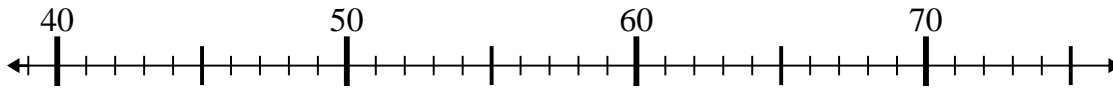


Use the numberlines to solve each problem.

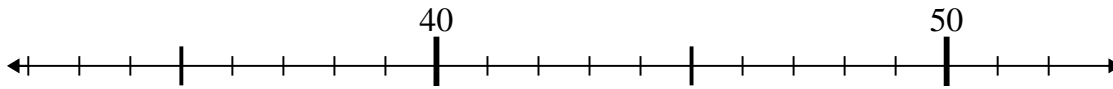
1) $70 - 16 =$



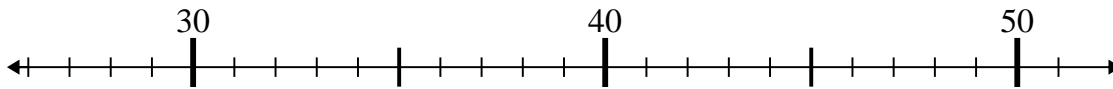
2) $39 + 6 =$



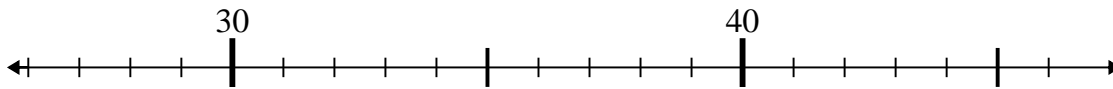
3) $46 + 3 =$



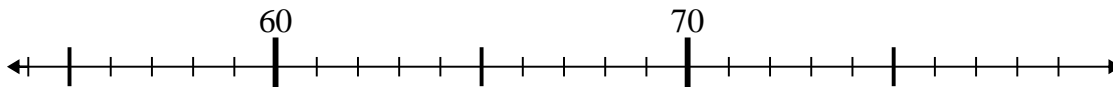
4) $31 + 8 =$



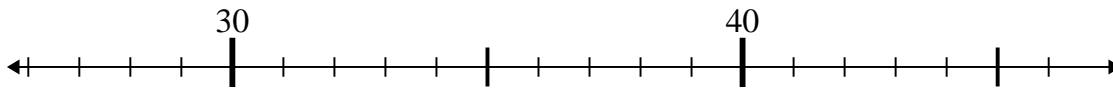
5) $36 - 1 =$



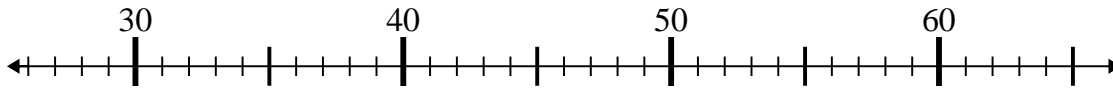
6) $70 + 8 =$



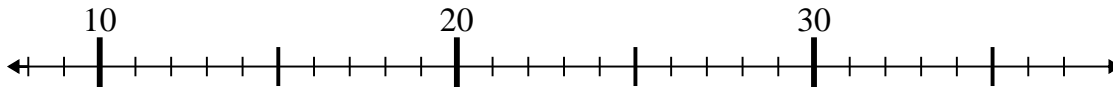
7) $46 - 1 =$



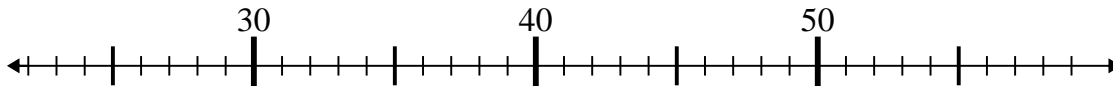
8) $27 + 8 =$



9) $18 + 1 =$



10) $25 + 3 =$



Answers

1. 54

2. 45

3. 49

4. 39

5. 35

6. 78

7. 45

8. 35

9. 19

10. 28