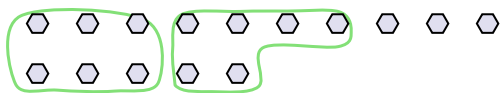




Use the shapes provided to answer the questions.

Answers

Ex) There are 15 shapes below. How many groups of 6 can you make with them? How many will you have left over?



1) There are 26 shapes below. How many groups of 3 can you make with them? How many will you have left over?



Ex. 2 3

1. _____

2. _____

3. _____

4. _____

5. _____

6. _____

7. _____


8. _____

9. _____

2) There are 10 shapes below. How many groups of 3 can you make with them? How many will you have left over?



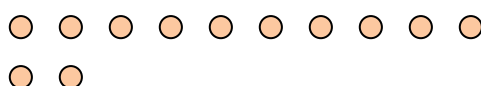
3) There are 30 shapes below. How many groups of 7 can you make with them? How many will you have left over?



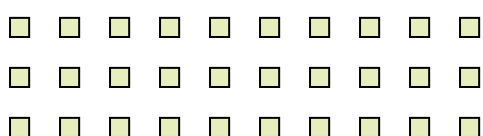
4) There are 10 shapes below. How many groups of 7 can you make with them? How many will you have left over?



5) There are 12 shapes below. How many groups of 8 can you make with them? How many will you have left over?




6) There are 30 shapes below. How many groups of 4 can you make with them? How many will you have left over?



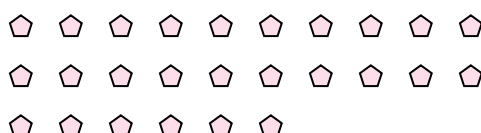
7) There are 11 shapes below. How many groups of 8 can you make with them? How many will you have left over?



8) There are 24 shapes below. How many groups of 7 can you make with them? How many will you have left over?



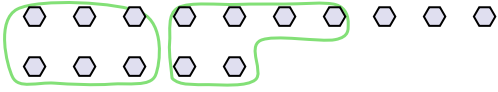
9) There are 26 shapes below. How many groups of 5 can you make with them? How many will you have left over?





Use the shapes provided to answer the questions.

Ex) There are 15 shapes below. How many groups of 6 can you make with them? How many will you have left over?



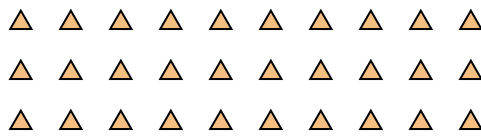
1) There are 26 shapes below. How many groups of 3 can you make with them? How many will you have left over?



2) There are 10 shapes below. How many groups of 3 can you make with them? How many will you have left over?



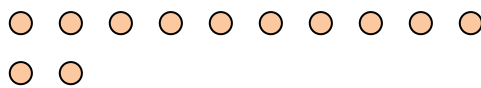
3) There are 30 shapes below. How many groups of 7 can you make with them? How many will you have left over?



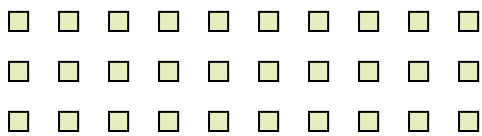
4) There are 10 shapes below. How many groups of 7 can you make with them? How many will you have left over?



5) There are 12 shapes below. How many groups of 8 can you make with them? How many will you have left over?




6) There are 30 shapes below. How many groups of 4 can you make with them? How many will you have left over?



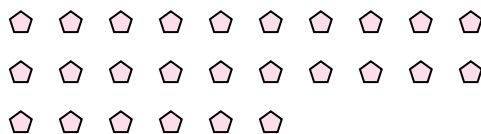
7) There are 11 shapes below. How many groups of 8 can you make with them? How many will you have left over?



8) There are 24 shapes below. How many groups of 7 can you make with them? How many will you have left over?



9) There are 26 shapes below. How many groups of 5 can you make with them? How many will you have left over?



Answers

Ex. 2 3

1. 8 2

2. 3 1

3. 4 2

4. 1 3

5. 1 4

6. 7 2

7. 1 3

8. 3 3

9. 5 1