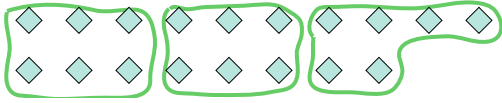
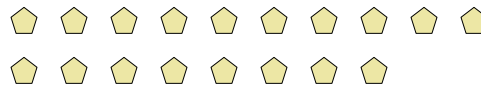
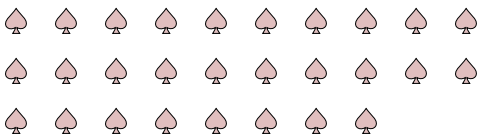

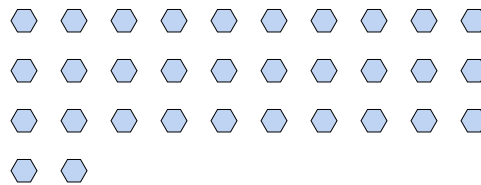
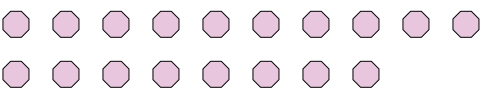
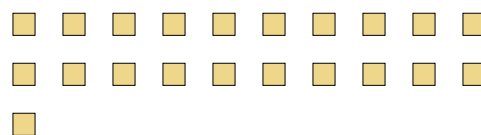

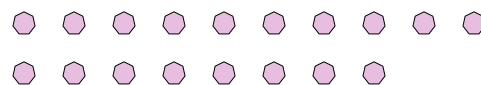







Use the shapes provided to answer the questions.

**Ex)** How many groups of 6 can you make with the 18 shapes below?**1)** How many groups of 6 can you make with the 18 shapes below?**2)** How many groups of 7 can you make with the 28 shapes below?**3)** How many groups of 5 can you make with the 40 shapes below?**4)** How many groups of 2 can you make with the 16 shapes below?**5)** How many groups of 4 can you make with the 32 shapes below?**6)** How many groups of 2 can you make with the 18 shapes below?**7)** How many groups of 3 can you make with the 21 shapes below?**8)** How many groups of 5 can you make with the 35 shapes below?**9)** How many groups of 6 can you make with the 18 shapes below?**10)** How many groups of 8 can you make with the 40 shapes below?**11)** How many groups of 3 can you make with the 30 shapes below?**Answers**Ex. 31. 32. 43. 84. 85. 86. 97. 78. 79. 310. 511. 10