

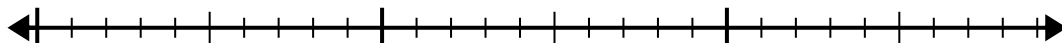


Use the number line to solve the division problem.

1)  $25 \div 6 =$

0

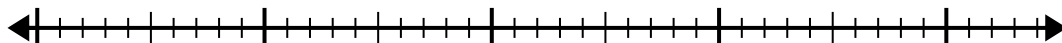
25



2)  $38 \div 7 =$

0

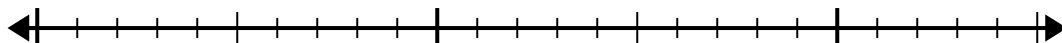
38



3)  $20 \div 6 =$

0

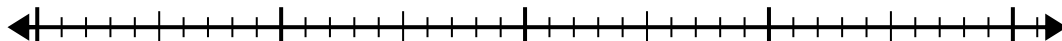
20



4)  $35 \div 6 =$

0

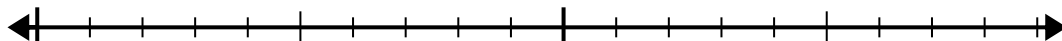
35



5)  $18 \div 5 =$

0


18



6)  $46 \div 6 =$

0

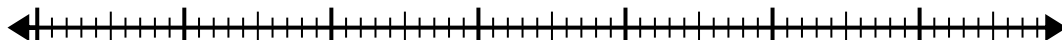
46



7)  $60 \div 8 =$

0

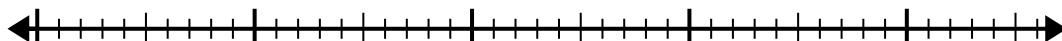
60



8)  $45 \div 7 =$

0

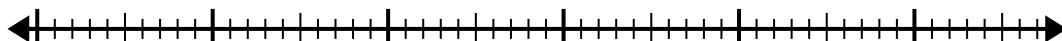
45



9)  $53 \div 8 =$

0

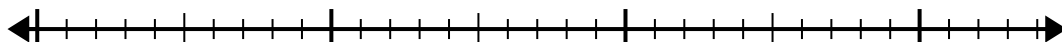
53



10)  $29 \div 4 =$

0

29



Answers

1. \_\_\_\_\_

2. \_\_\_\_\_

3. \_\_\_\_\_

4. \_\_\_\_\_

5. \_\_\_\_\_

6. \_\_\_\_\_

7. \_\_\_\_\_

8. \_\_\_\_\_

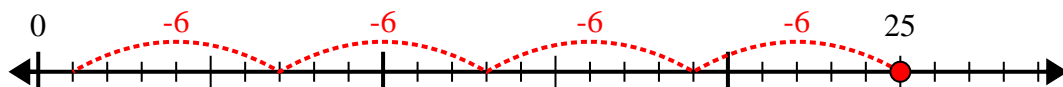
9. \_\_\_\_\_

10. \_\_\_\_\_

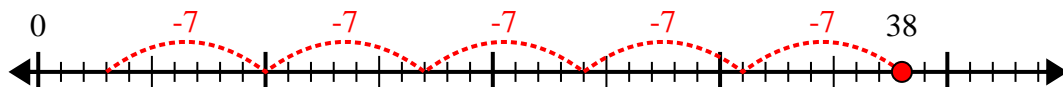


Use the number line to solve the division problem.

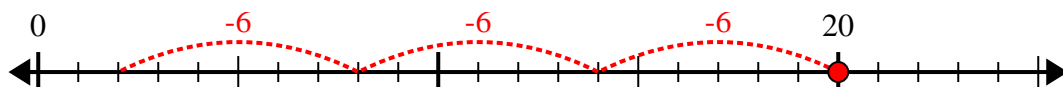
1)  $25 \div 6 =$



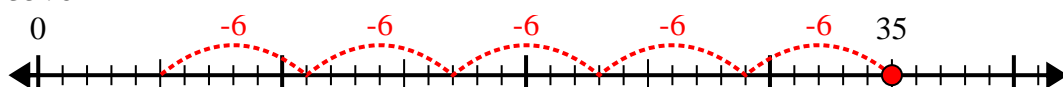
2)  $38 \div 7 =$



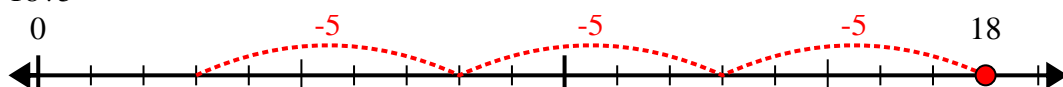
3)  $20 \div 6 =$



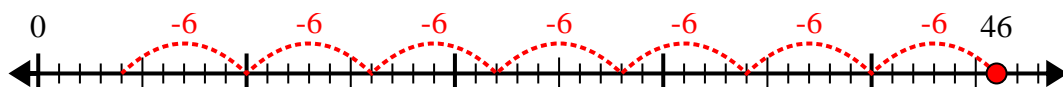
4)  $35 \div 6 =$



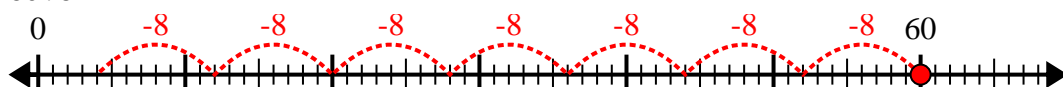
5)  $18 \div 5 =$



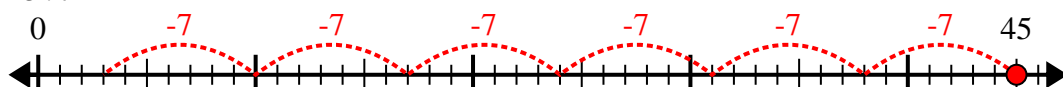
6)  $46 \div 6 =$



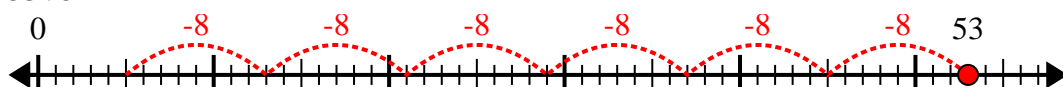
7)  $60 \div 8 =$



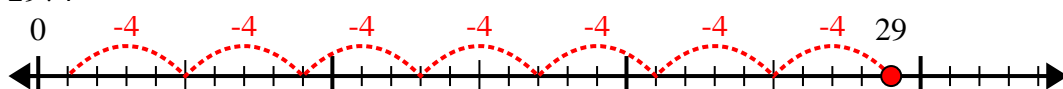
8)  $45 \div 7 =$



9)  $53 \div 8 =$



10)  $29 \div 4 =$



Answers

1. 4r1

2. 5r3

3. 3r2

4. 5r5

5. 3r3

6. 7r4

7. 7r4

8. 6r3

9. 6r5

10. 7r1