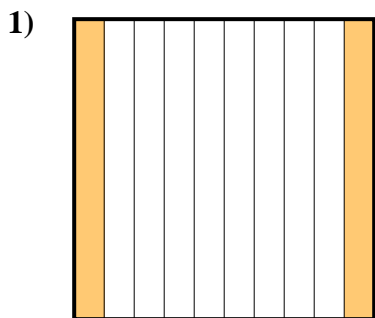




Determine which letter best represents the amount shaded of the whole.

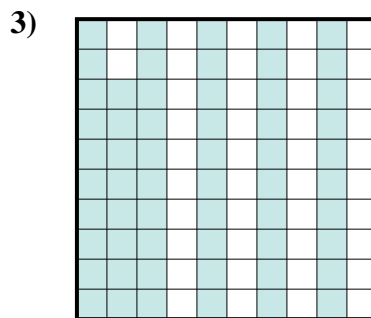
Answers



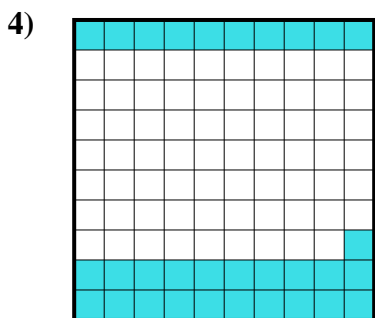
- A. 2
- B. 0.02
- C. 0.2
- D. 20



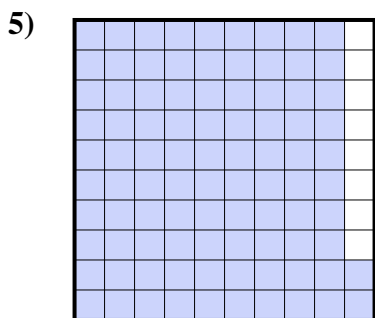
- A. 600.00
- B. 0.06
- C. 0.6
- D. 60



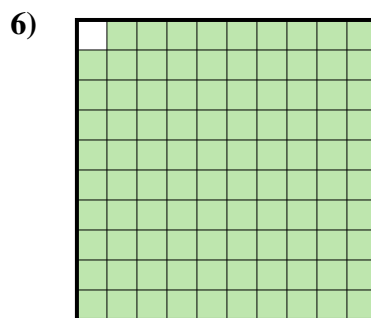
- A. 580.00
- B. 0.058
- C. 580.0
- D. 0.58



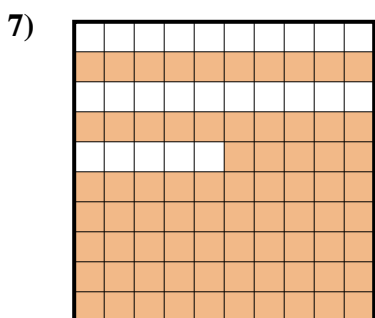
- A. 0.31
- B. 310.00
- C. 3.1
- D. 31



- A. 92
- B. 920.00
- C. 920.0
- D. 0.92



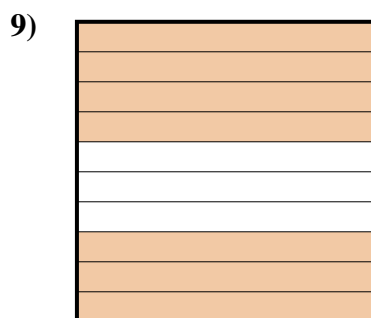
- A. 990.0
- B. 0.099
- C. 0.99
- D. 9.9



- A. 0.75
- B. 750.00
- C. 750.0
- D. 7.5



- A. 50
- B. 0.5
- C. 500.0
- D. 5



- A. 700.00
- B. 0.7
- C. 70
- D. 7

1. _____

2. _____

3. _____

4. _____

5. _____

6. _____

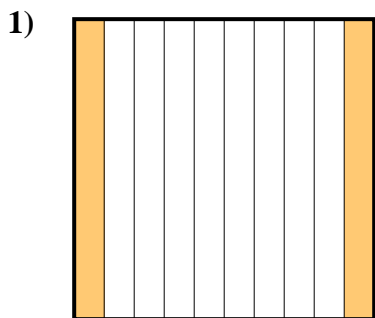
7. _____

8. _____

9. _____



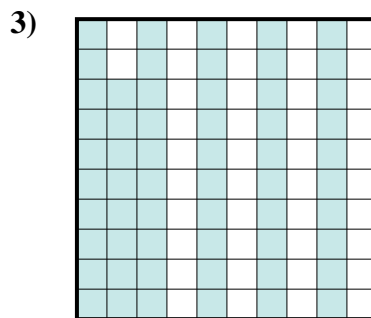
Determine which letter best represents the amount shaded of the whole.



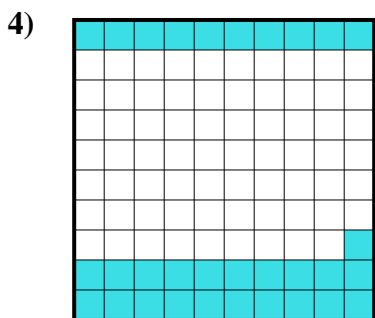
- A. 2
- B. 0.02
- C. 0.2
- D. 20



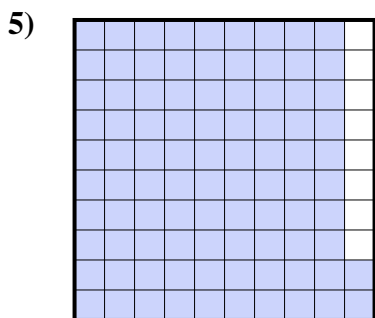
- A. 600.00
- B. 0.06
- C. 0.6
- D. 60



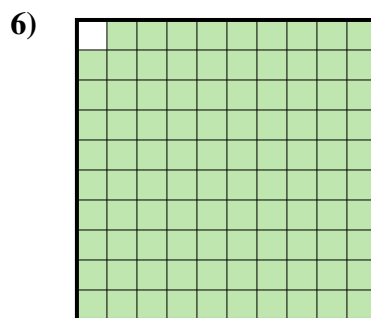
- A. 580.00
- B. 0.058
- C. 580.0
- D. 0.58



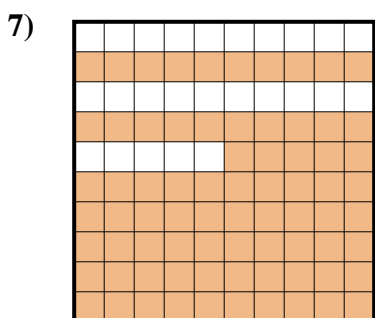
- A. 0.31
- B. 310.00
- C. 3.1
- D. 31



- A. 92
- B. 920.00
- C. 920.0
- D. 0.92



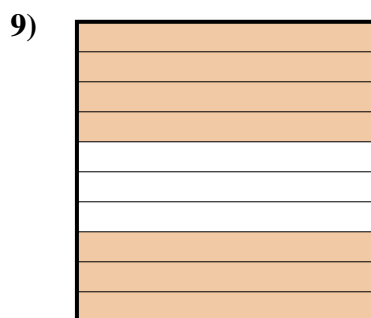
- A. 990.0
- B. 0.099
- C. 0.99
- D. 9.9



- A. 0.75
- B. 750.00
- C. 750.0
- D. 7.5



- A. 50
- B. 0.5
- C. 500.0
- D. 5



- A. 700.00
- B. 0.7
- C. 70
- D. 7

Answers

- 1. **C**
- 2. **C**
- 3. **D**
- 4. **A**
- 5. **D**
- 6. **C**
- 7. **A**
- 8. **B**
- 9. **B**