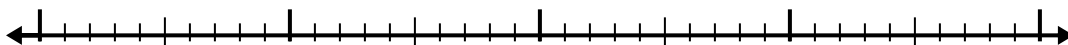


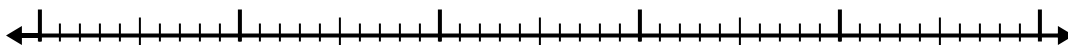


Use the number line to solve each problem.

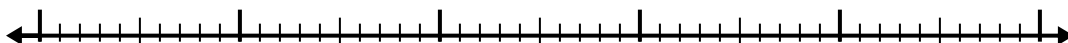
1)  $9.6 - 2.2 =$




2)  $7.7 - 2.3 =$



3)  $7.6 - 2.9 =$



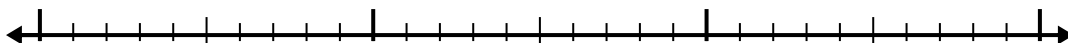
4)  $8.1 - 3.7 =$



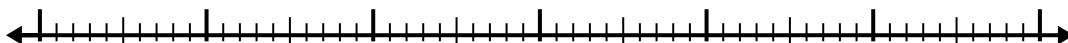
5)  $4.5 - 2.3 =$




6)  $5.2 - 1.3 =$




7)  $4.9 - 3.9 =$



8)  $7.9 - 2.1 =$



9)  $8.6 - 2.3 =$



10)  $10.2 - 2.9 =$



Answers

1. \_\_\_\_\_

2. \_\_\_\_\_

3. \_\_\_\_\_

4. \_\_\_\_\_

5. \_\_\_\_\_

6. \_\_\_\_\_

7. \_\_\_\_\_

8. \_\_\_\_\_

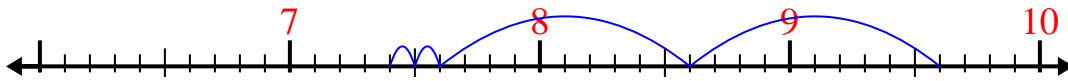
9. \_\_\_\_\_

10. \_\_\_\_\_

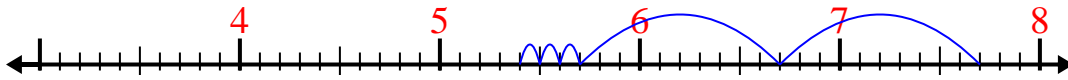


Use the number line to solve each problem.

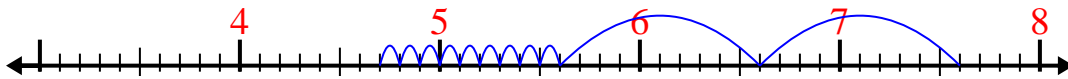
1)  $9.6 - 2.2 =$




2)  $7.7 - 2.3 =$



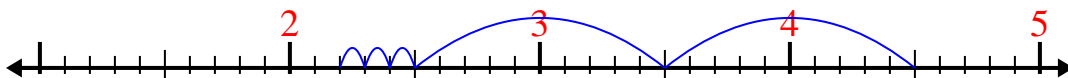
3)  $7.6 - 2.9 =$



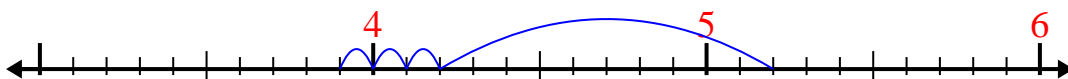
4)  $8.1 - 3.7 =$



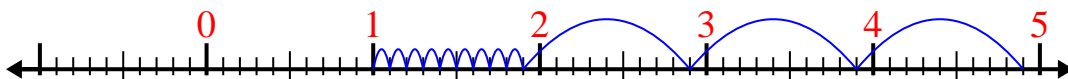
5)  $4.5 - 2.3 =$



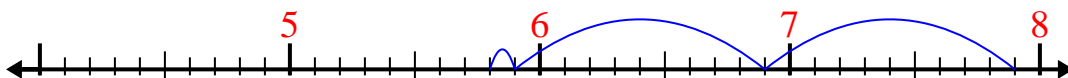
6)  $5.2 - 1.3 =$



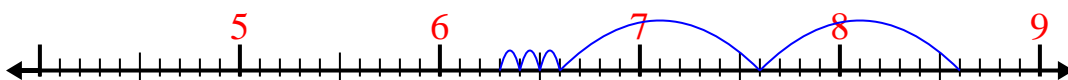
7)  $4.9 - 3.9 =$



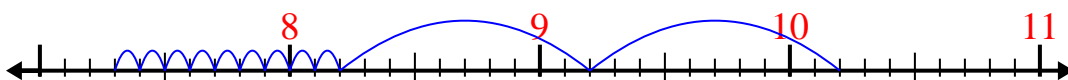
8)  $7.9 - 2.1 =$



9)  $8.6 - 2.3 =$



10)  $10.2 - 2.9 =$

Answers1. 7.42. 5.43. 4.74. 4.45. 2.26. 3.97. 18. 5.89. 6.310. 7.3