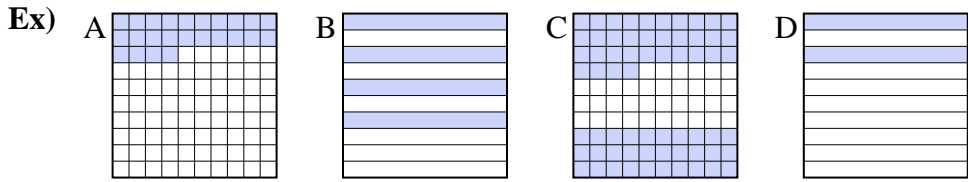




Put the boxes in order from least to greatest based on the shaded amount.

**Answers**



small 0.2 - D  
0.24 - A  
0.4 - B  
 large 0.64 - C

Ex. D,A,B,C

1. \_\_\_\_\_

2. \_\_\_\_\_

3. \_\_\_\_\_

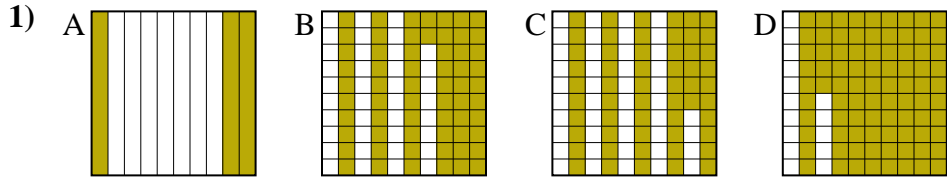
4. \_\_\_\_\_

5. \_\_\_\_\_

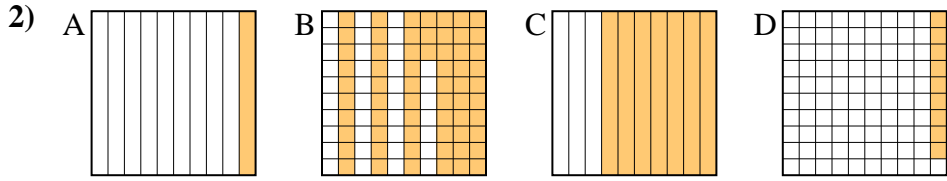
6. \_\_\_\_\_

7. \_\_\_\_\_

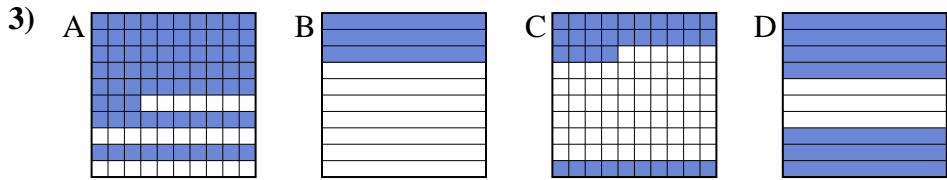
8. \_\_\_\_\_



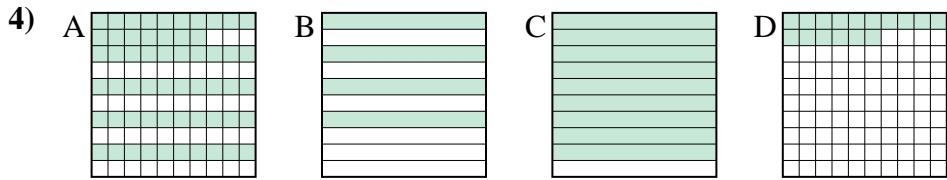
small \_\_\_\_\_  
 \_\_\_\_\_  
 \_\_\_\_\_  
 large \_\_\_\_\_



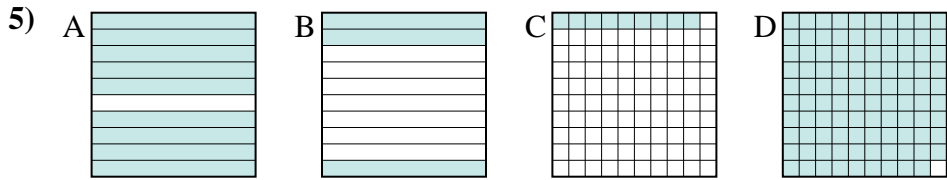
small \_\_\_\_\_  
 \_\_\_\_\_  
 \_\_\_\_\_  
 large \_\_\_\_\_



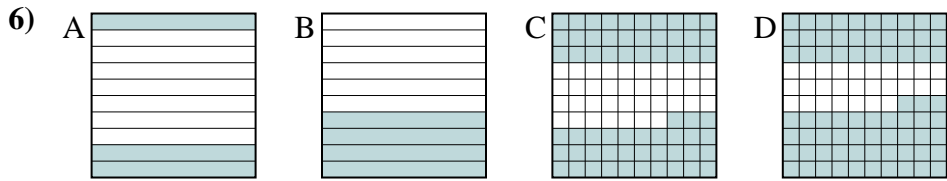
small \_\_\_\_\_  
 \_\_\_\_\_  
 \_\_\_\_\_  
 large \_\_\_\_\_



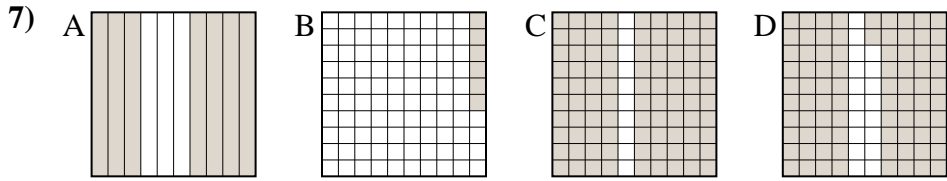
small \_\_\_\_\_  
 \_\_\_\_\_  
 \_\_\_\_\_  
 large \_\_\_\_\_



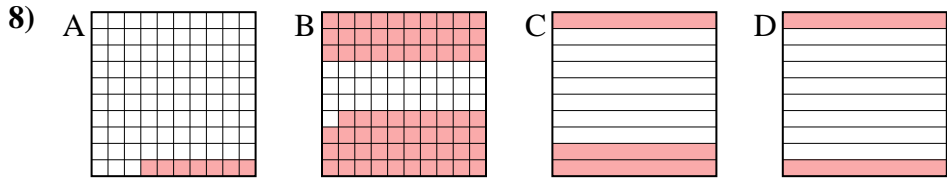
small \_\_\_\_\_  
 \_\_\_\_\_  
 \_\_\_\_\_  
 large \_\_\_\_\_



small \_\_\_\_\_  
 \_\_\_\_\_  
 \_\_\_\_\_  
 large \_\_\_\_\_



small \_\_\_\_\_  
 \_\_\_\_\_  
 \_\_\_\_\_  
 large \_\_\_\_\_



small \_\_\_\_\_  
 \_\_\_\_\_  
 \_\_\_\_\_  
 large \_\_\_\_\_



Put the boxes in order from least to greatest based on the shaded amount.

Ex) A B C D small  $\frac{0.2}{0.24}{0.4}{0.64}$  - D - A - B - C  
large

1) A B C D small  $\frac{0.3}{0.56}{0.62}{0.85}$  - A - C - B - D  
large

2) A B C D small  $\frac{0.09}{0.1}{0.63}{0.7}$  - D - A - B - C  
large

3) A B C D small  $\frac{0.3}{0.34}{0.7}{0.73}$  - B - C - D - A  
large

4) A B C D small  $\frac{0.16}{0.4}{0.57}{0.9}$  - D - B - A - C  
large

5) A B C D small  $\frac{0.09}{0.3}{0.9}{0.99}$  - C - B - A - D  
large

6) A B C D small  $\frac{0.3}{0.4}{0.63}{0.73}$  - A - B - C - D  
large

7) A B C D small  $\frac{0.06}{0.7}{0.82}{0.9}$  - B - A - D - C  
large

8) A B C D small  $\frac{0.07}{0.2}{0.3}{0.69}$  - A - D - C - B  
large

Answers

- Ex. D,A,B,C
1. A,C,B,D
2. D,A,B,C
3. B,C,D,A
4. D,B,A,C
5. C,B,A,D
6. A,B,C,D
7. B,A,D,C
8. A,D,C,B