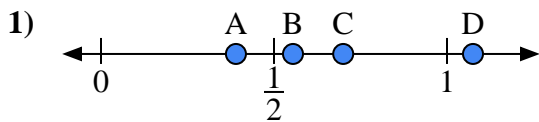


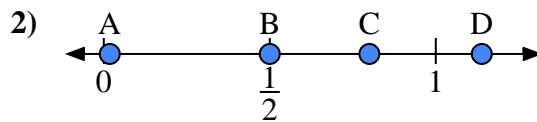


Use the number lines to answer the questions.

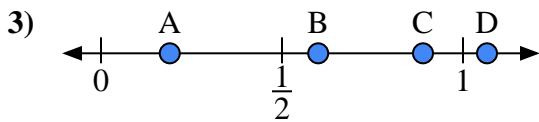
Answers



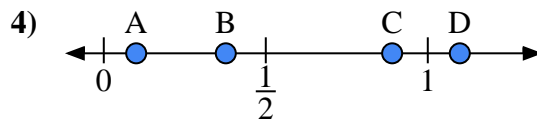
- a) Which letter best represents the location of 0.7?
- b) Which letter best represents the location of 0.39?



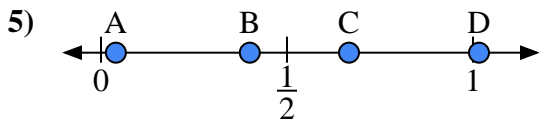
- a) Which letter best represents the location of 0.80?
- b) Which letter best represents the location of 0.50?



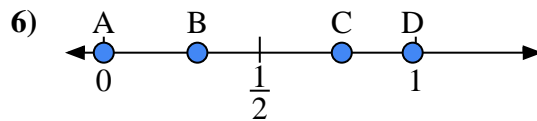
- a) Which letter best represents the location of 0.60?
- b) Which letter best represents the location of 0.19?



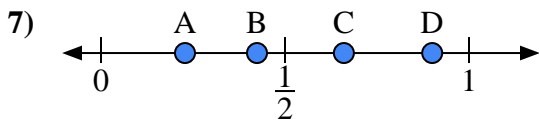
- a) Which letter best represents the location of 0.10?
- b) Which letter best represents the location of 0.89?



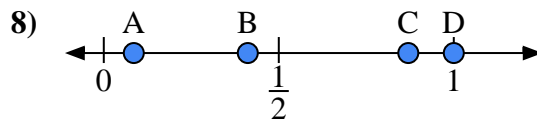
- a) Which letter best represents the location of 0.40?
- b) Which letter best represents the location of 0.04?



- a) Which letter best represents the location of 0.30?
- b) Which letter best represents the location of 0.99?



- a) Which letter best represents the location of 0.9?
- b) Which letter best represents the location of 0.66?

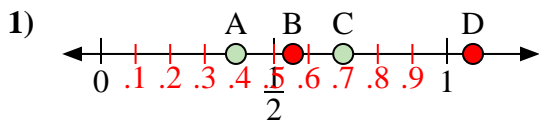


- a) Which letter best represents the location of 1.0?
- b) Which letter best represents the location of 0.87?

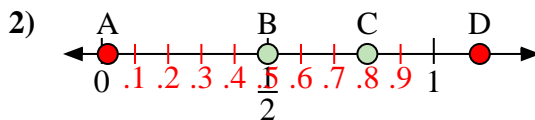
- 1. _____
- 2. _____
- 3. _____
- 4. _____
- 5. _____
- 6. _____
- 7. _____
- 8. _____



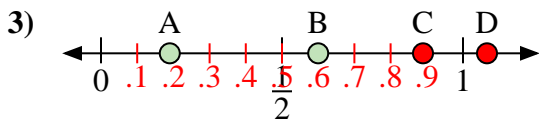
Use the number lines to answer the questions.



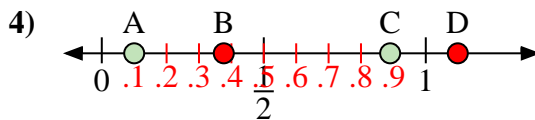
- a) Which letter best represents the location of 0.7?
- b) Which letter best represents the location of 0.39?



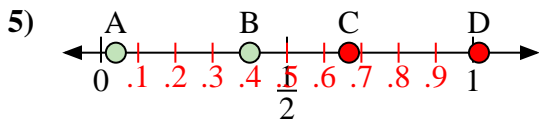
- a) Which letter best represents the location of 0.80?
- b) Which letter best represents the location of 0.50?



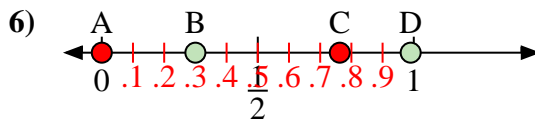
- a) Which letter best represents the location of 0.60?
- b) Which letter best represents the location of 0.19?



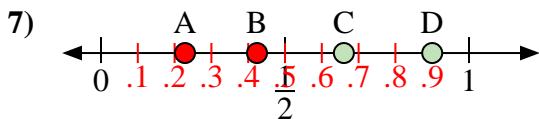
- a) Which letter best represents the location of 0.10?
- b) Which letter best represents the location of 0.89?



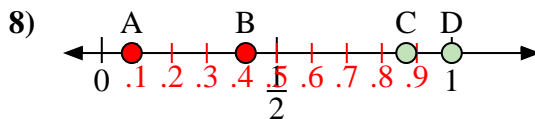
- a) Which letter best represents the location of 0.40?
- b) Which letter best represents the location of 0.04?



- a) Which letter best represents the location of 0.30?
- b) Which letter best represents the location of 0.99?



- a) Which letter best represents the location of 0.9?
- b) Which letter best represents the location of 0.66?



- a) Which letter best represents the location of 1.0?
- b) Which letter best represents the location of 0.87?

Answers

- 1. C A
- 2. C B
- 3. B A
- 4. A C
- 5. B A
- 6. B D
- 7. D C
- 8. D C