



Use the visual model to solve each problem.

1) $0.3 \times 0.5 =$




2) $0.7 \times 0.4 =$




3) $0.1 \times 0.3 =$




4) $0.4 \times 0.4 =$




5) $0.6 \times 0.2 =$




6) $0.1 \times 0.6 =$




7) $0.8 \times 0.3 =$



8) $0.2 \times 0.5 =$



9) $0.1 \times 0.4 =$




10) $0.4 \times 0.9 =$




11) $0.5 \times 0.7 =$




12) $0.3 \times 0.2 =$




13) $0.2 \times 0.2 =$



14) $0.7 \times 0.6 =$



15) $0.3 \times 0.6 =$



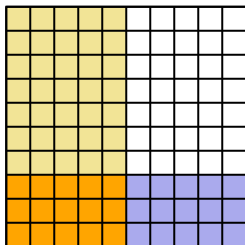
Answers

- 1. _____
- 2. _____
- 3. _____
- 4. _____
- 5. _____
- 6. _____
- 7. _____
- 8. _____
- 9. _____
- 10. _____
- 11. _____
- 12. _____
- 13. _____
- 14. _____
- 15. _____

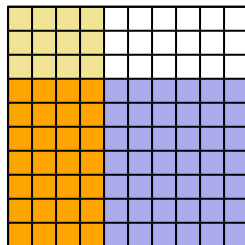


Use the visual model to solve each problem.

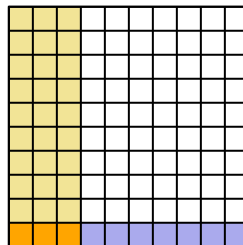
1) $0.3 \times 0.5 =$



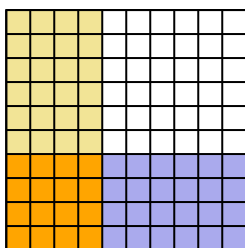
2) $0.7 \times 0.4 =$



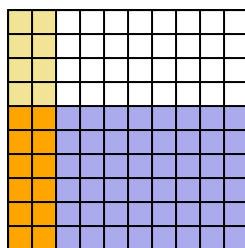
3) $0.1 \times 0.3 =$



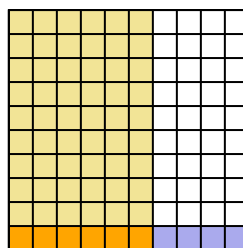
4) $0.4 \times 0.4 =$



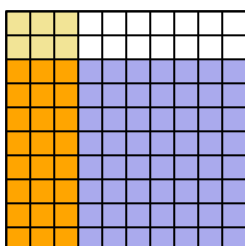
5) $0.6 \times 0.2 =$



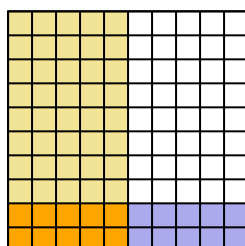
6) $0.1 \times 0.6 =$



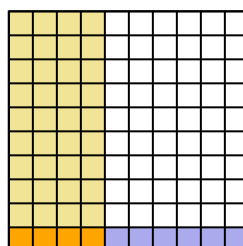
7) $0.8 \times 0.3 =$



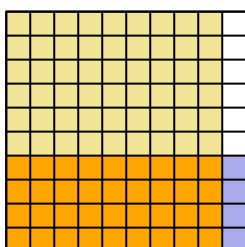
8) $0.2 \times 0.5 =$



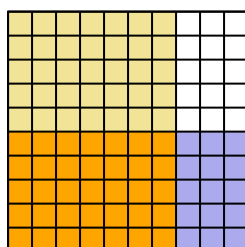
9) $0.1 \times 0.4 =$



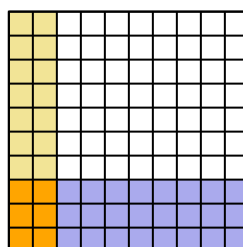
10) $0.4 \times 0.9 =$



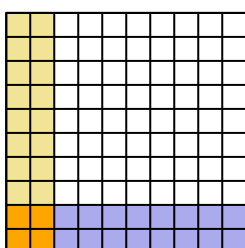
11) $0.5 \times 0.7 =$



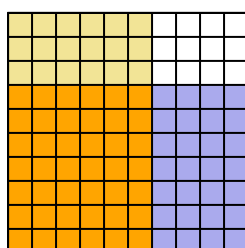
12) $0.3 \times 0.2 =$



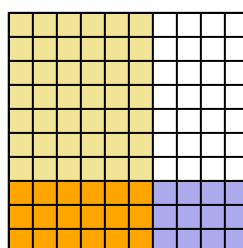
13) $0.2 \times 0.2 =$



14) $0.7 \times 0.6 =$



15) $0.3 \times 0.6 =$



Answers

1. $\frac{15}{100} = 0.15$
2. $\frac{28}{100} = 0.28$
3. $\frac{3}{100} = 0.03$
4. $\frac{16}{100} = 0.16$
5. $\frac{12}{100} = 0.12$
6. $\frac{6}{100} = 0.06$
7. $\frac{24}{100} = 0.24$
8. $\frac{10}{100} = 0.1$
9. $\frac{4}{100} = 0.04$
10. $\frac{36}{100} = 0.36$
11. $\frac{35}{100} = 0.35$
12. $\frac{6}{100} = 0.06$
13. $\frac{4}{100} = 0.04$
14. $\frac{42}{100} = 0.42$
15. $\frac{18}{100} = 0.18$